





Usa el modelo visual para resolver cada problema.

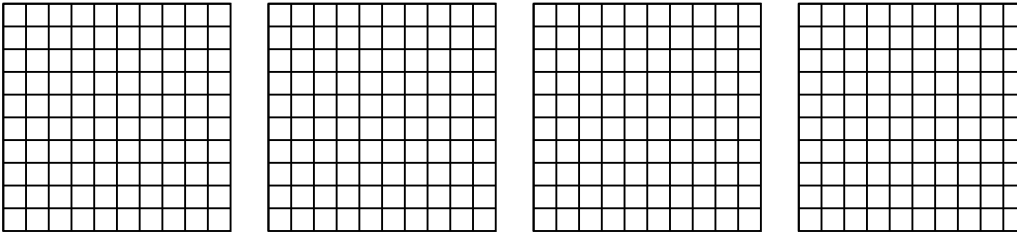
1) $3 \times 0.17 =$



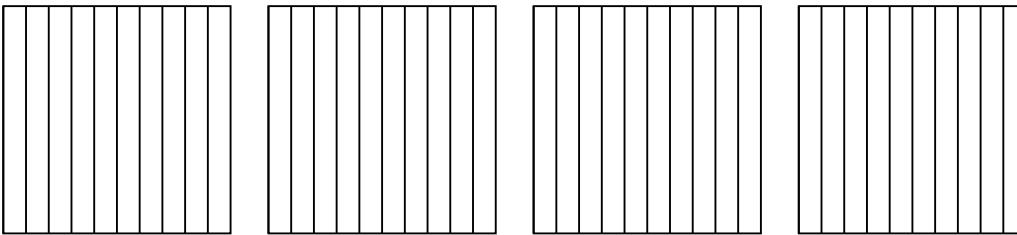
2) $3 \times 0.63 =$



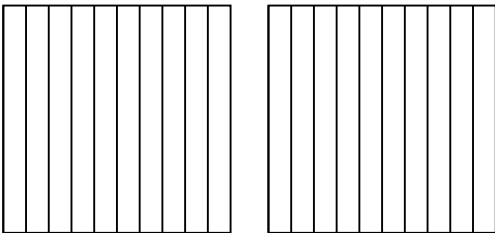
3) $4 \times 0.86 =$



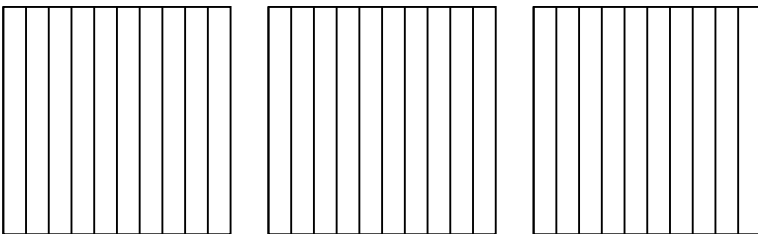
4) $4 \times 0.5 =$



5) $2 \times 0.4 =$



6) $3 \times 0.2 =$



Respuestas

1. _____

2. _____

3. _____

4. _____

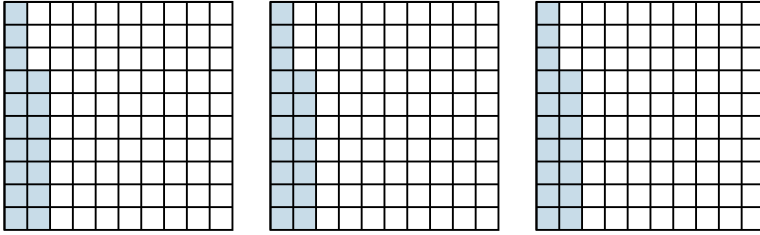
5. _____

6. _____

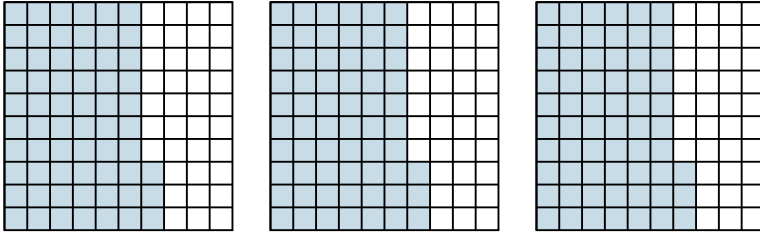


Usa el modelo visual para resolver cada problema.

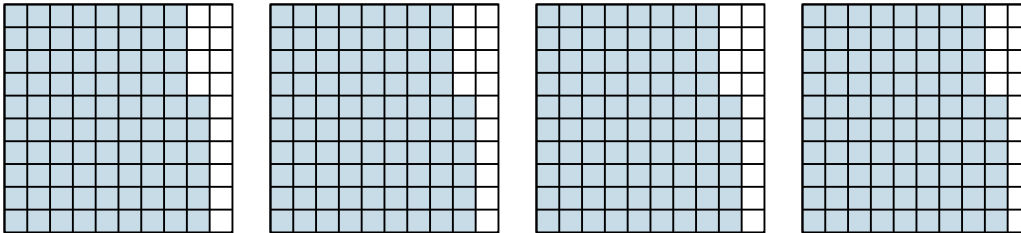
1) $3 \times 0.17 =$



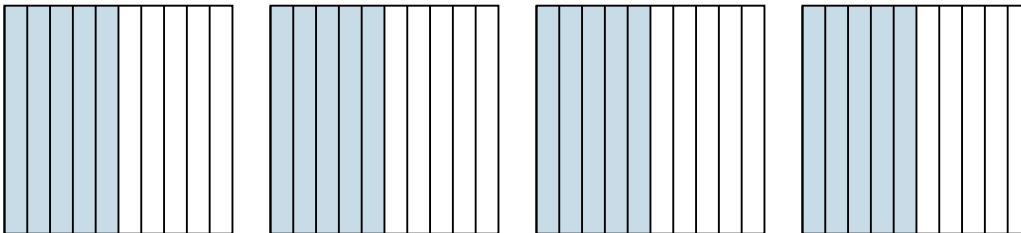
2) $3 \times 0.63 =$



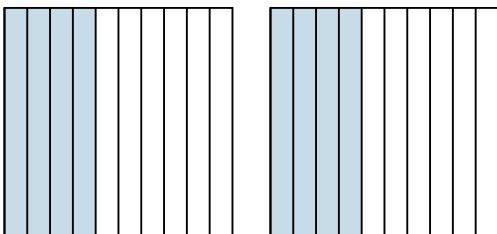
3) $4 \times 0.86 =$




4) $4 \times 0.5 =$



5) $2 \times 0.4 =$



6) $3 \times 0.2 =$



Respuestas

1. $\frac{51}{100} = 0.51$

2. $\frac{189}{100} = 1.89$

3. $\frac{344}{100} = 3.44$

4. $\frac{20}{10} = 2$

5. $\frac{8}{10} = 0.8$

6. $\frac{6}{10} = 0.6$