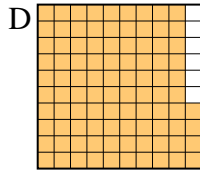
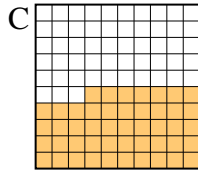
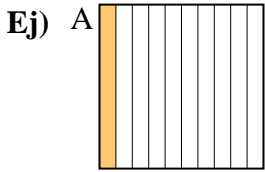





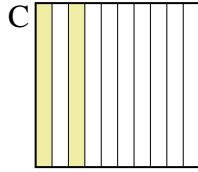
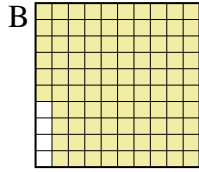
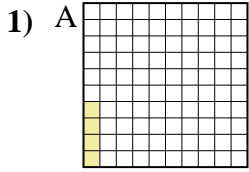
Pon las cajas en orden de la menor a la mayor basado en la cantidad sombreada.

**Respuestas**



Menor 0.1 - A  
0.3 - B  
0.47 - C  
 Mayor 0.94 - D

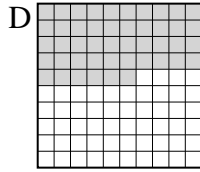
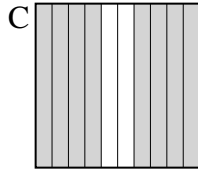
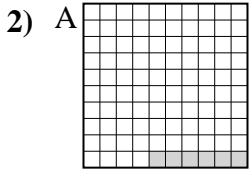
Ej. A,B,C,D



Menor \_\_\_\_\_  
 Mayor \_\_\_\_\_

1. \_\_\_\_\_

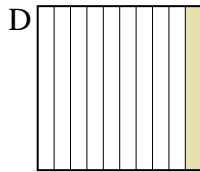
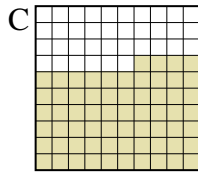
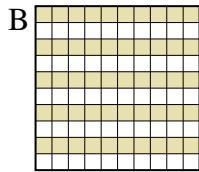
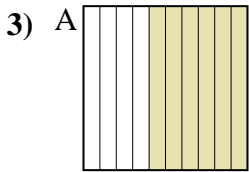
2. \_\_\_\_\_



Menor \_\_\_\_\_  
 Mayor \_\_\_\_\_

3. \_\_\_\_\_

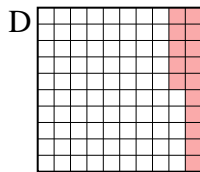
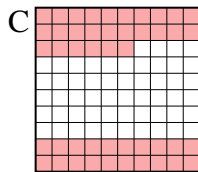

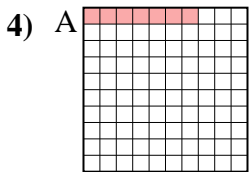
4. \_\_\_\_\_



Menor \_\_\_\_\_  
 Mayor \_\_\_\_\_

5. \_\_\_\_\_

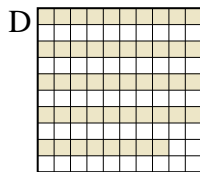
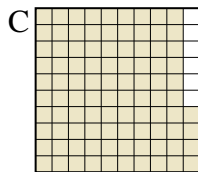

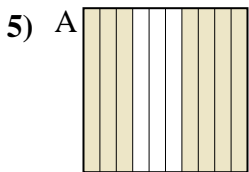
6. \_\_\_\_\_



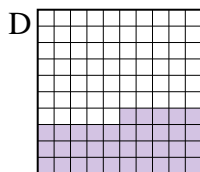

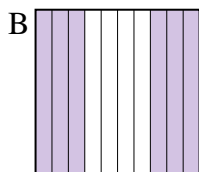
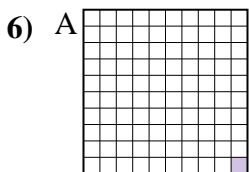
Menor \_\_\_\_\_  
 Mayor \_\_\_\_\_

7. \_\_\_\_\_

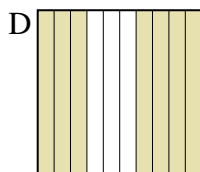
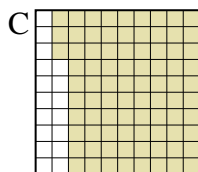
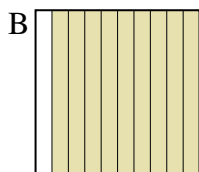
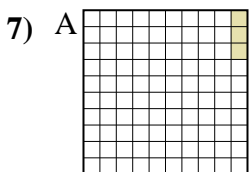
8. \_\_\_\_\_




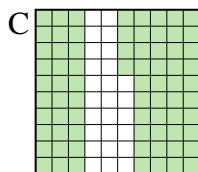
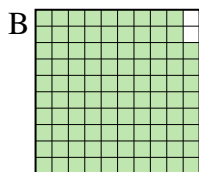
Menor \_\_\_\_\_  
 Mayor \_\_\_\_\_



Menor \_\_\_\_\_  
 Mayor \_\_\_\_\_



Menor \_\_\_\_\_  
 Mayor \_\_\_\_\_



Menor \_\_\_\_\_  
 Mayor \_\_\_\_\_



Pon las cajas en orden de la menor a la mayor basado en la cantidad sombreada.

Ej)	A	B	C	D	Menor <u>0.1 - A</u> <u>0.3 - B</u> <u>0.47 - C</u> Mayor <u>0.94 - D</u>
1)	A	B	C	D	Menor <u>0.04 - A</u> <u>0.2 - C</u> <u>0.5 - D</u> Mayor <u>0.96 - B</u>
2)	A	B	C	D	Menor <u>0.06 - A</u> <u>0.46 - D</u> <u>0.5 - B</u> Mayor <u>0.8 - C</u>
3)	A	B	C	D	Menor <u>0.1 - D</u> <u>0.50 - B</u> <u>0.6 - A</u> Mayor <u>0.64 - C</u>
4)	A	B	C	D	Menor <u>0.07 - A</u> <u>0.1 - B</u> <u>0.15 - D</u> Mayor <u>0.46 - C</u>
5)	A	B	C	D	Menor <u>0.3 - B</u> <u>0.48 - D</u> <u>0.7 - A</u> Mayor <u>0.94 - C</u>
6)	A	B	C	D	Menor <u>0.01 - A</u> <u>0.3 - C</u> <u>0.35 - D</u> Mayor <u>0.6 - B</u>
7)	A	B	C	D	Menor <u>0.03 - A</u> <u>0.7 - D</u> <u>0.83 - C</u> Mayor <u>0.9 - B</u>
8)	A	B	C	D	Menor <u>0.2 - D</u> <u>0.3 - A</u> <u>0.74 - C</u> Mayor <u>0.98 - B</u>

**Respuestas**

- Ej. A,B,C,D
1. A,C,D,B
2. A,D,B,C
3. D,B,A,C
4. A,B,D,C
5. B,D,A,C
6. A,C,D,B
7. A,D,C,B
8. D,A,C,B