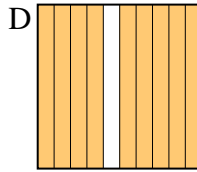
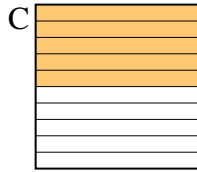
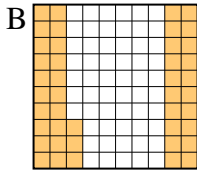
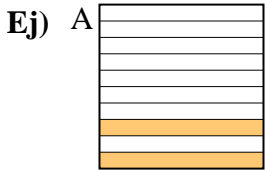




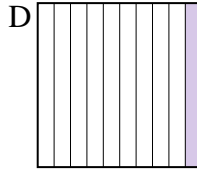
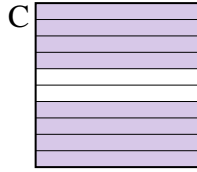
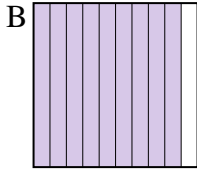
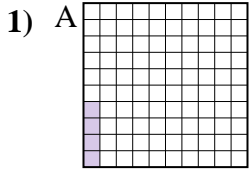
Pon las cajas en orden de la menor a la mayor basado en la cantidad sombreada.



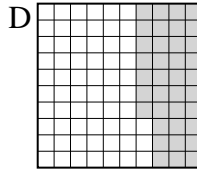
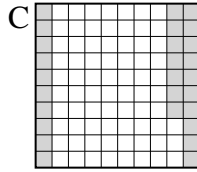
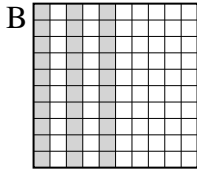
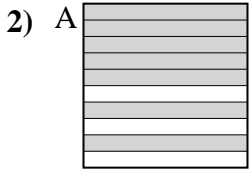
Menor 0.2 - A  
0.43 - B  
0.5 - C  
 Mayor 0.9 - D

**Respuestas**

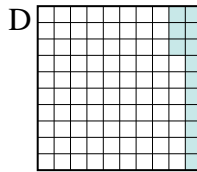
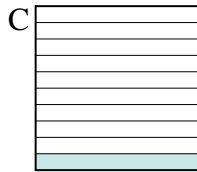
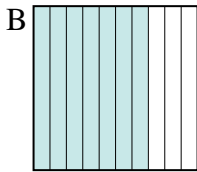
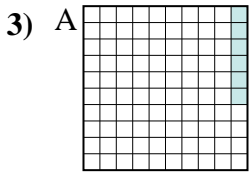
Ej. A,B,C,D



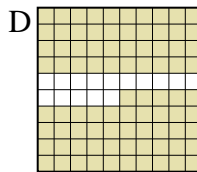
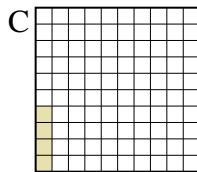
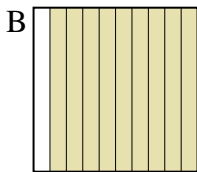
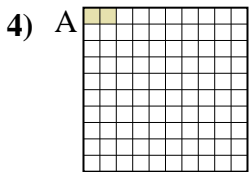
Menor \_\_\_\_\_  
 \_\_\_\_\_  
 Mayor \_\_\_\_\_



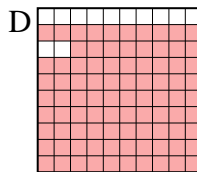
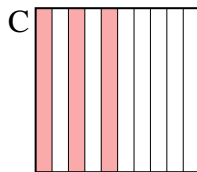
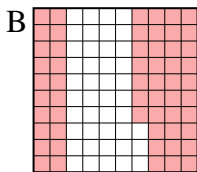
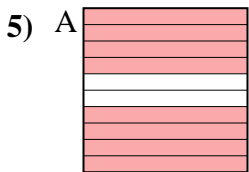
Menor \_\_\_\_\_  
 \_\_\_\_\_  
 Mayor \_\_\_\_\_



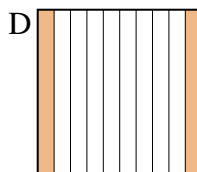
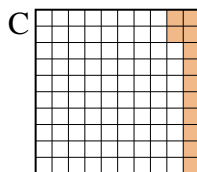
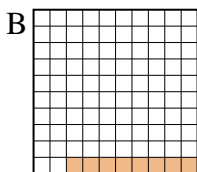
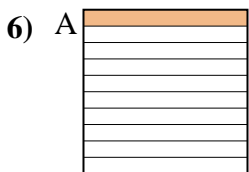
Menor \_\_\_\_\_  
 \_\_\_\_\_  
 Mayor \_\_\_\_\_



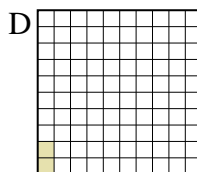

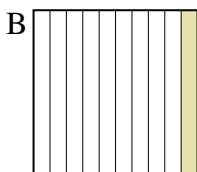
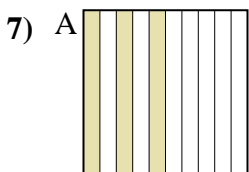
Menor \_\_\_\_\_  
 \_\_\_\_\_  
 Mayor \_\_\_\_\_



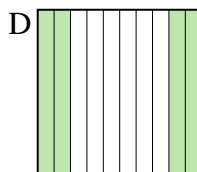
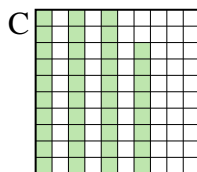
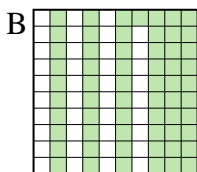
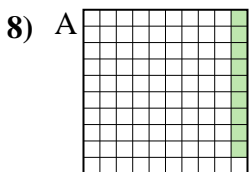
Menor \_\_\_\_\_  
 \_\_\_\_\_  
 Mayor \_\_\_\_\_



Menor \_\_\_\_\_  
 \_\_\_\_\_  
 Mayor \_\_\_\_\_



Menor \_\_\_\_\_  
 \_\_\_\_\_  
 Mayor \_\_\_\_\_


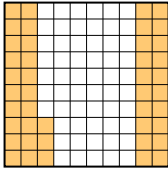

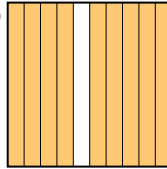


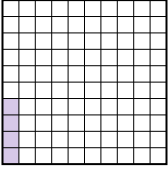
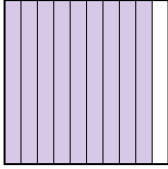

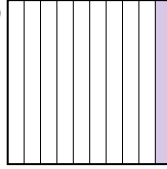
Menor \_\_\_\_\_  
 \_\_\_\_\_  
 Mayor \_\_\_\_\_





1. \_\_\_\_\_
2. \_\_\_\_\_
3. \_\_\_\_\_
4. \_\_\_\_\_
5. \_\_\_\_\_
6. \_\_\_\_\_
7. \_\_\_\_\_
8. \_\_\_\_\_

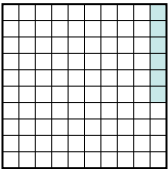
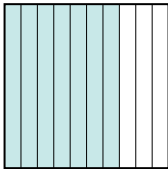

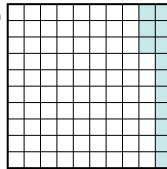


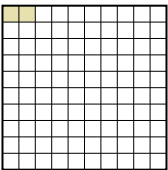

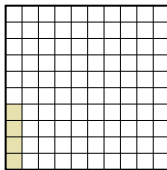
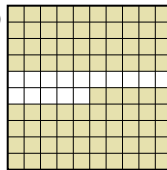
Pon las cajas en orden de la menor a la mayor basado en la cantidad sombreada.

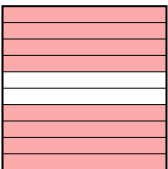
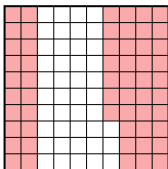
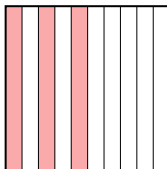
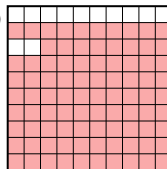
Ej) A  B  C  D  Menor  $\frac{0.2 - A}{0.43 - B}$   
Mayor  $\frac{0.5 - C}{0.9 - D}$


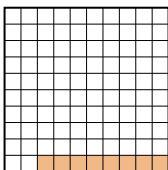
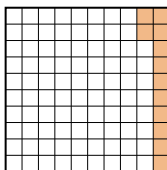
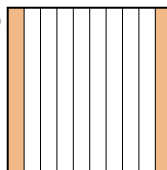
1) A  B  C  D  Menor  $\frac{0.04 - A}{0.1 - D}$   
Mayor  $\frac{0.8 - C}{0.9 - B}$

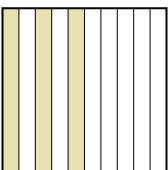
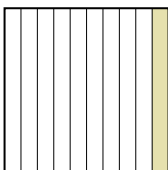

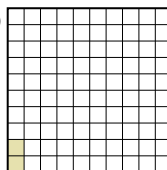
2) A  B  C  D  Menor  $\frac{0.27 - C}{0.30 - B}$   
Mayor  $\frac{0.37 - D}{0.7 - A}$

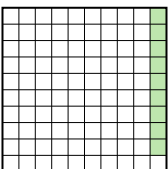
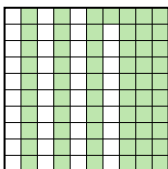
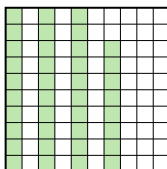
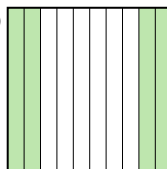
3) A  B  C  D  Menor  $\frac{0.06 - A}{0.1 - C}$   
Mayor  $\frac{0.13 - D}{0.7 - B}$

4) A  B  C  D  Menor  $\frac{0.02 - A}{0.04 - C}$   
Mayor  $\frac{0.85 - D}{0.9 - B}$

5) A  B  C  D  Menor  $\frac{0.3 - C}{0.57 - B}$   
Mayor  $\frac{0.8 - A}{0.88 - D}$

6) A  B  C  D  Menor  $\frac{0.08 - B}{0.1 - A}$   
Mayor  $\frac{0.12 - C}{0.2 - D}$

7) A  B  C  D  Menor  $\frac{0.02 - D}{0.1 - B}$   
Mayor  $\frac{0.3 - A}{0.7 - C}$

8) A  B  C  D  Menor  $\frac{0.09 - A}{0.38 - C}$   
Mayor  $\frac{0.4 - D}{0.61 - B}$

**Respuestas**

Ej. A,B,C,D

1. A,D,C,B

2. C,B,D,A

3. A,C,D,B

4. A,C,D,B

5. C,B,A,D

6. B,A,C,D

7. D,B,A,C

8. A,C,D,B