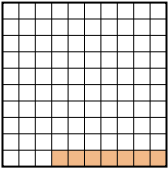
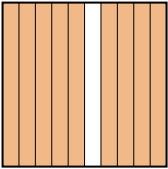
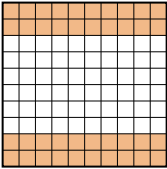
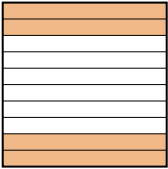
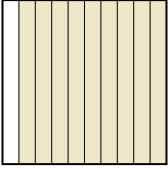
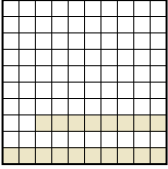
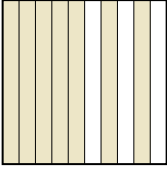
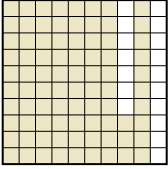




Pon las cajas en orden de la menor a la mayor basado en la cantidad sombreada.

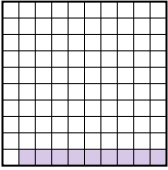
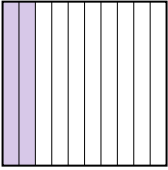
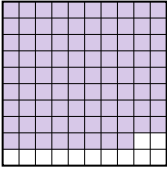

Ej) A  B  C  D 

Menor 0.07 - A
0.40 - C
0.4 - C
Mayor 0.9 - B

1) A  B  C  D 



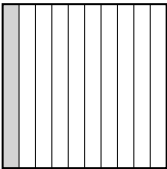

Menor _____

Mayor _____

2) A  B  C  D 


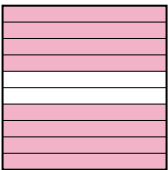
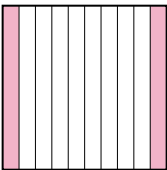

Menor _____

Mayor _____

3) A  B  C  D 

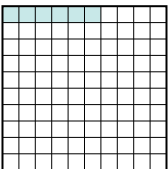


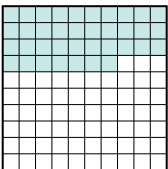
Menor _____

Mayor _____

4) A  B  C  D 

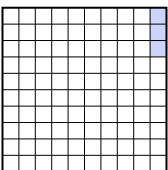
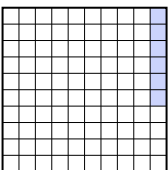
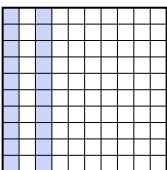
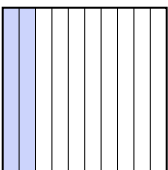
Menor _____

Mayor _____

5) A  B  C  D 

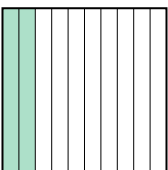
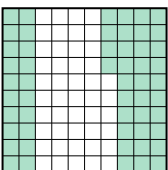
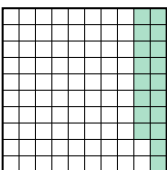
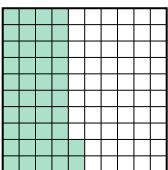
Menor _____

Mayor _____

6) A  B  C  D 

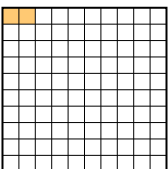

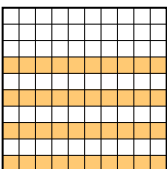
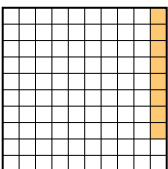
Menor _____

Mayor _____

7) A  B  C  D 

Menor _____

Mayor _____

8) A  B  C  D 

Menor _____

Mayor _____

Respuestas

Ej. A,C,C,B

1. _____

2. _____

3. _____

4. _____

5. _____

6. _____

7. _____

8. _____



Pon las cajas en orden de la menor a la mayor basado en la cantidad sombreada.

Ej)	A	B	C	D	Menor $\frac{0.07 - A}{0.40 - C}$
					Mayor $\frac{0.4 - C}{0.9 - B}$
1)	A	B	C	D	Menor $\frac{0.18 - B}{0.7 - C}$
					Mayor $\frac{0.83 - D}{0.9 - A}$
2)	A	B	C	D	Menor $\frac{0.09 - A}{0.2 - B}$
					Mayor $\frac{0.7 - D}{0.88 - C}$
3)	A	B	C	D	Menor $\frac{0.05 - A}{0.1 - C}$
					Mayor $\frac{0.4 - B}{0.9 - D}$
4)	A	B	C	D	Menor $\frac{0.04 - A}{0.14 - D}$
					Mayor $\frac{0.2 - C}{0.8 - B}$
5)	A	B	C	D	Menor $\frac{0.06 - A}{0.37 - D}$
					Mayor $\frac{0.5 - C}{0.90 - B}$
6)	A	B	C	D	Menor $\frac{0.03 - A}{0.06 - B}$
					Mayor $\frac{0.2 - C}{0.20 - C}$
7)	A	B	C	D	Menor $\frac{0.18 - C}{0.2 - A}$
					Mayor $\frac{0.42 - D}{0.54 - B}$
8)	A	B	C	D	Menor $\frac{0.02 - A}{0.08 - D}$
					Mayor $\frac{0.40 - C}{0.7 - B}$

Respuestas

- Ej. A,C,C,B
1. B,C,D,A
2. A,B,D,C
3. A,C,B,D
4. A,D,C,B
5. A,D,C,B
6. A,B,C,C
7. C,A,D,B
8. A,D,C,B