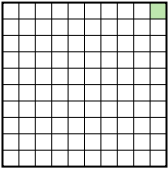
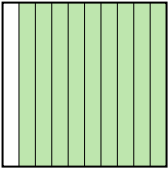
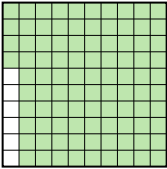





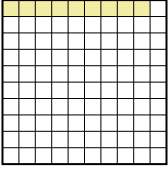
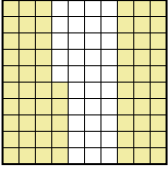

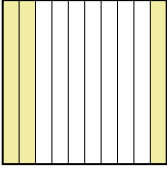
Pon las cajas en orden de la menor a la mayor basado en la cantidad sombreada.

Ej) A  B  C  D 

Menor 0.01 - A
0.8 - D
0.9 - B
Mayor 0.94 - C

Respuestas

Ej. A,D,B,C

1) A  B  C  D 

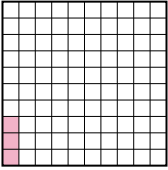
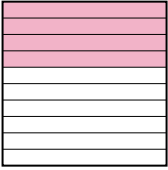
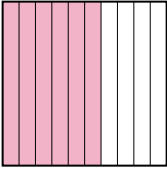
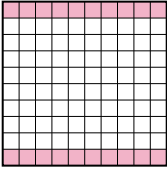
Menor _____

Mayor _____

1. _____

2. _____

3. _____


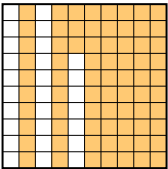
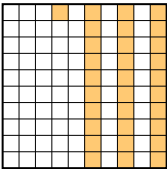
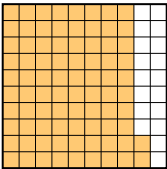
2) A  B  C  D 

Menor _____

Mayor _____

4. _____

5. _____


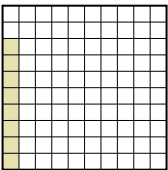
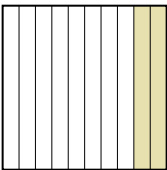
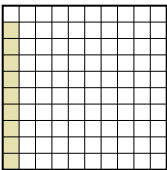
3) A  B  C  D 

Menor _____

Mayor _____

6. _____

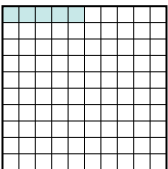


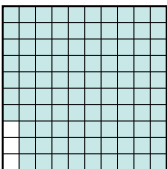
7. _____

4) A  B  C  D 

Menor _____




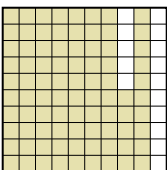
Mayor _____

8. _____

5) A  B  C  D 

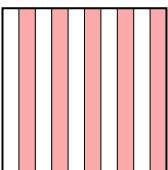
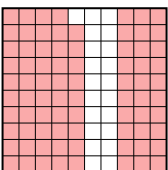

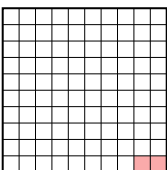
Menor _____

Mayor _____

6) A  B  C  D 

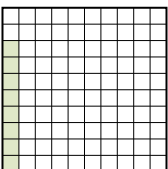

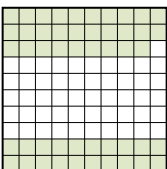
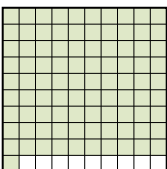
Menor _____

Mayor _____

7) A  B  C  D 

Menor _____

Mayor _____

8) A  B  C  D 

Menor _____

Mayor _____



Pon las cajas en orden de la menor a la mayor basado en la cantidad sombreada.

Ej)	A	B	C	D	Menor <u>0.01 - A</u> <u>0.8 - D</u> <u>0.9 - B</u> Mayor <u>0.94 - C</u>
1)	A	B	C	D	Menor <u>0.09 - A</u> <u>0.3 - D</u> <u>0.65 - B</u> Mayor <u>0.8 - C</u>
2)	A	B	C	D	Menor <u>0.03 - A</u> <u>0.20 - D</u> <u>0.4 - B</u> Mayor <u>0.6 - C</u>
3)	A	B	C	D	Menor <u>0.2 - A</u> <u>0.31 - C</u> <u>0.73 - B</u> Mayor <u>0.82 - D</u>
4)	A	B	C	D	Menor <u>0.08 - B</u> <u>0.09 - D</u> <u>0.2 - C</u> Mayor <u>0.7 - A</u>
5)	A	B	C	D	Menor <u>0.05 - A</u> <u>0.4 - C</u> <u>0.7 - B</u> Mayor <u>0.97 - D</u>
6)	A	B	C	D	Menor <u>0.2 - B</u> <u>0.7 - C</u> <u>0.8 - A</u> Mayor <u>0.85 - D</u>
7)	A	B	C	D	Menor <u>0.02 - D</u> <u>0.5 - A</u> <u>0.79 - B</u> Mayor <u>0.9 - C</u>
8)	A	B	C	D	Menor <u>0.08 - A</u> <u>0.4 - B</u> <u>0.49 - C</u> Mayor <u>0.91 - D</u>

Respuestas

- Ej. A,D,B,C
1. A,D,B,C
2. A,D,B,C
3. A,C,B,D
4. B,D,C,A
5. A,C,B,D
6. B,C,A,D
7. D,A,B,C
8. A,B,C,D