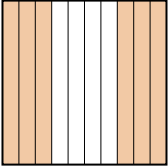
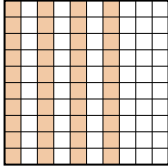








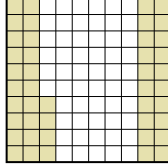
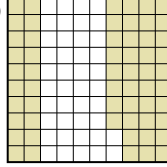
Pon las cajas en orden de la menor a la mayor basado en la cantidad sombreada.

**Respuestas**

Ej) A  B  C  D 

Menor 0.2 - D  
0.4 - B  
0.40 - B  
 Mayor 0.6 - A

Ej. D,B,B,A


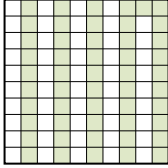

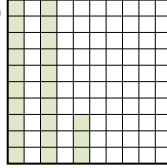
1) A  B  C  D 

Menor \_\_\_\_\_  
 Mayor \_\_\_\_\_

1. \_\_\_\_\_

2. \_\_\_\_\_

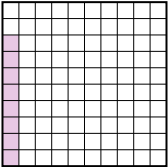
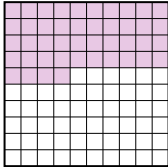

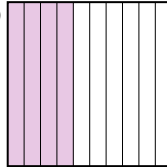
3. \_\_\_\_\_

2) A  B  C  D 

Menor \_\_\_\_\_  
 Mayor \_\_\_\_\_

4. \_\_\_\_\_



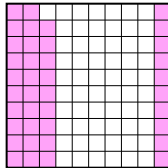

5. \_\_\_\_\_

3) A  B  C  D 

Menor \_\_\_\_\_  
 Mayor \_\_\_\_\_

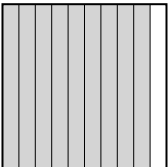
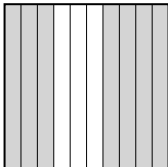


6. \_\_\_\_\_

7. \_\_\_\_\_


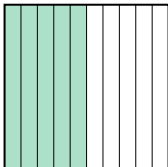
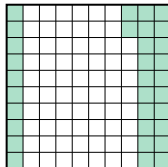

4) A  B  C  D 

Menor \_\_\_\_\_  
 Mayor \_\_\_\_\_

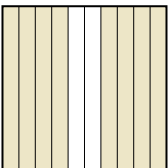
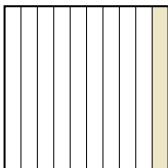
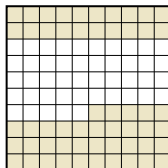

8. \_\_\_\_\_

5) A  B  C  D 


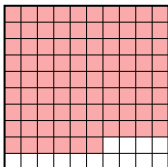
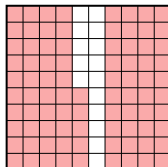
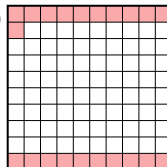
Menor \_\_\_\_\_  
 Mayor \_\_\_\_\_

6) A  B  C  D 

Menor \_\_\_\_\_  
 Mayor \_\_\_\_\_

7) A  B  C  D 

Menor \_\_\_\_\_  
 Mayor \_\_\_\_\_

8) A  B  C  D 

Menor \_\_\_\_\_  
 Mayor \_\_\_\_\_



Pon las cajas en orden de la menor a la mayor basado en la cantidad sombreada.

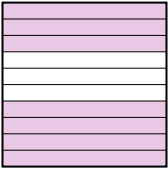
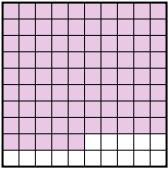

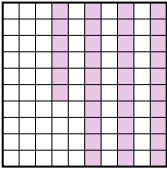
Ej)	A	B	C	D	Menor <u>0.2 - D</u> <u>0.4 - B</u> <u>0.40 - B</u> Mayor <u>0.6 - A</u>
1)	A	B	C	D	Menor <u>0.1 - A</u> <u>0.44 - C</u> <u>0.58 - D</u> Mayor <u>0.7 - B</u>
2)	A	B	C	D	Menor <u>0.23 - D</u> <u>0.4 - C</u> <u>0.51 - B</u> Mayor <u>0.7 - A</u>
3)	A	B	C	D	Menor <u>0.08 - A</u> <u>0.4 - D</u> <u>0.44 - B</u> Mayor <u>0.7 - C</u>
4)	A	B	C	D	Menor <u>0.1 - D</u> <u>0.39 - C</u> <u>0.5 - A</u> Mayor <u>0.64 - B</u>
5)	A	B	C	D	Menor <u>0.1 - C</u> <u>0.25 - D</u> <u>0.7 - B</u> Mayor <u>0.9 - A</u>
6)	A	B	C	D	Menor <u>0.06 - A</u> <u>0.1 - D</u> <u>0.32 - C</u> Mayor <u>0.5 - B</u>
7)	A	B	C	D	Menor <u>0.1 - B</u> <u>0.55 - C</u> <u>0.8 - A</u> Mayor <u>0.9 - D</u>
8)	A	B	C	D	Menor <u>0.21 - D</u> <u>0.4 - A</u> <u>0.85 - C</u> Mayor <u>0.86 - B</u>

**Respuestas**

- Ej. D,B,B,A
1. A,C,D,B
2. D,C,B,A
3. A,D,B,C
4. D,C,A,B
5. C,D,B,A
6. A,D,C,B
7. B,C,A,D
8. D,A,C,B



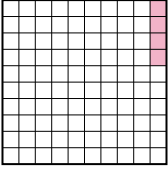

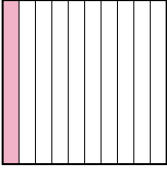

Pon las cajas en orden de la menor a la mayor basado en la cantidad sombreada.

Ej) A  B  C  D 

Menor 0.36 - D  
0.6 - C  
0.7 - A  
 Mayor 0.85 - B

**Respuestas**

Ej. D,C,A,B




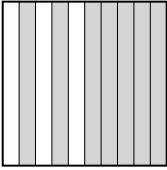
1) A  B  C  D 

Menor \_\_\_\_\_  
 Mayor \_\_\_\_\_

1. \_\_\_\_\_

2. \_\_\_\_\_

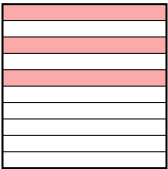
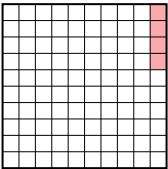
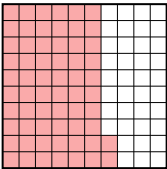
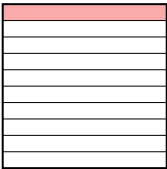
3. \_\_\_\_\_

2) A  B  C  D 

Menor \_\_\_\_\_  
 Mayor \_\_\_\_\_

4. \_\_\_\_\_

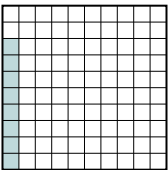

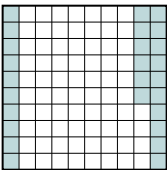
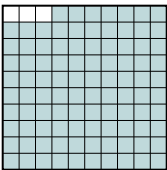
5. \_\_\_\_\_

3) A  B  C  D 

Menor \_\_\_\_\_  
 Mayor \_\_\_\_\_

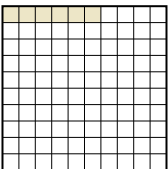
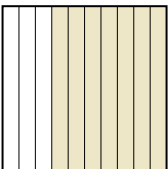
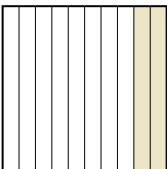

6. \_\_\_\_\_

7. \_\_\_\_\_


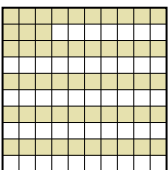

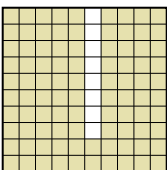
4) A  B  C  D 

Menor \_\_\_\_\_  
 Mayor \_\_\_\_\_

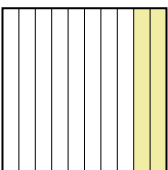
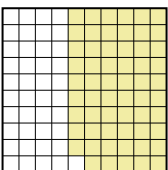
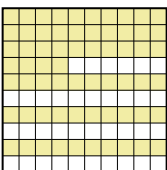
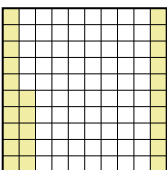
8. \_\_\_\_\_

5) A  B  C  D 

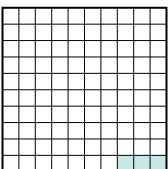
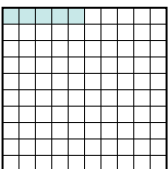

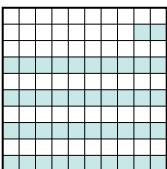
Menor \_\_\_\_\_  
 Mayor \_\_\_\_\_

6) A  B  C  D 

Menor \_\_\_\_\_  
 Mayor \_\_\_\_\_

7) A  B  C  D 

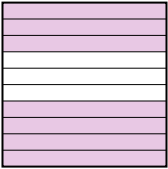
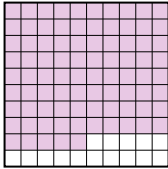

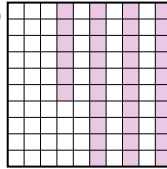
Menor \_\_\_\_\_  
 Mayor \_\_\_\_\_

8) A  B  C  D 

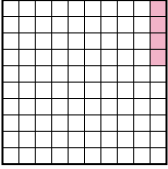

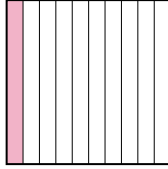

Menor \_\_\_\_\_  
 Mayor \_\_\_\_\_





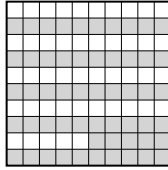
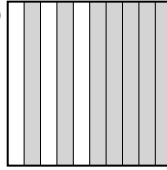
Pon las cajas en orden de la menor a la mayor basado en la cantidad sombreada.

Ej) A  B  C  D 

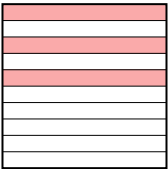
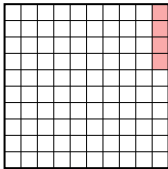
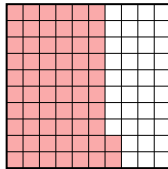
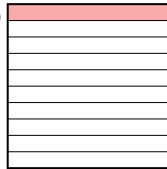
Menor  $\frac{0.36 - D}{0.6 - C}$   
 $\frac{0.7 - A}{0.85 - B}$   
 Mayor

1) A  B  C  D 

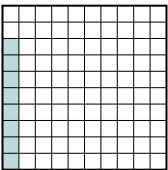

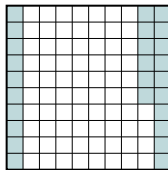

Menor  $\frac{0.04 - A}{0.1 - C}$   
 $\frac{0.7 - B}{0.9 - D}$   
 Mayor

2) A  B  C  D 

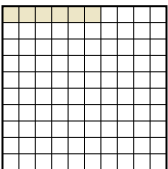
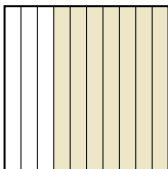
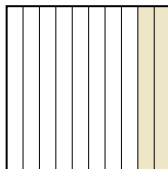

Menor  $\frac{0.02 - A}{0.45 - B}$   
 $\frac{0.55 - C}{0.7 - D}$   
 Mayor

3) A  B  C  D 


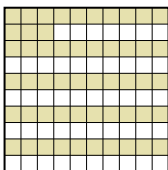

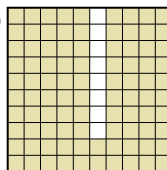
Menor  $\frac{0.04 - B}{0.1 - D}$   
 $\frac{0.3 - A}{0.62 - C}$   
 Mayor

4) A  B  C  D 

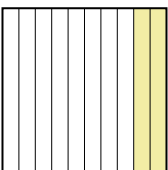
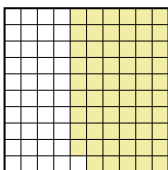
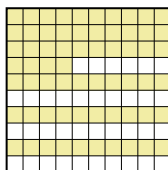
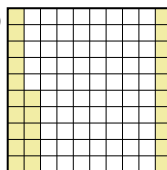
Menor  $\frac{0.08 - A}{0.26 - C}$   
 $\frac{0.5 - B}{0.97 - D}$   
 Mayor

5) A  B  C  D 

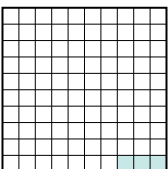
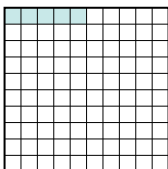

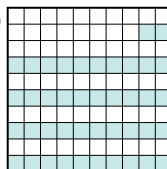
Menor  $\frac{0.06 - A}{0.2 - C}$   
 $\frac{0.7 - B}{0.9 - D}$   
 Mayor

6) A  B  C  D 

Menor  $\frac{0.1 - A}{0.4 - C}$   
 $\frac{0.53 - B}{0.92 - D}$   
 Mayor

7) A  B  C  D 

Menor  $\frac{0.2 - A}{0.25 - D}$   
 $\frac{0.59 - B}{0.64 - C}$   
 Mayor

8) A  B  C  D 

Menor  $\frac{0.03 - A}{0.05 - B}$   
 $\frac{0.42 - D}{0.8 - C}$   
 Mayor

Respuestas

Ej. D,C,A,B

1. A,C,B,D

2. A,B,C,D

3. B,D,A,C

4. A,C,B,D

5. A,C,B,D

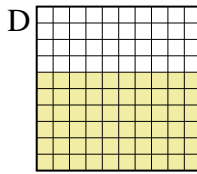
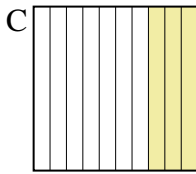
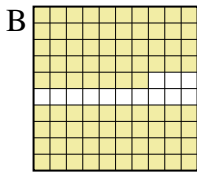
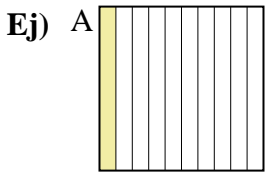
6. A,C,B,D

7. A,D,B,C

8. A,B,D,C



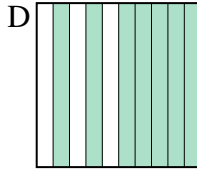
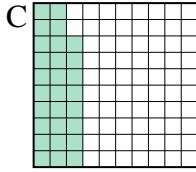
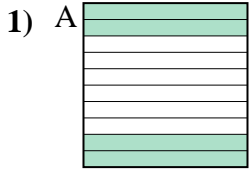
Pon las cajas en orden de la menor a la mayor basado en la cantidad sombreada.



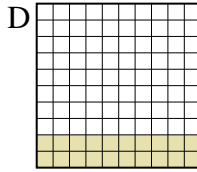
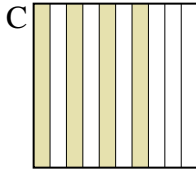
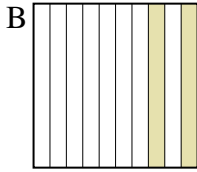
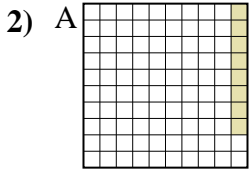
Menor 0.1 - A  
0.3 - C  
0.60 - D  
 Mayor 0.87 - B

**Respuestas**

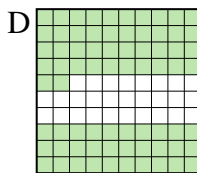
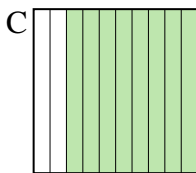
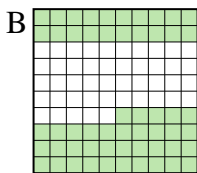
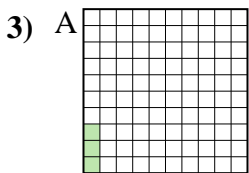
Ej. A,C,D,B



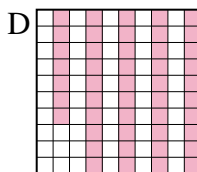
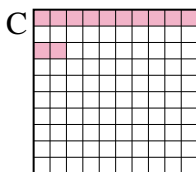

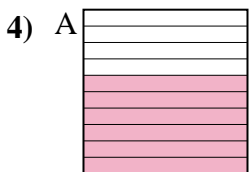
Menor \_\_\_\_\_  
 Mayor \_\_\_\_\_



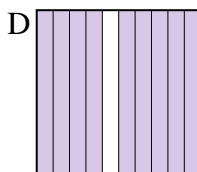
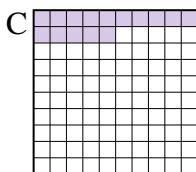
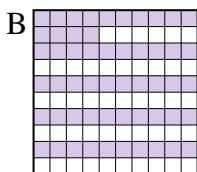
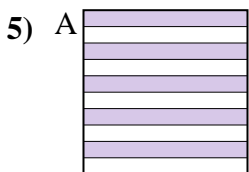
Menor \_\_\_\_\_  
 Mayor \_\_\_\_\_



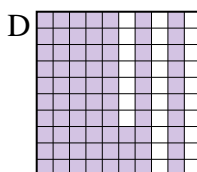
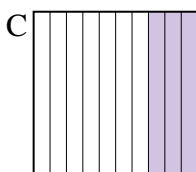
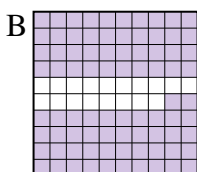
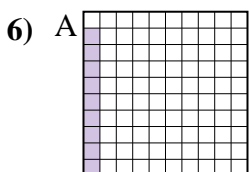
Menor \_\_\_\_\_  
 Mayor \_\_\_\_\_



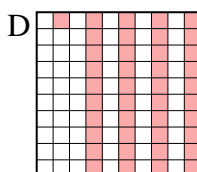


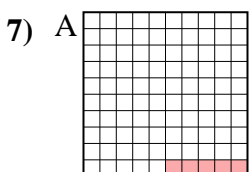
Menor \_\_\_\_\_  
 Mayor \_\_\_\_\_



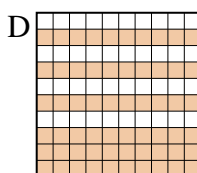
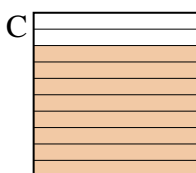
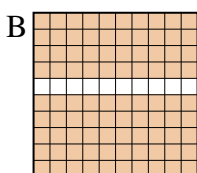
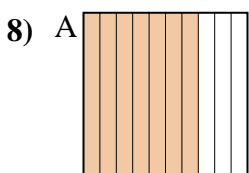
Menor \_\_\_\_\_  
 Mayor \_\_\_\_\_



Menor \_\_\_\_\_  
 Mayor \_\_\_\_\_



Menor \_\_\_\_\_  
 Mayor \_\_\_\_\_



Menor \_\_\_\_\_  
 Mayor \_\_\_\_\_

1. \_\_\_\_\_
2. \_\_\_\_\_
3. \_\_\_\_\_
4. \_\_\_\_\_
5. \_\_\_\_\_
6. \_\_\_\_\_
7. \_\_\_\_\_
8. \_\_\_\_\_



Pon las cajas en orden de la menor a la mayor basado en la cantidad sombreada.

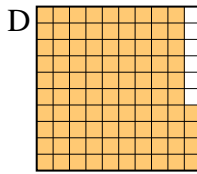
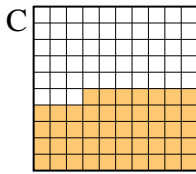
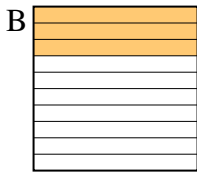
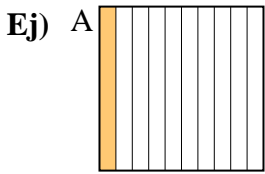
Ej)	A	B	C	D	Menor $\frac{0.1 - A}{0.3 - C}$ $\frac{0.60 - D}{0.87 - B}$
1)	A	B	C	D	Menor $\frac{0.2 - B}{0.28 - C}$ $\frac{0.4 - A}{0.7 - D}$
2)	A	B	C	D	Menor $\frac{0.08 - A}{0.20 - B}$ $\frac{0.2 - B}{0.4 - C}$
3)	A	B	C	D	Menor $\frac{0.03 - A}{0.55 - B}$ $\frac{0.72 - D}{0.8 - C}$
4)	A	B	C	D	Menor $\frac{0.1 - B}{0.12 - C}$ $\frac{0.47 - D}{0.6 - A}$
5)	A	B	C	D	Menor $\frac{0.15 - C}{0.5 - A}$ $\frac{0.54 - B}{0.9 - D}$
6)	A	B	C	D	Menor $\frac{0.09 - A}{0.3 - C}$ $\frac{0.73 - D}{0.82 - B}$
7)	A	B	C	D	Menor $\frac{0.05 - A}{0.2 - B}$ $\frac{0.41 - D}{0.8 - C}$
8)	A	B	C	D	Menor $\frac{0.60 - D}{0.7 - A}$ $\frac{0.8 - C}{0.90 - B}$

**Respuestas**

- Ej. A,C,D,B
1. B,C,A,D
2. A,B,B,C
3. A,B,D,C
4. B,C,D,A
5. C,A,B,D
6. A,C,D,B
7. A,B,D,C
8. D,A,C,B



Pon las cajas en orden de la menor a la mayor basado en la cantidad sombreada.



Menor 0.1 - A  
0.3 - B  
0.47 - C  
 Mayor 0.94 - D

**Respuestas**

Ej. A,B,C,D

1. \_\_\_\_\_

2. \_\_\_\_\_

3. \_\_\_\_\_


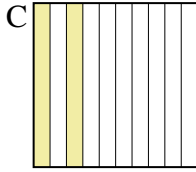
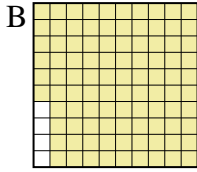
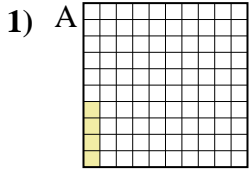
4. \_\_\_\_\_

5. \_\_\_\_\_

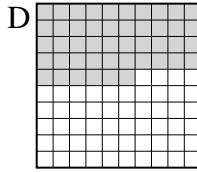
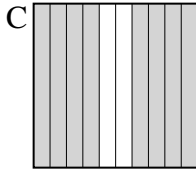
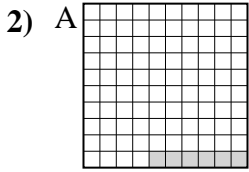
6. \_\_\_\_\_

7. \_\_\_\_\_

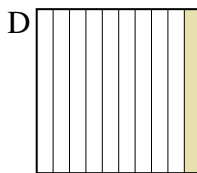
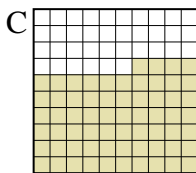
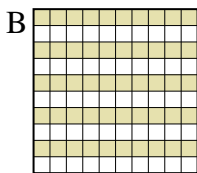
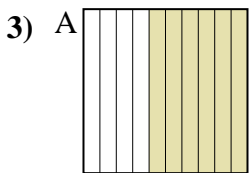
8. \_\_\_\_\_



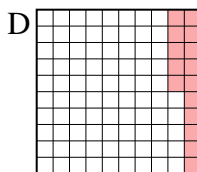
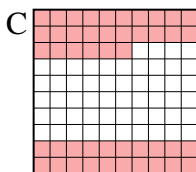

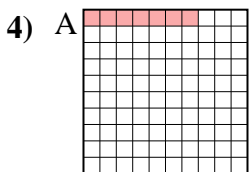
Menor \_\_\_\_\_  
 Mayor \_\_\_\_\_



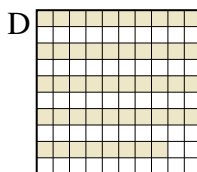
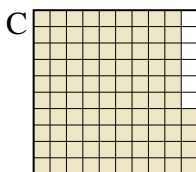

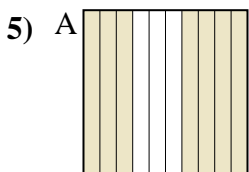
Menor \_\_\_\_\_  
 Mayor \_\_\_\_\_



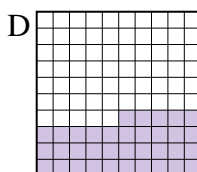
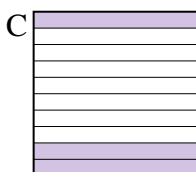
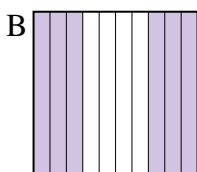
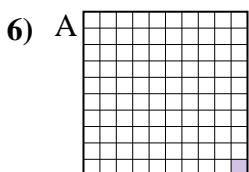
Menor \_\_\_\_\_  
 Mayor \_\_\_\_\_



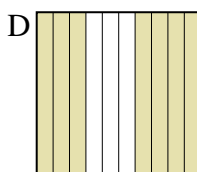
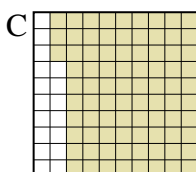
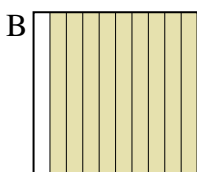
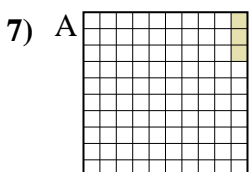
Menor \_\_\_\_\_  
 Mayor \_\_\_\_\_




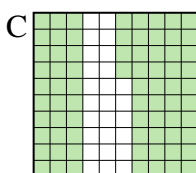
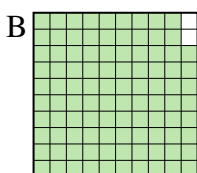
Menor \_\_\_\_\_  
 Mayor \_\_\_\_\_



Menor \_\_\_\_\_  
 Mayor \_\_\_\_\_



Menor \_\_\_\_\_  
 Mayor \_\_\_\_\_



Menor \_\_\_\_\_  
 Mayor \_\_\_\_\_



Pon las cajas en orden de la menor a la mayor basado en la cantidad sombreada.

Ej)	A	B	C	D	Menor <u>0.1 - A</u> <u>0.3 - B</u> <u>0.47 - C</u> Mayor <u>0.94 - D</u>
1)	A	B	C	D	Menor <u>0.04 - A</u> <u>0.2 - C</u> <u>0.5 - D</u> Mayor <u>0.96 - B</u>
2)	A	B	C	D	Menor <u>0.06 - A</u> <u>0.46 - D</u> <u>0.5 - B</u> Mayor <u>0.8 - C</u>
3)	A	B	C	D	Menor <u>0.1 - D</u> <u>0.50 - B</u> <u>0.6 - A</u> Mayor <u>0.64 - C</u>
4)	A	B	C	D	Menor <u>0.07 - A</u> <u>0.1 - B</u> <u>0.15 - D</u> Mayor <u>0.46 - C</u>
5)	A	B	C	D	Menor <u>0.3 - B</u> <u>0.48 - D</u> <u>0.7 - A</u> Mayor <u>0.94 - C</u>
6)	A	B	C	D	Menor <u>0.01 - A</u> <u>0.3 - C</u> <u>0.35 - D</u> Mayor <u>0.6 - B</u>
7)	A	B	C	D	Menor <u>0.03 - A</u> <u>0.7 - D</u> <u>0.83 - C</u> Mayor <u>0.9 - B</u>
8)	A	B	C	D	Menor <u>0.2 - D</u> <u>0.3 - A</u> <u>0.74 - C</u> Mayor <u>0.98 - B</u>



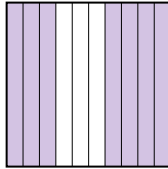
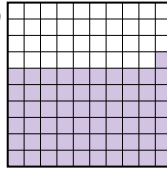
**Respuestas**

- Ej. A,B,C,D
1. A,C,D,B
2. A,D,B,C
3. D,B,A,C
4. A,B,D,C
5. B,D,A,C
6. A,C,D,B
7. A,D,C,B
8. D,A,C,B





Pon las cajas en orden de la menor a la mayor basado en la cantidad sombreada.

Ej) A  B  C  D 

Menor 0.15 - B  
0.61 - D  
0.7 - C  
 Mayor 0.9 - A

**Respuestas**

Ej. B,D,C,A

1. \_\_\_\_\_

2. \_\_\_\_\_

3. \_\_\_\_\_

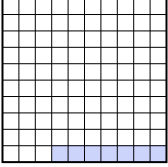

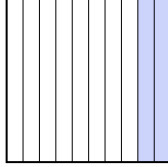
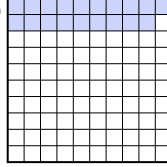
4. \_\_\_\_\_

5. \_\_\_\_\_

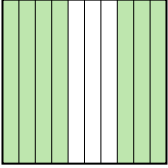
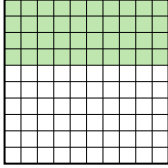
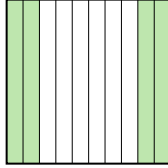
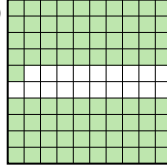
6. \_\_\_\_\_

7. \_\_\_\_\_

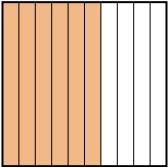

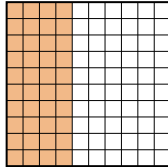

8. \_\_\_\_\_

1) A  B  C  D 

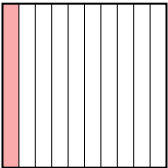
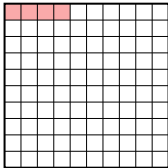
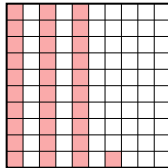

Menor \_\_\_\_\_  
 Mayor \_\_\_\_\_

2) A  B  C  D 

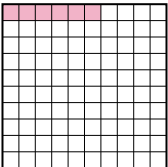

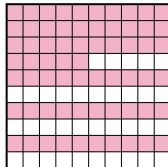
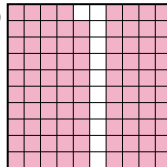
Menor \_\_\_\_\_  
 Mayor \_\_\_\_\_

3) A  B  C  D 

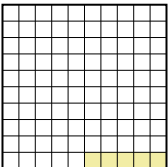


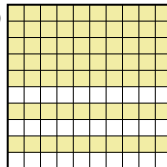
Menor \_\_\_\_\_  
 Mayor \_\_\_\_\_

4) A  B  C  D 

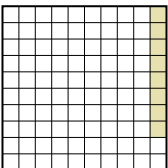
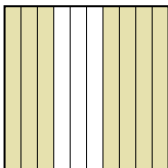
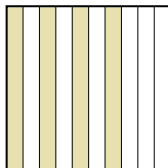
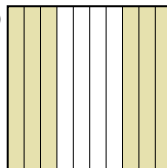
Menor \_\_\_\_\_  
 Mayor \_\_\_\_\_

5) A  B  C  D 

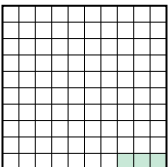



Menor \_\_\_\_\_  
 Mayor \_\_\_\_\_

6) A  B  C  D 

Menor \_\_\_\_\_  
 Mayor \_\_\_\_\_

7) A  B  C  D 

Menor \_\_\_\_\_  
 Mayor \_\_\_\_\_

8) A  B  C  D 

Menor \_\_\_\_\_  
 Mayor \_\_\_\_\_



Pon las cajas en orden de la menor a la mayor basado en la cantidad sombreada.

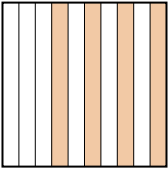
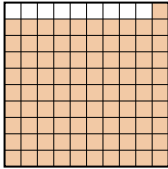
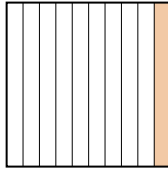

Ej)	A	B	C	D	Menor $\frac{0.15 - B}{0.61 - D}$ $\frac{0.7 - C}{0.9 - A}$	Mayor
1)	A	B	C	D	Menor $\frac{0.07 - A}{0.19 - D}$ $\frac{0.2 - C}{0.4 - B}$	Mayor
2)	A	B	C	D	Menor $\frac{0.4 - B}{0.40 - B}$ $\frac{0.7 - A}{0.81 - D}$	Mayor
3)	A	B	C	D	Menor $\frac{0.40 - C}{0.5 - D}$ $\frac{0.6 - A}{0.8 - B}$	Mayor
4)	A	B	C	D	Menor $\frac{0.04 - B}{0.1 - A}$ $\frac{0.31 - C}{0.5 - D}$	Mayor
5)	A	B	C	D	Menor $\frac{0.06 - A}{0.4 - B}$ $\frac{0.65 - C}{0.89 - D}$	Mayor
6)	A	B	C	D	Menor $\frac{0.05 - A}{0.4 - C}$ $\frac{0.6 - B}{0.70 - D}$	Mayor
7)	A	B	C	D	Menor $\frac{0.08 - A}{0.4 - C}$ $\frac{0.6 - D}{0.7 - B}$	Mayor
8)	A	B	C	D	Menor $\frac{0.03 - A}{0.2 - B}$ $\frac{0.4 - C}{0.8 - D}$	Mayor

**Respuestas**

- Ej. B,D,C,A
1. A,D,C,B
2. B,B,A,D
3. C,D,A,B
4. B,A,C,D
5. A,B,C,D
6. A,C,B,D
7. A,C,D,B
8. A,B,C,D




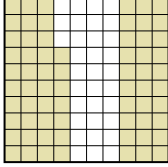
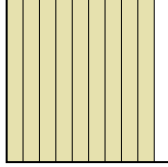
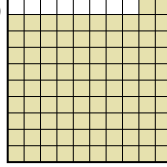
Pon las cajas en orden de la menor a la mayor basado en la cantidad sombreada.

Ej) A  B  C  D 

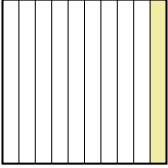
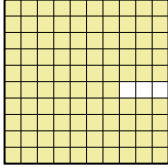


Menor 0.1 - C  
0.3 - D  
0.4 - A  
 Mayor 0.91 - B

Respuestas

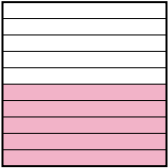
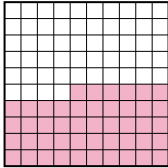
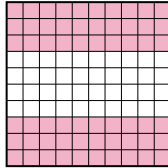
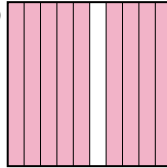
Ej. C,D,A,B

1) A  B  C  D 

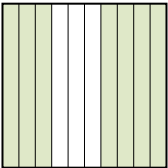
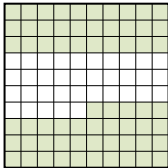
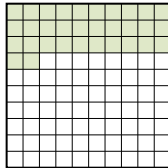
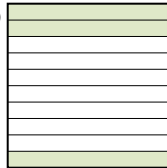
Menor \_\_\_\_\_  
 Mayor \_\_\_\_\_

2) A  B  C  D 




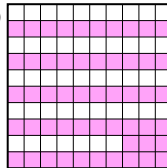
Menor \_\_\_\_\_  
 Mayor \_\_\_\_\_

3) A  B  C  D 


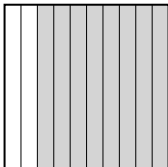


Menor \_\_\_\_\_  
 Mayor \_\_\_\_\_

4) A  B  C  D 

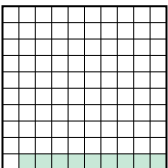
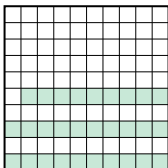
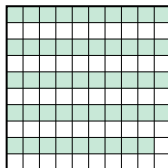
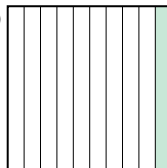
Menor \_\_\_\_\_  
 Mayor \_\_\_\_\_

5) A  B  C  D 




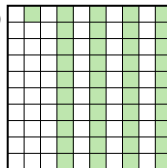
Menor \_\_\_\_\_  
 Mayor \_\_\_\_\_

6) A  B  C  D 

Menor \_\_\_\_\_  
 Mayor \_\_\_\_\_

7) A  B  C  D 

Menor \_\_\_\_\_  
 Mayor \_\_\_\_\_

8) A  B  C  D 

Menor \_\_\_\_\_  
 Mayor \_\_\_\_\_

1. \_\_\_\_\_
2. \_\_\_\_\_
3. \_\_\_\_\_
4. \_\_\_\_\_
5. \_\_\_\_\_
6. \_\_\_\_\_
7. \_\_\_\_\_
8. \_\_\_\_\_



Pon las cajas en orden de la menor a la mayor basado en la cantidad sombreada.

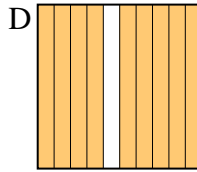
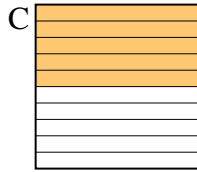
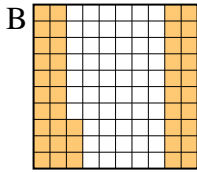
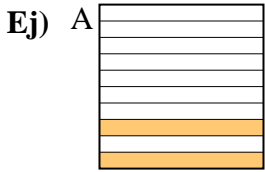
Ej)	A	B	C	D	Menor <u>0.1 - C</u> <u>0.3 - D</u> <u>0.4 - A</u>
					Mayor <u>0.91 - B</u>
1)	A	B	C	D	Menor <u>0.01 - A</u> <u>0.67 - B</u> <u>0.9 - C</u>
					Mayor <u>0.92 - D</u>
2)	A	B	C	D	Menor <u>0.1 - A</u> <u>0.2 - C</u> <u>0.5 - D</u>
					Mayor <u>0.97 - B</u>
3)	A	B	C	D	Menor <u>0.46 - B</u> <u>0.5 - A</u> <u>0.60 - C</u>
					Mayor <u>0.9 - D</u>
4)	A	B	C	D	Menor <u>0.3 - D</u> <u>0.32 - C</u> <u>0.65 - B</u>
					Mayor <u>0.7 - A</u>
5)	A	B	C	D	Menor <u>0.1 - C</u> <u>0.2 - A</u> <u>0.53 - D</u>
					Mayor <u>0.6 - B</u>
6)	A	B	C	D	Menor <u>0.02 - A</u> <u>0.8 - B</u> <u>0.84 - D</u>
					Mayor <u>0.86 - C</u>
7)	A	B	C	D	Menor <u>0.09 - A</u> <u>0.1 - D</u> <u>0.29 - B</u>
					Mayor <u>0.49 - C</u>
8)	A	B	C	D	Menor <u>0.1 - C</u> <u>0.3 - A</u> <u>0.41 - D</u>
					Mayor <u>0.63 - B</u>

**Respuestas**

- Ej. C,D,A,B
1. A,B,C,D
2. A,C,D,B
3. B,A,C,D
4. D,C,B,A
5. C,A,D,B
6. A,B,D,C
7. A,D,B,C
8. C,A,D,B



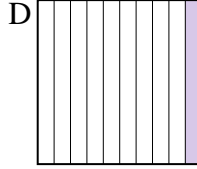
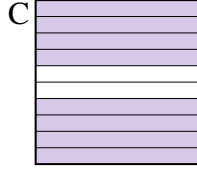
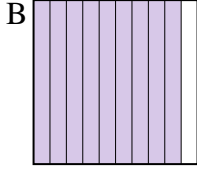
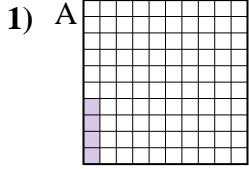
Pon las cajas en orden de la menor a la mayor basado en la cantidad sombreada.



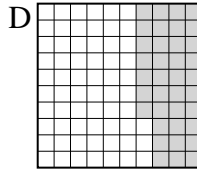
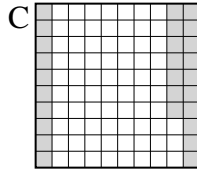
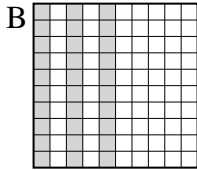
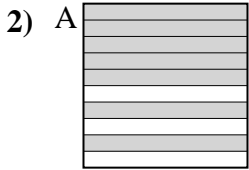
Menor 0.2 - A  
0.43 - B  
0.5 - C  
 Mayor 0.9 - D

**Respuestas**

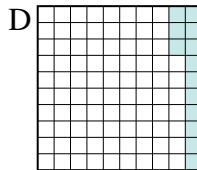

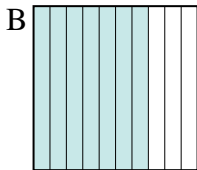
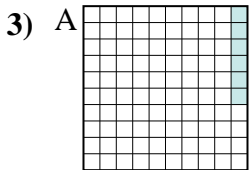
Ej. A,B,C,D



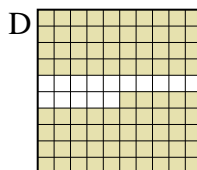
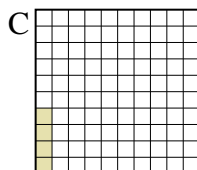
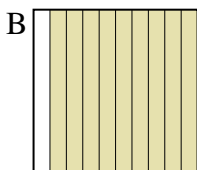
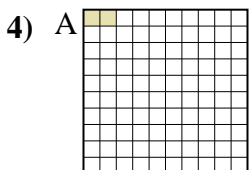
Menor \_\_\_\_\_  
 \_\_\_\_\_  
 Mayor \_\_\_\_\_



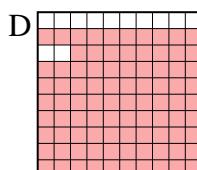
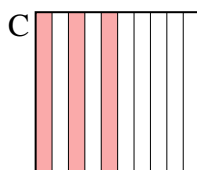
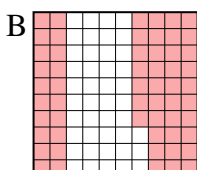
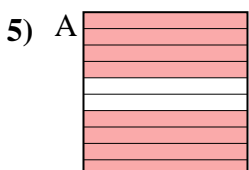
Menor \_\_\_\_\_  
 \_\_\_\_\_  
 Mayor \_\_\_\_\_



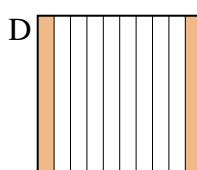
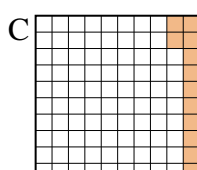
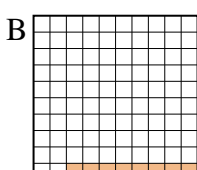
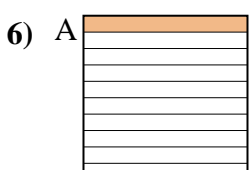
Menor \_\_\_\_\_  
 \_\_\_\_\_  
 Mayor \_\_\_\_\_



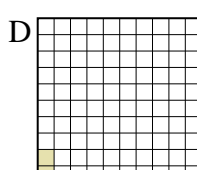

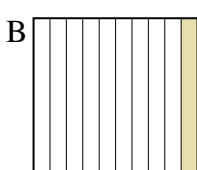
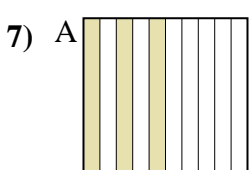
Menor \_\_\_\_\_  
 \_\_\_\_\_  
 Mayor \_\_\_\_\_



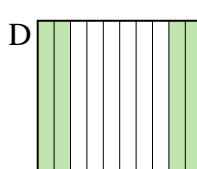
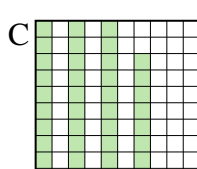
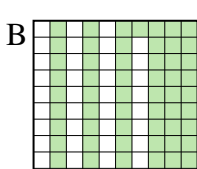
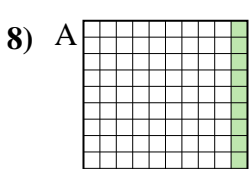
Menor \_\_\_\_\_  
 \_\_\_\_\_  
 Mayor \_\_\_\_\_



Menor \_\_\_\_\_  
 \_\_\_\_\_  
 Mayor \_\_\_\_\_



Menor \_\_\_\_\_  
 \_\_\_\_\_  
 Mayor \_\_\_\_\_


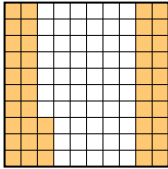

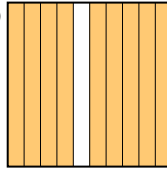


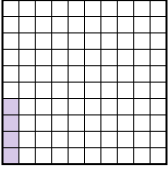
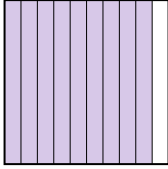

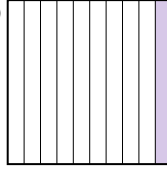
Menor \_\_\_\_\_  
 \_\_\_\_\_  
 Mayor \_\_\_\_\_





1. \_\_\_\_\_
2. \_\_\_\_\_
3. \_\_\_\_\_
4. \_\_\_\_\_
5. \_\_\_\_\_
6. \_\_\_\_\_
7. \_\_\_\_\_
8. \_\_\_\_\_

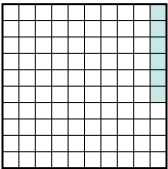
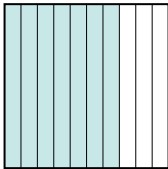

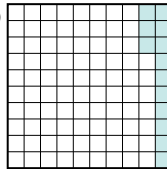


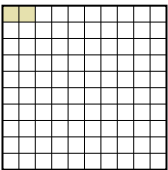

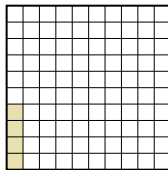
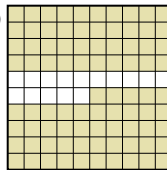
Pon las cajas en orden de la menor a la mayor basado en la cantidad sombreada.

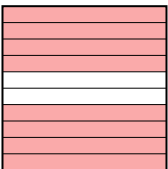
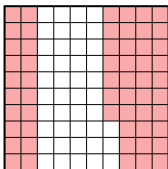
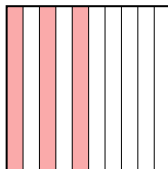
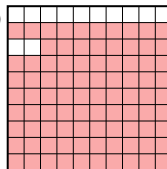
Ej) A  B  C  D  Menor  $\frac{0.2 - A}{0.43 - B}$   
Mayor  $\frac{0.5 - C}{0.9 - D}$


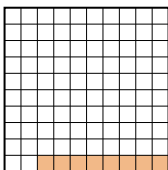
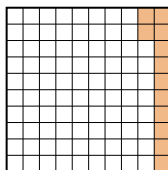
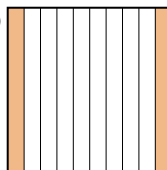
1) A  B  C  D  Menor  $\frac{0.04 - A}{0.1 - D}$   
Mayor  $\frac{0.8 - C}{0.9 - B}$

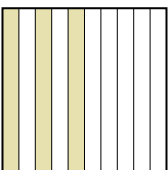
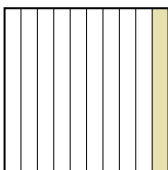

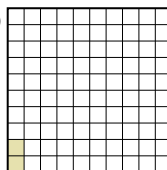
2) A  B  C  D  Menor  $\frac{0.27 - C}{0.30 - B}$   
Mayor  $\frac{0.37 - D}{0.7 - A}$

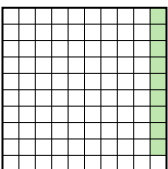
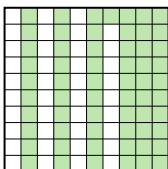
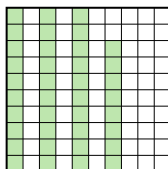
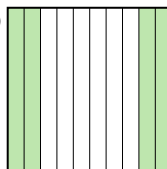
3) A  B  C  D  Menor  $\frac{0.06 - A}{0.1 - C}$   
Mayor  $\frac{0.13 - D}{0.7 - B}$

4) A  B  C  D  Menor  $\frac{0.02 - A}{0.04 - C}$   
Mayor  $\frac{0.85 - D}{0.9 - B}$

5) A  B  C  D  Menor  $\frac{0.3 - C}{0.57 - B}$   
Mayor  $\frac{0.8 - A}{0.88 - D}$

6) A  B  C  D  Menor  $\frac{0.08 - B}{0.1 - A}$   
Mayor  $\frac{0.12 - C}{0.2 - D}$

7) A  B  C  D  Menor  $\frac{0.02 - D}{0.1 - B}$   
Mayor  $\frac{0.3 - A}{0.7 - C}$

8) A  B  C  D  Menor  $\frac{0.09 - A}{0.38 - C}$   
Mayor  $\frac{0.4 - D}{0.61 - B}$

**Respuestas**

Ej. A,B,C,D

1. A,D,C,B

2. C,B,D,A

3. A,C,D,B

4. A,C,D,B

5. C,B,A,D

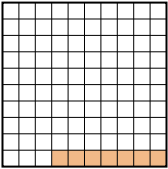
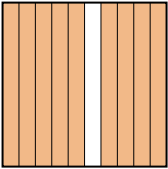
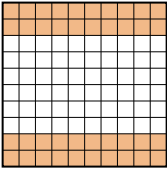
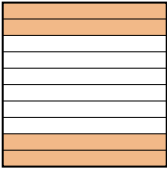
6. B,A,C,D

7. D,B,A,C

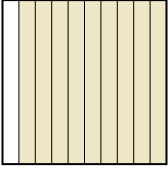
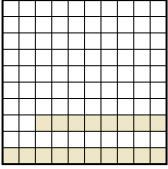
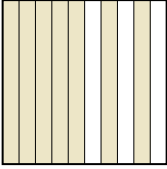
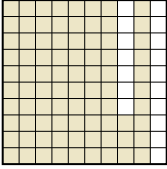
8. A,C,D,B



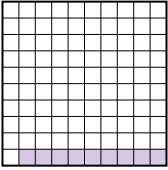
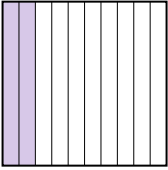
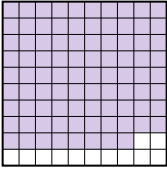

Pon las cajas en orden de la menor a la mayor basado en la cantidad sombreada.

Ej) A  B  C  D 



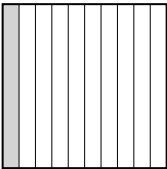

Menor 0.07 - A  
0.40 - C  
0.4 - C  
Mayor 0.9 - B

1) A  B  C  D 


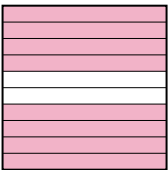
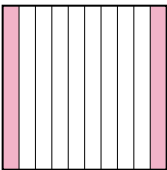
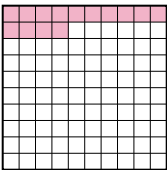
Menor \_\_\_\_\_  
\_\_\_\_\_  
Mayor \_\_\_\_\_

2) A  B  C  D 

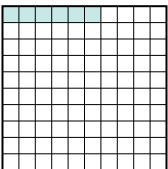


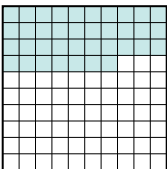
Menor \_\_\_\_\_  
\_\_\_\_\_  
Mayor \_\_\_\_\_

3) A  B  C  D 

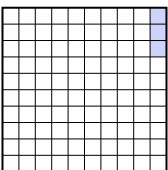
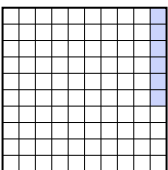
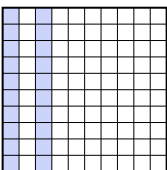
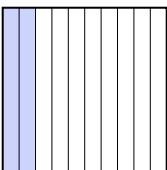
Menor \_\_\_\_\_  
\_\_\_\_\_  
Mayor \_\_\_\_\_

4) A  B  C  D 

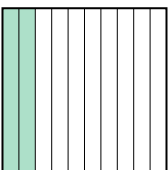
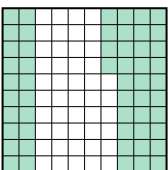
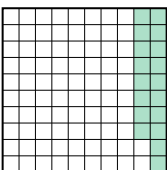
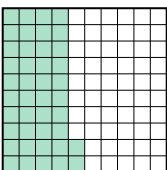
Menor \_\_\_\_\_  
\_\_\_\_\_  
Mayor \_\_\_\_\_

5) A  B  C  D 

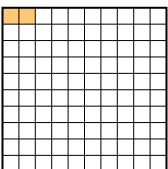

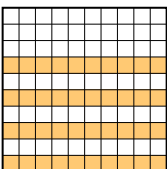
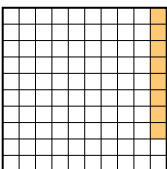
Menor \_\_\_\_\_  
\_\_\_\_\_  
Mayor \_\_\_\_\_

6) A  B  C  D 

Menor \_\_\_\_\_  
\_\_\_\_\_  
Mayor \_\_\_\_\_

7) A  B  C  D 

Menor \_\_\_\_\_  
\_\_\_\_\_  
Mayor \_\_\_\_\_

8) A  B  C  D 

Menor \_\_\_\_\_  
\_\_\_\_\_  
Mayor \_\_\_\_\_

Respuestas

Ej. A,C,C,B

1. \_\_\_\_\_

2. \_\_\_\_\_

3. \_\_\_\_\_

4. \_\_\_\_\_

5. \_\_\_\_\_

6. \_\_\_\_\_

7. \_\_\_\_\_

8. \_\_\_\_\_



Pon las cajas en orden de la menor a la mayor basado en la cantidad sombreada.

Ej)	A	B	C	D	Menor $\frac{0.07 - A}{0.40 - C}$	Mayor $\frac{0.4 - C}{0.9 - B}$
1)	A	B	C	D	Menor $\frac{0.18 - B}{0.7 - C}$	Mayor $\frac{0.83 - D}{0.9 - A}$
2)	A	B	C	D	Menor $\frac{0.09 - A}{0.2 - B}$	Mayor $\frac{0.7 - D}{0.88 - C}$
3)	A	B	C	D	Menor $\frac{0.05 - A}{0.1 - C}$	Mayor $\frac{0.4 - B}{0.9 - D}$
4)	A	B	C	D	Menor $\frac{0.04 - A}{0.14 - D}$	Mayor $\frac{0.2 - C}{0.8 - B}$
5)	A	B	C	D	Menor $\frac{0.06 - A}{0.37 - D}$	Mayor $\frac{0.5 - C}{0.90 - B}$
6)	A	B	C	D	Menor $\frac{0.03 - A}{0.06 - B}$	Mayor $\frac{0.2 - C}{0.20 - C}$
7)	A	B	C	D	Menor $\frac{0.18 - C}{0.2 - A}$	Mayor $\frac{0.42 - D}{0.54 - B}$
8)	A	B	C	D	Menor $\frac{0.02 - A}{0.08 - D}$	Mayor $\frac{0.40 - C}{0.7 - B}$

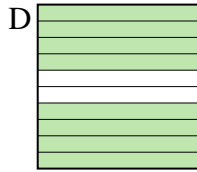
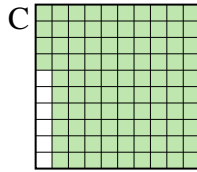
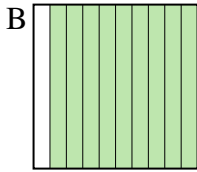
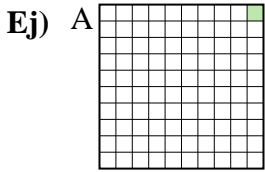
**Respuestas**

- Ej. A,C,C,B
1. B,C,D,A
2. A,B,D,C
3. A,C,B,D
4. A,D,C,B
5. A,D,C,B
6. A,B,C,C
7. C,A,D,B
8. A,D,C,B





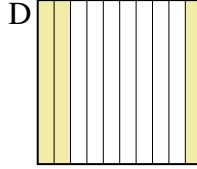

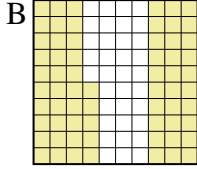
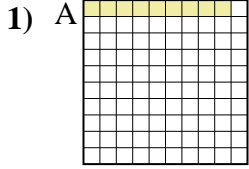
Pon las cajas en orden de la menor a la mayor basado en la cantidad sombreada.



Menor 0.01 - A  
0.8 - D  
0.9 - B  
Mayor 0.94 - C

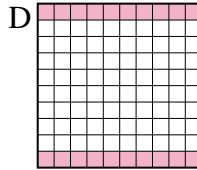
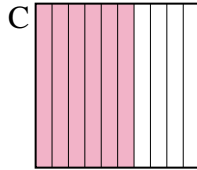
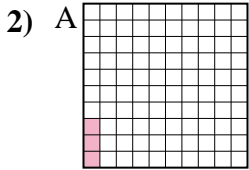
**Respuestas**

Ej. A,D,B,C



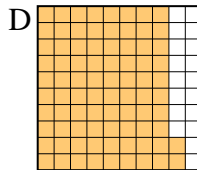
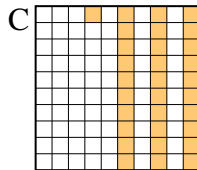
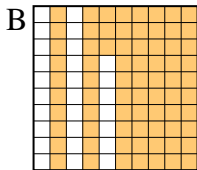
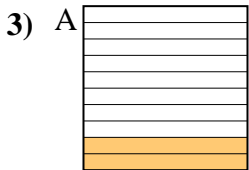
Menor \_\_\_\_\_  
Mayor \_\_\_\_\_

1. \_\_\_\_\_



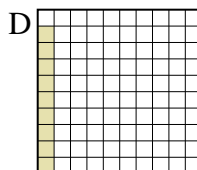
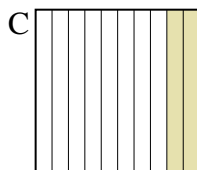
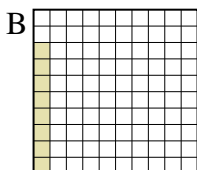

Menor \_\_\_\_\_  
Mayor \_\_\_\_\_

2. \_\_\_\_\_



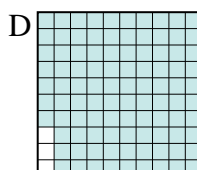


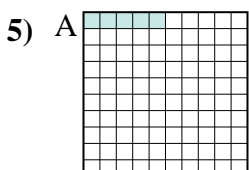
Menor \_\_\_\_\_  
Mayor \_\_\_\_\_

3. \_\_\_\_\_



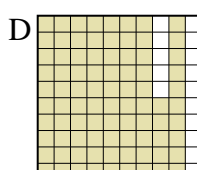



Menor \_\_\_\_\_  
Mayor \_\_\_\_\_

4. \_\_\_\_\_



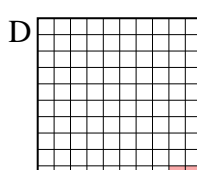
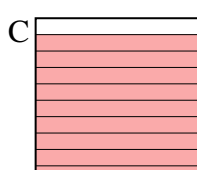
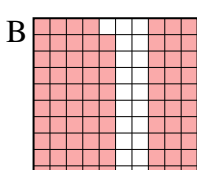
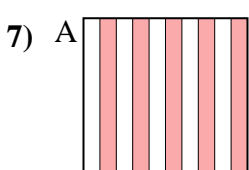
Menor \_\_\_\_\_  
Mayor \_\_\_\_\_

5. \_\_\_\_\_



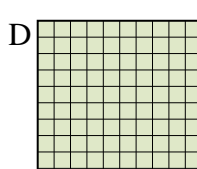
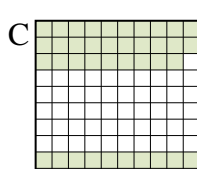

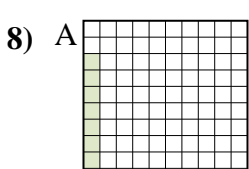
Menor \_\_\_\_\_  
Mayor \_\_\_\_\_

6. \_\_\_\_\_



Menor \_\_\_\_\_  
Mayor \_\_\_\_\_

7. \_\_\_\_\_



Menor \_\_\_\_\_  
Mayor \_\_\_\_\_

8. \_\_\_\_\_



Pon las cajas en orden de la menor a la mayor basado en la cantidad sombreada.


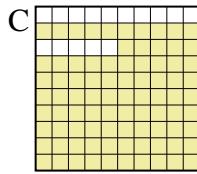
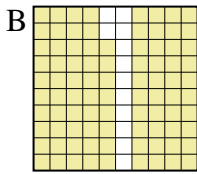
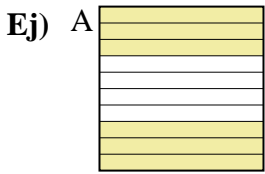
Ej)	A	B	C	D	Menor <u>0.01 - A</u> <u>0.8 - D</u> <u>0.9 - B</u> Mayor <u>0.94 - C</u>
1)	A	B	C	D	Menor <u>0.09 - A</u> <u>0.3 - D</u> <u>0.65 - B</u> Mayor <u>0.8 - C</u>
2)	A	B	C	D	Menor <u>0.03 - A</u> <u>0.20 - D</u> <u>0.4 - B</u> Mayor <u>0.6 - C</u>
3)	A	B	C	D	Menor <u>0.2 - A</u> <u>0.31 - C</u> <u>0.73 - B</u> Mayor <u>0.82 - D</u>
4)	A	B	C	D	Menor <u>0.08 - B</u> <u>0.09 - D</u> <u>0.2 - C</u> Mayor <u>0.7 - A</u>
5)	A	B	C	D	Menor <u>0.05 - A</u> <u>0.4 - C</u> <u>0.7 - B</u> Mayor <u>0.97 - D</u>
6)	A	B	C	D	Menor <u>0.2 - B</u> <u>0.7 - C</u> <u>0.8 - A</u> Mayor <u>0.85 - D</u>
7)	A	B	C	D	Menor <u>0.02 - D</u> <u>0.5 - A</u> <u>0.79 - B</u> Mayor <u>0.9 - C</u>
8)	A	B	C	D	Menor <u>0.08 - A</u> <u>0.4 - B</u> <u>0.49 - C</u> Mayor <u>0.91 - D</u>

**Respuestas**

- Ej. A,D,B,C
1. A,D,B,C
2. A,D,B,C
3. A,C,B,D
4. B,D,C,A
5. A,C,B,D
6. B,C,A,D
7. D,A,B,C
8. A,B,C,D



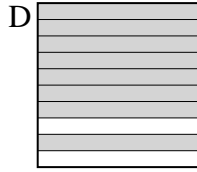
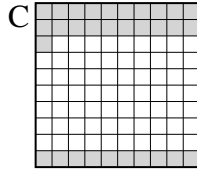
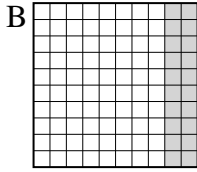
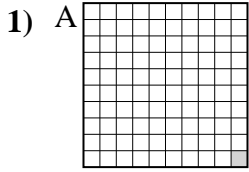
Pon las cajas en orden de la menor a la mayor basado en la cantidad sombreada.



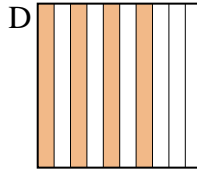
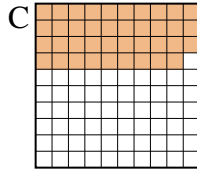
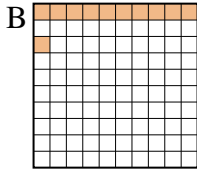
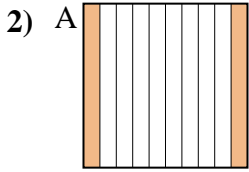
Menor 0.3 - D  
0.6 - A  
0.85 - C  
 Mayor 0.88 - B

**Respuestas**

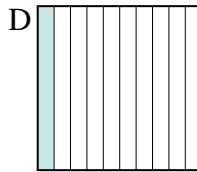
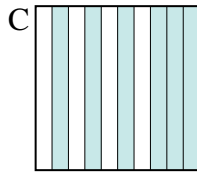
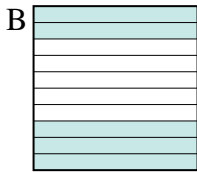
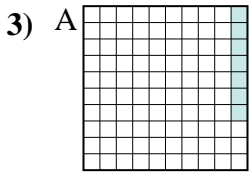
Ej. D,A,C,B





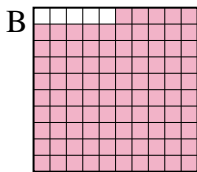
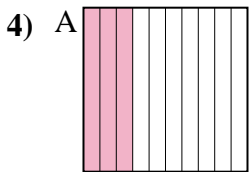
Menor \_\_\_\_\_  
 Mayor \_\_\_\_\_



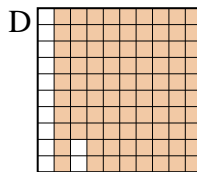
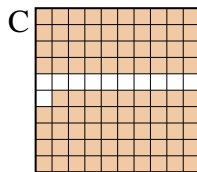
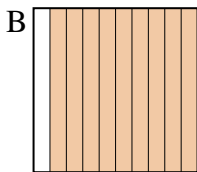
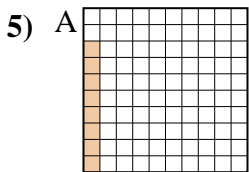
Menor \_\_\_\_\_  
 Mayor \_\_\_\_\_



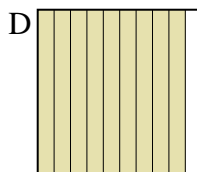
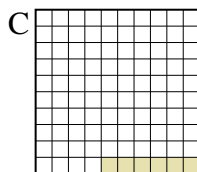

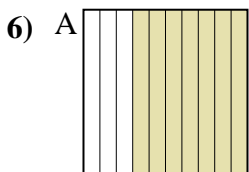
Menor \_\_\_\_\_  
 Mayor \_\_\_\_\_




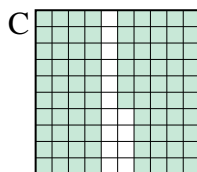

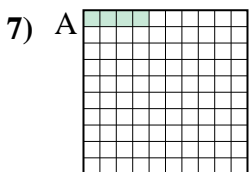
Menor \_\_\_\_\_  
 Mayor \_\_\_\_\_



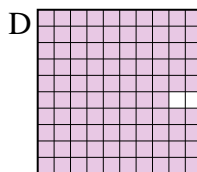
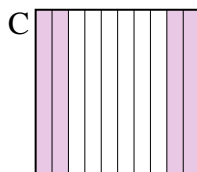
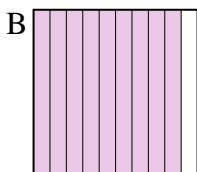
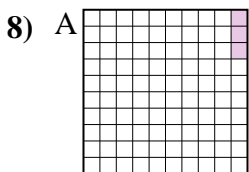
Menor \_\_\_\_\_  
 Mayor \_\_\_\_\_



Menor \_\_\_\_\_  
 Mayor \_\_\_\_\_



Menor \_\_\_\_\_  
 Mayor \_\_\_\_\_


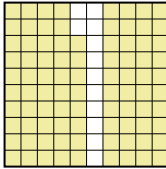
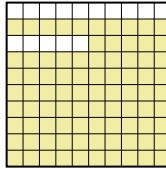



Menor \_\_\_\_\_  
 Mayor \_\_\_\_\_





1. \_\_\_\_\_
2. \_\_\_\_\_
3. \_\_\_\_\_
4. \_\_\_\_\_
5. \_\_\_\_\_
6. \_\_\_\_\_
7. \_\_\_\_\_
8. \_\_\_\_\_



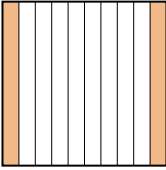
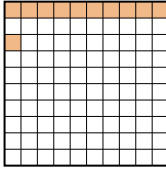
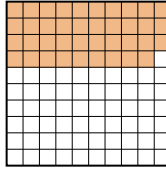
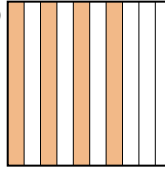
Pon las cajas en orden de la menor a la mayor basado en la cantidad sombreada.

Ej) A  B  C  D 

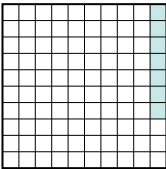

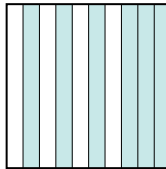

Menor  $\frac{0.3 - D}{0.6 - A}$   
 $\frac{0.85 - C}{0.88 - B}$   
 Mayor

1) A  B  C  D 

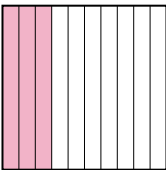
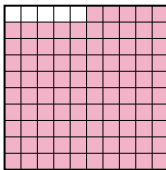
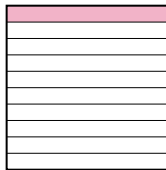

Menor  $\frac{0.01 - A}{0.20 - B}$   
 $\frac{0.31 - C}{0.8 - D}$   
 Mayor

2) A  B  C  D 

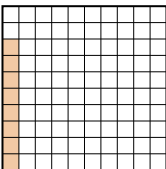
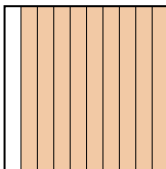
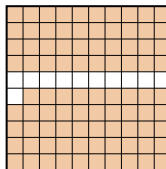
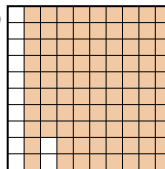
Menor  $\frac{0.11 - B}{0.2 - A}$   
 $\frac{0.39 - C}{0.4 - D}$   
 Mayor

3) A  B  C  D 

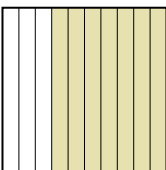
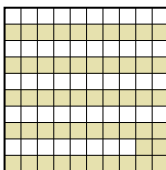
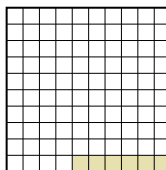
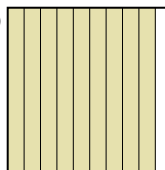
Menor  $\frac{0.07 - A}{0.1 - D}$   
 $\frac{0.5 - B}{0.6 - C}$   
 Mayor

4) A  B  C  D 

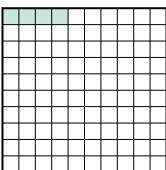

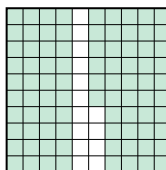

Menor  $\frac{0.1 - C}{0.2 - D}$   
 $\frac{0.3 - A}{0.95 - B}$   
 Mayor

5) A  B  C  D 

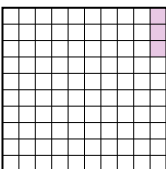
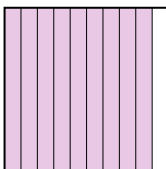
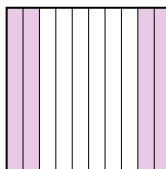
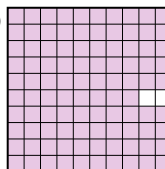
Menor  $\frac{0.08 - A}{0.88 - D}$   
 $\frac{0.89 - C}{0.9 - B}$   
 Mayor

6) A  B  C  D 

Menor  $\frac{0.06 - C}{0.52 - B}$   
 $\frac{0.7 - A}{0.9 - D}$   
 Mayor

7) A  B  C  D 

Menor  $\frac{0.04 - A}{0.6 - D}$   
 $\frac{0.8 - B}{0.86 - C}$   
 Mayor

8) A  B  C  D 

Menor  $\frac{0.03 - A}{0.4 - C}$   
 $\frac{0.9 - B}{0.98 - D}$   
 Mayor

**Respuestas**

Ej. D,A,C,B

1. A,B,C,D

2. B,A,C,D

3. A,D,B,C

4. C,D,A,B

5. A,D,C,B

6. C,B,A,D

7. A,D,B,C

8. A,C,B,D