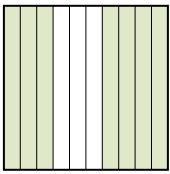
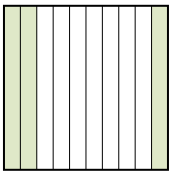
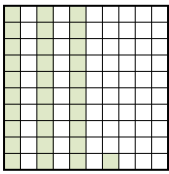
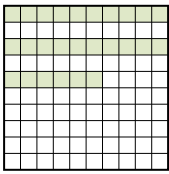




Pon las cajas en orden de la menor a la mayor basado en la cantidad sombreada.





Respuestas

Ej) A  B  C  D 

menor 0.26 - D
0.3 - B
0.31 - C
mayor 0.7 - A

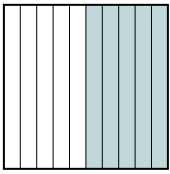
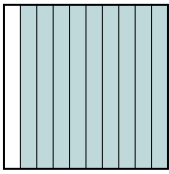
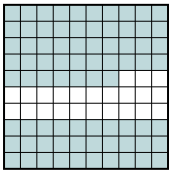
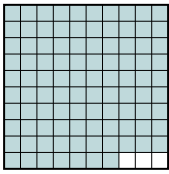
Ej. D,B,C,A

1. _____
2. _____
3. _____
4. _____
5. _____
6. _____
7. _____
8. _____

1) A  B  C  D 




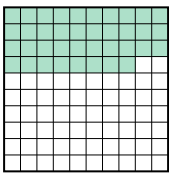
menor _____

mayor _____

2) A  B  C  D 


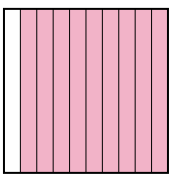
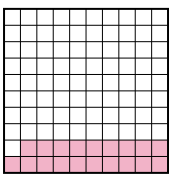
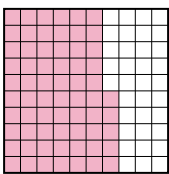
menor _____

mayor _____

3) A  B  C  D 

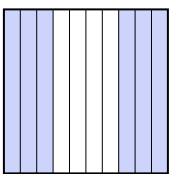

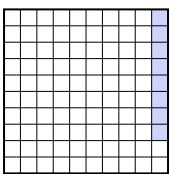
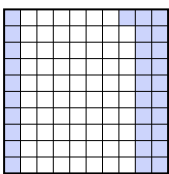
menor _____

mayor _____

4) A  B  C  D 



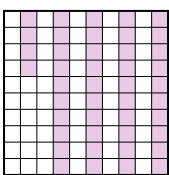
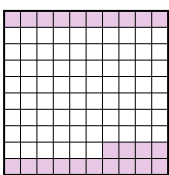
menor _____

mayor _____

5) A  B  C  D 

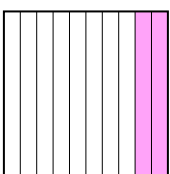

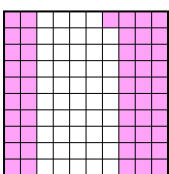
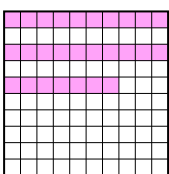
menor _____

mayor _____

6) A  B  C  D 



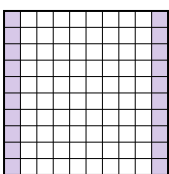
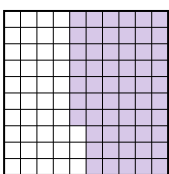
menor _____

mayor _____

7) A  B  C  D 

menor _____

mayor _____

8) A  B  C  D 

menor _____

mayor _____



Pon las cajas en orden de la menor a la mayor basado en la cantidad sombreada.

Ej) A B C D menor $\frac{0.26 - D}{0.3 - B}$
mayor $\frac{0.31 - C}{0.7 - A}$

1) A B C D menor $\frac{0.4 - B}{0.43 - C}$
mayor $\frac{0.63 - D}{0.9 - A}$

2) A B C D menor $\frac{0.5 - A}{0.77 - C}$
mayor $\frac{0.9 - B}{0.97 - D}$

3) A B C D menor $\frac{0.14 - C}{0.38 - D}$
mayor $\frac{0.4 - B}{0.8 - A}$

4) A B C D menor $\frac{0.1 - A}{0.19 - C}$
mayor $\frac{0.65 - D}{0.9 - B}$

5) A B C D menor $\frac{0.08 - C}{0.31 - D}$
mayor $\frac{0.6 - A}{0.9 - B}$

6) A B C D menor $\frac{0.24 - D}{0.3 - A}$
mayor $\frac{0.44 - C}{0.8 - B}$

7) A B C D menor $\frac{0.2 - A}{0.27 - D}$
mayor $\frac{0.51 - C}{0.9 - B}$

8) A B C D menor $\frac{0.20 - C}{0.4 - A}$
mayor $\frac{0.57 - D}{0.7 - B}$

Respuestas

- Ej. D,B,C,A
1. B,C,D,A
2. A,C,B,D
3. C,D,B,A
4. A,C,D,B
5. C,D,A,B
6. D,A,C,B
7. A,D,C,B
8. C,A,D,B