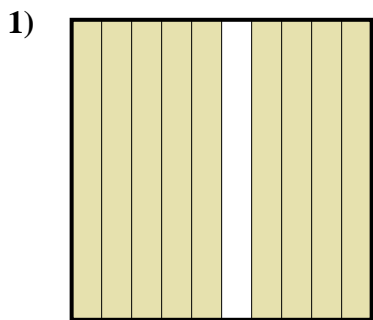
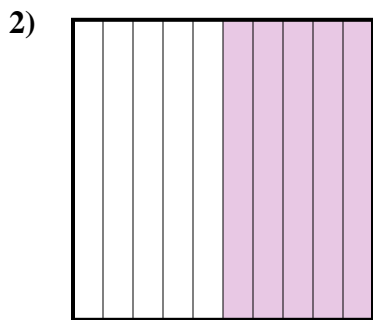





Determina cuál letra mejor representa la cantidad sombreada del total.




- A. 90
- B. 0.09
- C. 0.9
- D. 9



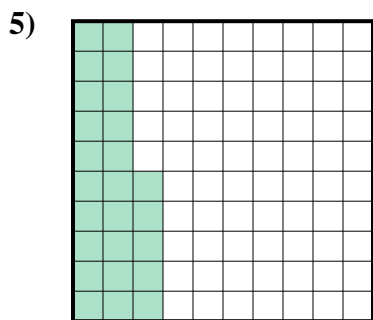
- A. 0.05
- B. 0.5
- C. 50
- D. 5



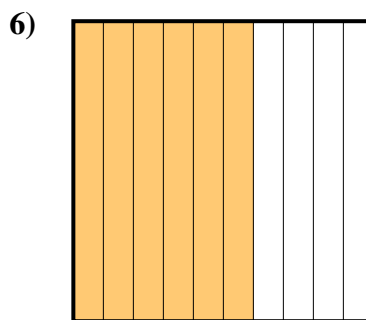
- A. 0.3
- B. 300
- C. 3
- D. 30



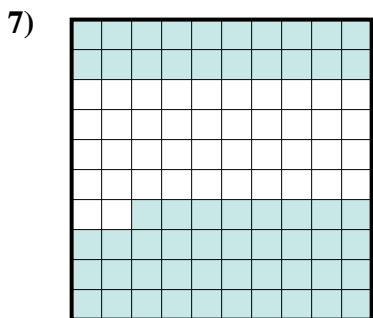
- A. 80
- B. 0.8
- C. 800
- D. 0.08



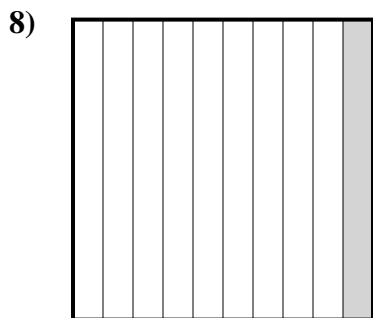
- A. 0.25
- B. 0.025
- C. 25
- D. 250



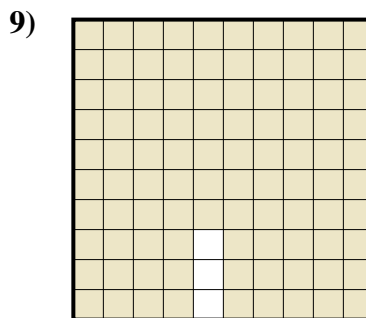
- A. 0.6
- B. 6
- C. 600
- D. 0.06



- A. 580
- B. 5.8
- C. 0.058
- D. 0.58



- A. 100
- B. 0.1
- C. 0.01
- D. 1



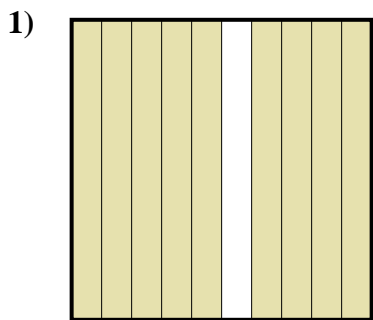
- A. 0.97
- B. 9.7
- C. 0.097
- D. 97

**Respuestas**

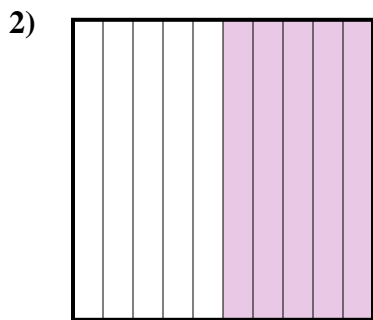
- 1. \_\_\_\_\_
- 2. \_\_\_\_\_
- 3. \_\_\_\_\_
- 4. \_\_\_\_\_
- 5. \_\_\_\_\_
- 6. \_\_\_\_\_
- 7. \_\_\_\_\_
- 8. \_\_\_\_\_
- 9. \_\_\_\_\_




Determina cuál letra mejor representa la cantidad sombreada del total.




- A. 90
- B. 0.09
- C. 0.9
- D. 9



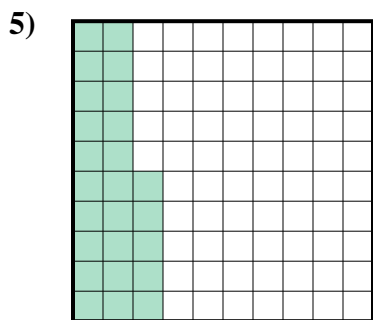
- A. 0.05
- B. 0.5
- C. 50
- D. 5



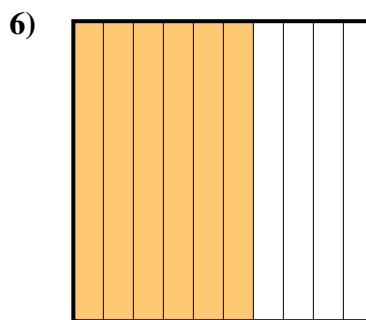
- A. 0.3
- B. 300
- C. 3
- D. 30



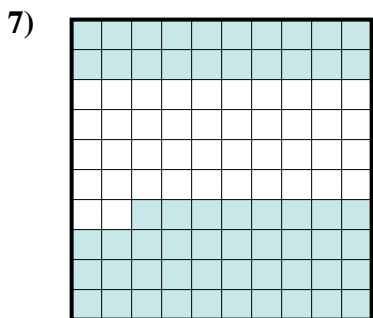
- A. 80
- B. 0.8
- C. 800
- D. 0.08



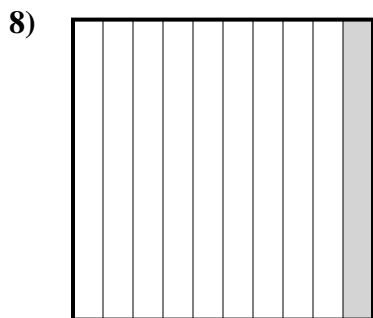
- A. 0.25
- B. 0.025
- C. 25
- D. 250



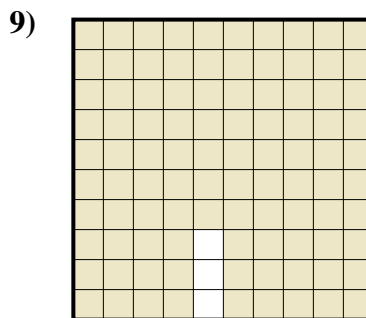
- A. 0.6
- B. 6
- C. 600
- D. 0.06



- A. 580
- B. 5.8
- C. 0.058
- D. 0.58



- A. 100
- B. 0.1
- C. 0.01
- D. 1



- A. 0.97
- B. 9.7
- C. 0.097
- D. 97

**Respuestas**

- 1.           **C**
- 2.           **B**
- 3.           **A**
- 4.           **B**
- 5.           **A**
- 6.           **A**
- 7.           **D**
- 8.           **B**
- 9.           **A**