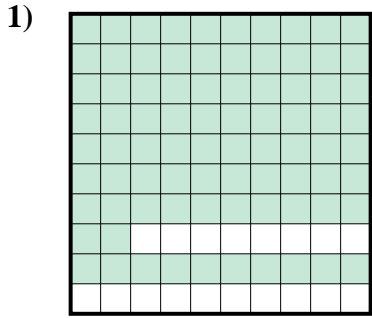
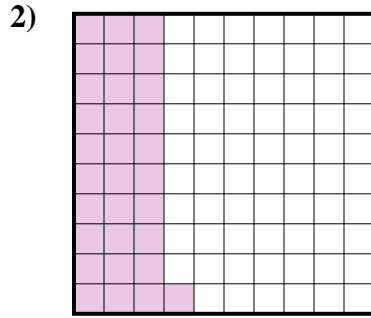




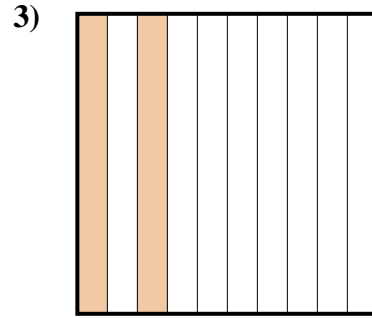
Determina cuál letra mejor representa la cantidad sombreada del total.



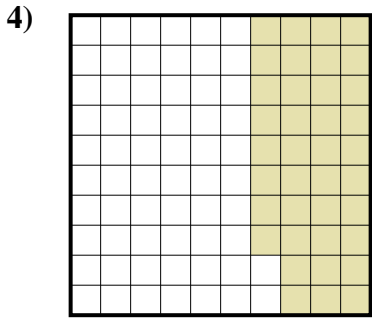
- A. 8.2
- B. 0.82
- C. 82
- D. 820



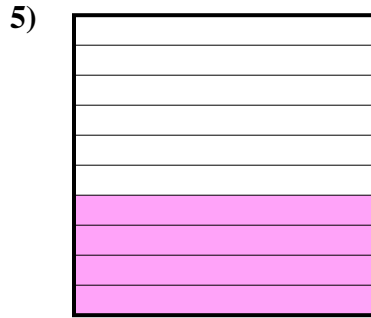
- A. 0.031
- B. 3.1
- C. 310
- D. 0.31



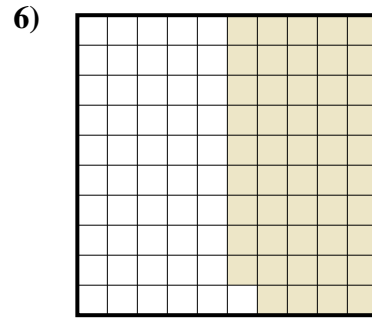
- A. 20
- B. 0.02
- C. 0.2
- D. 200



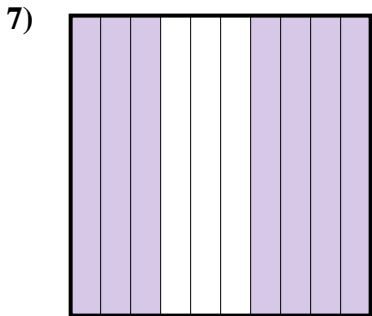
- A. 380
- B. 0.038
- C. 0.38
- D. 38




- A. 40
- B. 400
- C. 0.4
- D. 4



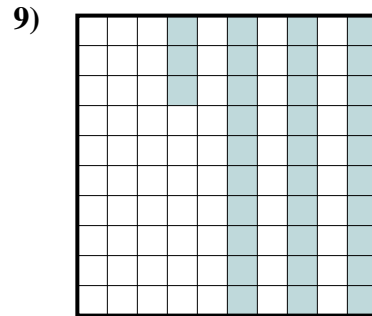
- A. 0.49
- B. 490
- C. 49
- D. 0.049



- A. 70
- B. 700
- C. 0.7
- D. 0.07



- A. 0.1
- B. 0.01
- C. 10
- D. 100



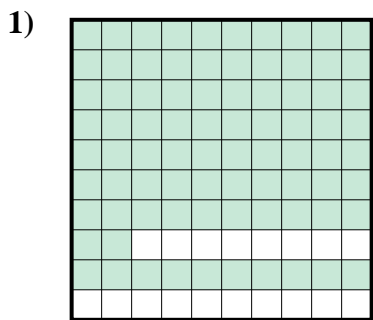
- A. 330
- B. 33
- C. 0.33
- D. 0.033

Respuestas

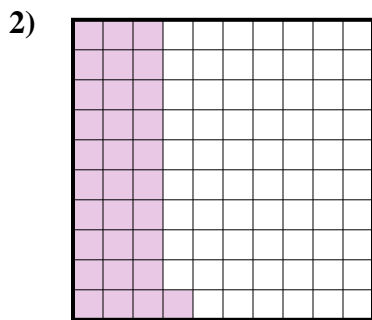
- 1. _____
- 2. _____
- 3. _____
- 4. _____
- 5. _____
- 6. _____
- 7. _____
- 8. _____
- 9. _____



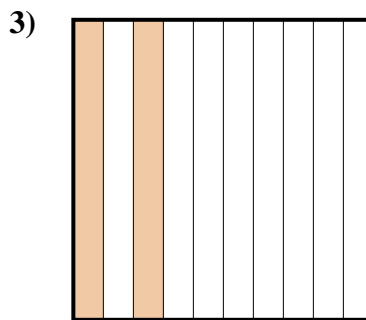
Determina cuál letra mejor representa la cantidad sombreada del total.



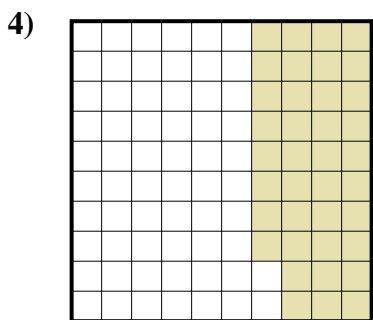
- A. 8.2
- B. 0.82
- C. 82
- D. 820




- A. 0.031
- B. 3.1
- C. 310
- D. 0.31



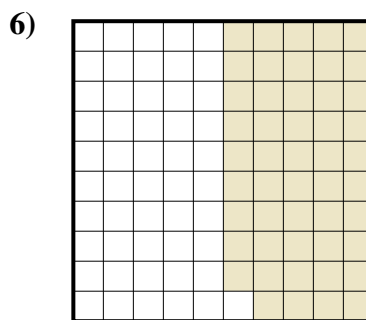
- A. 20
- B. 0.02
- C. 0.2
- D. 200



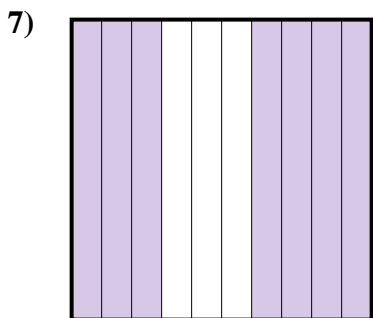
- A. 380
- B. 0.038
- C. 0.38
- D. 38




- A. 40
- B. 400
- C. 0.4
- D. 4



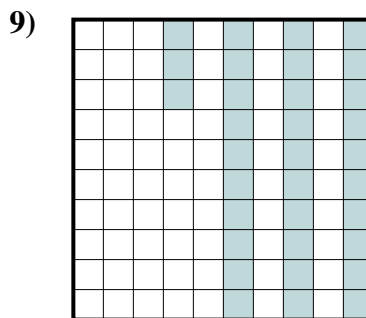
- A. 0.49
- B. 490
- C. 49
- D. 0.049



- A. 70
- B. 700
- C. 0.7
- D. 0.07



- A. 0.1
- B. 0.01
- C. 10
- D. 100



- A. 330
- B. 33
- C. 0.33
- D. 0.033

Respuestas

- 1. **B**
- 2. **D**
- 3. **C**
- 4. **C**
- 5. **C**
- 6. **A**
- 7. **C**
- 8. **A**
- 9. **C**