
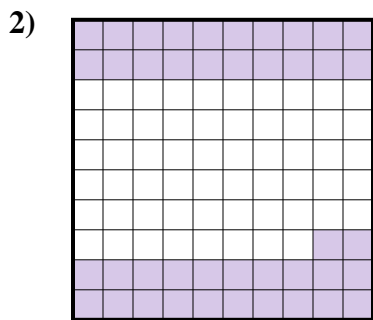





Determina cuál letra mejor representa la cantidad sombreada del total.



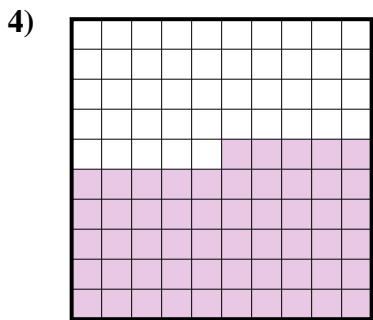
- A. 0.5
- B. 500
- C. 5
- D. 0.05



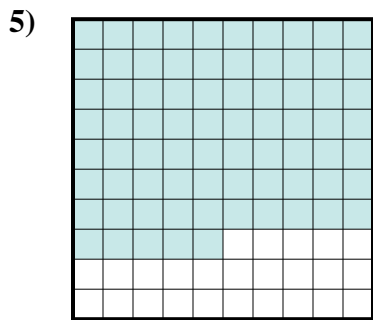
- A. 420
- B. 0.42
- C. 0.042
- D. 4.2



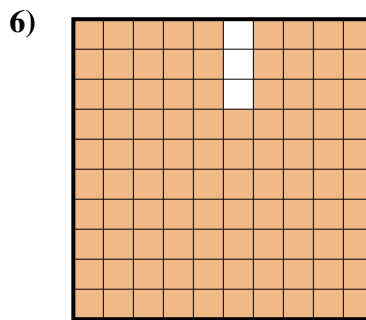
- A. 0.8
- B. 8
- C. 0.08
- D. 800



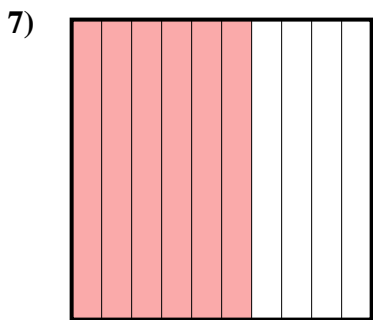
- A. 5.5
- B. 550
- C. 0.055
- D. 0.55



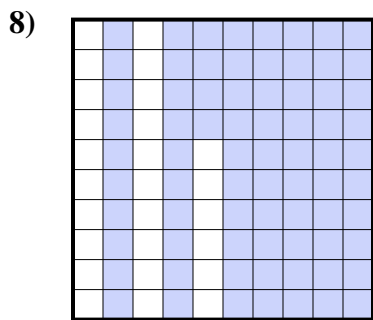
- A. 0.75
- B. 0.075
- C. 750
- D. 75




- A. 970
- B. 97
- C. 0.097
- D. 0.97



- A. 600
- B. 60
- C. 6
- D. 0.6



- A. 0.074
- B. 0.74
- C. 7.4
- D. 74




- A. 1
- B. 100
- C. 0.1
- D. 10

Respuestas

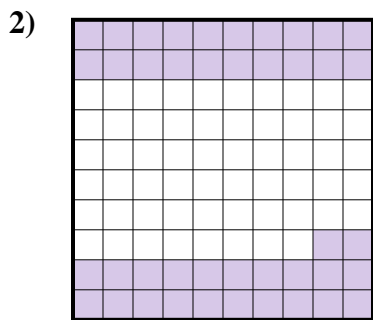
- 1. _____
- 2. _____
- 3. _____
- 4. _____
- 5. _____
- 6. _____
- 7. _____
- 8. _____
- 9. _____




Determina cuál letra mejor representa la cantidad sombreada del total.



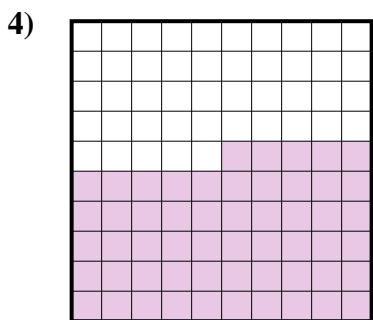
- A. 0.5
- B. 500
- C. 5
- D. 0.05



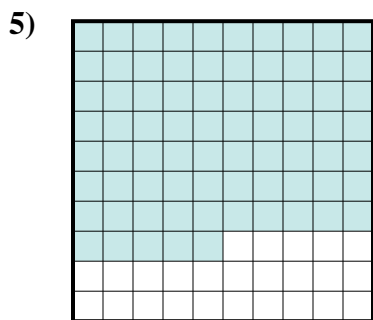
- A. 420
- B. 0.42
- C. 0.042
- D. 4.2



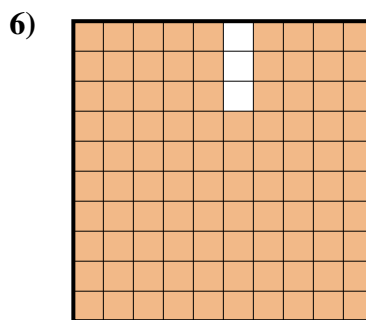
- A. 0.8
- B. 8
- C. 0.08
- D. 800



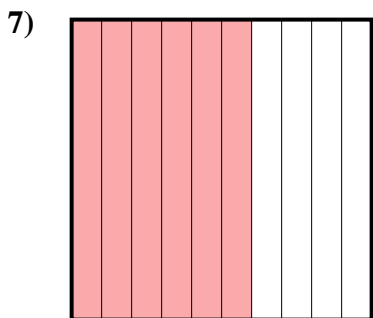
- A. 5.5
- B. 550
- C. 0.055
- D. 0.55



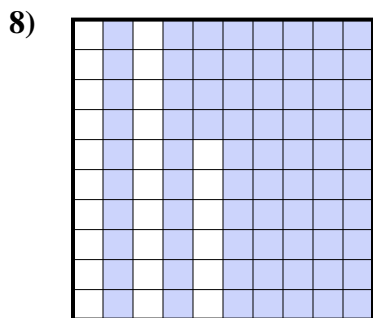
- A. 0.75
- B. 0.075
- C. 750
- D. 75




- A. 970
- B. 97
- C. 0.097
- D. 0.97



- A. 600
- B. 60
- C. 6
- D. 0.6



- A. 0.074
- B. 0.74
- C. 7.4
- D. 74



- A. 1
- B. 100
- C. 0.1
- D. 10

Respuestas

- 1. **A**
- 2. **B**
- 3. **A**
- 4. **D**
- 5. **A**
- 6. **D**
- 7. **D**
- 8. **B**
- 9. **C**