
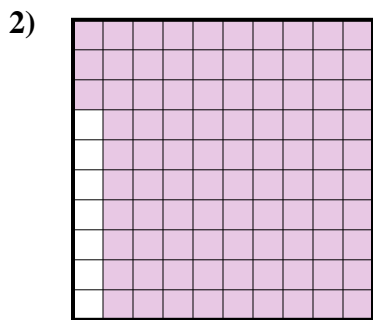




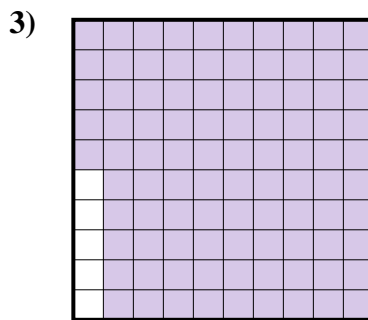
Determina cuál letra mejor representa la cantidad sombreada del total.



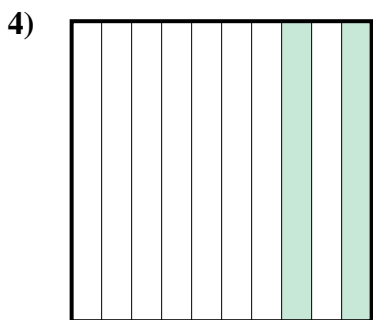
- A. 0.8
- B. 800
- C. 80
- D. 0.08



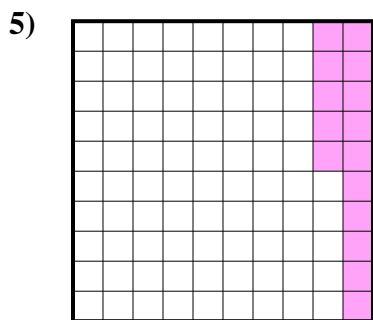
- A. 0.93
- B. 9.3
- C. 93
- D. 930



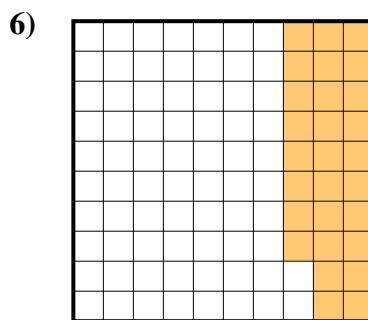
- A. 0.095
- B. 0.95
- C. 95
- D. 9.5




- A. 200
- B. 0.2
- C. 20
- D. 2



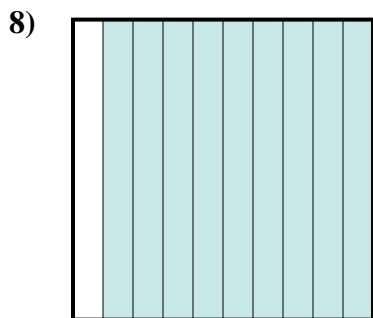
- A. 0.15
- B. 1.5
- C. 0.015
- D. 150



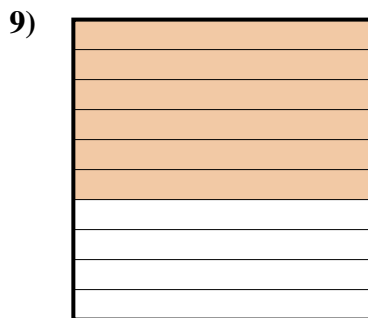
- A. 0.28
- B. 28
- C. 280
- D. 0.028



- A. 3
- B. 30
- C. 0.3
- D. 300



- A. 900
- B. 0.09
- C. 90
- D. 0.9




- A. 60
- B. 0.6
- C. 600
- D. 6

Respuestas

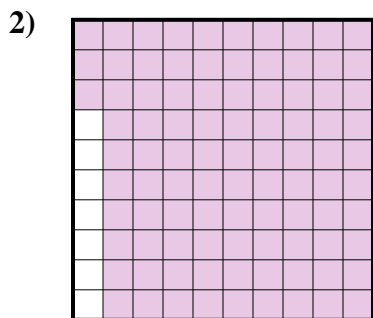
- 1. _____
- 2. _____
- 3. _____
- 4. _____
- 5. _____
- 6. _____
- 7. _____
- 8. _____
- 9. _____



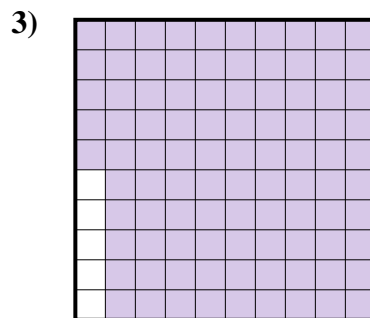
Determina cuál letra mejor representa la cantidad sombreada del total.



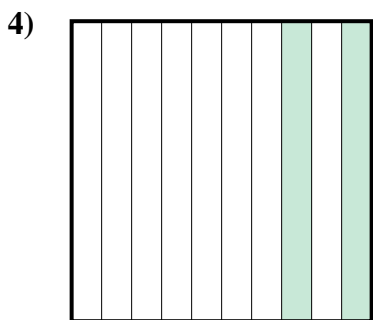
- A. 0.8
- B. 800
- C. 80
- D. 0.08



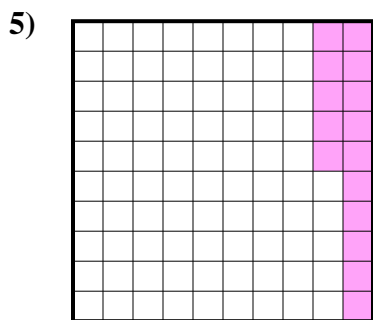
- A. 0.93
- B. 9.3
- C. 93
- D. 930



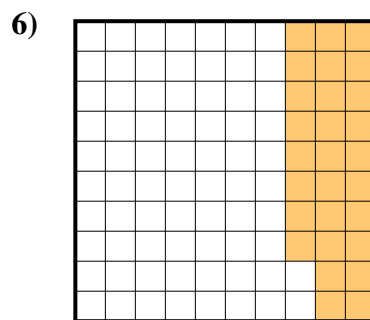
- A. 0.095
- B. 0.95
- C. 95
- D. 9.5




- A. 200
- B. 0.2
- C. 20
- D. 2



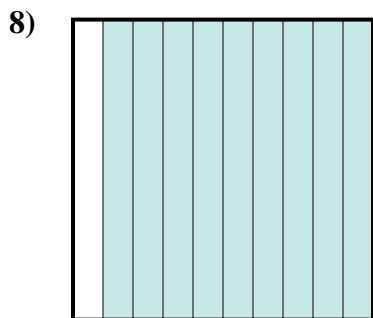
- A. 0.15
- B. 1.5
- C. 0.015
- D. 150




- A. 0.28
- B. 28
- C. 280
- D. 0.028



- A. 3
- B. 30
- C. 0.3
- D. 300



- A. 900
- B. 0.09
- C. 90
- D. 0.9



- A. 60
- B. 0.6
- C. 600
- D. 6

Respuestas

- 1. **A**
- 2. **A**
- 3. **B**
- 4. **B**
- 5. **A**
- 6. **A**
- 7. **C**
- 8. **D**
- 9. **B**