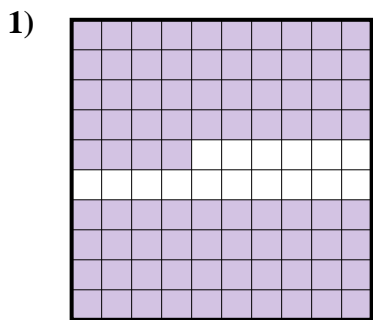
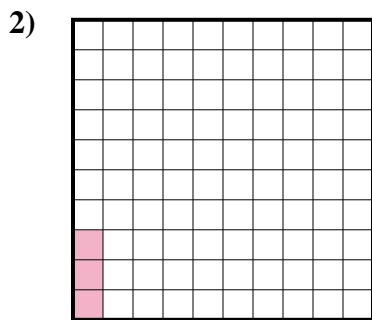




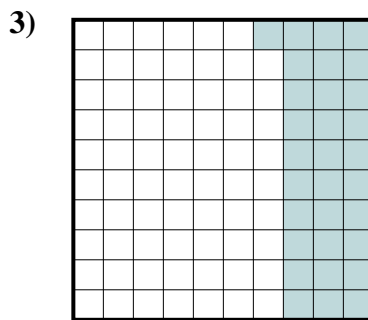
Determina cuál letra mejor representa la cantidad sombreada del total.



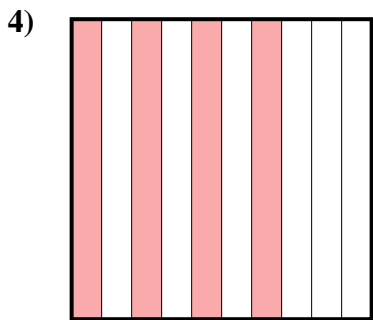
- A. 84
- B. 0.084
- C. 0.84
- D. 8.4



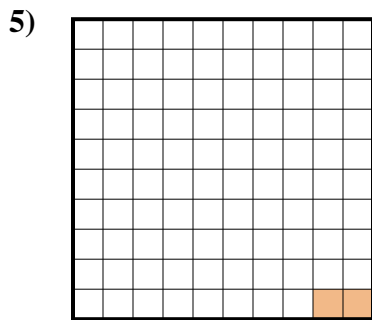
- A. 3
- B. 0.3
- C. 0.003
- D. 0.03



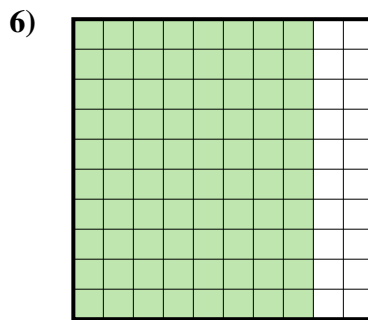
- A. 310
- B. 3.1
- C. 31
- D. 0.31



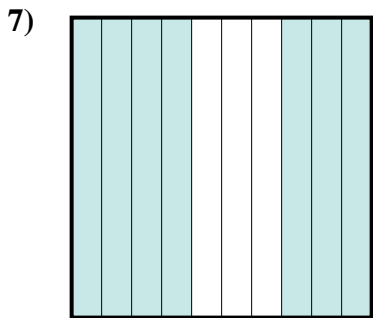
- A. 40
- B. 0.4
- C. 0.04
- D. 4



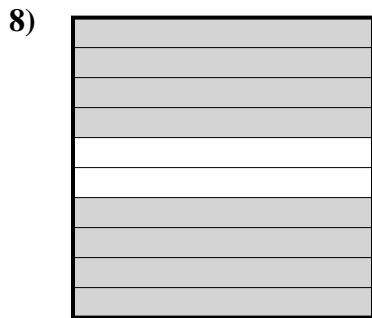
- A. 20
- B. 0.02
- C. 0.002
- D. 0.2



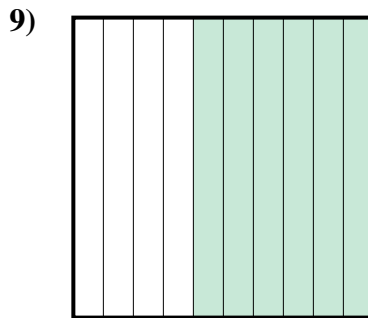
- A. 8
- B. 0.08
- C. 0.8
- D. 800



- A. 7
- B. 0.07
- C. 700
- D. 0.7



- A. 8
- B. 80
- C. 0.8
- D. 0.08



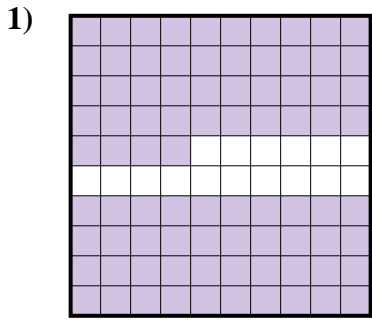
- A. 0.6
- B. 600
- C. 0.06
- D. 60

**Respuestas**

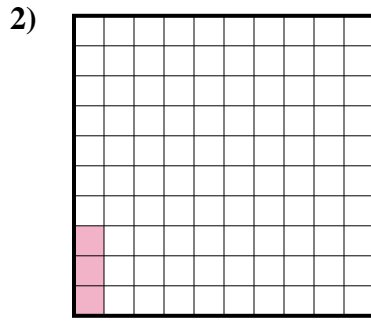
- 1. \_\_\_\_\_
- 2. \_\_\_\_\_
- 3. \_\_\_\_\_
- 4. \_\_\_\_\_
- 5. \_\_\_\_\_
- 6. \_\_\_\_\_
- 7. \_\_\_\_\_
- 8. \_\_\_\_\_
- 9. \_\_\_\_\_



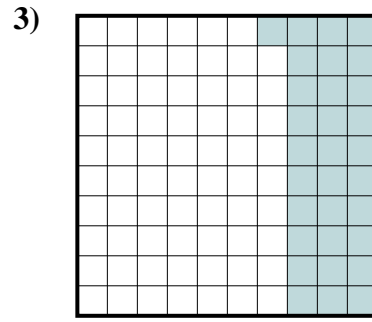
Determina cuál letra mejor representa la cantidad sombreada del total.



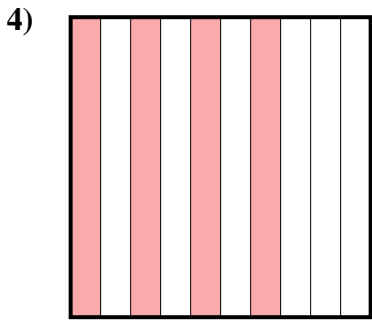
- A. 84
- B. 0.084
- C. 0.84
- D. 8.4



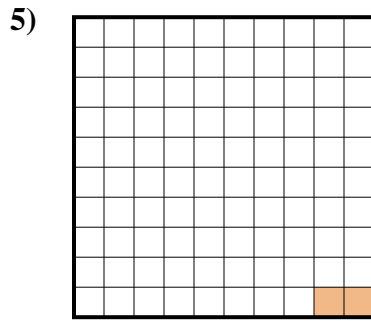
- A. 3
- B. 0.3
- C. 0.003
- D. 0.03



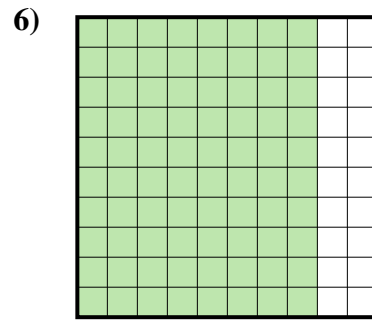
- A. 310
- B. 3.1
- C. 31
- D. 0.31



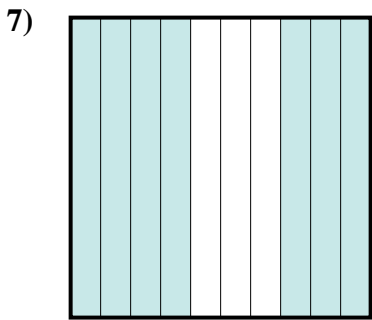
- A. 40
- B. 0.4
- C. 0.04
- D. 4



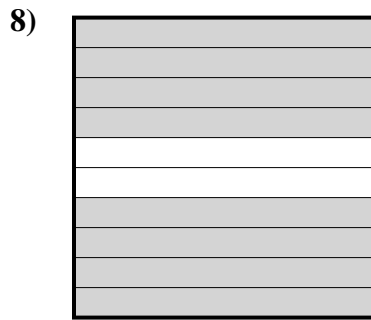
- A. 20
- B. 0.02
- C. 0.002
- D. 0.2



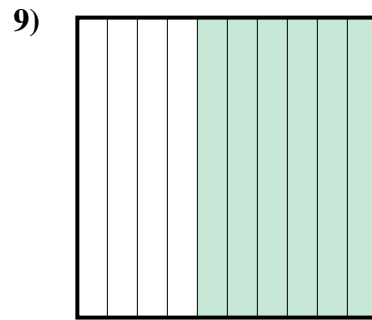
- A. 8
- B. 0.08
- C. 0.8
- D. 800



- A. 7
- B. 0.07
- C. 700
- D. 0.7



- A. 8
- B. 80
- C. 0.8
- D. 0.08



- A. 0.6
- B. 600
- C. 0.06
- D. 60

**Respuestas**

- 1.           **C**
- 2.           **D**
- 3.           **D**
- 4.           **B**
- 5.           **B**
- 6.           **C**
- 7.           **D**
- 8.           **C**
- 9.           **A**