
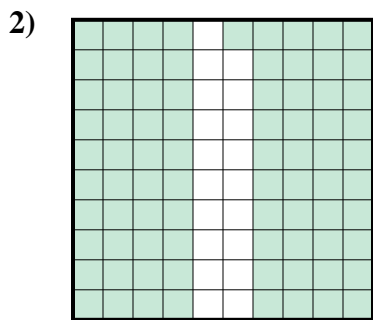




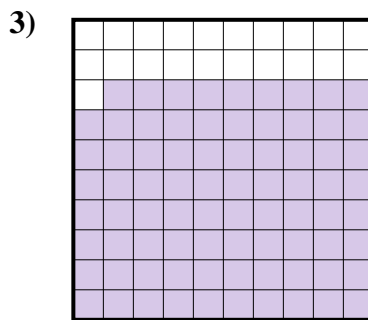
Determina cuál letra mejor representa la cantidad sombreada del total.



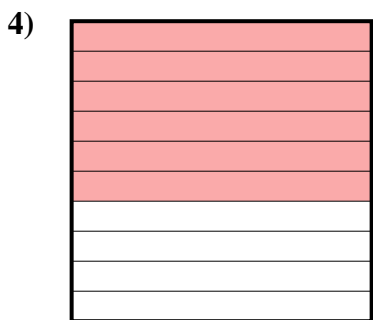
- A. 0.3
- B. 300
- C. 30
- D. 0.03



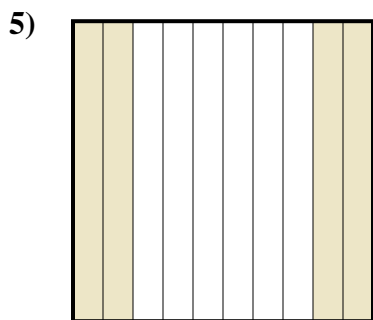
- A. 81
- B. 810
- C. 0.081
- D. 0.81



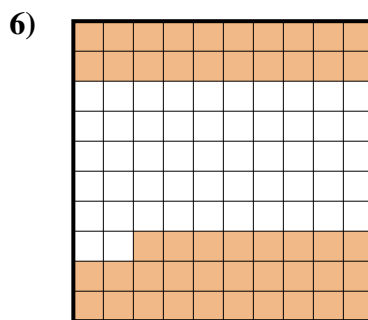
- A. 0.79
- B. 7.9
- C. 790
- D. 79



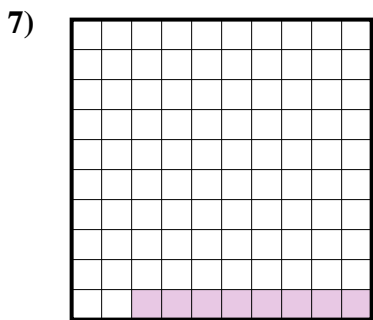
- A. 600
- B. 0.6
- C. 0.06
- D. 60



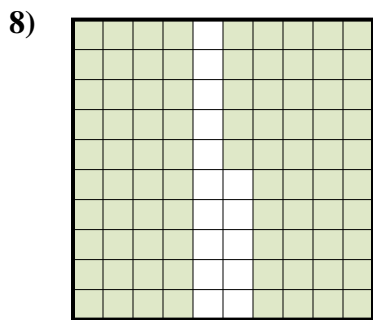
- A. 4
- B. 0.04
- C. 400
- D. 0.4




- A. 480
- B. 0.48
- C. 48
- D. 4.8



- A. 0.8
- B. 0.08
- C. 0.008
- D. 80



- A. 0.085
- B. 8.5
- C. 0.85
- D. 850




- A. 0.09
- B. 90
- C. 900
- D. 0.9

Respuestas

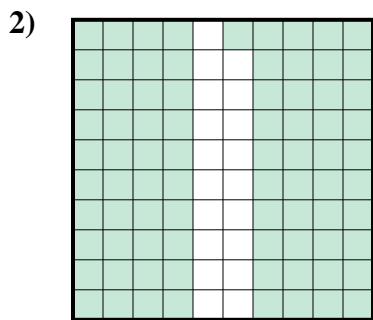
- 1. _____
- 2. _____
- 3. _____
- 4. _____
- 5. _____
- 6. _____
- 7. _____
- 8. _____
- 9. _____



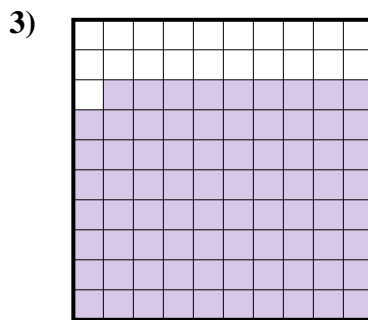
Determina cuál letra mejor representa la cantidad sombreada del total.



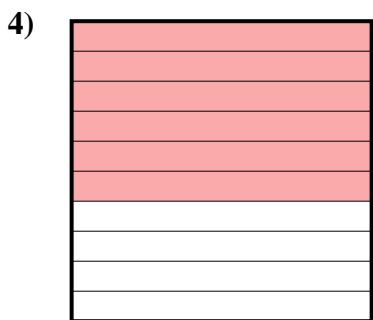
- A. 0.3
- B. 300
- C. 30
- D. 0.03



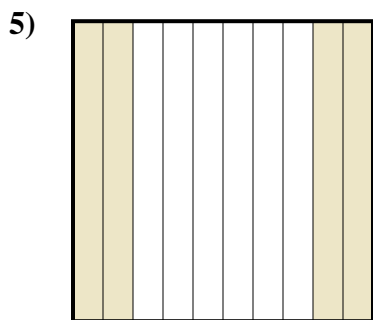
- A. 81
- B. 810
- C. 0.081
- D. 0.81



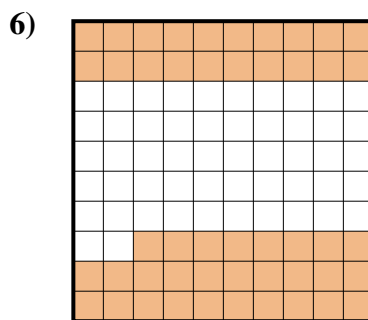
- A. 0.79
- B. 7.9
- C. 790
- D. 79



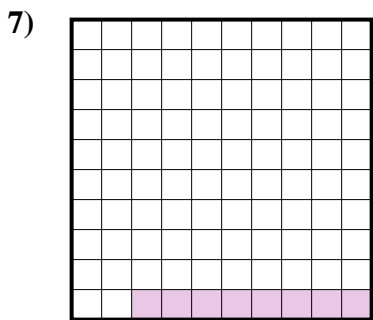
- A. 600
- B. 0.6
- C. 0.06
- D. 60



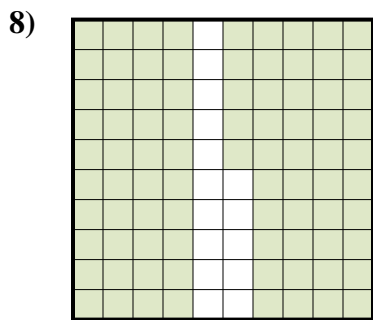
- A. 4
- B. 0.04
- C. 400
- D. 0.4




- A. 480
- B. 0.48
- C. 48
- D. 4.8



- A. 0.8
- B. 0.08
- C. 0.008
- D. 80



- A. 0.085
- B. 8.5
- C. 0.85
- D. 850



- A. 0.09
- B. 90
- C. 900
- D. 0.9

Respuestas

- 1. **A**
- 2. **D**
- 3. **A**
- 4. **B**
- 5. **D**
- 6. **B**
- 7. **B**
- 8. **C**
- 9. **D**