
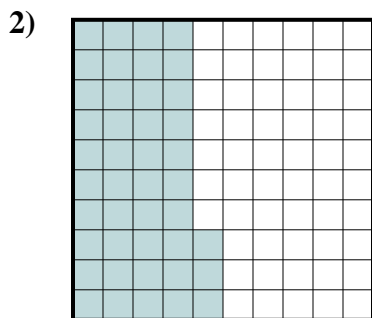





Determina cuál letra mejor representa la cantidad sombreada del total.



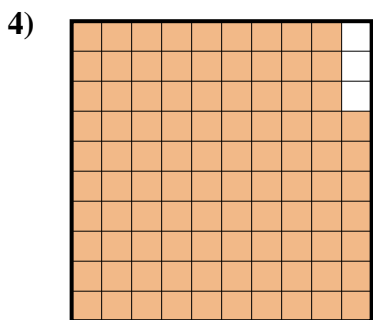
- A. 4
- B. 40
- C. 0.4
- D. 0.04




- A. 0.043
- B. 4.3
- C. 0.43
- D. 430



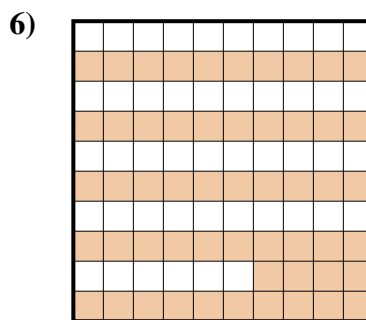
- A. 2
- B. 0.2
- C. 200
- D. 20



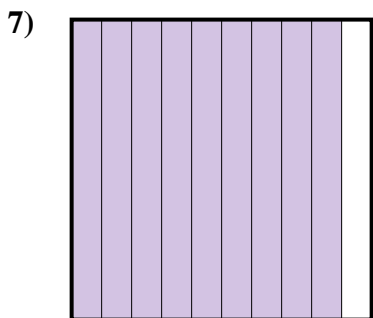
- A. 0.97
- B. 97
- C. 0.097
- D. 9.7



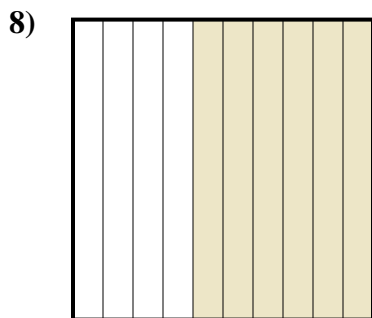
- A. 800
- B. 8
- C. 0.8
- D. 80




- A. 0.54
- B. 54
- C. 540
- D. 0.054



- A. 900
- B. 90
- C. 0.9
- D. 9



- A. 0.06
- B. 60
- C. 6
- D. 0.6




- A. 0.03
- B. 30
- C. 0.3
- D. 3

Respuestas

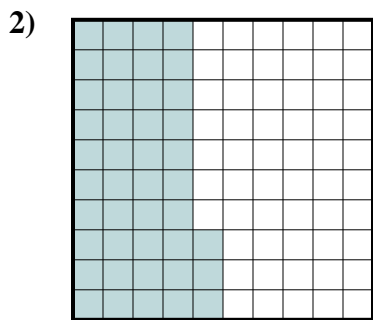
- 1. _____
- 2. _____
- 3. _____
- 4. _____
- 5. _____
- 6. _____
- 7. _____
- 8. _____
- 9. _____




Determina cuál letra mejor representa la cantidad sombreada del total.



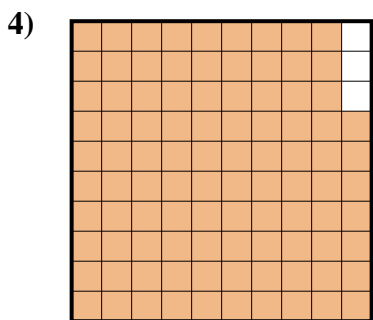
- A. 4
- B. 40
- C. 0.4
- D. 0.04



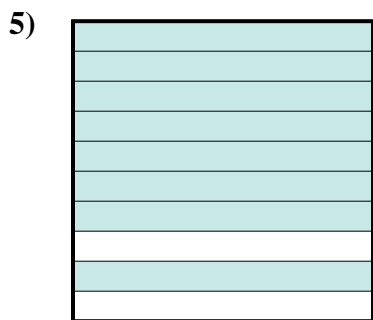
- A. 0.043
- B. 4.3
- C. 0.43
- D. 430



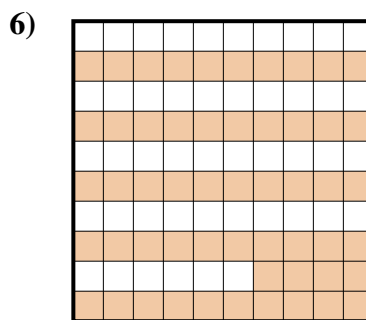
- A. 2
- B. 0.2
- C. 200
- D. 20



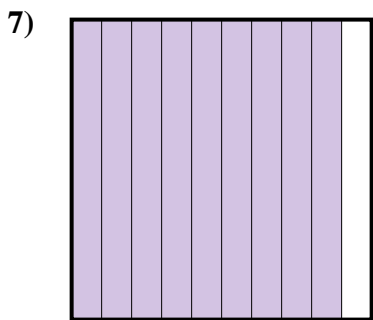
- A. 0.97
- B. 97
- C. 0.097
- D. 9.7



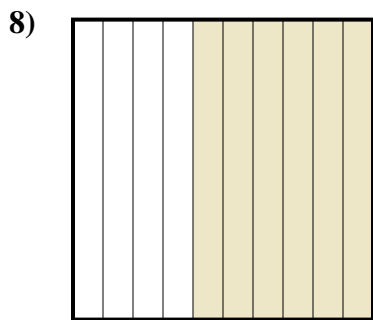
- A. 800
- B. 8
- C. 0.8
- D. 80




- A. 0.54
- B. 54
- C. 540
- D. 0.054



- A. 900
- B. 90
- C. 0.9
- D. 9



- A. 0.06
- B. 60
- C. 6
- D. 0.6



- A. 0.03
- B. 30
- C. 0.3
- D. 3

Respuestas

- 1. **C**
- 2. **C**
- 3. **B**
- 4. **A**
- 5. **C**
- 6. **A**
- 7. **C**
- 8. **D**
- 9. **C**