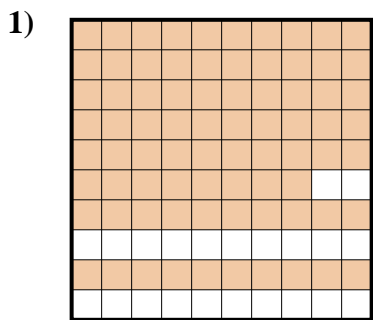
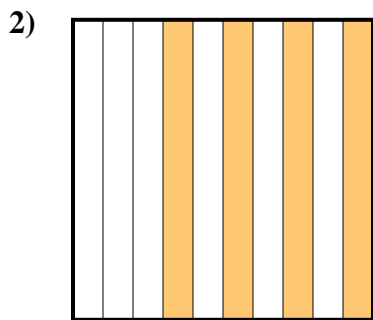




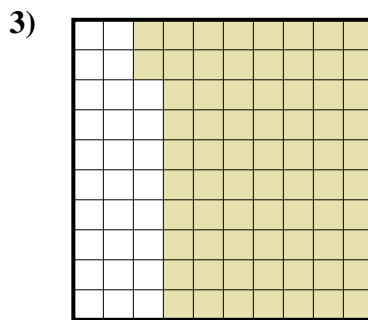
Determina cuál letra mejor representa la cantidad sombreada del total.




- A. 7.8
- B. 78
- C. 0.78
- D. 780



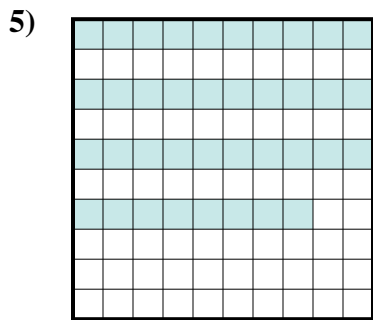
- A. 0.04
- B. 4
- C. 400
- D. 0.4



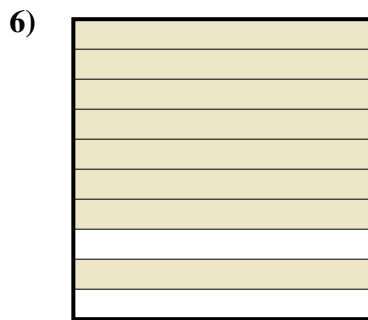
- A. 0.72
- B. 720
- C. 7.2
- D. 72



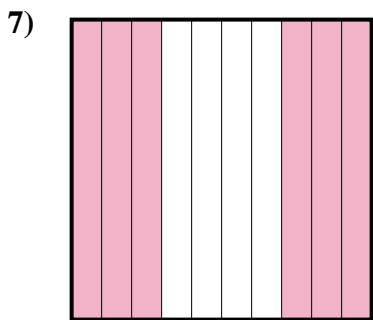
- A. 1
- B. 100
- C. 0.01
- D. 0.1



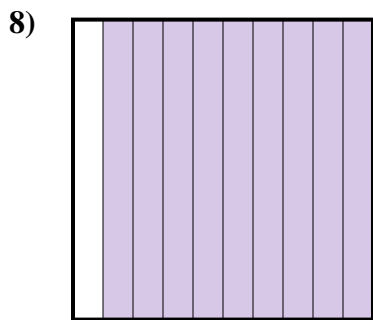
- A. 0.38
- B. 380
- C. 0.038
- D. 3.8



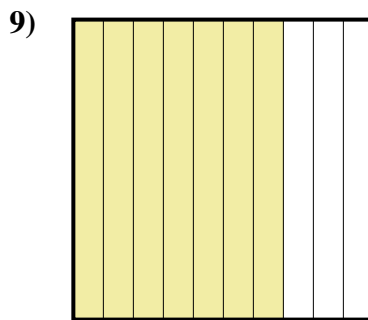
- A. 800
- B. 0.08
- C. 80
- D. 0.8



- A. 0.6
- B. 600
- C. 60
- D. 0.06



- A. 900
- B. 90
- C. 0.9
- D. 9



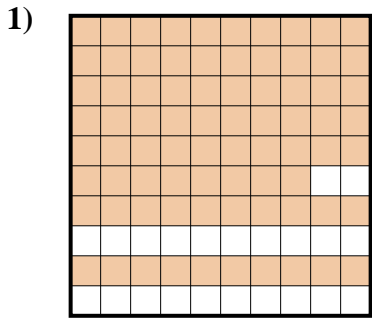
- A. 0.07
- B. 0.7
- C. 7
- D. 700

**Respuestas**

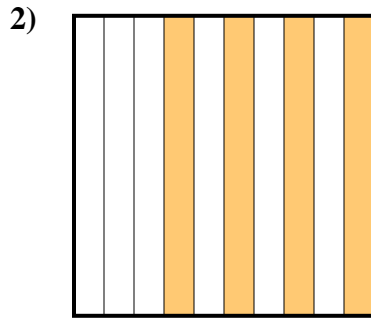
- 1. \_\_\_\_\_
- 2. \_\_\_\_\_
- 3. \_\_\_\_\_
- 4. \_\_\_\_\_
- 5. \_\_\_\_\_
- 6. \_\_\_\_\_
- 7. \_\_\_\_\_
- 8. \_\_\_\_\_
- 9. \_\_\_\_\_



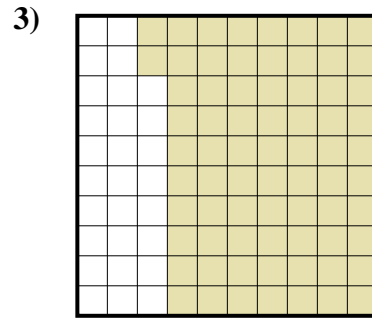
Determina cuál letra mejor representa la cantidad sombreada del total.




- A. 7.8
- B. 78
- C. 0.78
- D. 780



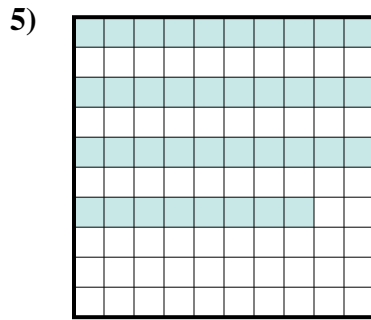
- A. 0.04
- B. 4
- C. 400
- D. 0.4



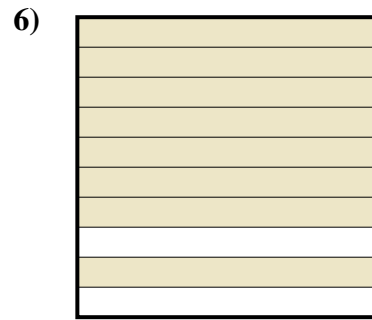
- A. 0.72
- B. 720
- C. 7.2
- D. 72



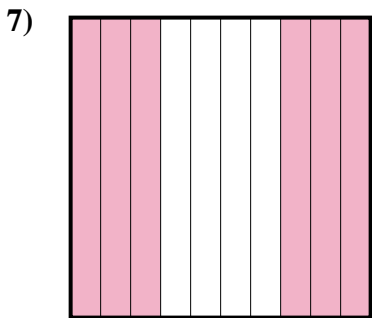
- A. 1
- B. 100
- C. 0.01
- D. 0.1



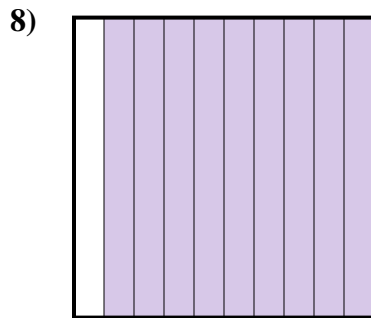
- A. 0.38
- B. 380
- C. 0.038
- D. 3.8



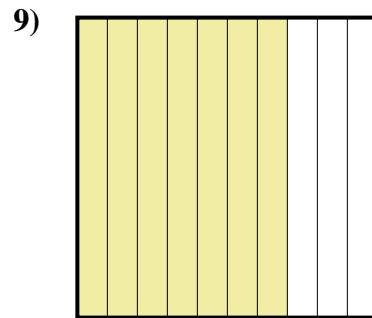
- A. 800
- B. 0.08
- C. 80
- D. 0.8



- A. 0.6
- B. 600
- C. 60
- D. 0.06



- A. 900
- B. 90
- C. 0.9
- D. 9



- A. 0.07
- B. 0.7
- C. 7
- D. 700

**Respuestas**

- 1.           **C**
- 2.           **D**
- 3.           **A**
- 4.           **D**
- 5.           **A**
- 6.           **D**
- 7.           **A**
- 8.           **C**
- 9.           **B**