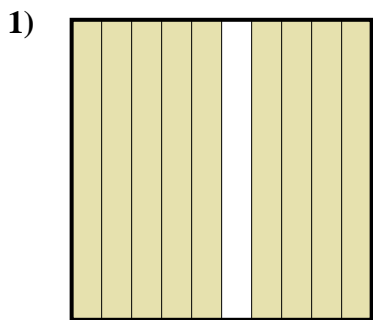


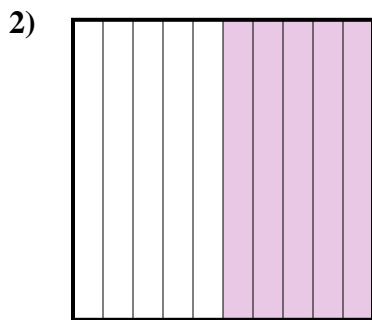


Determina cuál letra mejor representa la cantidad sombreada del total.


Respuestas




- A. 90
- B. 0.09
- C. 0.9
- D. 9



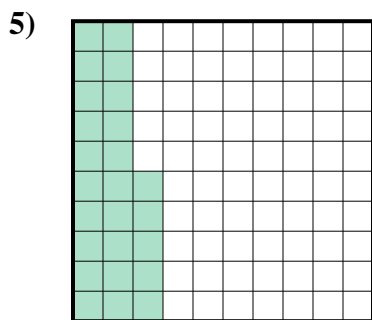
- A. 0.05
- B. 0.5
- C. 50
- D. 5



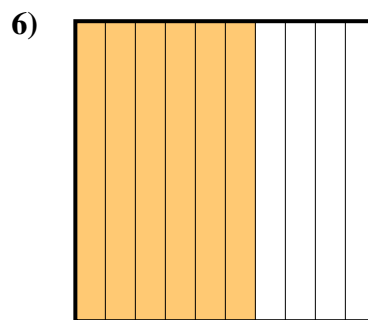
- A. 0.3
- B. 300
- C. 3
- D. 30



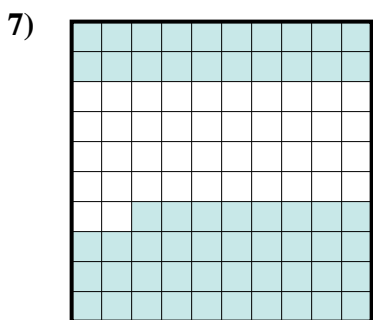
- A. 80
- B. 0.8
- C. 800
- D. 0.08



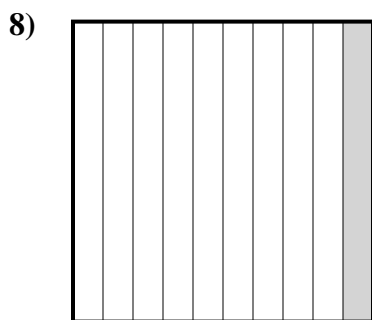
- A. 0.25
- B. 0.025
- C. 25
- D. 250



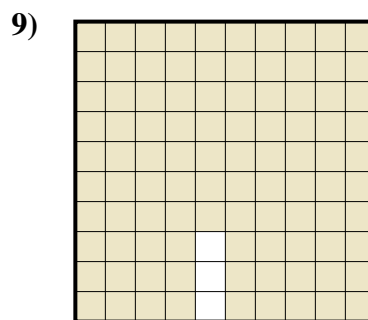
- A. 0.6
- B. 6
- C. 600
- D. 0.06



- A. 580
- B. 5.8
- C. 0.058
- D. 0.58



- A. 100
- B. 0.1
- C. 0.01
- D. 1

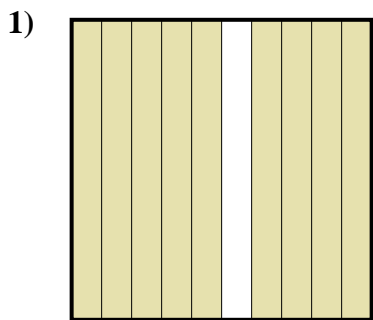


- A. 0.97
- B. 9.7
- C. 0.097
- D. 97

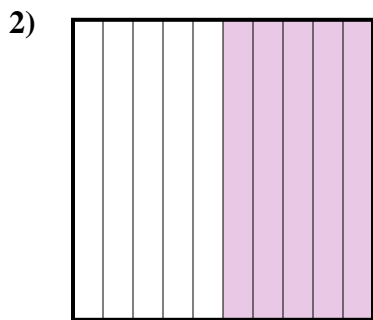
- 1. _____
- 2. _____
- 3. _____
- 4. _____
- 5. _____
- 6. _____
- 7. _____
- 8. _____
- 9. _____




Determina cuál letra mejor representa la cantidad sombreada del total.




- A. 90
- B. 0.09
- C. 0.9
- D. 9



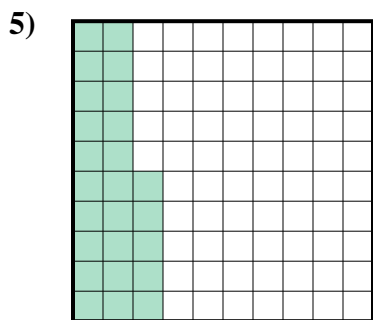
- A. 0.05
- B. 0.5
- C. 50
- D. 5



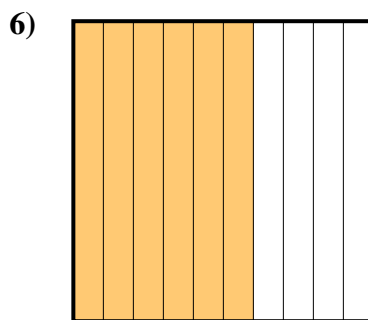
- A. 0.3
- B. 300
- C. 3
- D. 30



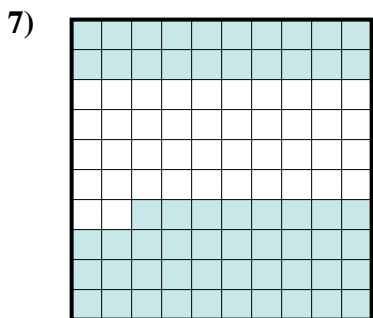
- A. 80
- B. 0.8
- C. 800
- D. 0.08



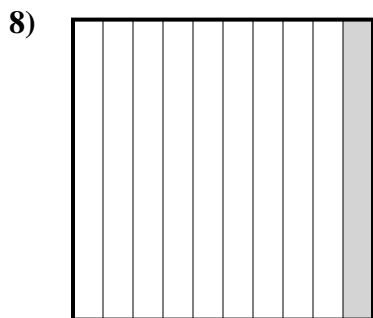
- A. 0.25
- B. 0.025
- C. 25
- D. 250



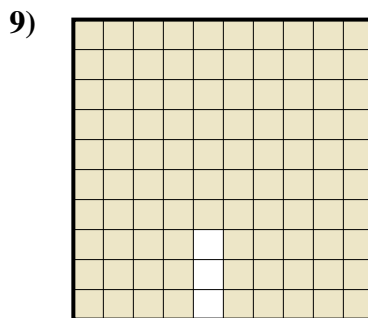
- A. 0.6
- B. 6
- C. 600
- D. 0.06



- A. 580
- B. 5.8
- C. 0.058
- D. 0.58



- A. 100
- B. 0.1
- C. 0.01
- D. 1




- A. 0.97
- B. 9.7
- C. 0.097
- D. 97

Respuestas

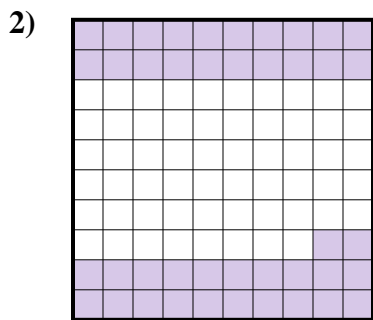
- 1. **C**
- 2. **B**
- 3. **A**
- 4. **B**
- 5. **A**
- 6. **A**
- 7. **D**
- 8. **B**
- 9. **A**




Determina cuál letra mejor representa la cantidad sombreada del total.



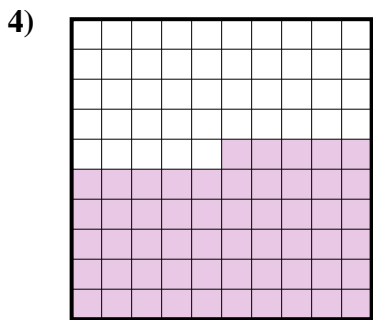
- A. 0.5
- B. 500
- C. 5
- D. 0.05



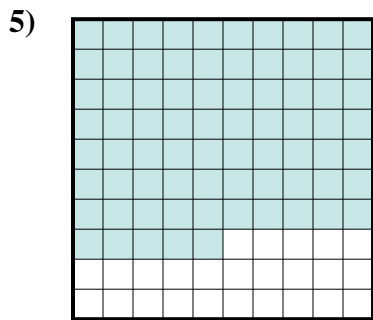
- A. 420
- B. 0.42
- C. 0.042
- D. 4.2



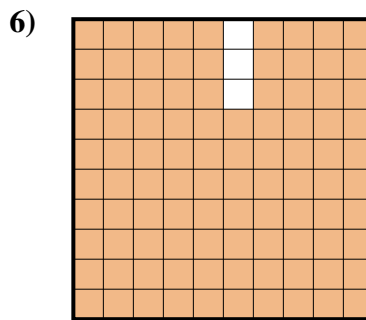
- A. 0.8
- B. 8
- C. 0.08
- D. 800



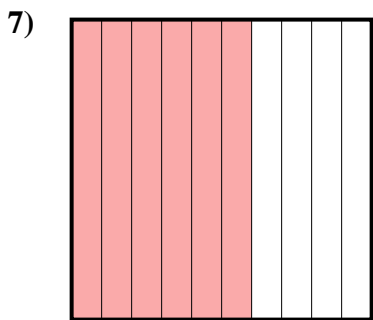
- A. 5.5
- B. 550
- C. 0.055
- D. 0.55



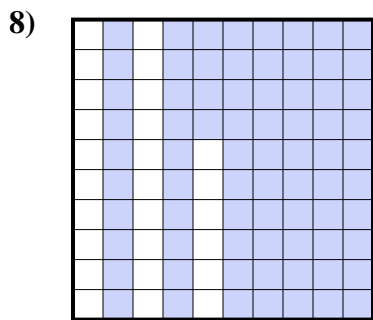
- A. 0.75
- B. 0.075
- C. 750
- D. 75




- A. 970
- B. 97
- C. 0.097
- D. 0.97



- A. 600
- B. 60
- C. 6
- D. 0.6



- A. 0.074
- B. 0.74
- C. 7.4
- D. 74




- A. 1
- B. 100
- C. 0.1
- D. 10

Respuestas

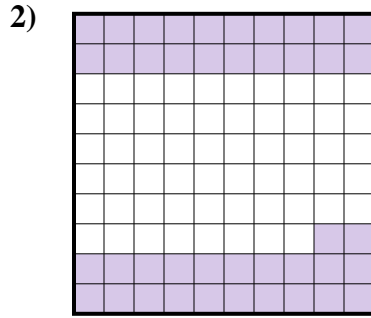
- 1. _____
- 2. _____
- 3. _____
- 4. _____
- 5. _____
- 6. _____
- 7. _____
- 8. _____
- 9. _____



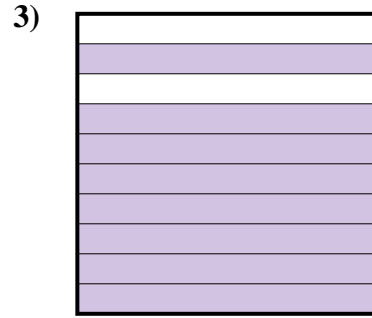
Determina cuál letra mejor representa la cantidad sombreada del total.



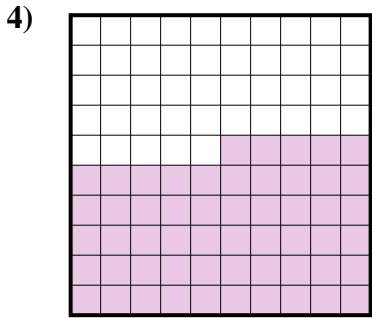
- A. 0.5
- B. 500
- C. 5
- D. 0.05



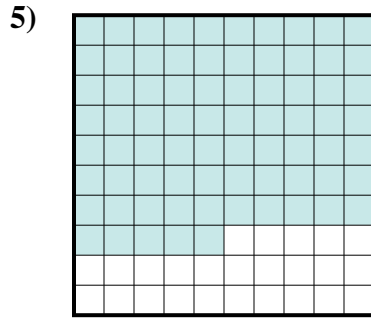
- A. 420
- B. 0.42
- C. 0.042
- D. 4.2



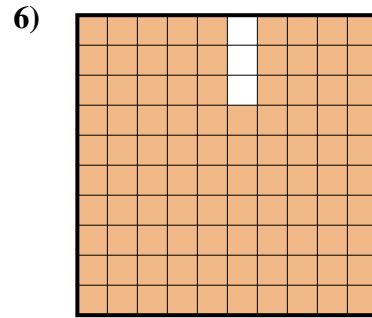
- A. 0.8
- B. 8
- C. 0.08
- D. 800



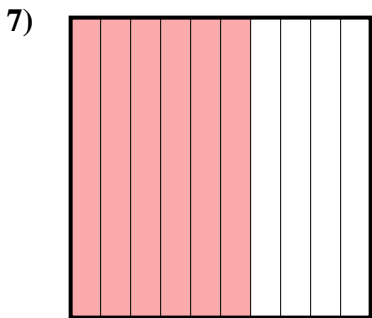
- A. 5.5
- B. 550
- C. 0.055
- D. 0.55



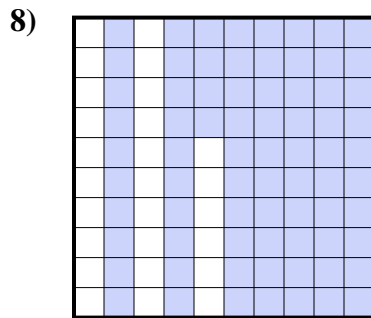
- A. 0.75
- B. 0.075
- C. 750
- D. 75




- A. 970
- B. 97
- C. 0.097
- D. 0.97



- A. 600
- B. 60
- C. 6
- D. 0.6



- A. 0.074
- B. 0.74
- C. 7.4
- D. 74




- A. 1
- B. 100
- C. 0.1
- D. 10

Respuestas

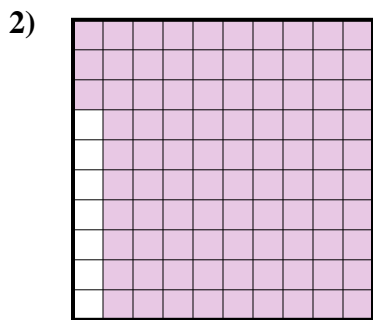
- 1. **A**
- 2. **B**
- 3. **A**
- 4. **D**
- 5. **A**
- 6. **D**
- 7. **D**
- 8. **B**
- 9. **C**



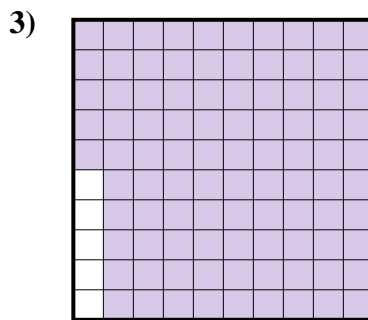
Determina cuál letra mejor representa la cantidad sombreada del total.



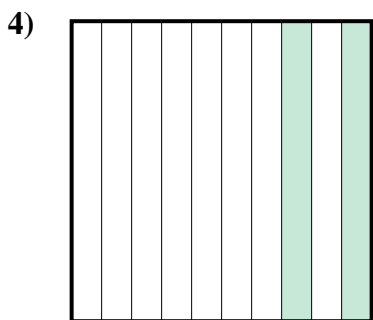
- A. 0.8
- B. 800
- C. 80
- D. 0.08



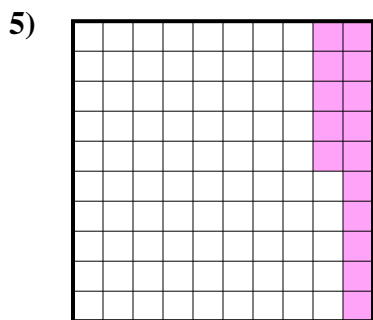
- A. 0.93
- B. 9.3
- C. 93
- D. 930



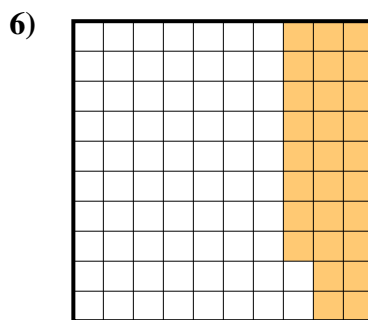
- A. 0.095
- B. 0.95
- C. 95
- D. 9.5




- A. 200
- B. 0.2
- C. 20
- D. 2



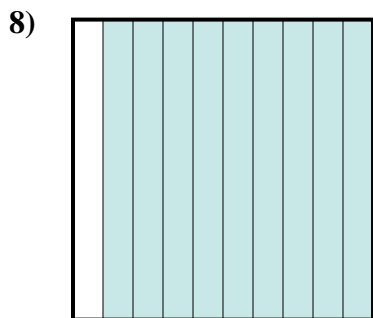
- A. 0.15
- B. 1.5
- C. 0.015
- D. 150



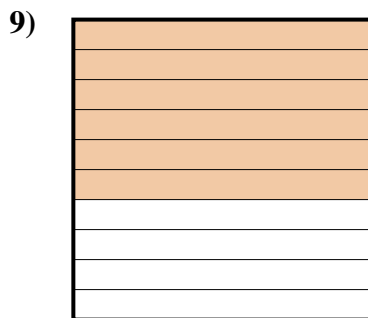
- A. 0.28
- B. 28
- C. 280
- D. 0.028



- A. 3
- B. 30
- C. 0.3
- D. 300



- A. 900
- B. 0.09
- C. 90
- D. 0.9




- A. 60
- B. 0.6
- C. 600
- D. 6

Respuestas

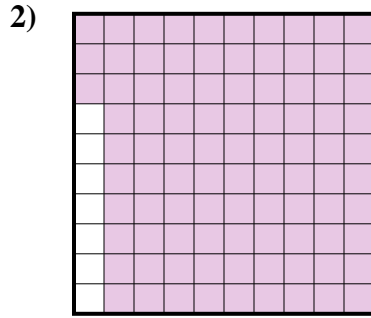
- 1. _____
- 2. _____
- 3. _____
- 4. _____
- 5. _____
- 6. _____
- 7. _____
- 8. _____
- 9. _____



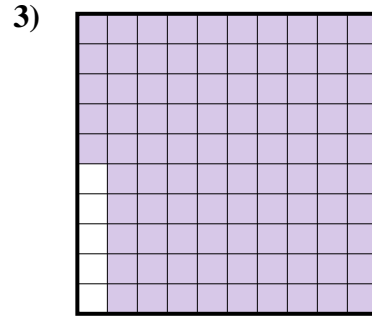
Determina cuál letra mejor representa la cantidad sombreada del total.



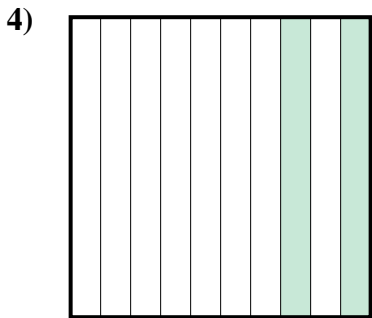
- A. 0.8
- B. 800
- C. 80
- D. 0.08



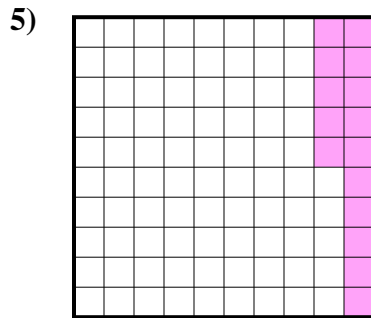
- A. 0.93
- B. 9.3
- C. 93
- D. 930



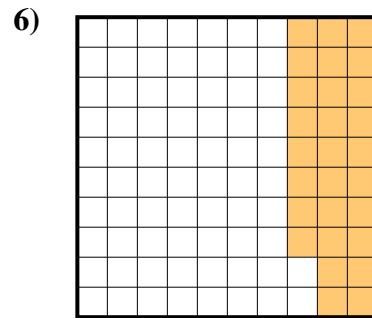
- A. 0.095
- B. 0.95
- C. 95
- D. 9.5



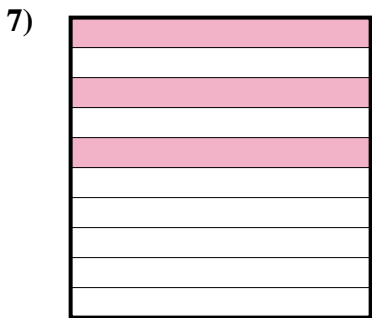
- A. 200
- B. 0.2
- C. 20
- D. 2



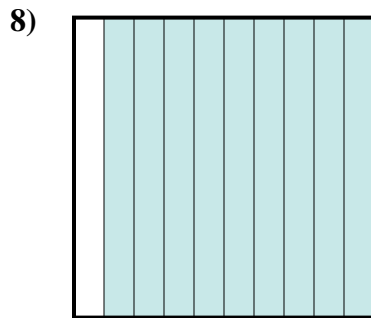
- A. 0.15
- B. 1.5
- C. 0.015
- D. 150



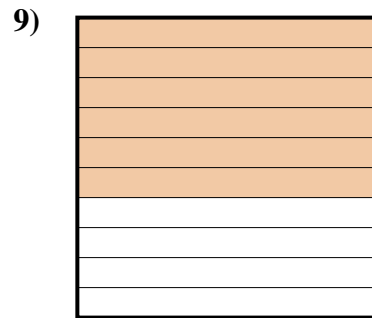
- A. 0.28
- B. 28
- C. 280
- D. 0.028



- A. 3
- B. 30
- C. 0.3
- D. 300



- A. 900
- B. 0.09
- C. 90
- D. 0.9



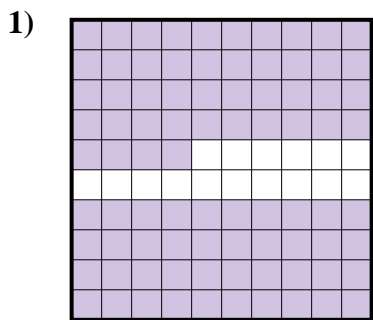
- A. 60
- B. 0.6
- C. 600
- D. 6

Respuestas

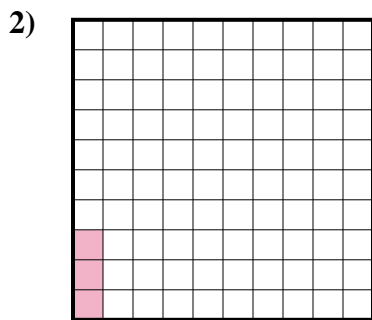
- 1. **A**
- 2. **A**
- 3. **B**
- 4. **B**
- 5. **A**
- 6. **A**
- 7. **C**
- 8. **D**
- 9. **B**



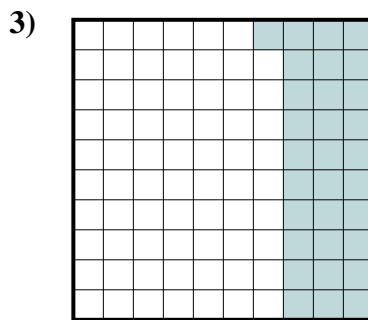
Determina cuál letra mejor representa la cantidad sombreada del total.



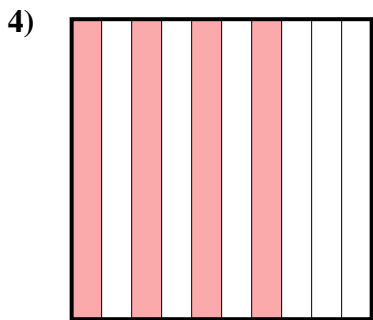
- A. 84
- B. 0.084
- C. 0.84
- D. 8.4



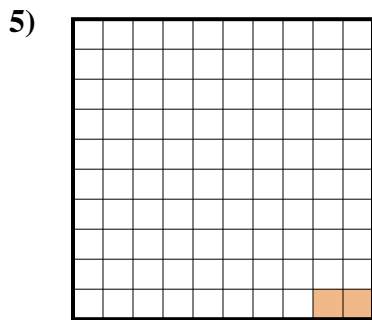
- A. 3
- B. 0.3
- C. 0.003
- D. 0.03



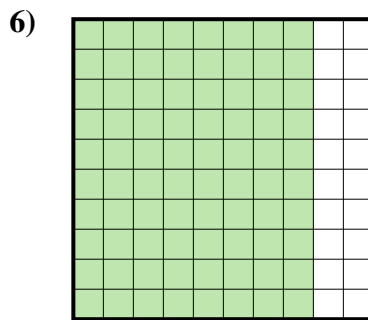
- A. 310
- B. 3.1
- C. 31
- D. 0.31



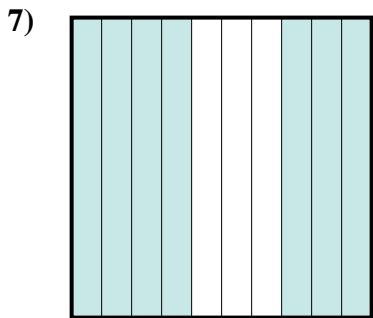
- A. 40
- B. 0.4
- C. 0.04
- D. 4



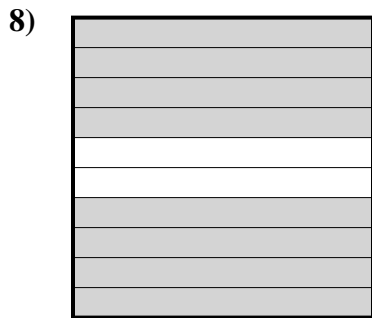
- A. 20
- B. 0.02
- C. 0.002
- D. 0.2



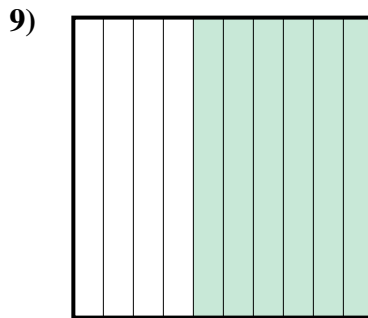
- A. 8
- B. 0.08
- C. 0.8
- D. 800



- A. 7
- B. 0.07
- C. 700
- D. 0.7



- A. 8
- B. 80
- C. 0.8
- D. 0.08



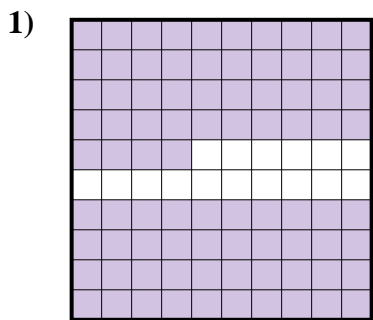
- A. 0.6
- B. 600
- C. 0.06
- D. 60

Respuestas

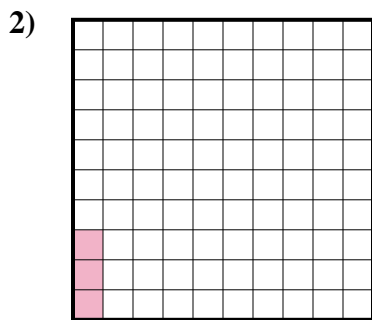
- 1. _____
- 2. _____
- 3. _____
- 4. _____
- 5. _____
- 6. _____
- 7. _____
- 8. _____
- 9. _____



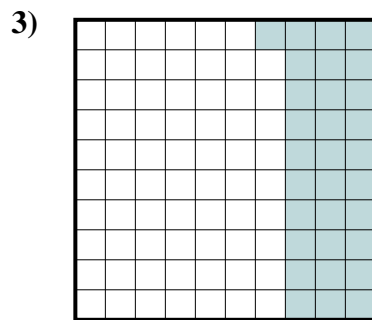
Determina cuál letra mejor representa la cantidad sombreada del total.



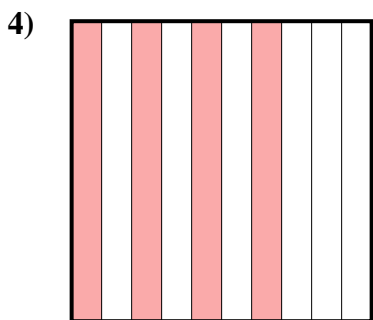
- A. 84
- B. 0.084
- C. 0.84
- D. 8.4



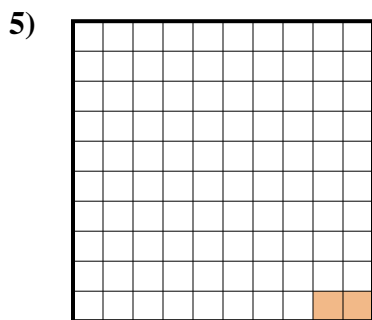
- A. 3
- B. 0.3
- C. 0.003
- D. 0.03



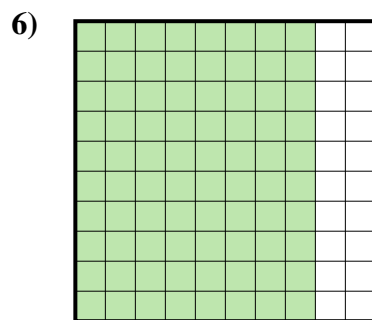
- A. 310
- B. 3.1
- C. 31
- D. 0.31



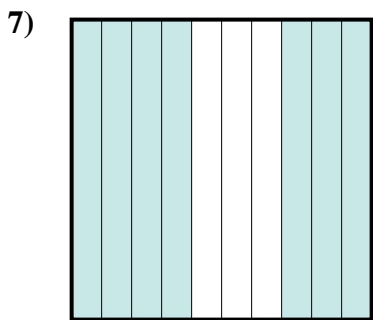
- A. 40
- B. 0.4
- C. 0.04
- D. 4



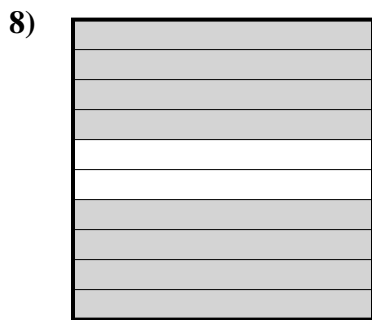
- A. 20
- B. 0.02
- C. 0.002
- D. 0.2



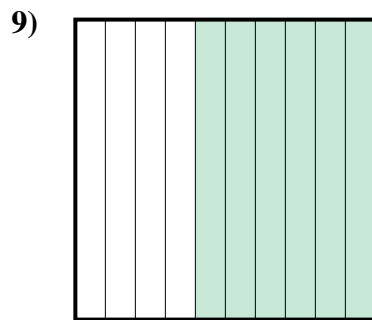
- A. 8
- B. 0.08
- C. 0.8
- D. 800



- A. 7
- B. 0.07
- C. 700
- D. 0.7



- A. 8
- B. 80
- C. 0.8
- D. 0.08




- A. 0.6
- B. 600
- C. 0.06
- D. 60

Respuestas

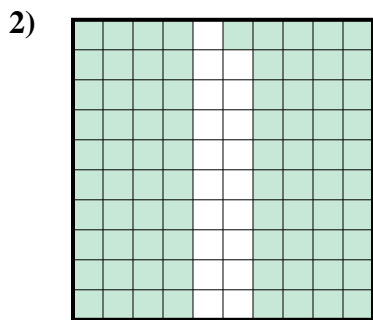
- 1. **C**
- 2. **D**
- 3. **D**
- 4. **B**
- 5. **B**
- 6. **C**
- 7. **D**
- 8. **C**
- 9. **A**



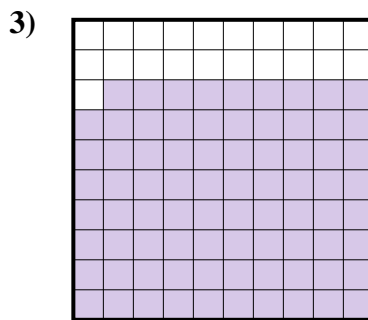
Determina cuál letra mejor representa la cantidad sombreada del total.



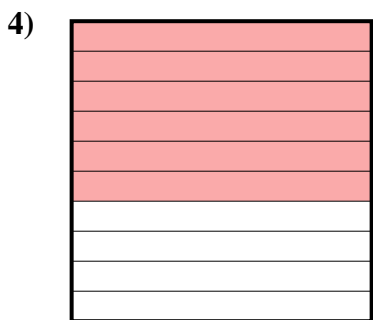
- A. 0.3
- B. 300
- C. 30
- D. 0.03



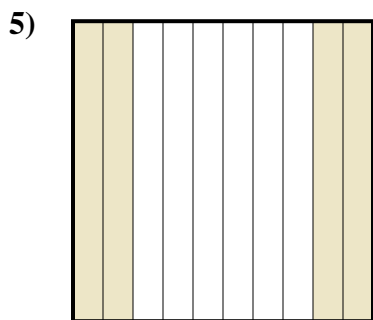
- A. 81
- B. 810
- C. 0.081
- D. 0.81



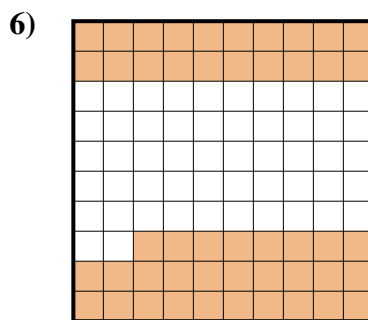
- A. 0.79
- B. 7.9
- C. 790
- D. 79



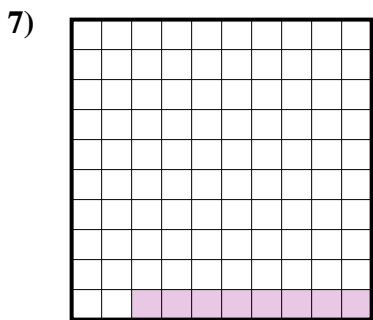
- A. 600
- B. 0.6
- C. 0.06
- D. 60



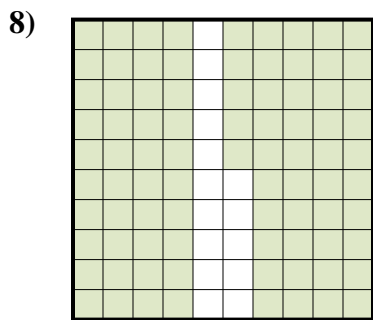
- A. 4
- B. 0.04
- C. 400
- D. 0.4




- A. 480
- B. 0.48
- C. 48
- D. 4.8



- A. 0.8
- B. 0.08
- C. 0.008
- D. 80



- A. 0.085
- B. 8.5
- C. 0.85
- D. 850



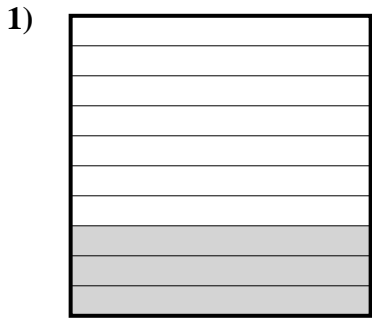
- A. 0.09
- B. 90
- C. 900
- D. 0.9

Respuestas

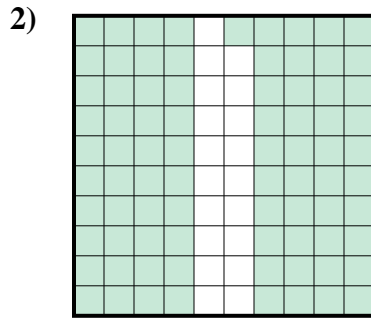
- 1. _____
- 2. _____
- 3. _____
- 4. _____
- 5. _____
- 6. _____
- 7. _____
- 8. _____
- 9. _____



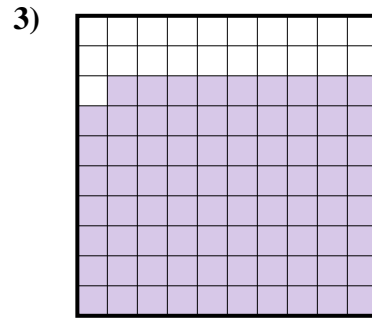
Determina cuál letra mejor representa la cantidad sombreada del total.



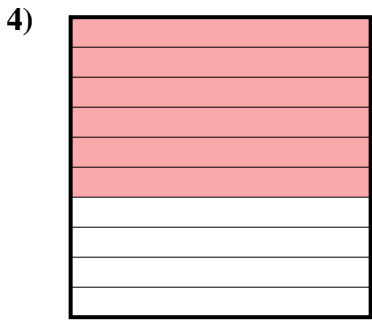
- A. 0.3
- B. 300
- C. 30
- D. 0.03



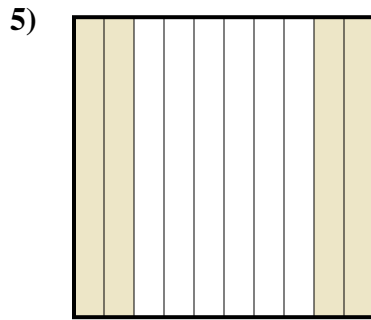
- A. 81
- B. 810
- C. 0.081
- D. 0.81



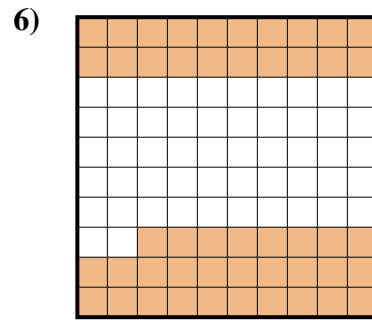
- A. 0.79
- B. 7.9
- C. 790
- D. 79



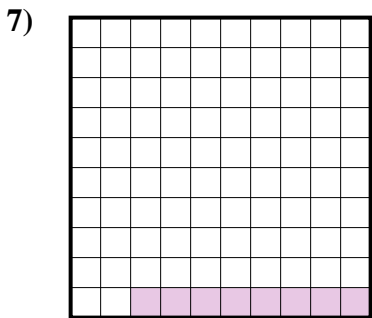
- A. 600
- B. 0.6
- C. 0.06
- D. 60



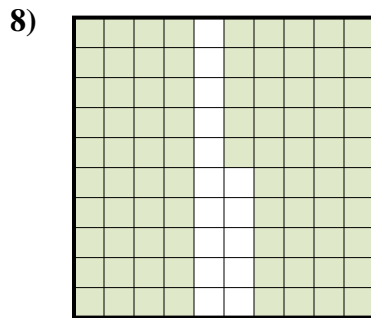
- A. 4
- B. 0.04
- C. 400
- D. 0.4




- A. 480
- B. 0.48
- C. 48
- D. 4.8



- A. 0.8
- B. 0.08
- C. 0.008
- D. 80



- A. 0.085
- B. 8.5
- C. 0.85
- D. 850



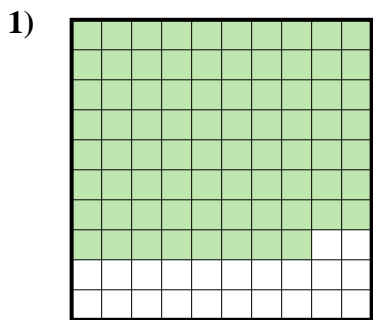
- A. 0.09
- B. 90
- C. 900
- D. 0.9

Respuestas

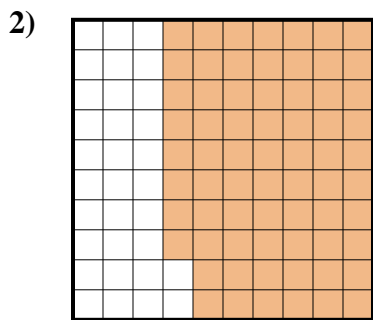
- 1. **A**
- 2. **D**
- 3. **A**
- 4. **B**
- 5. **D**
- 6. **B**
- 7. **B**
- 8. **C**
- 9. **D**




Determina cuál letra mejor representa la cantidad sombreada del total.



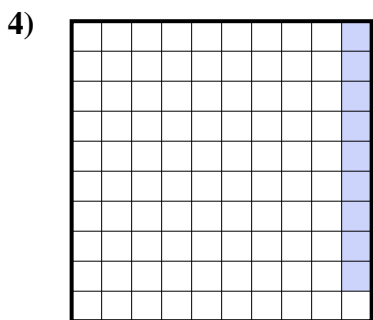
- A. 7.8
- B. 78
- C. 780
- D. 0.78



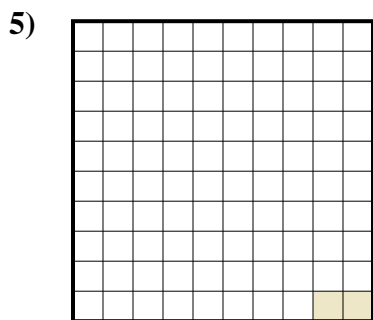
- A. 680
- B. 6.8
- C. 0.68
- D. 68



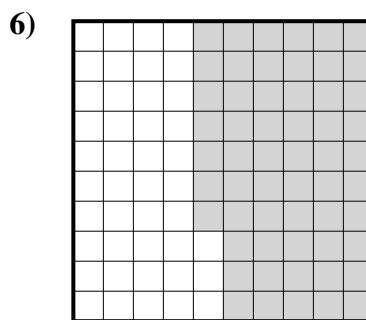
- A. 5
- B. 0.05
- C. 0.5
- D. 50



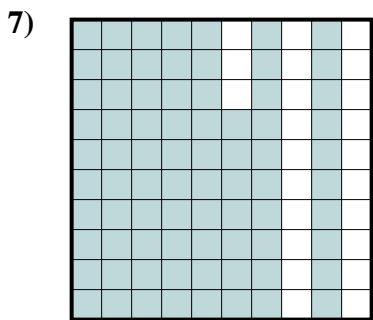
- A. 0.09
- B. 0.009
- C. 0.9
- D. 90



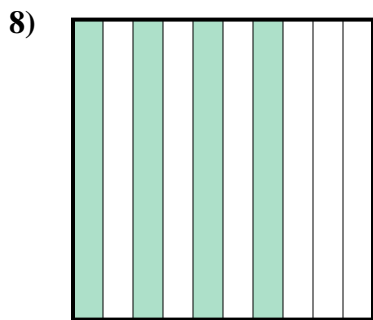
- A. 0.02
- B. 0.002
- C. 2
- D. 0.2




- A. 570
- B. 0.57
- C. 5.7
- D. 0.057



- A. 0.77
- B. 770
- C. 0.077
- D. 77



- A. 0.04
- B. 400
- C. 0.4
- D. 40



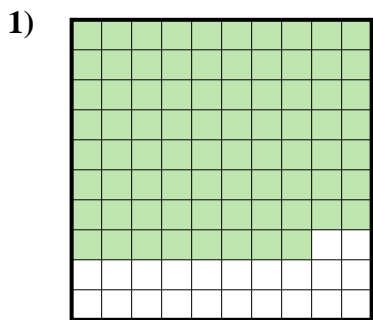
- A. 0.03
- B. 3
- C. 30
- D. 0.3

Respuestas

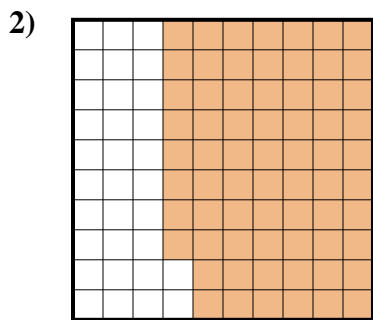
- 1. _____
- 2. _____
- 3. _____
- 4. _____
- 5. _____
- 6. _____
- 7. _____
- 8. _____
- 9. _____




Determina cuál letra mejor representa la cantidad sombreada del total.



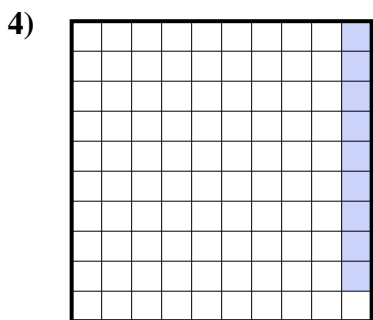
- A. 7.8
- B. 78
- C. 780
- D. 0.78



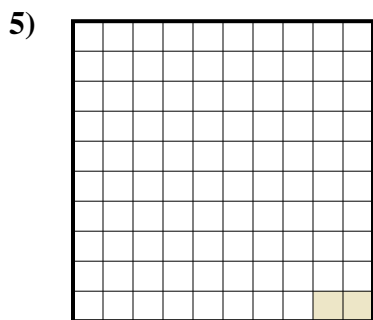
- A. 680
- B. 6.8
- C. 0.68
- D. 68



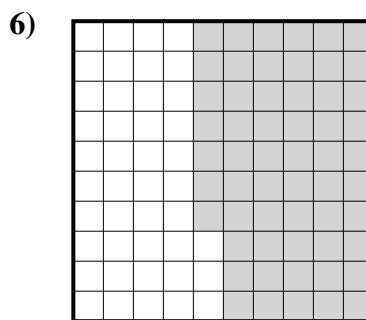
- A. 5
- B. 0.05
- C. 0.5
- D. 50



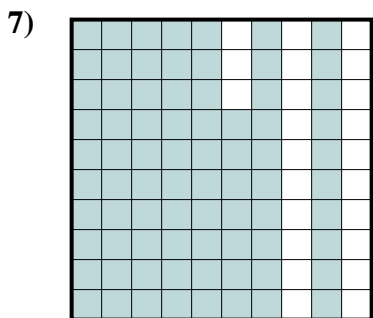
- A. 0.09
- B. 0.009
- C. 0.9
- D. 90



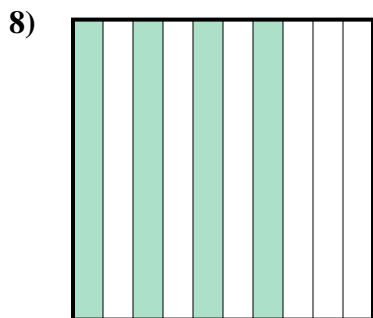
- A. 0.02
- B. 0.002
- C. 2
- D. 0.2




- A. 570
- B. 0.57
- C. 5.7
- D. 0.057



- A. 0.77
- B. 770
- C. 0.077
- D. 77



- A. 0.04
- B. 400
- C. 0.4
- D. 40



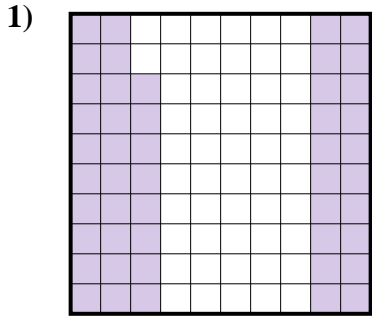
- A. 0.03
- B. 3
- C. 30
- D. 0.3

Respuestas

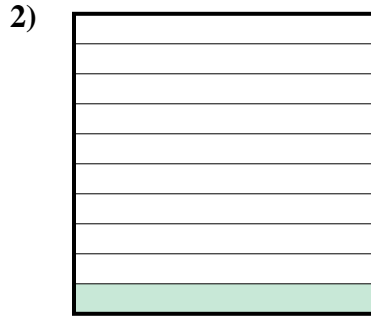
- 1. **D**
- 2. **C**
- 3. **C**
- 4. **A**
- 5. **A**
- 6. **B**
- 7. **A**
- 8. **C**
- 9. **D**



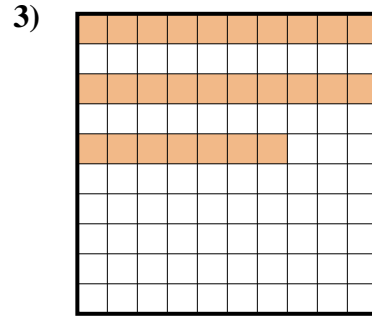
Determina cuál letra mejor representa la cantidad sombreada del total.



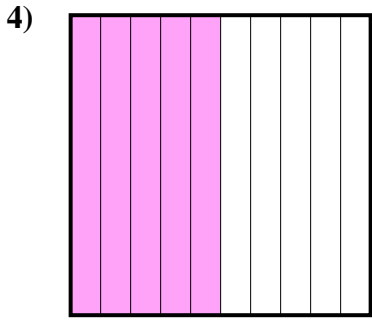
- A. 4.8
- B. 48
- C. 0.48
- D. 480



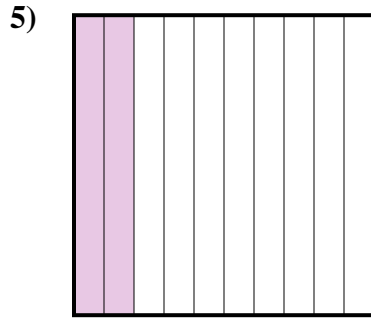
- A. 1
- B. 0.1
- C. 100
- D. 0.01




- A. 0.27
- B. 2.7
- C. 27
- D. 0.027



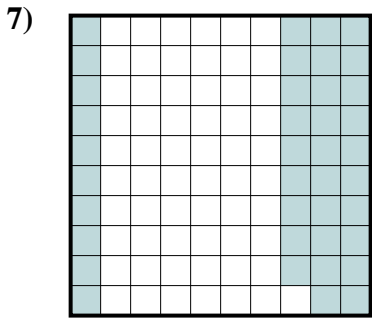
- A. 0.5
- B. 50
- C. 5
- D. 0.05



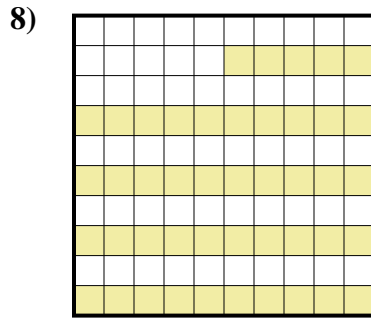
- A. 2
- B. 20
- C. 0.02
- D. 0.2



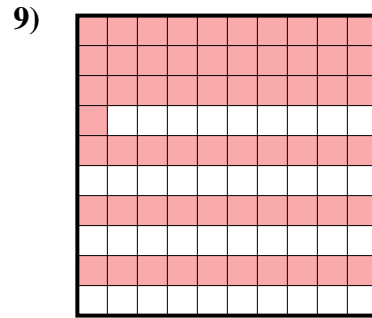
- A. 30
- B. 0.3
- C. 3
- D. 300



- A. 3.9
- B. 0.39
- C. 39
- D. 0.039



- A. 4.5
- B. 45
- C. 0.45
- D. 0.045



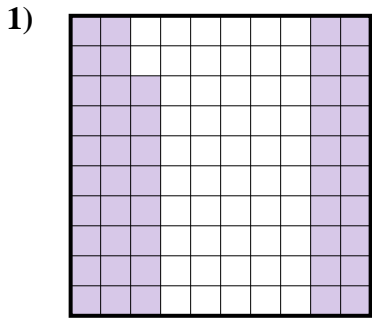
- A. 610
- B. 0.61
- C. 61
- D. 6.1

Respuestas


- 1. _____
- 2. _____
- 3. _____
- 4. _____
- 5. _____
- 6. _____
- 7. _____
- 8. _____
- 9. _____



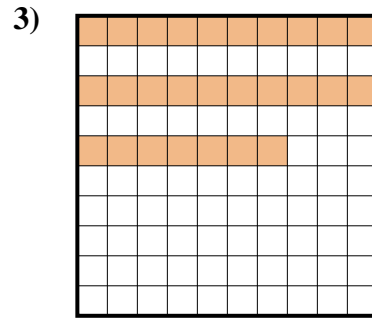
Determina cuál letra mejor representa la cantidad sombreada del total.



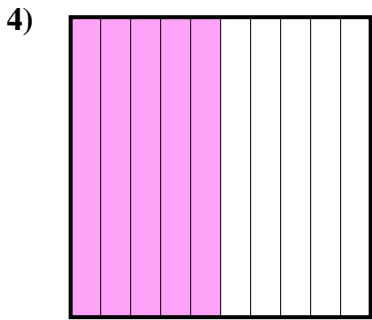
- A. 4.8
- B. 48
- C. 0.48
- D. 480



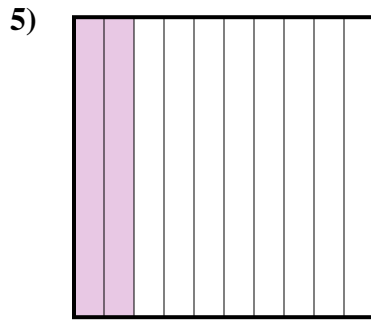
- A. 1
- B. 0.1
- C. 100
- D. 0.01




- A. 0.27
- B. 2.7
- C. 27
- D. 0.027



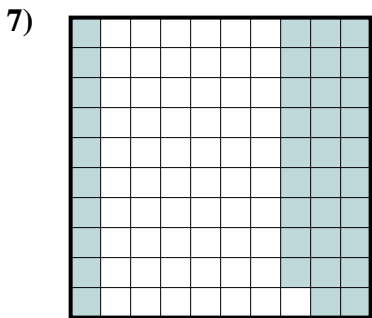
- A. 0.5
- B. 50
- C. 5
- D. 0.05



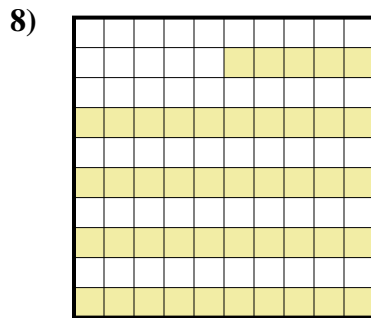
- A. 2
- B. 20
- C. 0.02
- D. 0.2



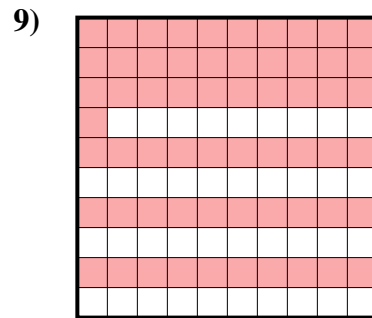
- A. 30
- B. 0.3
- C. 3
- D. 300



- A. 3.9
- B. 0.39
- C. 39
- D. 0.039



- A. 4.5
- B. 45
- C. 0.45
- D. 0.045




- A. 610
- B. 0.61
- C. 61
- D. 6.1

Respuestas

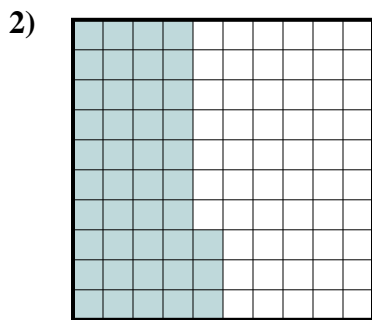
- 1. **C**
- 2. **B**
- 3. **A**
- 4. **A**
- 5. **D**
- 6. **B**
- 7. **B**
- 8. **C**
- 9. **B**




Determina cuál letra mejor representa la cantidad sombreada del total.



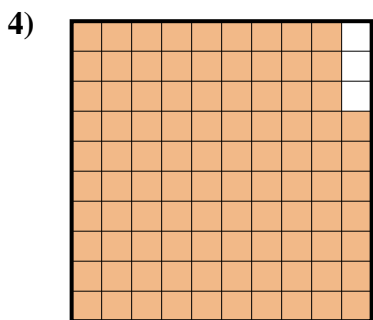
- A. 4
- B. 40
- C. 0.4
- D. 0.04




- A. 0.043
- B. 4.3
- C. 0.43
- D. 430



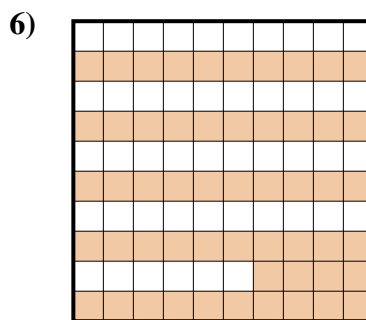
- A. 2
- B. 0.2
- C. 200
- D. 20



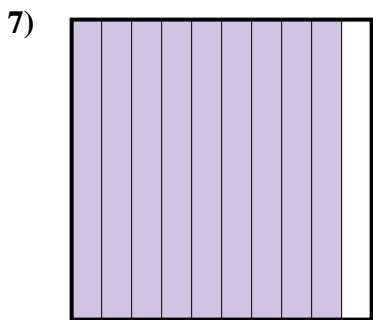
- A. 0.97
- B. 97
- C. 0.097
- D. 9.7



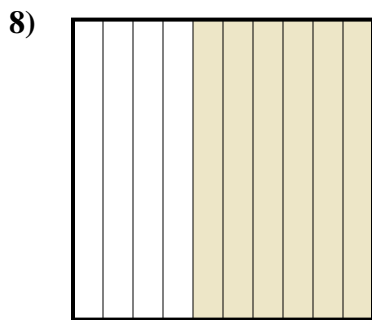
- A. 800
- B. 8
- C. 0.8
- D. 80




- A. 0.54
- B. 54
- C. 540
- D. 0.054



- A. 900
- B. 90
- C. 0.9
- D. 9



- A. 0.06
- B. 60
- C. 6
- D. 0.6




- A. 0.03
- B. 30
- C. 0.3
- D. 3

Respuestas

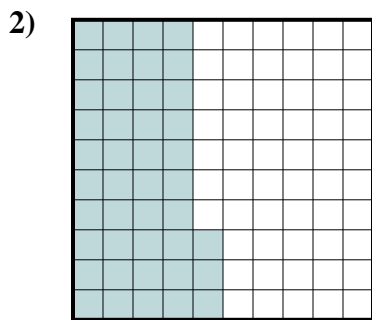
- 1. _____
- 2. _____
- 3. _____
- 4. _____
- 5. _____
- 6. _____
- 7. _____
- 8. _____
- 9. _____




Determina cuál letra mejor representa la cantidad sombreada del total.



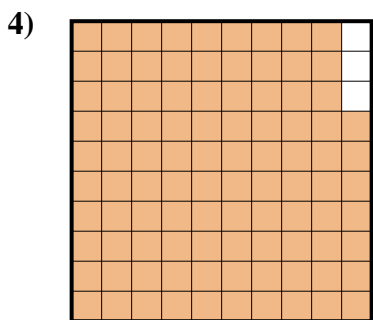
- A. 4
- B. 40
- C. 0.4
- D. 0.04




- A. 0.043
- B. 4.3
- C. 0.43
- D. 430



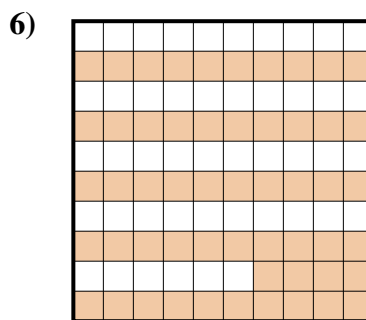
- A. 2
- B. 0.2
- C. 200
- D. 20



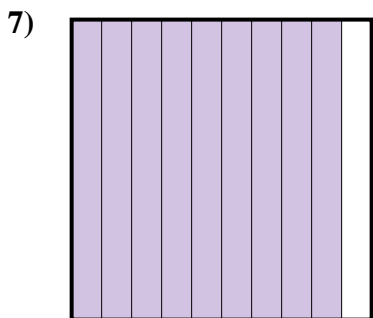
- A. 0.97
- B. 97
- C. 0.097
- D. 9.7



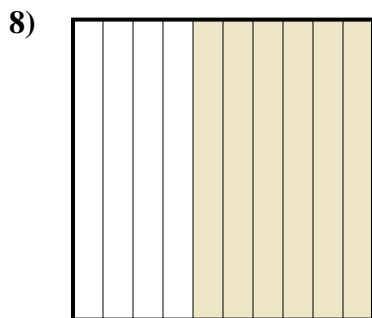
- A. 800
- B. 8
- C. 0.8
- D. 80




- A. 0.54
- B. 54
- C. 540
- D. 0.054



- A. 900
- B. 90
- C. 0.9
- D. 9



- A. 0.06
- B. 60
- C. 6
- D. 0.6



- A. 0.03
- B. 30
- C. 0.3
- D. 3

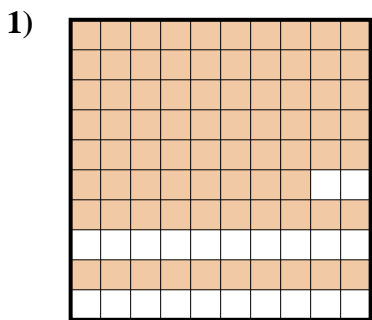
Respuestas

- 1. **C**
- 2. **C**
- 3. **B**
- 4. **A**
- 5. **C**
- 6. **A**
- 7. **C**
- 8. **D**
- 9. **C**

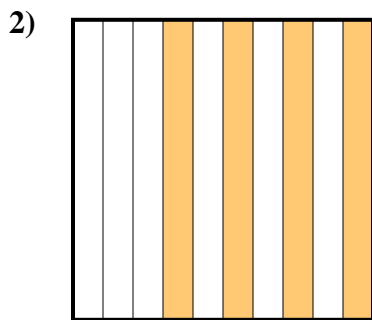


Determina cuál letra mejor representa la cantidad sombreada del total.

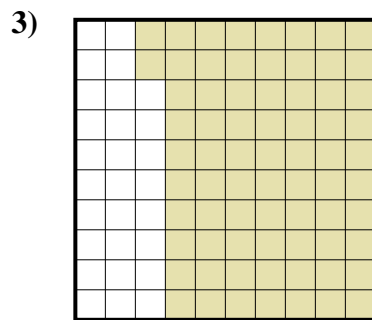
Respuestas



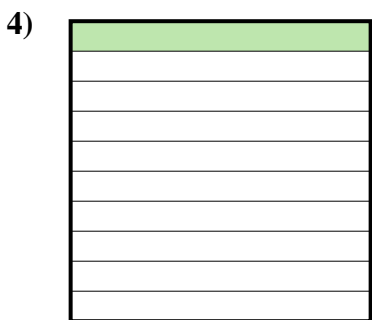
- A. 7.8
- B. 78
- C. 0.78
- D. 780



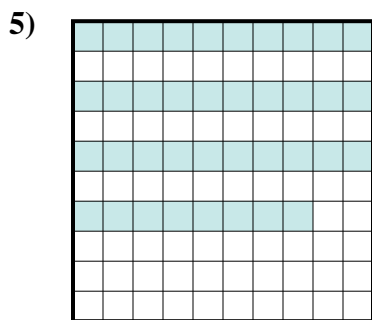
- A. 0.04
- B. 4
- C. 400
- D. 0.4



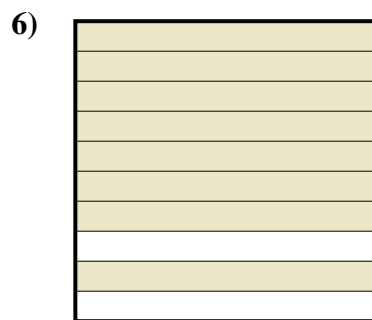
- A. 0.72
- B. 720
- C. 7.2
- D. 72



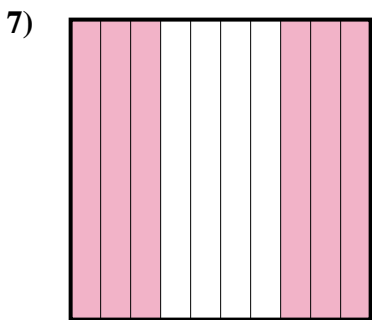
- A. 1
- B. 100
- C. 0.01
- D. 0.1



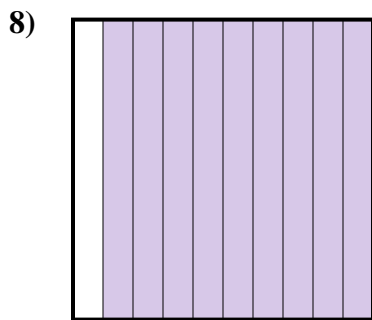
- A. 0.38
- B. 380
- C. 0.038
- D. 3.8



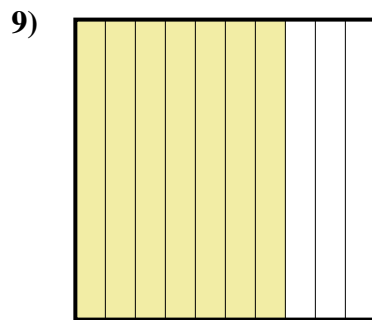
- A. 800
- B. 0.08
- C. 80
- D. 0.8



- A. 0.6
- B. 600
- C. 60
- D. 0.06



- A. 900
- B. 90
- C. 0.9
- D. 9



- A. 0.07
- B. 0.7
- C. 7
- D. 700

1. _____

2. _____

3. _____

4. _____

5. _____

6. _____

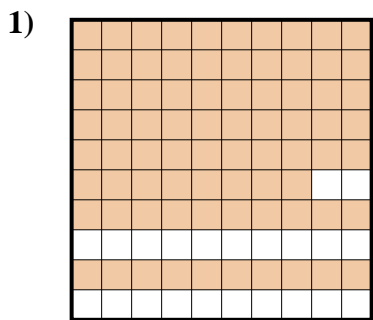
7. _____

8. _____

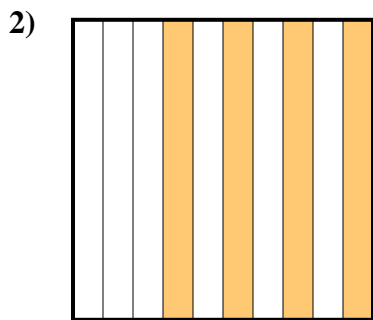
9. _____



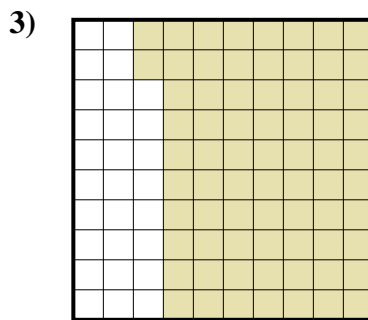
Determina cuál letra mejor representa la cantidad sombreada del total.




- A. 7.8
- B. 78
- C. 0.78
- D. 780



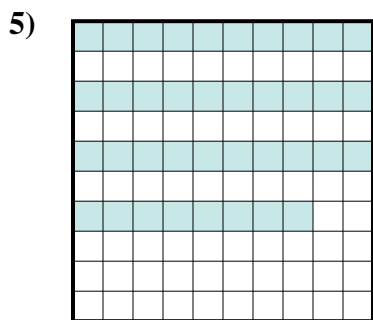
- A. 0.04
- B. 4
- C. 400
- D. 0.4




- A. 0.72
- B. 720
- C. 7.2
- D. 72



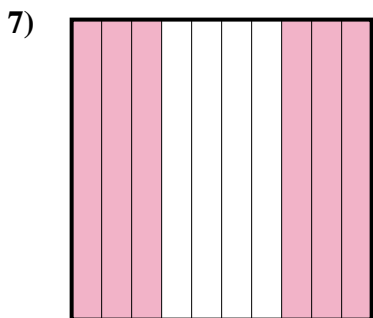
- A. 1
- B. 100
- C. 0.01
- D. 0.1



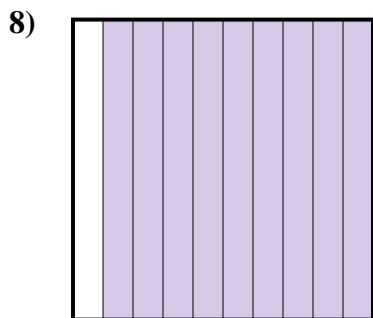
- A. 0.38
- B. 380
- C. 0.038
- D. 3.8



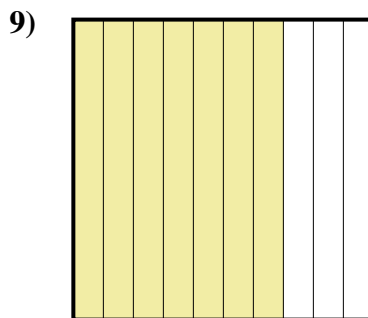
- A. 800
- B. 0.08
- C. 80
- D. 0.8



- A. 0.6
- B. 600
- C. 60
- D. 0.06



- A. 900
- B. 90
- C. 0.9
- D. 9



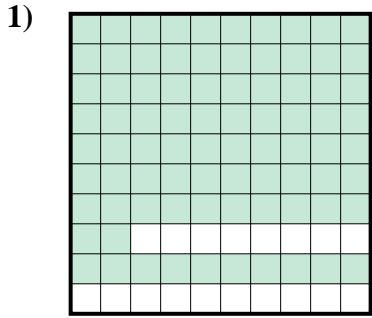
- A. 0.07
- B. 0.7
- C. 7
- D. 700

Respuestas

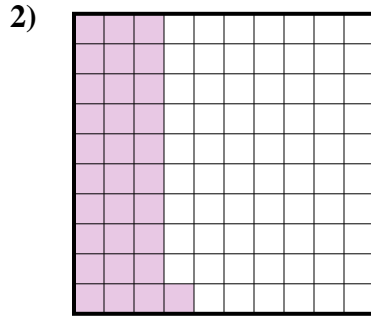
- 1. **C**
- 2. **D**
- 3. **A**
- 4. **D**
- 5. **A**
- 6. **D**
- 7. **A**
- 8. **C**
- 9. **B**



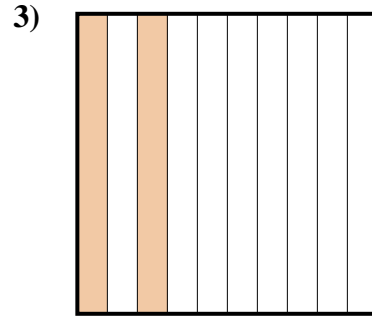
Determina cuál letra mejor representa la cantidad sombreada del total.



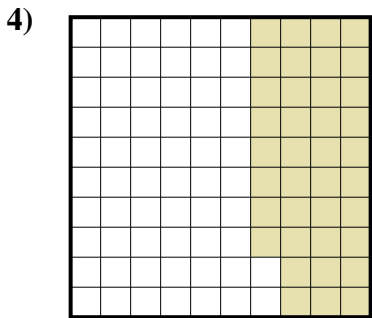
- A. 8.2
- B. 0.82
- C. 82
- D. 820



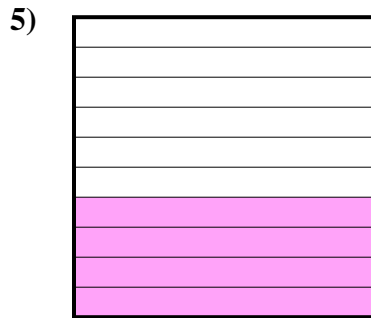
- A. 0.031
- B. 3.1
- C. 310
- D. 0.31



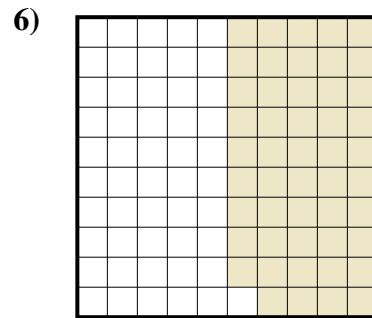
- A. 20
- B. 0.02
- C. 0.2
- D. 200



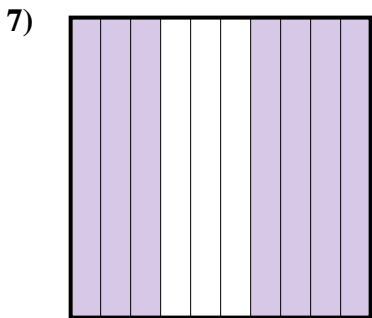
- A. 380
- B. 0.038
- C. 0.38
- D. 38




- A. 40
- B. 400
- C. 0.4
- D. 4



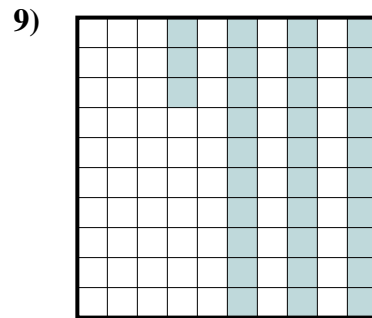
- A. 0.49
- B. 490
- C. 49
- D. 0.049



- A. 70
- B. 700
- C. 0.7
- D. 0.07



- A. 0.1
- B. 0.01
- C. 10
- D. 100



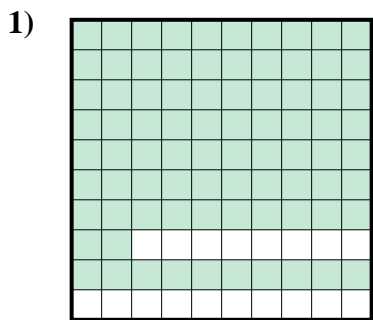
- A. 330
- B. 33
- C. 0.33
- D. 0.033

Respuestas

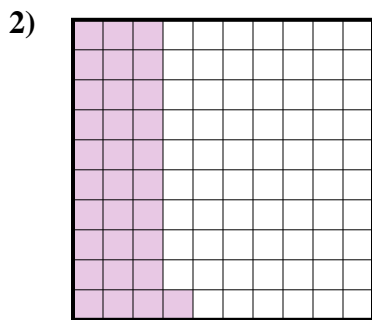
- 1. _____
- 2. _____
- 3. _____
- 4. _____
- 5. _____
- 6. _____
- 7. _____
- 8. _____
- 9. _____



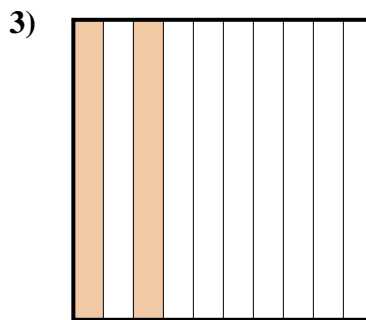
Determina cuál letra mejor representa la cantidad sombreada del total.



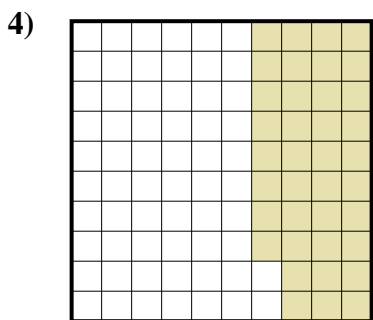
- A. 8.2
- B. 0.82
- C. 82
- D. 820




- A. 0.031
- B. 3.1
- C. 310
- D. 0.31



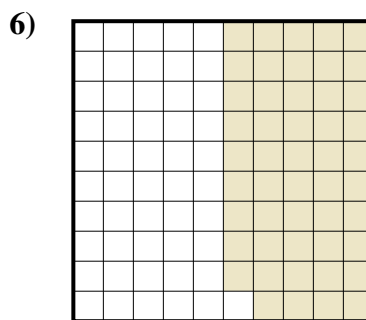
- A. 20
- B. 0.02
- C. 0.2
- D. 200



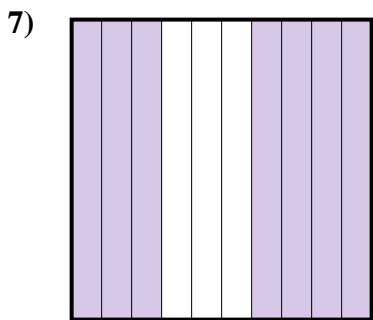
- A. 380
- B. 0.038
- C. 0.38
- D. 38



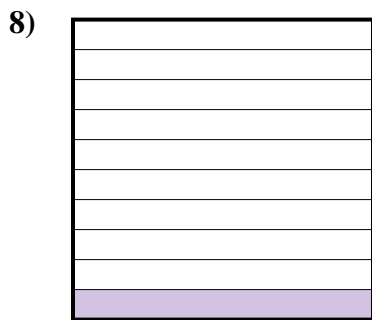
- A. 40
- B. 400
- C. 0.4
- D. 4



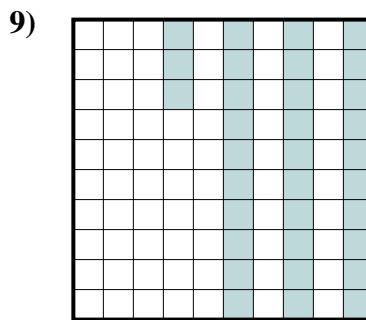
- A. 0.49
- B. 490
- C. 49
- D. 0.049



- A. 70
- B. 700
- C. 0.7
- D. 0.07



- A. 0.1
- B. 0.01
- C. 10
- D. 100



- A. 330
- B. 33
- C. 0.33
- D. 0.033

Respuestas

- 1. **B**
- 2. **D**
- 3. **C**
- 4. **C**
- 5. **C**
- 6. **A**
- 7. **C**
- 8. **A**
- 9. **C**