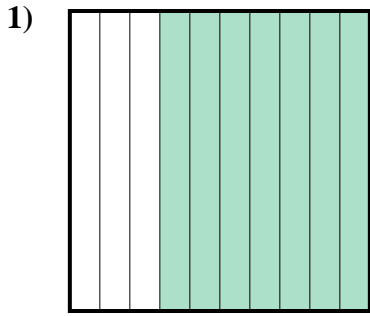


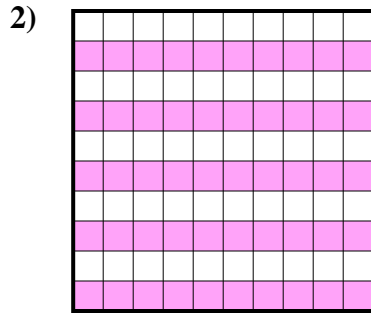


Determina cuál letra mejor representa la cantidad sombreada del total.

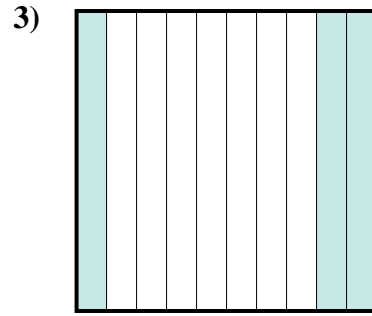
**Respuestas**



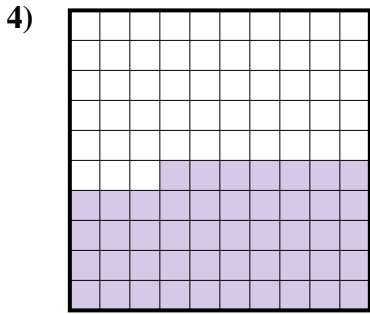
- A. 0.07
- B. 7
- C. 0.7
- D. 70



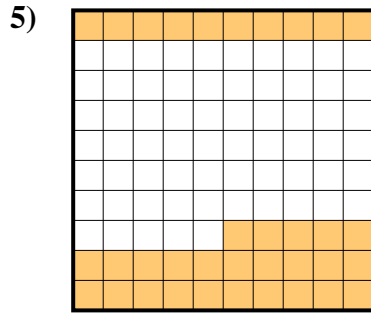
- A. 0.05
- B. 5
- C. 0.5
- D. 50



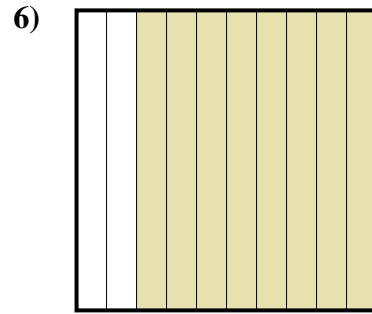
- A. 0.3
- B. 300
- C. 3
- D. 30



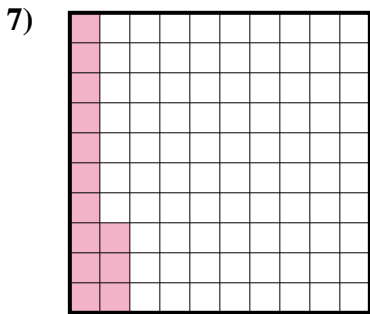
- A. 4.7
- B. 0.047
- C. 0.47
- D. 470



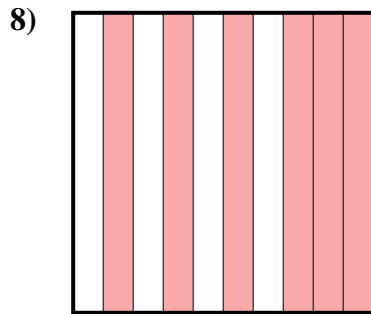
- A. 0.35
- B. 3.5
- C. 35
- D. 0.035



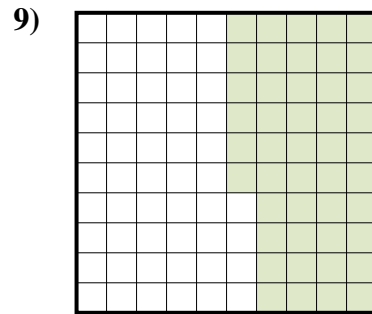
- A. 800
- B. 80
- C. 0.8
- D. 0.08



- A. 0.013
- B. 0.13
- C. 130
- D. 13



- A. 0.6
- B. 600
- C. 6
- D. 60

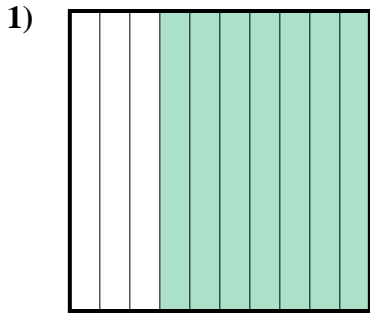


- A. 460
- B. 4.6
- C. 46
- D. 0.46

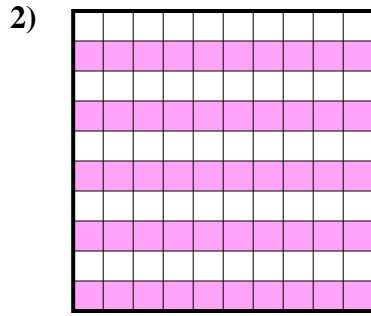
- 1. \_\_\_\_\_
- 2. \_\_\_\_\_
- 3. \_\_\_\_\_
- 4. \_\_\_\_\_
- 5. \_\_\_\_\_
- 6. \_\_\_\_\_
- 7. \_\_\_\_\_
- 8. \_\_\_\_\_
- 9. \_\_\_\_\_



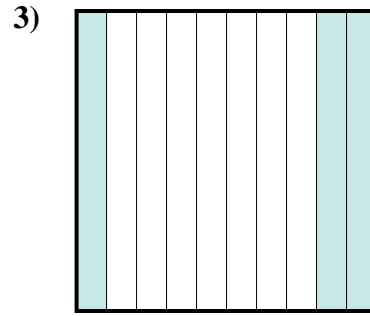
Determina cuál letra mejor representa la cantidad sombreada del total.



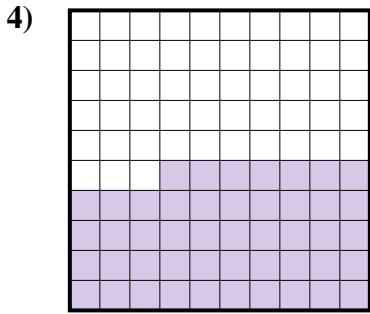
- A. 0.07
- B. 7
- C. 0.7
- D. 70



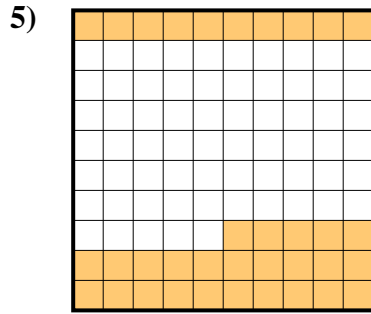
- A. 0.05
- B. 5
- C. 0.5
- D. 50



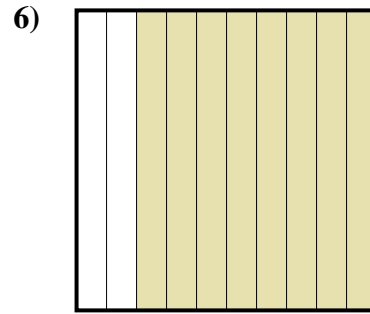
- A. 0.3
- B. 300
- C. 3
- D. 30



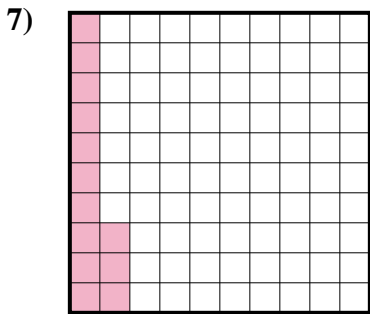
- A. 4.7
- B. 0.047
- C. 0.47
- D. 470



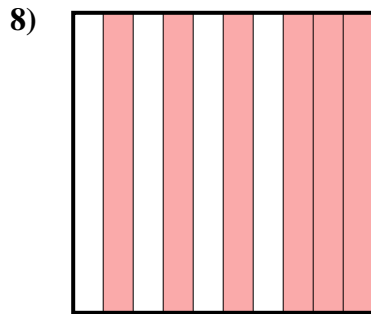
- A. 0.35
- B. 3.5
- C. 35
- D. 0.035



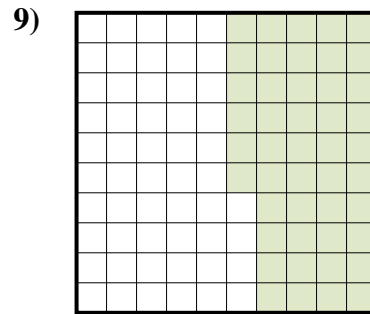
- A. 800
- B. 80
- C. 0.8
- D. 0.08



- A. 0.013
- B. 0.13
- C. 130
- D. 13



- A. 0.6
- B. 600
- C. 6
- D. 60



- A. 460
- B. 4.6
- C. 46
- D. 0.46

**Respuestas**

- 1.   **C**
- 2.   **C**
- 3.   **A**
- 4.   **C**
- 5.   **A**
- 6.   **C**
- 7.   **B**
- 8.   **A**
- 9.   **D**