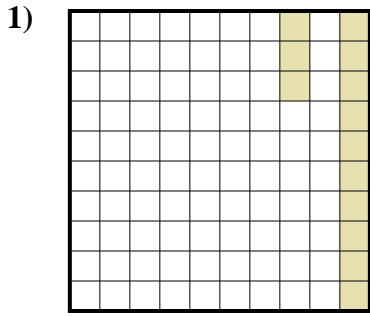


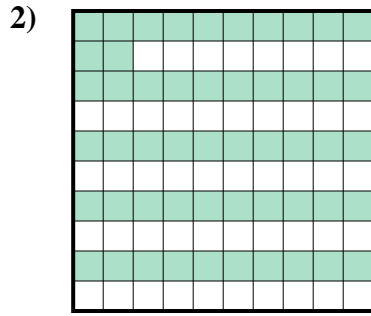


Determina cuál letra mejor representa la cantidad sombreada del total.

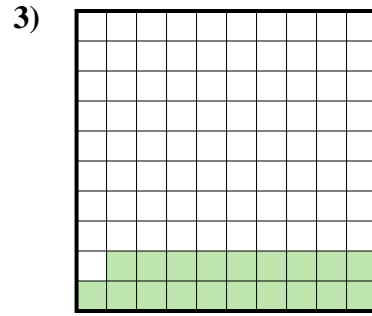
Respuestas



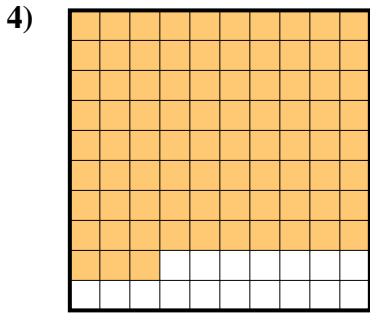
- A. 1.3
- B. 0.13
- C. 130
- D. 13



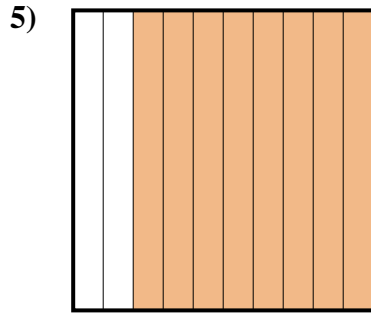
- A. 520
- B. 52
- C. 0.52
- D. 0.052



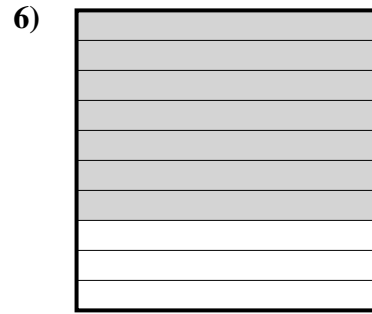
- A. 0.19
- B. 0.019
- C. 190
- D. 1.9



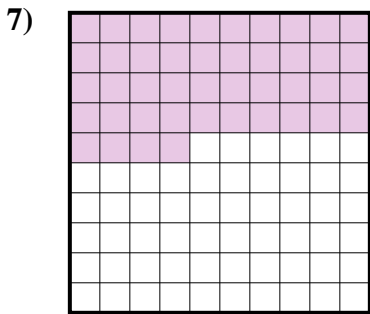
- A. 0.83
- B. 830
- C. 83
- D. 8.3



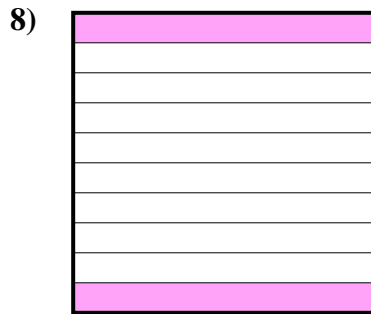
- A. 0.8
- B. 8
- C. 80
- D. 800




- A. 0.7
- B. 700
- C. 0.07
- D. 70



- A. 4.4
- B. 440
- C. 0.44
- D. 0.044



- A. 0.2
- B. 2
- C. 0.02
- D. 200

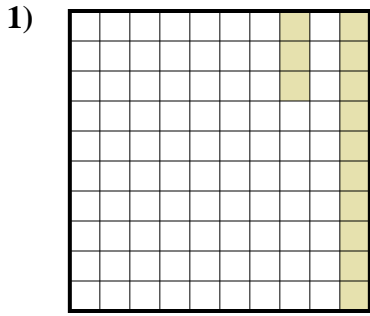


- A. 100
- B. 0.1
- C. 10
- D. 1

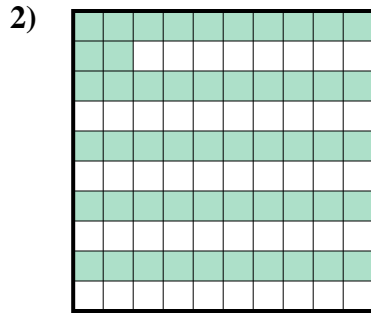
- 1. _____
- 2. _____
- 3. _____
- 4. _____
- 5. _____
- 6. _____
- 7. _____
- 8. _____
- 9. _____



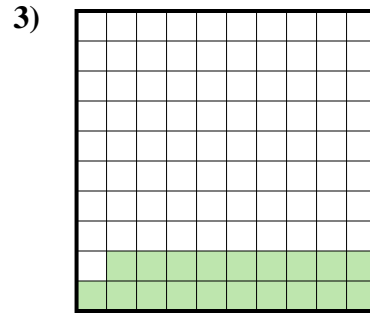
Determina cuál letra mejor representa la cantidad sombreada del total.



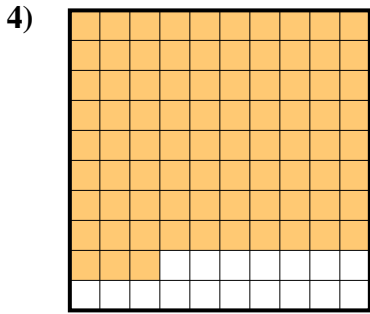
- A. 1.3
- B. 0.13
- C. 130
- D. 13



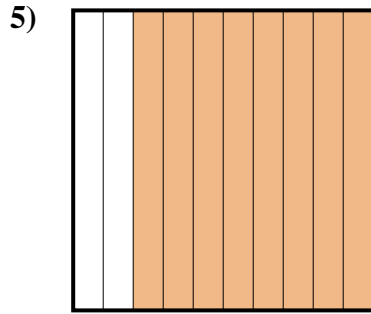
- A. 520
- B. 52
- C. 0.52
- D. 0.052



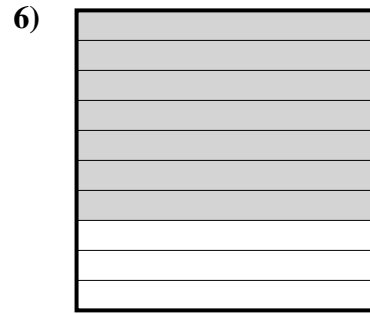
- A. 0.19
- B. 0.019
- C. 190
- D. 1.9



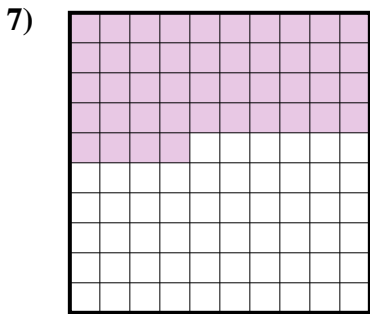
- A. 0.83
- B. 830
- C. 83
- D. 8.3



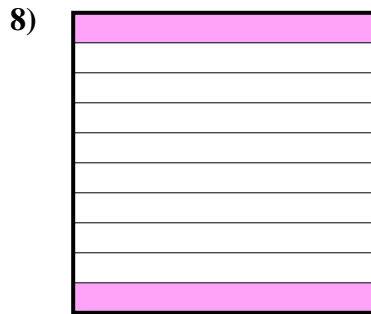
- A. 0.8
- B. 8
- C. 80
- D. 800




- A. 0.7
- B. 700
- C. 0.07
- D. 70



- A. 4.4
- B. 440
- C. 0.44
- D. 0.044



- A. 0.2
- B. 2
- C. 0.02
- D. 200



- A. 100
- B. 0.1
- C. 10
- D. 1

Respuestas

- 1. **B**
- 2. **C**
- 3. **A**
- 4. **A**
- 5. **A**
- 6. **A**
- 7. **C**
- 8. **A**
- 9. **B**