



Determina cuál letra representa mejor la suma.

1) $\frac{3}{10} + \frac{1}{10}$

2) $\frac{1}{4} + \frac{1}{4}$

3) $\frac{7}{10} + \frac{2}{10}$

4) $\frac{2}{4} + \frac{2}{4}$

5) $\frac{8}{12} + \frac{7}{12}$

6) $\frac{11}{12} + \frac{5}{12}$

7) $\frac{1}{6} + \frac{1}{6}$

8) $\frac{1}{2} + \frac{1}{2}$

9) $\frac{1}{10} + \frac{9}{10}$

10) $\frac{9}{12} + \frac{1}{12}$

11) $\frac{1}{3} + \frac{1}{3}$

12) $\frac{4}{8} + \frac{3}{8}$

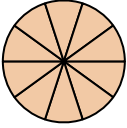
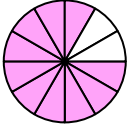
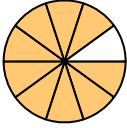
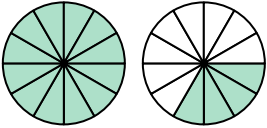
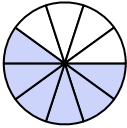
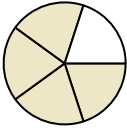
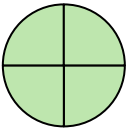
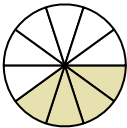
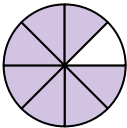
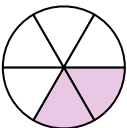
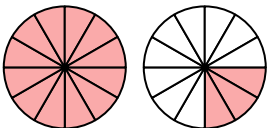
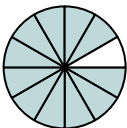
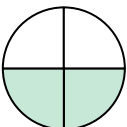
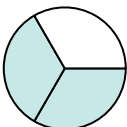
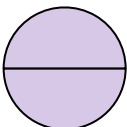
13) $\frac{3}{5} + \frac{1}{5}$

14) $\frac{5}{12} + \frac{6}{12}$

15) $\frac{5}{10} + \frac{1}{10}$

Respuestas

1. _____
2. _____
3. _____
4. _____
5. _____
6. _____
7. _____
8. _____
9. _____
10. _____
11. _____
12. _____
13. _____
14. _____
15. _____

A. 	B. 	C. 
D. 	E. 	F. 
G. 	H. 	I. 
J. 	K. 	L. 
M. 	N. 	O. 



Determina cuál letra representa mejor la suma.

1) $\frac{3}{10} + \frac{1}{10}$

2) $\frac{1}{4} + \frac{1}{4}$

3) $\frac{7}{10} + \frac{2}{10}$

4) $\frac{2}{4} + \frac{2}{4}$

5) $\frac{8}{12} + \frac{7}{12}$

6) $\frac{11}{12} + \frac{5}{12}$

7) $\frac{1}{6} + \frac{1}{6}$

8) $\frac{1}{2} + \frac{1}{2}$

9) $\frac{1}{10} + \frac{9}{10}$

10) $\frac{9}{12} + \frac{1}{12}$

11) $\frac{1}{3} + \frac{1}{3}$

12) $\frac{4}{8} + \frac{3}{8}$

13) $\frac{3}{5} + \frac{1}{5}$

14) $\frac{5}{12} + \frac{6}{12}$

15) $\frac{5}{10} + \frac{1}{10}$

Respuestas

1. **H** $\frac{4}{10}$

2. **M** $\frac{2}{4}$

3. **C** $\frac{9}{10}$

4. **G** $\frac{4}{4}$

5. **K** $1\frac{3}{12}$

6. **D** $1\frac{4}{12}$

7. **J** $\frac{2}{6}$

8. **O** $\frac{2}{2}$

9. **A** $\frac{10}{10}$

10. **B** $\frac{10}{12}$

11. **N** $\frac{2}{3}$

12. **I** $\frac{7}{8}$

13. **F** $\frac{4}{5}$

14. **L** $\frac{11}{12}$

15. **E** $\frac{6}{10}$

