



Determina cuál letra representa mejor la suma.

1) $\frac{6}{8} + \frac{3}{8}$

2) $\frac{4}{12} + \frac{8}{12}$

3) $\frac{1}{3} + \frac{2}{3}$

4) $\frac{1}{6} + \frac{5}{6}$

5) $\frac{4}{5} + \frac{4}{5}$

6) $\frac{10}{12} + \frac{6}{12}$

7) $\frac{3}{6} + \frac{5}{6}$

8) $\frac{2}{6} + \frac{1}{6}$

9) $\frac{3}{4} + \frac{2}{4}$

10) $\frac{1}{4} + \frac{3}{4}$

11) $\frac{1}{10} + \frac{7}{10}$

12) $\frac{8}{10} + \frac{1}{10}$


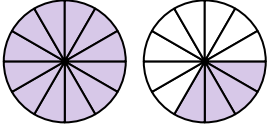
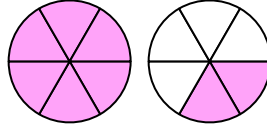
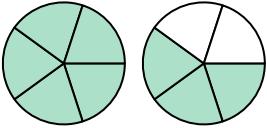
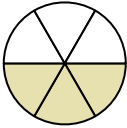
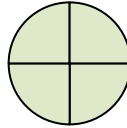
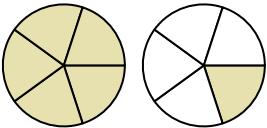
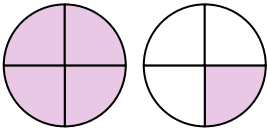
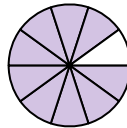
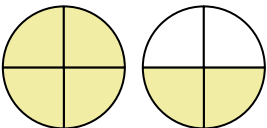
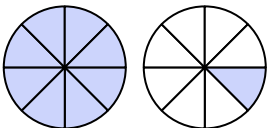
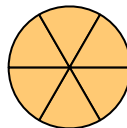
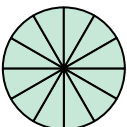
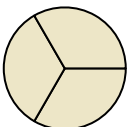
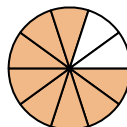
13) $\frac{4}{5} + \frac{2}{5}$

14) $\frac{3}{4} + \frac{3}{4}$

15) $\frac{2}{6} + \frac{2}{6}$

Respuestas

1. _____
2. _____
3. _____
4. _____
5. _____
6. _____
7. _____
8. _____
9. _____
10. _____
11. _____
12. _____
13. _____
14. _____
15. _____

A. 	B. 	C. 
D. 	E. 	F. 
G. 	H. 	I. 
J. 	K. 	L. 
M. 	N. 	O. 



Determina cuál letra representa mejor la suma.

1) $\frac{6}{8} + \frac{3}{8}$

2) $\frac{4}{12} + \frac{8}{12}$

3) $\frac{1}{3} + \frac{2}{3}$

4) $\frac{1}{6} + \frac{5}{6}$

5) $\frac{4}{5} + \frac{4}{5}$

6) $\frac{10}{12} + \frac{6}{12}$

7) $\frac{3}{6} + \frac{5}{6}$

8) $\frac{2}{6} + \frac{1}{6}$

9) $\frac{3}{4} + \frac{2}{4}$

10) $\frac{1}{4} + \frac{3}{4}$

11) $\frac{1}{10} + \frac{7}{10}$

12) $\frac{8}{10} + \frac{1}{10}$

13) $\frac{4}{5} + \frac{2}{5}$

14) $\frac{3}{4} + \frac{3}{4}$

15) $\frac{2}{6} + \frac{2}{6}$

Respuestas

1. **K** $1\frac{1}{8}$

2. **M** $\frac{12}{12}$

3. **N** $\frac{3}{3}$

4. **L** $\frac{6}{6}$

5. **D** $1\frac{3}{5}$

6. **B** $1\frac{4}{12}$

7. **C** $1\frac{2}{6}$

8. **E** $\frac{3}{6}$

9. **H** $1\frac{1}{4}$

10. **F** $\frac{4}{4}$

11. **O** $\frac{8}{10}$

12. **I** $\frac{9}{10}$

13. **G** $1\frac{1}{5}$

14. **J** $1\frac{2}{4}$

15. **A** $\frac{4}{6}$

A.	B.	C.
D.	E.	F.
G.	H.	I.
J.	K.	L.
M.	N.	O.