



Determina cuál letra representa mejor la suma.

1) $\frac{2}{12} + \frac{3}{12}$

2) $\frac{5}{8} + \frac{3}{8}$

3) $\frac{4}{12} + \frac{6}{12}$

4) $\frac{5}{8} + \frac{4}{8}$

5) $\frac{2}{3} + \frac{1}{3}$

6) $\frac{1}{4} + \frac{2}{4}$

7) $\frac{3}{10} + \frac{5}{10}$

8) $\frac{3}{6} + \frac{1}{6}$

9) $\frac{1}{4} + \frac{3}{4}$

10) $\frac{1}{2} + \frac{1}{2}$

11) $\frac{2}{4} + \frac{3}{4}$

12) $\frac{7}{8} + \frac{7}{8}$

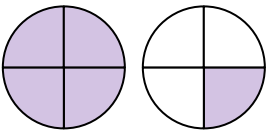
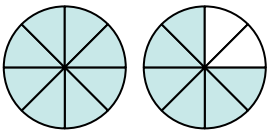
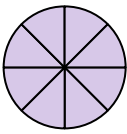
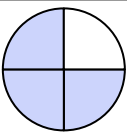
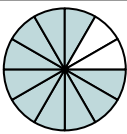
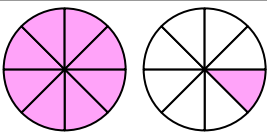
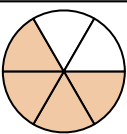
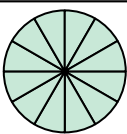
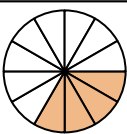
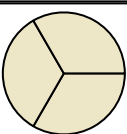
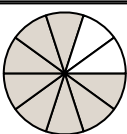

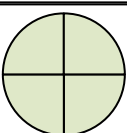
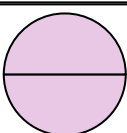
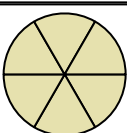
13) $\frac{5}{6} + \frac{1}{6}$

14) $\frac{9}{12} + \frac{3}{12}$

15) $\frac{2}{12} + \frac{2}{12}$

Respuestas

1. _____
2. _____
3. _____
4. _____
5. _____
6. _____
7. _____
8. _____
9. _____
10. _____
11. _____
12. _____
13. _____
14. _____
15. _____

A. 	B. 	C. 
D. 	E. 	F. 
G. 	H. 	I. 
J. 	K. 	L. 
M. 	N. 	O. 



Determina cuál letra representa mejor la suma.

1) $\frac{2}{12} + \frac{3}{12}$

2) $\frac{5}{8} + \frac{3}{8}$

3) $\frac{4}{12} + \frac{6}{12}$

4) $\frac{5}{8} + \frac{4}{8}$

5) $\frac{2}{3} + \frac{1}{3}$

6) $\frac{1}{4} + \frac{2}{4}$

7) $\frac{3}{10} + \frac{5}{10}$

8) $\frac{3}{6} + \frac{1}{6}$

9) $\frac{1}{4} + \frac{3}{4}$

10) $\frac{1}{2} + \frac{1}{2}$

11) $\frac{2}{4} + \frac{3}{4}$

12) $\frac{7}{8} + \frac{7}{8}$

13) $\frac{5}{6} + \frac{1}{6}$

14) $\frac{9}{12} + \frac{3}{12}$

15) $\frac{2}{12} + \frac{2}{12}$

Respuestas

1. **L** $\frac{5}{12}$

2. **C** $\frac{8}{8}$

3. **E** $\frac{10}{12}$

4. **F** $1\frac{1}{8}$

5. **J** $\frac{3}{3}$

6. **D** $\frac{3}{4}$

7. **K** $\frac{8}{10}$

8. **G** $\frac{4}{6}$

9. **M** $\frac{4}{4}$

10. **N** $\frac{2}{2}$

11. **A** $1\frac{1}{4}$

12. **B** $1\frac{6}{8}$

13. **O** $\frac{6}{6}$

14. **H** $\frac{12}{12}$

15. **I** $\frac{4}{12}$

A.	B.	C.
D.	E.	F.
G.	H.	I.
J.	K.	L.
M.	N.	O.