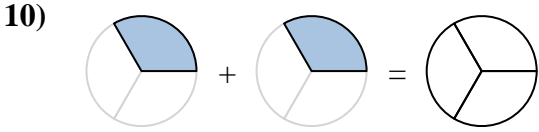
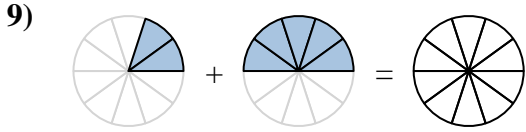
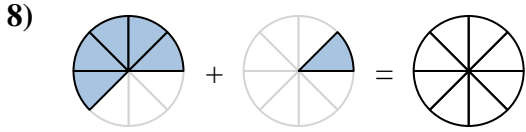
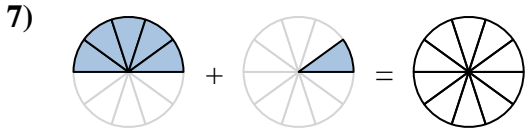
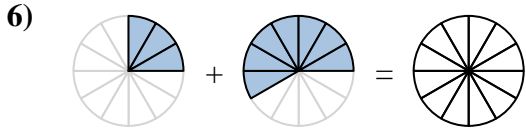
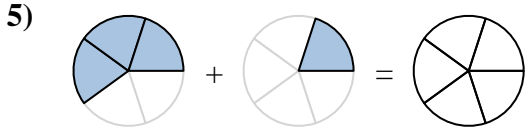
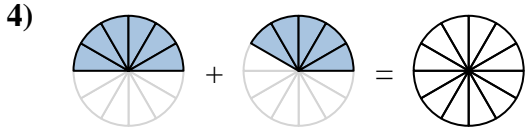
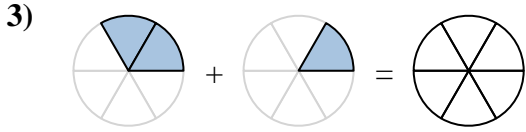
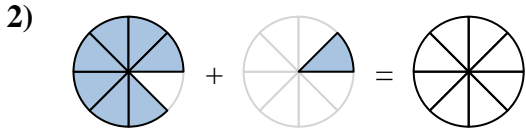
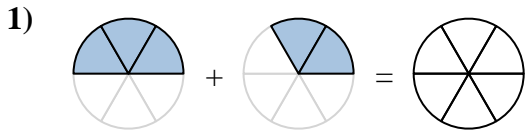
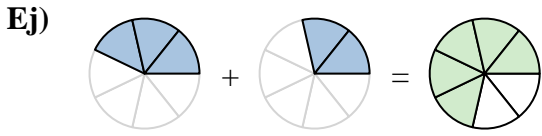




Sombrea la fracción para resolver el problema.



**Respuestas**

Ej.  $\frac{3}{7} + \frac{2}{7} = \frac{5}{7}$

1. \_\_\_\_\_ + \_\_\_\_\_ = \_\_\_\_\_

2. \_\_\_\_\_ + \_\_\_\_\_ = \_\_\_\_\_

3. \_\_\_\_\_ + \_\_\_\_\_ = \_\_\_\_\_

4. \_\_\_\_\_ + \_\_\_\_\_ = \_\_\_\_\_

5. \_\_\_\_\_ + \_\_\_\_\_ = \_\_\_\_\_

6. \_\_\_\_\_ + \_\_\_\_\_ = \_\_\_\_\_

7. \_\_\_\_\_ + \_\_\_\_\_ = \_\_\_\_\_

8. \_\_\_\_\_ + \_\_\_\_\_ = \_\_\_\_\_

9. \_\_\_\_\_ + \_\_\_\_\_ = \_\_\_\_\_

10. \_\_\_\_\_ + \_\_\_\_\_ = \_\_\_\_\_



Sombrea la fracción para resolver el problema.

Ej)



1)



2)



3)



4)



5)



6)



7)



8)



9)



10)

**Respuestas**

Ej.  $\frac{3}{7} + \frac{2}{7} = \frac{5}{7}$

1.  $\frac{3}{6} + \frac{2}{6} = \frac{5}{6}$

2.  $\frac{7}{8} + \frac{1}{8} = \frac{8}{8}$

3.  $\frac{2}{6} + \frac{1}{6} = \frac{3}{6}$

4.  $\frac{6}{12} + \frac{5}{12} = \frac{11}{12}$

5.  $\frac{3}{5} + \frac{2}{5} = \frac{5}{5}$

6.  $\frac{3}{12} + \frac{7}{12} = \frac{10}{12}$

7.  $\frac{5}{10} + \frac{1}{10} = \frac{6}{10}$

8.  $\frac{5}{8} + \frac{1}{8} = \frac{6}{8}$

9.  $\frac{2}{10} + \frac{5}{10} = \frac{7}{10}$

10.  $\frac{1}{3} + \frac{1}{3} = \frac{2}{3}$