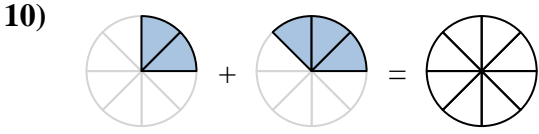
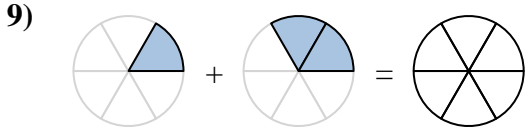
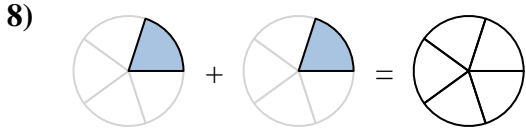
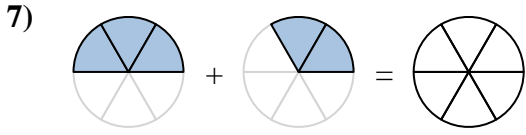
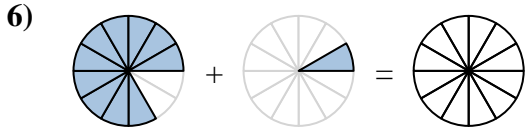
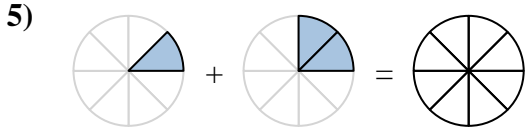
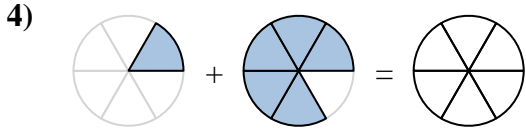
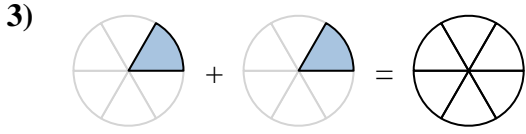
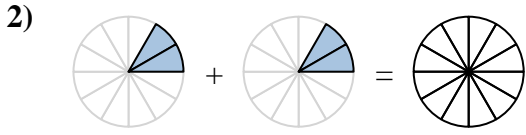
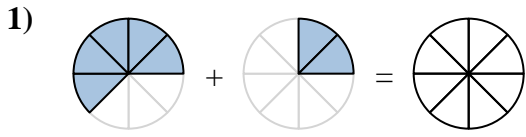
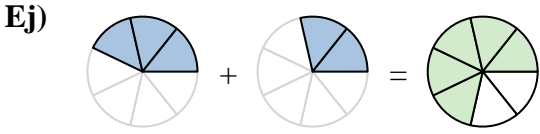




Sombrea la fracción para resolver el problema.



Respuestas

Ej. $\frac{3}{7} + \frac{2}{7} = \frac{5}{7}$

1. _____ + _____ = _____

2. _____ + _____ = _____

3. _____ + _____ = _____

4. _____ + _____ = _____

5. _____ + _____ = _____

6. _____ + _____ = _____

7. _____ + _____ = _____

8. _____ + _____ = _____

9. _____ + _____ = _____

10. _____ + _____ = _____



Sombrea la fracción para resolver el problema.

Ej)



1)



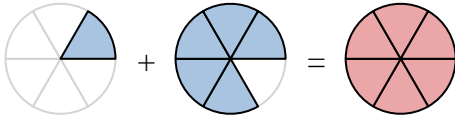
2)



3)



4)



5)



6)



7)



8)



9)



10)

**Respuestas**

Ej. $\frac{3}{7} + \frac{2}{7} = \frac{5}{7}$

1. $\frac{5}{8} + \frac{2}{8} = \frac{7}{8}$

2. $\frac{2}{12} + \frac{2}{12} = \frac{4}{12}$

3. $\frac{1}{6} + \frac{1}{6} = \frac{2}{6}$

4. $\frac{1}{6} + \frac{5}{6} = \frac{6}{6}$

5. $\frac{1}{8} + \frac{2}{8} = \frac{3}{8}$

6. $\frac{10}{12} + \frac{1}{12} = \frac{11}{12}$

7. $\frac{3}{6} + \frac{2}{6} = \frac{5}{6}$

8. $\frac{1}{5} + \frac{1}{5} = \frac{2}{5}$

9. $\frac{1}{6} + \frac{2}{6} = \frac{3}{6}$

10. $\frac{2}{8} + \frac{3}{8} = \frac{5}{8}$