



Iguala cada ecuación para responder y escribe la respuesta.

Ej) $\frac{1}{5} + \frac{1}{5}$



1) $\frac{1}{8} + \frac{1}{8} + \frac{1}{8} + \frac{1}{8} + \frac{1}{8} + \frac{1}{8} + \frac{1}{8}$



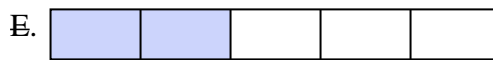
2) $\frac{1}{12} + \frac{1}{12} + \frac{1}{12} + \frac{1}{12}$



3) $\frac{1}{6} + \frac{1}{6} + \frac{1}{6}$



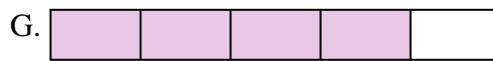
4) $\frac{1}{8} + \frac{1}{8} + \frac{1}{8} + \frac{1}{8} + \frac{1}{8}$




5) $\frac{1}{5} + \frac{1}{5} + \frac{1}{5} + \frac{1}{5}$



6) $\frac{1}{3} + \frac{1}{3}$




7) $\frac{1}{6} + \frac{1}{6} + \frac{1}{6} + \frac{1}{6} + \frac{1}{6}$




8) $\frac{1}{4} + \frac{1}{4} + \frac{1}{4}$




9) $\frac{1}{6} + \frac{1}{6} + \frac{1}{6} + \frac{1}{6}$



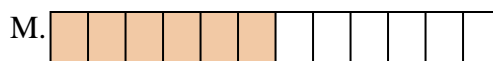
10) $\frac{1}{12} + \frac{1}{12}$



11) $\frac{1}{12} + \frac{1}{12} + \frac{1}{12} + \frac{1}{12} + \frac{1}{12} + \frac{1}{12} + \frac{1}{12}$




12) $\frac{1}{4} + \frac{1}{4}$




13) $\frac{1}{12} + \frac{1}{12} + \frac{1}{12} + \frac{1}{12} + \frac{1}{12} + \frac{1}{12}$



14) $\frac{1}{8} + \frac{1}{8} + \frac{1}{8} + \frac{1}{8} + \frac{1}{8} + \frac{1}{8}$



15) $\frac{1}{10} + \frac{1}{10} + \frac{1}{10} + \frac{1}{10} + \frac{1}{10} + \frac{1}{10}$

**Respuestas**Ej. E $\frac{2}{5}$

1. _____

2. _____

3. _____

4. _____

5. _____

6. _____

7. _____

8. _____

9. _____

10. _____

11. _____

12. _____

13. _____

14. _____

15. _____



Iguala cada ecuación para responder y escribe la respuesta.

Ej) $\frac{1}{5} + \frac{1}{5}$




1) $\frac{1}{8} + \frac{1}{8} + \frac{1}{8} + \frac{1}{8} + \frac{1}{8} + \frac{1}{8} + \frac{1}{8}$



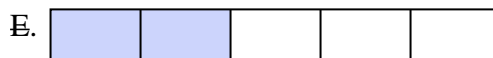
2) $\frac{1}{12} + \frac{1}{12} + \frac{1}{12} + \frac{1}{12}$



3) $\frac{1}{6} + \frac{1}{6} + \frac{1}{6}$




4) $\frac{1}{8} + \frac{1}{8} + \frac{1}{8} + \frac{1}{8} + \frac{1}{8}$




5) $\frac{1}{5} + \frac{1}{5} + \frac{1}{5} + \frac{1}{5}$



6) $\frac{1}{3} + \frac{1}{3}$




7) $\frac{1}{6} + \frac{1}{6} + \frac{1}{6} + \frac{1}{6} + \frac{1}{6}$




8) $\frac{1}{4} + \frac{1}{4} + \frac{1}{4}$




9) $\frac{1}{6} + \frac{1}{6} + \frac{1}{6} + \frac{1}{6}$




10) $\frac{1}{12} + \frac{1}{12}$



11) $\frac{1}{12} + \frac{1}{12} + \frac{1}{12} + \frac{1}{12} + \frac{1}{12} + \frac{1}{12} + \frac{1}{12}$



12) $\frac{1}{4} + \frac{1}{4}$




13) $\frac{1}{12} + \frac{1}{12} + \frac{1}{12} + \frac{1}{12} + \frac{1}{12} + \frac{1}{12}$



14) $\frac{1}{8} + \frac{1}{8} + \frac{1}{8} + \frac{1}{8} + \frac{1}{8} + \frac{1}{8}$



15) $\frac{1}{10} + \frac{1}{10} + \frac{1}{10} + \frac{1}{10} + \frac{1}{10} + \frac{1}{10}$

**Respuestas**

Ej. E $\frac{2}{5}$

1. N $\frac{7}{8}$

2. A $\frac{4}{12}$

3. C $\frac{3}{6}$

4. P $\frac{5}{8}$

5. G $\frac{4}{5}$

6. F $\frac{2}{3}$

7. J $\frac{5}{6}$

8. L $\frac{3}{4}$

9. B $\frac{4}{6}$

10. I $\frac{2}{12}$

11. H $\frac{7}{12}$

12. D $\frac{2}{4}$

13. M $\frac{6}{12}$

14. O $\frac{6}{8}$

15. K $\frac{6}{10}$