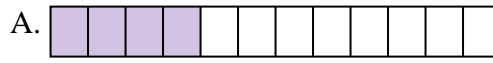




Iguala cada ecuación para responder y escribe la respuesta.

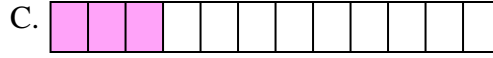
Ej) $\frac{1}{4} + \frac{1}{4} + \frac{1}{4}$



1) $\frac{1}{3} + \frac{1}{3}$



2) $\frac{1}{12} + \frac{1}{12} + \frac{1}{12} + \frac{1}{12}$



3) $\frac{1}{12} + \frac{1}{12} + \frac{1}{12}$




4) $\frac{1}{4} + \frac{1}{4}$



5) $\frac{1}{5} + \frac{1}{5}$




6) $\frac{1}{8} + \frac{1}{8}$




7) $\frac{1}{12} + \frac{1}{12} + \frac{1}{12} + \frac{1}{12} + \frac{1}{12} + \frac{1}{12} + \frac{1}{12}$



8) $\frac{1}{10} + \frac{1}{10}$



9) $\frac{1}{6} + \frac{1}{6} + \frac{1}{6} + \frac{1}{6} + \frac{1}{6}$



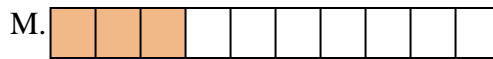
10) $\frac{1}{8} + \frac{1}{8} + \frac{1}{8}$



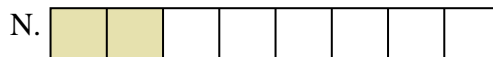
11) $\frac{1}{5} + \frac{1}{5} + \frac{1}{5}$




12) $\frac{1}{8} + \frac{1}{8} + \frac{1}{8} + \frac{1}{8} + \frac{1}{8} + \frac{1}{8}$




13) $\frac{1}{10} + \frac{1}{10} + \frac{1}{10}$



14) $\frac{1}{5} + \frac{1}{5} + \frac{1}{5} + \frac{1}{5}$



15) $\frac{1}{12} + \frac{1}{12} + \frac{1}{12} + \frac{1}{12} + \frac{1}{12} + \frac{1}{12}$

**Respuestas**Ej. H $\frac{3}{4}$

1. _____

2. _____

3. _____

4. _____

5. _____

6. _____

7. _____

8. _____

9. _____

10. _____

11. _____

12. _____

13. _____

14. _____

15. _____



Iguala cada ecuación para responder y escribe la respuesta.

Ej) $\frac{1}{4} + \frac{1}{4} + \frac{1}{4}$




1) $\frac{1}{3} + \frac{1}{3}$



2) $\frac{1}{12} + \frac{1}{12} + \frac{1}{12} + \frac{1}{12}$



3) $\frac{1}{12} + \frac{1}{12} + \frac{1}{12}$




4) $\frac{1}{4} + \frac{1}{4}$



5) $\frac{1}{5} + \frac{1}{5}$




6) $\frac{1}{8} + \frac{1}{8}$




7) $\frac{1}{12} + \frac{1}{12} + \frac{1}{12} + \frac{1}{12} + \frac{1}{12} + \frac{1}{12} + \frac{1}{12}$



8) $\frac{1}{10} + \frac{1}{10}$



9) $\frac{1}{6} + \frac{1}{6} + \frac{1}{6} + \frac{1}{6} + \frac{1}{6}$



10) $\frac{1}{8} + \frac{1}{8} + \frac{1}{8}$




11) $\frac{1}{5} + \frac{1}{5} + \frac{1}{5}$




12) $\frac{1}{8} + \frac{1}{8} + \frac{1}{8} + \frac{1}{8} + \frac{1}{8} + \frac{1}{8}$



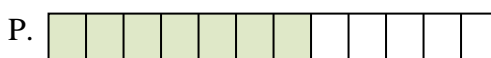
13) $\frac{1}{10} + \frac{1}{10} + \frac{1}{10}$



14) $\frac{1}{5} + \frac{1}{5} + \frac{1}{5} + \frac{1}{5}$



15) $\frac{1}{12} + \frac{1}{12} + \frac{1}{12} + \frac{1}{12} + \frac{1}{12} + \frac{1}{12}$

**Respuestas**

Ej. **H** $\frac{3}{4}$

1. **B** $\frac{2}{3}$

2. **A** $\frac{4}{12}$

3. **C** $\frac{3}{12}$

4. **J** $\frac{2}{4}$

5. **I** $\frac{2}{5}$

6. **N** $\frac{2}{8}$

7. **P** $\frac{7}{12}$

8. **E** $\frac{2}{10}$

9. **F** $\frac{5}{6}$

10. **L** $\frac{3}{8}$

11. **O** $\frac{3}{5}$

12. **D** $\frac{6}{8}$

13. **M** $\frac{3}{10}$

14. **K** $\frac{4}{5}$

15. **G** $\frac{6}{12}$