




Iguala cada ecuación para responder y escribe la respuesta.

Ej) $\frac{1}{8} + \frac{1}{8} + \frac{1}{8} + \frac{1}{8} + \frac{1}{8} + \frac{1}{8}$




1) $\frac{1}{5} + \frac{1}{5} + \frac{1}{5} + \frac{1}{5}$



2) $\frac{1}{5} + \frac{1}{5} + \frac{1}{5}$




3) $\frac{1}{3} + \frac{1}{3}$



4) $\frac{1}{6} + \frac{1}{6} + \frac{1}{6} + \frac{1}{6} + \frac{1}{6}$




5) $\frac{1}{8} + \frac{1}{8} + \frac{1}{8} + \frac{1}{8} + \frac{1}{8}$



6) $\frac{1}{8} + \frac{1}{8}$



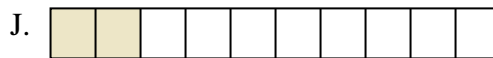
7) $\frac{1}{4} + \frac{1}{4}$




8) $\frac{1}{6} + \frac{1}{6} + \frac{1}{6}$




9) $\frac{1}{12} + \frac{1}{12} + \frac{1}{12}$



10) $\frac{1}{10} + \frac{1}{10}$



11) $\frac{1}{6} + \frac{1}{6} + \frac{1}{6} + \frac{1}{6}$



12) $\frac{1}{4} + \frac{1}{4} + \frac{1}{4}$




13) $\frac{1}{12} + \frac{1}{12} + \frac{1}{12} + \frac{1}{12}$



14) $\frac{1}{6} + \frac{1}{6}$



15) $\frac{1}{5} + \frac{1}{5}$

**Respuestas**Ej. $\frac{6}{8}$

1. _____

2. _____

3. _____

4. _____

5. _____

6. _____

7. _____

8. _____

9. _____

10. _____

11. _____

12. _____

13. _____

14. _____

15. _____




Iguala cada ecuación para responder y escribe la respuesta.

Ej) $\frac{1}{8} + \frac{1}{8} + \frac{1}{8} + \frac{1}{8} + \frac{1}{8} + \frac{1}{8}$




1) $\frac{1}{5} + \frac{1}{5} + \frac{1}{5} + \frac{1}{5}$



2) $\frac{1}{5} + \frac{1}{5} + \frac{1}{5}$




3) $\frac{1}{3} + \frac{1}{3}$




4) $\frac{1}{6} + \frac{1}{6} + \frac{1}{6} + \frac{1}{6} + \frac{1}{6}$




5) $\frac{1}{8} + \frac{1}{8} + \frac{1}{8} + \frac{1}{8} + \frac{1}{8}$



6) $\frac{1}{8} + \frac{1}{8}$



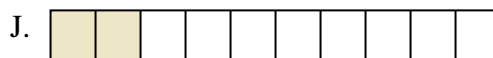
7) $\frac{1}{4} + \frac{1}{4}$




8) $\frac{1}{6} + \frac{1}{6} + \frac{1}{6}$



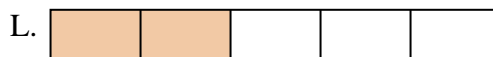
9) $\frac{1}{12} + \frac{1}{12} + \frac{1}{12}$




10) $\frac{1}{10} + \frac{1}{10}$



11) $\frac{1}{6} + \frac{1}{6} + \frac{1}{6} + \frac{1}{6}$



12) $\frac{1}{4} + \frac{1}{4} + \frac{1}{4}$



13) $\frac{1}{12} + \frac{1}{12} + \frac{1}{12} + \frac{1}{12}$



14) $\frac{1}{6} + \frac{1}{6}$



15) $\frac{1}{5} + \frac{1}{5}$

**Respuestas**

Ej. N $\frac{6}{8}$

1. F $\frac{4}{5}$

2. B $\frac{3}{5}$

3. P $\frac{2}{3}$

4. I $\frac{5}{6}$

5. D $\frac{5}{8}$

6. H $\frac{2}{8}$

7. K $\frac{2}{4}$

8. C $\frac{3}{6}$

9. E $\frac{3}{12}$

10. J $\frac{2}{10}$

11. G $\frac{4}{6}$

12. A $\frac{3}{4}$

13. O $\frac{4}{12}$

14. M $\frac{2}{6}$

15. L $\frac{2}{5}$