

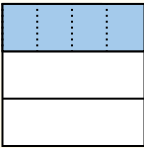
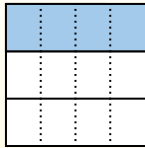





Usa la caja para mostrar un ejemplo visual de cómo dividir una fracción y un número entero.

$\frac{1}{3} \div 4 = ?$	Divide el entero en 3 piezas y completa la sección 1.	Luego divide $\frac{1}{3}$ en 4 grupos.	Para determinar el tamaño de cada pieza en comparación con el entero, divide el entero en 4 grupos.
			
Para resolver, comienza con un entero.	Ahora puedes ver el tamaño de $\frac{1}{3}$.	Esto muestra el tamaño de cada pieza.	Cada pieza es $\frac{1}{12}$ del entero. O: $\frac{1}{3} \div 4 = \frac{1}{12}$


Respuestas

1. _____
2. _____
3. _____
4. _____
5. _____
6. _____
7. _____
8. _____
9. _____
10. _____
11. _____
12. _____


1) $\frac{1}{8} \div 5 =$




2) $\frac{1}{4} \div 9 =$




3) $\frac{1}{5} \div 7 =$




4) $\frac{1}{6} \div 4 =$




5) $\frac{1}{6} \div 9 =$




6) $\frac{1}{3} \div 2 =$




7) $\frac{1}{9} \div 9 =$




8) $\frac{1}{2} \div 3 =$




9) $\frac{1}{3} \div 7 =$




10) $\frac{1}{5} \div 7 =$



11) $\frac{1}{4} \div 7 =$




12) $\frac{1}{8} \div 9 =$






Usa la caja para mostrar un ejemplo visual de cómo dividir una fracción y un número entero.

$\frac{1}{3} \div 4 = ?$



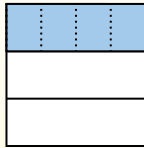
Para resolver, comienza con un entero.

Divide el entero en 3 piezas y completa la sección 1.



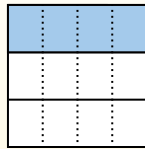
Ahora puedes ver el tamaño de $\frac{1}{3}$.

Luego divide $\frac{1}{3}$ en 4 grupos.



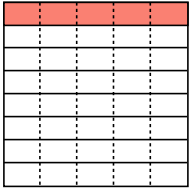
Esto muestra el tamaño de cada pieza.

Para determinar el tamaño de cada pieza en comparación con el entero, divide el entero en 4 grupos.

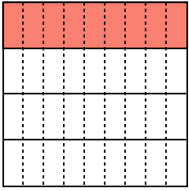


Cada pieza es $\frac{1}{12}$ del entero.
O:
 $\frac{1}{3} \div 4 = \frac{1}{12}$

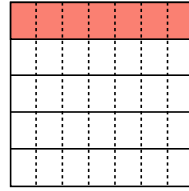
1) $\frac{1}{8} \div 5 =$



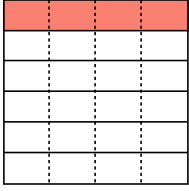
2) $\frac{1}{4} \div 9 =$



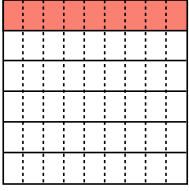
3) $\frac{1}{5} \div 7 =$



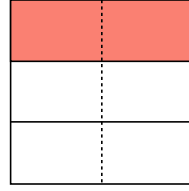
4) $\frac{1}{6} \div 4 =$



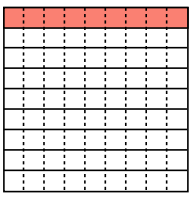
5) $\frac{1}{6} \div 9 =$



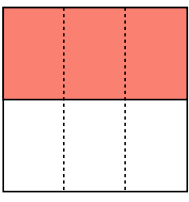
6) $\frac{1}{3} \div 2 =$



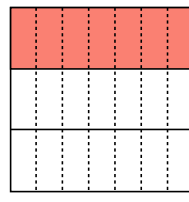
7) $\frac{1}{9} \div 9 =$



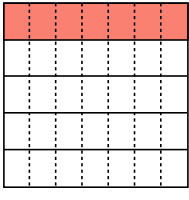
8) $\frac{1}{2} \div 3 =$



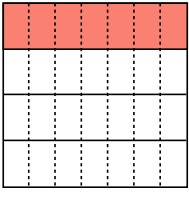
9) $\frac{1}{3} \div 7 =$



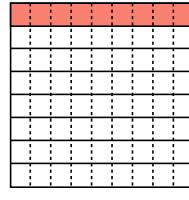
10) $\frac{1}{5} \div 7 =$



11) $\frac{1}{4} \div 7 =$



12) $\frac{1}{8} \div 9 =$



Respuestas

1. $\frac{1}{40}$
2. $\frac{1}{36}$
3. $\frac{1}{35}$
4. $\frac{1}{24}$
5. $\frac{1}{54}$
6. $\frac{1}{6}$
7. $\frac{1}{81}$
8. $\frac{1}{6}$
9. $\frac{1}{21}$
10. $\frac{1}{35}$
11. $\frac{1}{28}$
12. $\frac{1}{72}$