




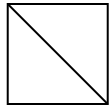
Determina cuál opción(es) muestran la forma dividida para que cada pieza tenga un área igual. Si ninguna, escriba 'ninguna'.

Respuestas

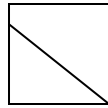
1) a.



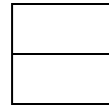
b.



c.



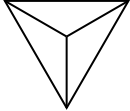
d.



1. _____

2. _____

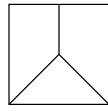
2) a.



b.



c.



d.

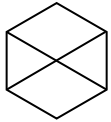


3. _____

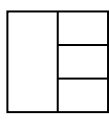
4. _____

5. _____

3) a.



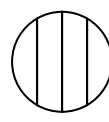
b.



c.



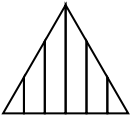
d.



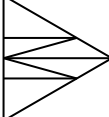
6. _____

7. _____

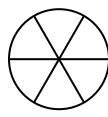
4) a.



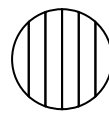
b.



c.

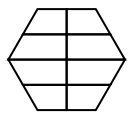


d.

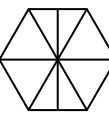


8. _____

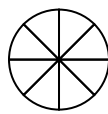
5) a.



b.



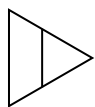
c.




d.



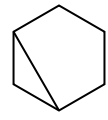
6) a.



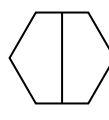
b.



c.



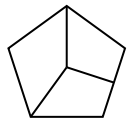
d.



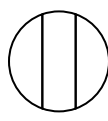
7) a.



b.



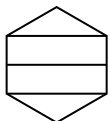
c.



d.



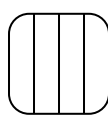
8) a.



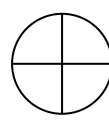
b.



c.




d.



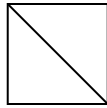


Determina cuál opción(es) muestran la forma dividida para que cada pieza tenga un área igual. Si ninguna, escriba 'ninguna'.

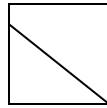
1) a.



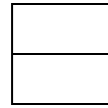
b.



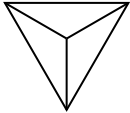
c.



d.



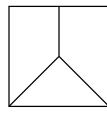
2) a.



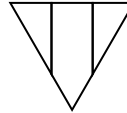
b.



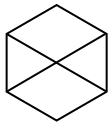
c.



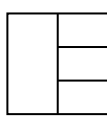
d.



3) a.



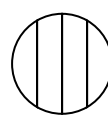
b.



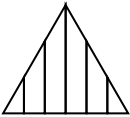
c.



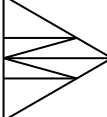
d.



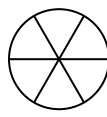
4) a.



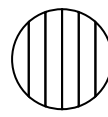
b.



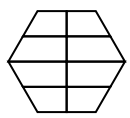
c.



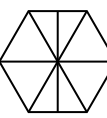
d.



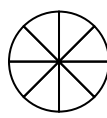
5) a.




b.



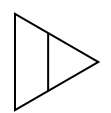
c.



d.



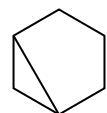
6) a.



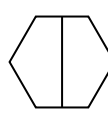
b.



c.



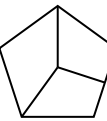
d.



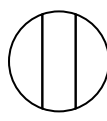
7) a.



b.



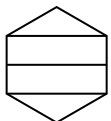
c.



d.



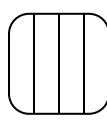
8) a.



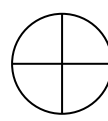
b.



c.



d.



Respuestas

1. **B,D**

2. **A,B**

3. **ninguna**

4. **C**

5. **C,D**

6. **D**


7. **ninguna**

8. **D**

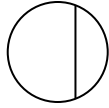


Determina cuál opción(es) muestran la forma dividida para que cada pieza tenga un área igual. Si ninguna, escriba 'ninguna'.

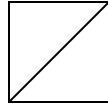
1) a.



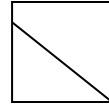
b.



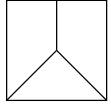
c.



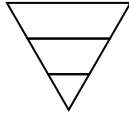
d.



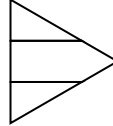
2) a.



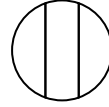
b.



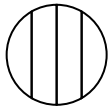
c.




d.



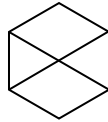
3) a.



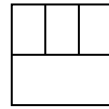
b.



c.



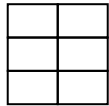
d.



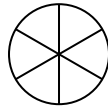
4) a.



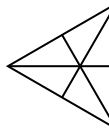
b.




c.



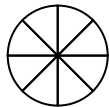
d.



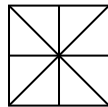
5) a.



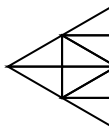
b.



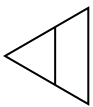
c.



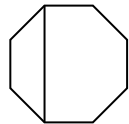
d.



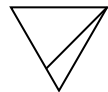
6) a.



b.



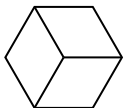
c.



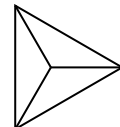
d.



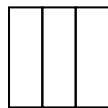
7) a.



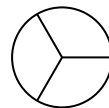
b.



c.



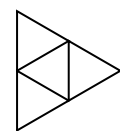
d.



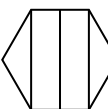
8) a.



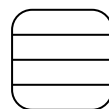
b.



c.



d.



Respuestas

1. _____

2. _____

3. _____

4. _____

5. _____

6. _____


7. _____

8. _____

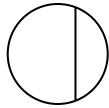


Determina cuál opción(es) muestran la forma dividida para que cada pieza tenga un área igual. Si ninguna, escriba 'ninguna'.

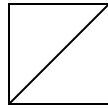
1) a.



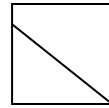
b.



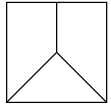
c.



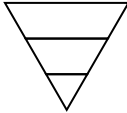
d.



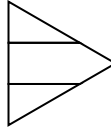
2) a.



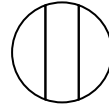
b.



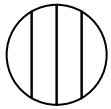
c.




d.



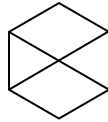
3) a.



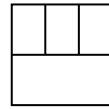
b.



c.



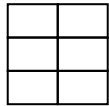
d.



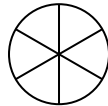
4) a.



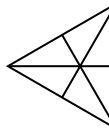
b.



c.



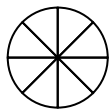
d.



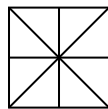
5) a.



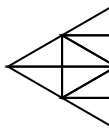
b.



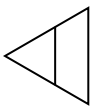
c.



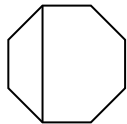
d.



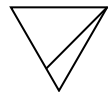
6) a.




b.



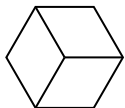
c.



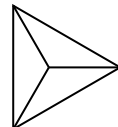
d.



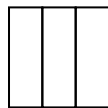
7) a.



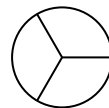
b.



c.



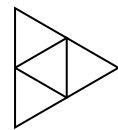
d.



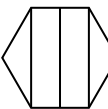
8) a.



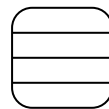
b.



c.



d.



Respuestas

1. **C**

2. **ninguna**

3. **ninguna**

4. **A,B,C,D**

5. **A,B,C,D**

6. **ninguna**


7. **A,B,C,D**

8. **B**

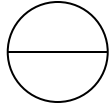


Determina cuál opción(es) muestran la forma dividida para que cada pieza tenga un área igual. Si ninguna, escriba 'ninguna'.

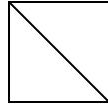
1) a.



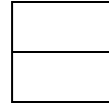
b.



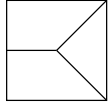
c.



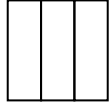
d.



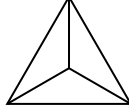
2) a.




b.




c.



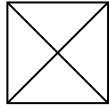
d.



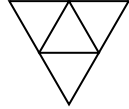
3) a.



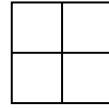
b.



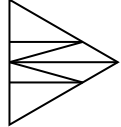
c.



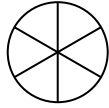
d.



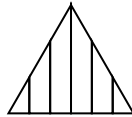
4) a.



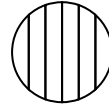
b.




c.



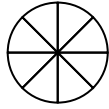
d.



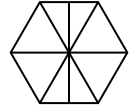
5) a.



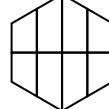
b.



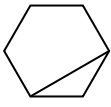
c.




d.




6) a.



b.



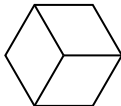
c.



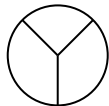
d.




7) a.



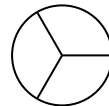
b.



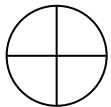
c.



d.




8) a.



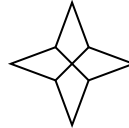
b.



c.



d.



Respuestas

1. _____

2. _____

3. _____

4. _____

5. _____

6. _____


7. _____

8. _____

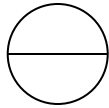


Determina cuál opción(es) muestran la forma dividida para que cada pieza tenga un área igual. Si ninguna, escriba 'ninguna'.

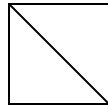
1) a.



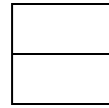
b.



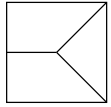
c.



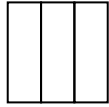
d.



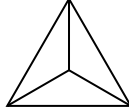
2) a.




b.




c.



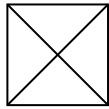
d.



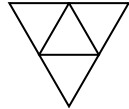
3) a.



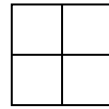
b.



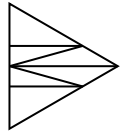
c.



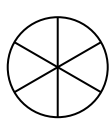
d.



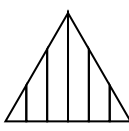
4) a.



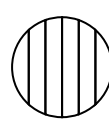
b.



c.



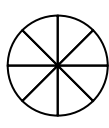
d.



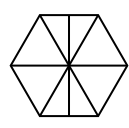
5) a.



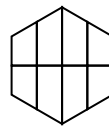
b.



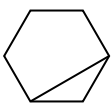
c.




d.




6) a.



b.



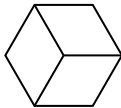
c.



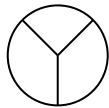
d.



7) a.



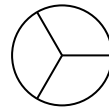
b.



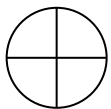
c.



d.



8) a.



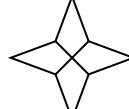
b.



c.



d.



Respuestas

1. B,C,D

2. B,C

3. A,B,C,D

4. B

5. A,B

6. C

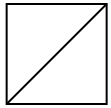
7. A,D

8. A,B,C,D

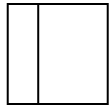


Determina cuál opción(es) muestran la forma dividida para que cada pieza tenga un área igual. Si ninguna, escriba 'ninguna'.

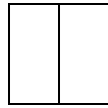
1) a.



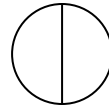
b.




c.



d.



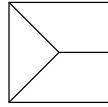
2) a.



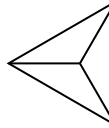
b.



c.



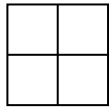
d.



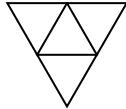
3) a.



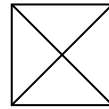
b.



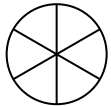
c.



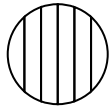
d.



4) a.



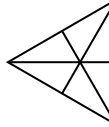
b.



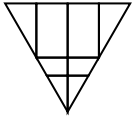
c.



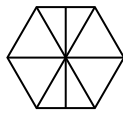
d.



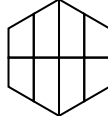
5) a.



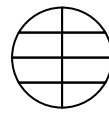
b.



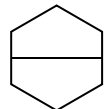
c.



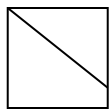
d.



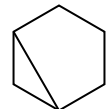
6) a.



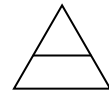
b.



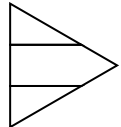
c.



d.



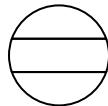
7) a.




b.



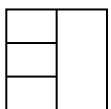
c.



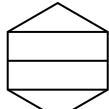
d.




8) a.



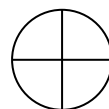
b.



c.



d.



Respuestas

1. _____

2. _____

3. _____

4. _____

5. _____

6. _____

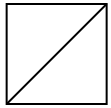
7. _____

8. _____

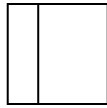


Determina cuál opción(es) muestran la forma dividida para que cada pieza tenga un área igual. Si ninguna, escriba 'ninguna'.

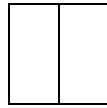
1) a.



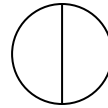
b.




c.



d.



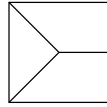
2) a.



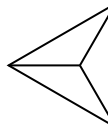
b.



c.



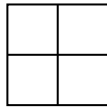
d.



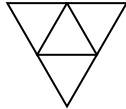
3) a.



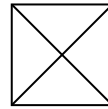
b.



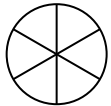
c.



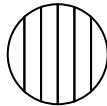
d.



4) a.



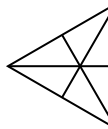
b.



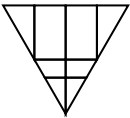
c.



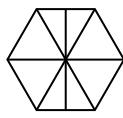
d.



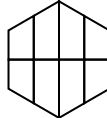
5) a.



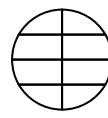
b.



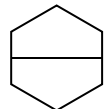
c.



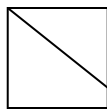
d.



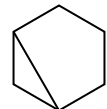
6) a.



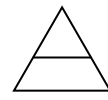
b.



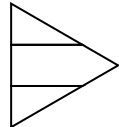
c.



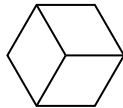
d.



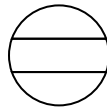
7) a.




b.



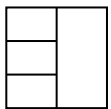
c.



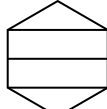
d.



8) a.



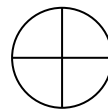
b.



c.



d.



Respuestas

1. A,C,D

2. A,B,D

3. A,B,C,D

4. A,C,D

5. ninguna

6. A

7. B

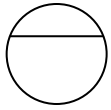
8. C,D



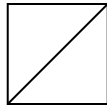
Determina cuál opción(es) muestran la forma dividida para que cada pieza tenga un área igual. Si ninguna, escriba 'ninguna'.

Respuestas

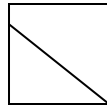
1) a.



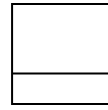
b.



c.



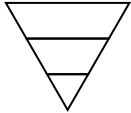
d.



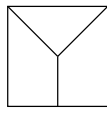
1. _____

2. _____

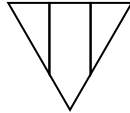
2) a.



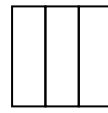
b.



c.



d.

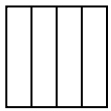


3. _____

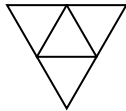
4. _____

5. _____

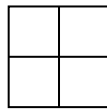
3) a.



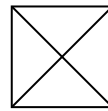
b.



c.



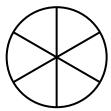
d.



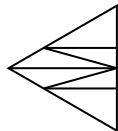
6. _____

7. _____

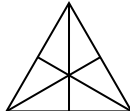
4) a.



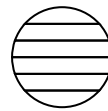
b.



c.

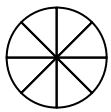


d.

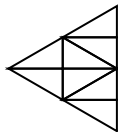


8. _____


5) a.



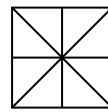
b.



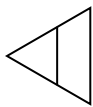
c.



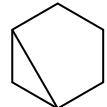
d.



6) a.



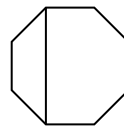
b.



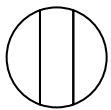
c.



d.



7) a.



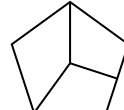
b.



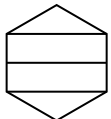
c.



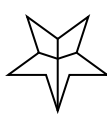
d.



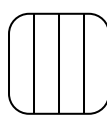
8) a.



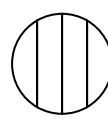
b.



c.



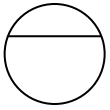
d.



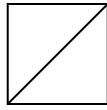


Determina cuál opción(es) muestran la forma dividida para que cada pieza tenga un área igual. Si ninguna, escriba 'ninguna'.

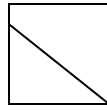
1) a.



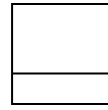
b.



c.

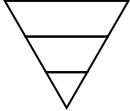


d.

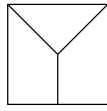


1. **B**

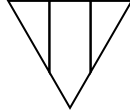
2) a.



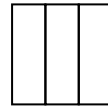
b.



c.




d.

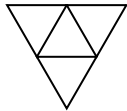


2. **D**

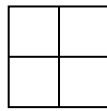
3) a.



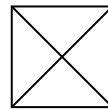
b.



c.

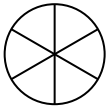


d.

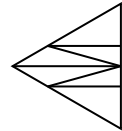


3. **A,B,C,D**

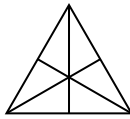
4) a.



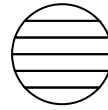
b.



c.

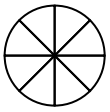


d.

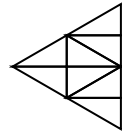


4. **A,C**


5) a.



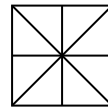
b.



c.

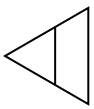


d.

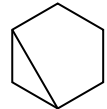


5. **A,B,C,D**

6) a.



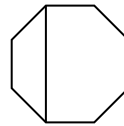
b.



c.

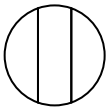


d.



6. **ninguna**

7) a.



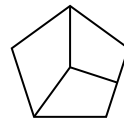
b.



c.

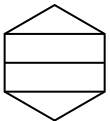


d.




7. **ninguna**

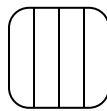
8) a.



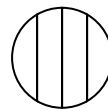
b.



c.



d.

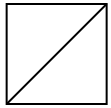


8. **ninguna**

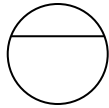


Determina cuál opción(es) muestran la forma dividida para que cada pieza tenga un área igual. Si ninguna, escriba 'ninguna'.

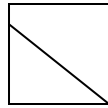
1) a.



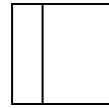
b.



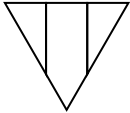
c.



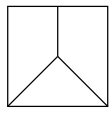
d.



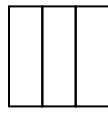
2) a.



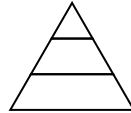
b.



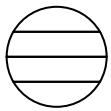
c.



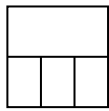
d.



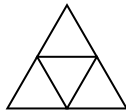
3) a.



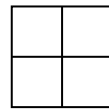
b.



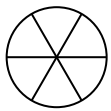
c.



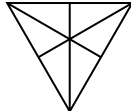
d.



4) a.



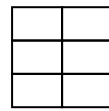
b.



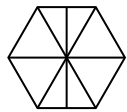
c.



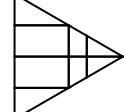
d.



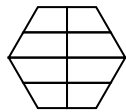
5) a.



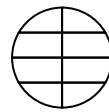
b.



c.



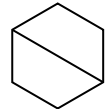
d.



6) a.




b.



c.



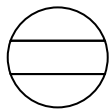
d.



7) a.



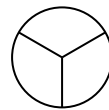
b.



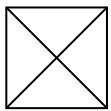
c.



d.



8) a.



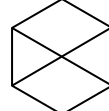
b.



c.



d.



Respuestas

1. _____

2. _____

3. _____

4. _____

5. _____

6. _____

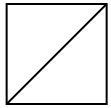
7. _____

8. _____

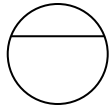


Determina cuál opción(es) muestran la forma dividida para que cada pieza tenga un área igual. Si ninguna, escriba 'ninguna'.

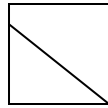
1) a.



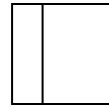
b.



c.

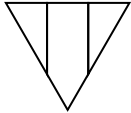


d.

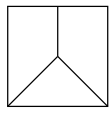


1. **A**

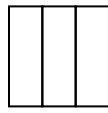
2) a.



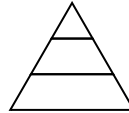
b.



c.

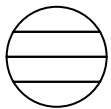


d.

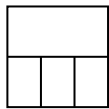


2. **C**

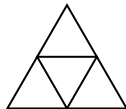
3) a.



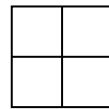
b.



c.

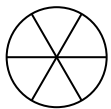


d.

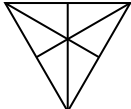


3. **C,D**


4) a.



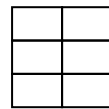
b.



c.

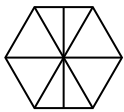


d.

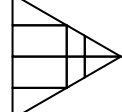


4. **A,B,C,D**

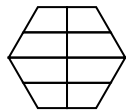
5) a.



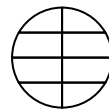
b.



c.



d.

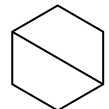


5. **ninguna**

6) a.




b.



c.



d.

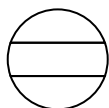


6. **B,D**

7) a.



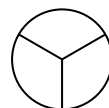
b.



c.

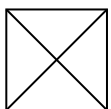


d.



7. **D**


8) a.



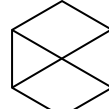
b.



c.



d.

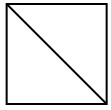


8. **A,B**

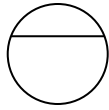


Determina cuál opción(es) muestran la forma dividida para que cada pieza tenga un área igual. Si ninguna, escriba 'ninguna'.

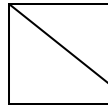
1) a.



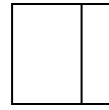
b.



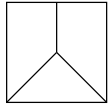
c.



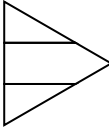
d.



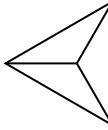
2) a.



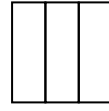
b.



c.



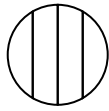
d.



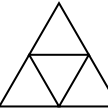
3) a.



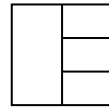
b.



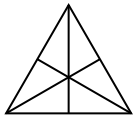
c.



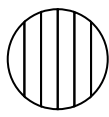
d.



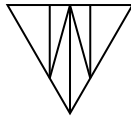
4) a.



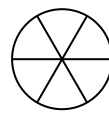
b.



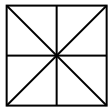
c.



d.



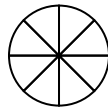
5) a.



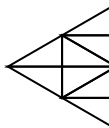
b.



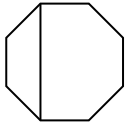
c.



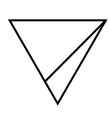
d.




6) a.



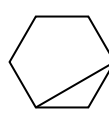
b.



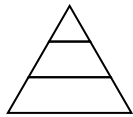
c.



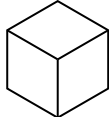
d.



7) a.



b.



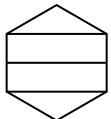
c.




d.



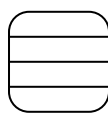
8) a.



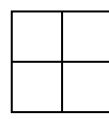
b.



c.



d.



Respuestas

1. _____

2. _____

3. _____

4. _____

5. _____

6. _____

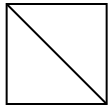
7. _____

8. _____

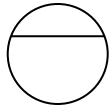


Determina cuál opción(es) muestran la forma dividida para que cada pieza tenga un área igual. Si ninguna, escriba 'ninguna'.

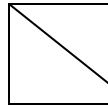
1) a.



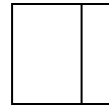
b.



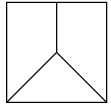
c.



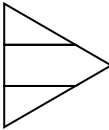
d.



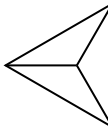
2) a.



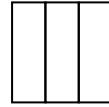
b.



c.



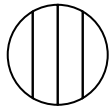
d.



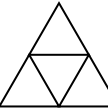
3) a.



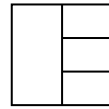
b.



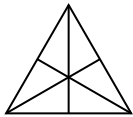
c.



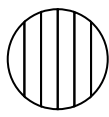
d.



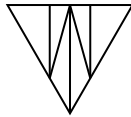
4) a.



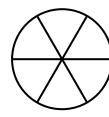
b.



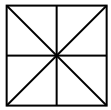
c.



d.



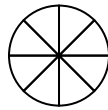
5) a.



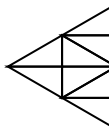
b.



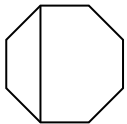
c.



d.




6) a.



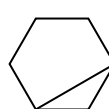
b.



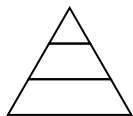
c.



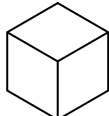
d.



7) a.



b.



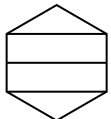
c.




d.



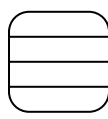
8) a.



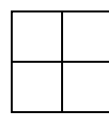
b.



c.



d.



Respuestas

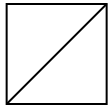
- 1. **A**
- 2. **C,D**
- 3. **C**
- 4. **A,D**
- 5. **A,B,C,D**
- 6. **C**
- 7. **B**
- 8. **D**



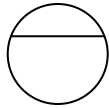
Determina cuál opción(es) muestran la forma dividida para que cada pieza tenga un área igual. Si ninguna, escriba 'ninguna'.

Respuestas

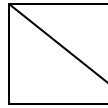
1) a.



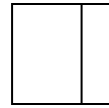
b.



c.



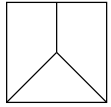
d.



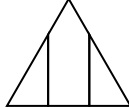
1. _____

2. _____

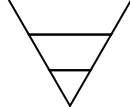
2) a.



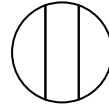
b.



c.



d.

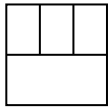


3. _____


4. _____

5. _____

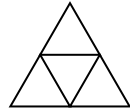
3) a.



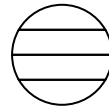
b.



c.




d.



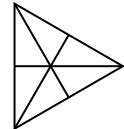
6. _____

7. _____

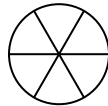
4) a.



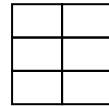
b.



c.

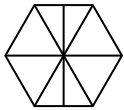


d.

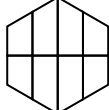


8. _____

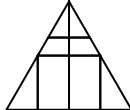
5) a.



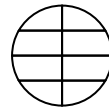
b.



c.




d.



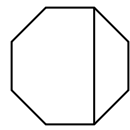
6) a.



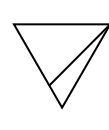
b.



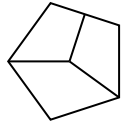
c.



d.



7) a.



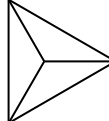
b.



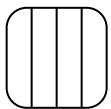
c.



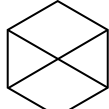
d.



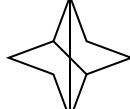
8) a.



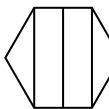
b.



c.



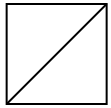
d.



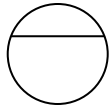


Determina cuál opción(es) muestran la forma dividida para que cada pieza tenga un área igual. Si ninguna, escriba 'ninguna'.

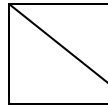
1) a.



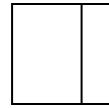
b.



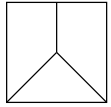
c.



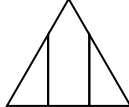
d.



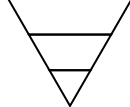
2) a.



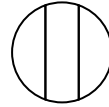
b.



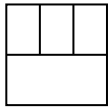
c.




d.



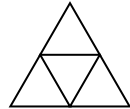
3) a.



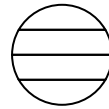
b.




c.



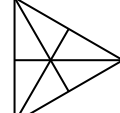
d.



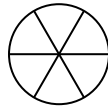
4) a.



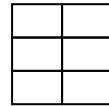
b.



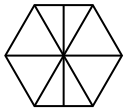
c.



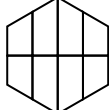
d.



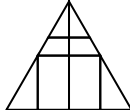
5) a.



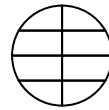
b.




c.




d.



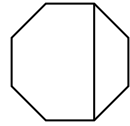
6) a.



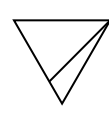
b.



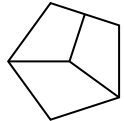
c.



d.



7) a.



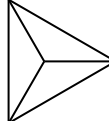
b.



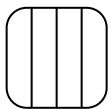
c.



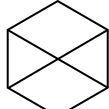
d.



8) a.



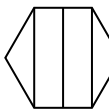
b.



c.



d.



Respuestas

1. A

2. ninguna

3. C

4. A,B,C,D

5. ninguna

6. ninguna


7. B,D

8. ninguna

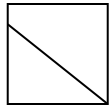


Determina cuál opción(es) muestran la forma dividida para que cada pieza tenga un área igual. Si ninguna, escriba 'ninguna'.

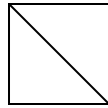
1) a.



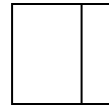
b.



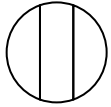
c.



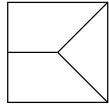
d.



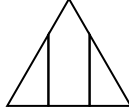
2) a.



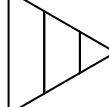
b.



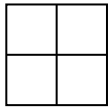
c.



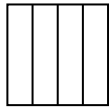
d.



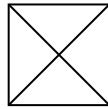
3) a.



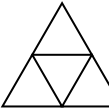
b.



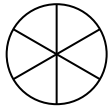
c.



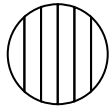
d.



4) a.



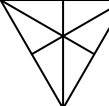
b.



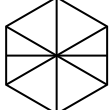
c.



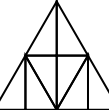
d.



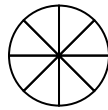
5) a.




b.



c.



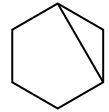
d.




6) a.



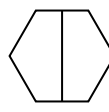
b.



c.



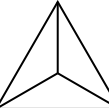
d.



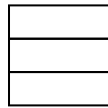
7) a.



b.



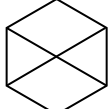
c.



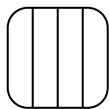
d.




8) a.



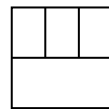
b.



c.



d.



Respuestas

1. _____

2. _____

3. _____

4. _____

5. _____

6. _____


7. _____

8. _____

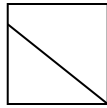


Determina cuál opción(es) muestran la forma dividida para que cada pieza tenga un área igual. Si ninguna, escriba 'ninguna'.

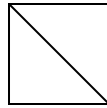
1) a.



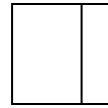
b.



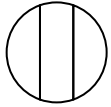
c.



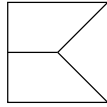
d.



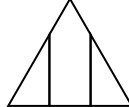
2) a.



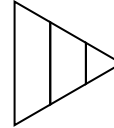
b.



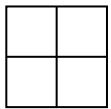
c.



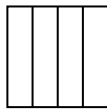
d.



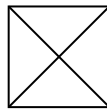
3) a.



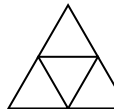
b.



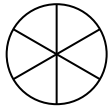
c.



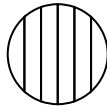
d.



4) a.



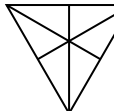
b.



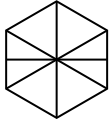
c.



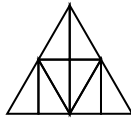
d.



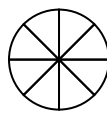
5) a.



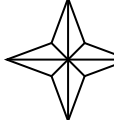
b.



c.



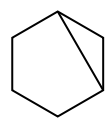
d.




6) a.



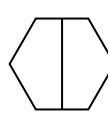
b.



c.



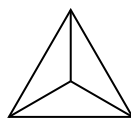
d.



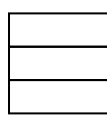
7) a.



b.



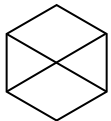
c.



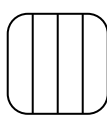
d.



8) a.



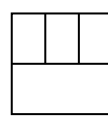
b.



c.



d.



Respuestas

1. A,C

2. ninguna

3. A,B,C,D

4. A,C,D

5. B,C,D

6. C,D


7. B,C

8. ninguna

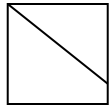


Determina cuál opción(es) muestran la forma dividida para que cada pieza tenga un área igual. Si ninguna, escriba 'ninguna'.

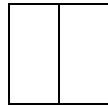
1) a.



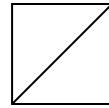
b.



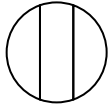
c.



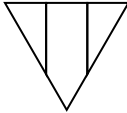
d.



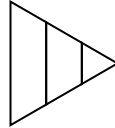
2) a.



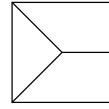
b.




c.



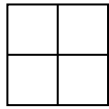
d.



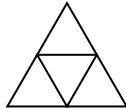
3) a.



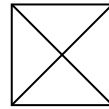
b.



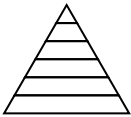
c.



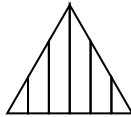
d.



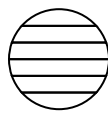
4) a.



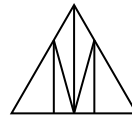
b.



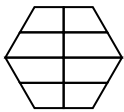
c.



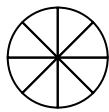
d.



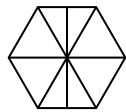
5) a.




b.



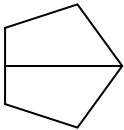
c.



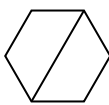
d.



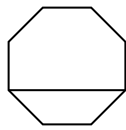
6) a.



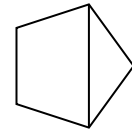
b.



c.



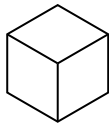
d.



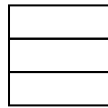
7) a.



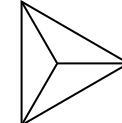
b.



c.



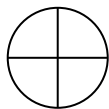
d.



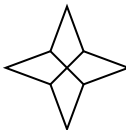
8) a.



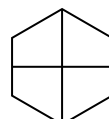
b.



c.



d.



Respuestas

1. _____

2. _____

3. _____

4. _____

5. _____

6. _____


7. _____

8. _____

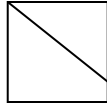


Determina cuál opción(es) muestran la forma dividida para que cada pieza tenga un área igual. Si ninguna, escriba 'ninguna'.

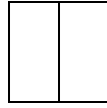
1) a.



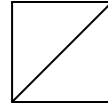
b.



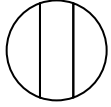
c.



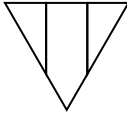
d.



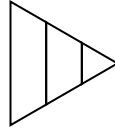
2) a.



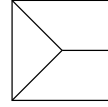
b.




c.



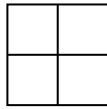
d.



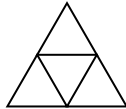
3) a.



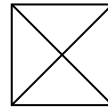
b.



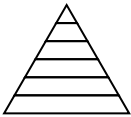
c.



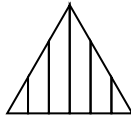
d.



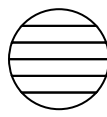
4) a.



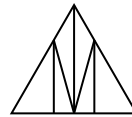
b.



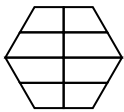
c.



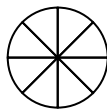
d.



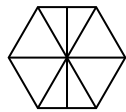
5) a.




b.



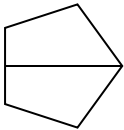
c.



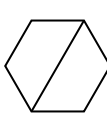
d.



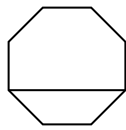
6) a.



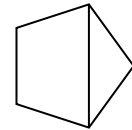
b.



c.



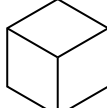
d.



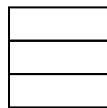
7) a.



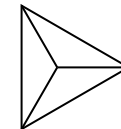
b.



c.



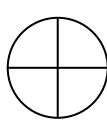
d.



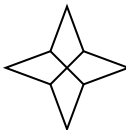
8) a.



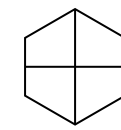
b.



c.



d.



Respuestas

1. C,D

2. ninguna

3. A,B,C,D

4. ninguna

5. B,D

6. A,B

7. A,B,C,D

8. A,B,C,D