



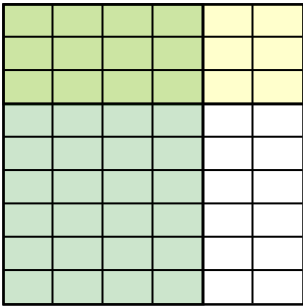




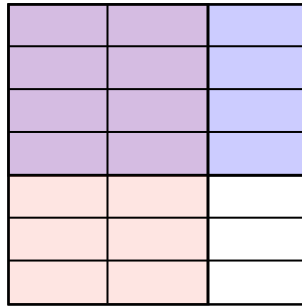


Usa la caja para mostrar un ejemplo visual de cómo multiplicar dos fracciones.

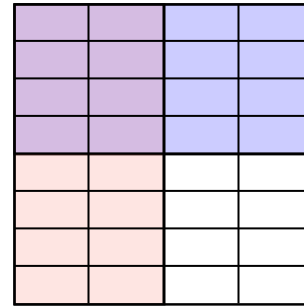
Ej)  $\frac{4}{6} \times \frac{3}{9} =$



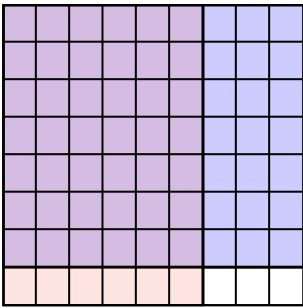
1)  $\frac{2}{3} \times \frac{4}{7} =$



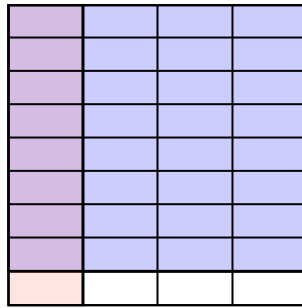
2)  $\frac{2}{4} \times \frac{4}{8} =$



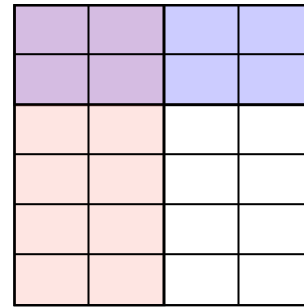
3)  $\frac{6}{9} \times \frac{7}{8} =$



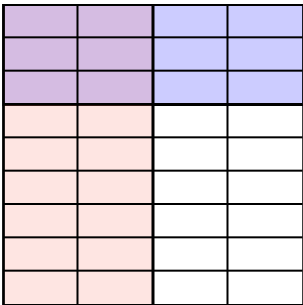
4)  $\frac{1}{4} \times \frac{8}{9} =$



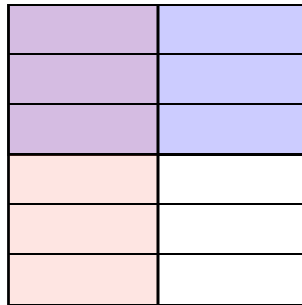
5)  $\frac{2}{4} \times \frac{2}{6} =$



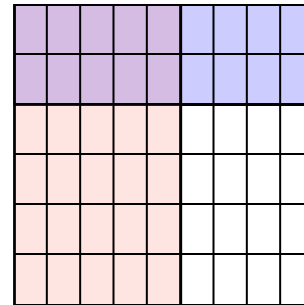
6)  $\frac{2}{4} \times \frac{3}{9} =$



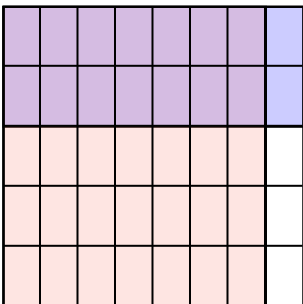
7)  $\frac{1}{2} \times \frac{3}{6} =$



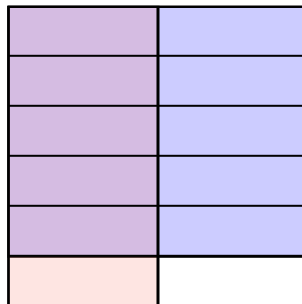
8)  $\frac{5}{9} \times \frac{2}{6} =$



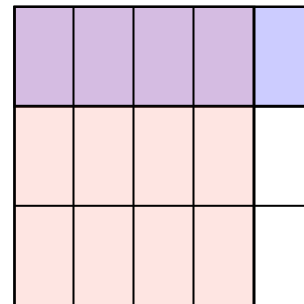
9)  $\frac{7}{8} \times \frac{2}{5} =$



10)  $\frac{1}{2} \times \frac{5}{6} =$



11)  $\frac{4}{5} \times \frac{1}{3} =$



**Respuestas**

Ej.  $\frac{12}{54}$

1.  $\frac{8}{21}$

2.  $\frac{8}{32}$

3.  $\frac{42}{72}$

4.  $\frac{8}{36}$

5.  $\frac{4}{24}$

6.  $\frac{6}{36}$

7.  $\frac{3}{12}$

8.  $\frac{10}{54}$

9.  $\frac{14}{40}$

10.  $\frac{5}{12}$

11.  $\frac{4}{15}$



























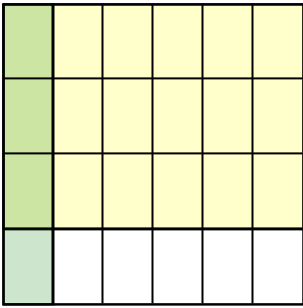




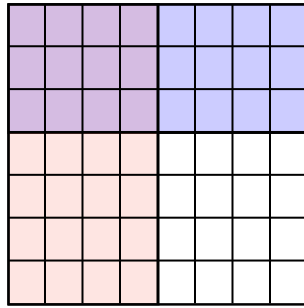


Usa la caja para mostrar un ejemplo visual de cómo multiplicar dos fracciones.

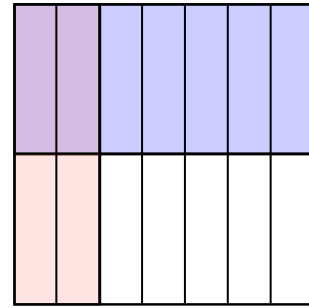
Ej)  $\frac{1}{6} \times \frac{3}{4} =$




1)  $\frac{4}{8} \times \frac{3}{7} =$



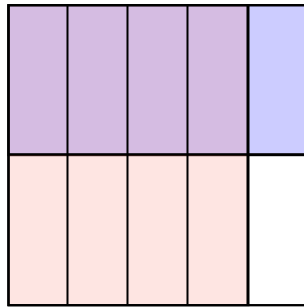
2)  $\frac{2}{7} \times \frac{1}{2} =$



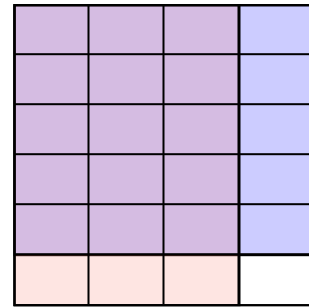
3)  $\frac{2}{3} \times \frac{7}{8} =$




4)  $\frac{4}{5} \times \frac{1}{2} =$




5)  $\frac{3}{4} \times \frac{5}{6} =$



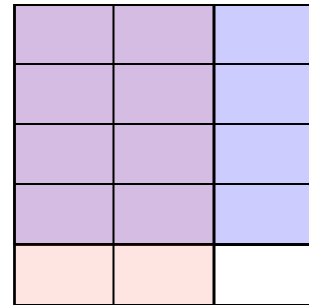
6)  $\frac{2}{4} \times \frac{2}{4} =$



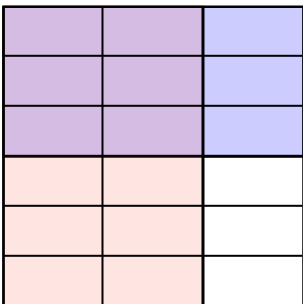
7)  $\frac{1}{2} \times \frac{7}{9} =$



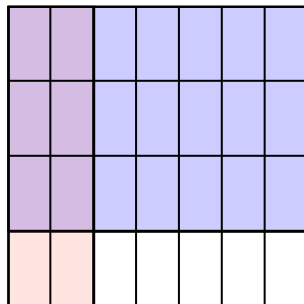
8)  $\frac{2}{3} \times \frac{4}{5} =$



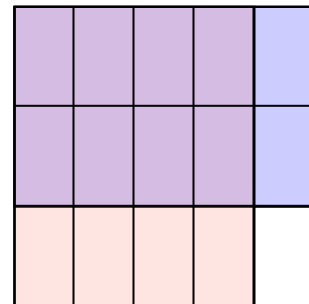
9)  $\frac{2}{3} \times \frac{3}{6} =$



10)  $\frac{2}{7} \times \frac{3}{4} =$



11)  $\frac{4}{5} \times \frac{2}{3} =$



**Respuestas**

Ej.  $\frac{3}{24}$

1.  $\frac{12}{56}$

2.  $\frac{2}{14}$

3.  $\frac{14}{24}$

4.  $\frac{4}{10}$

5.  $\frac{15}{24}$

6.  $\frac{4}{16}$

7.  $\frac{7}{18}$

8.  $\frac{8}{15}$

9.  $\frac{6}{18}$

10.  $\frac{6}{28}$

11.  $\frac{8}{15}$



