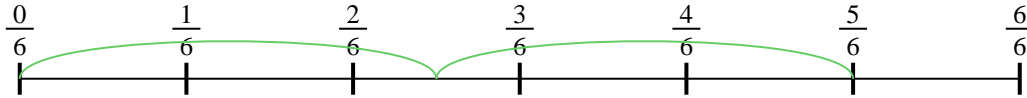




Usa la recta numérica para resolver cada problema. El primero ya está marcado como ejemplo.

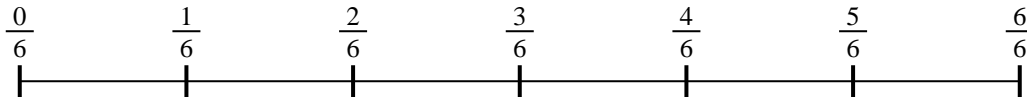
Respuestas

1) $\frac{5}{6} \div 2$




1. _____

2) $\frac{5}{6} \div 3$



2. _____

3) $\frac{3}{7} \div 2$




3. _____

4) $\frac{4}{5} \div 3$



4. _____

5) $\frac{3}{7} \div 5$



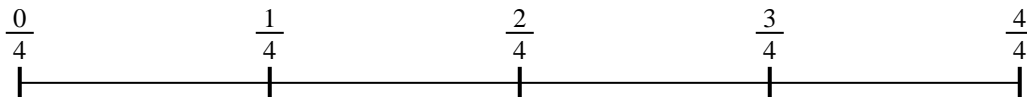
5. _____

6) $\frac{2}{3} \div 3$



6. _____

7) $\frac{2}{4} \div 4$



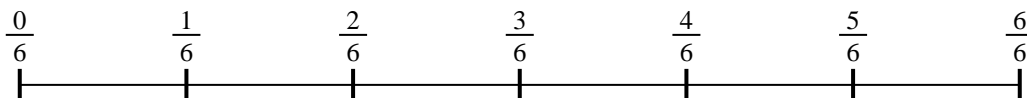
7. _____

8) $\frac{3}{5} \div 3$



8. _____

9) $\frac{3}{6} \div 6$

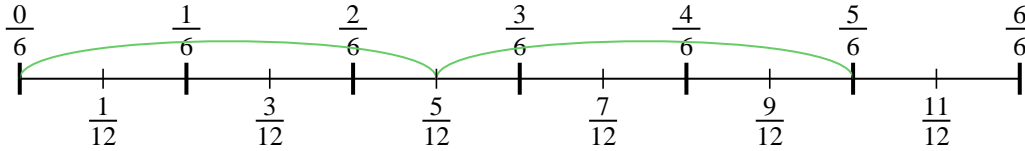


9. _____

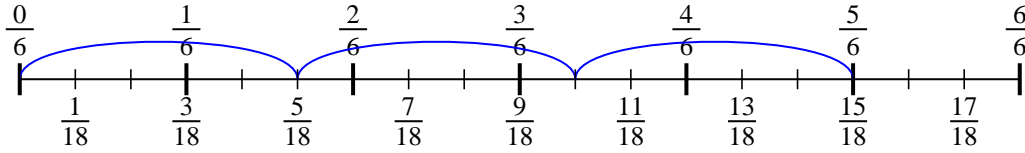


Usa la recta numérica para resolver cada problema. El primero ya está marcado como ejemplo.

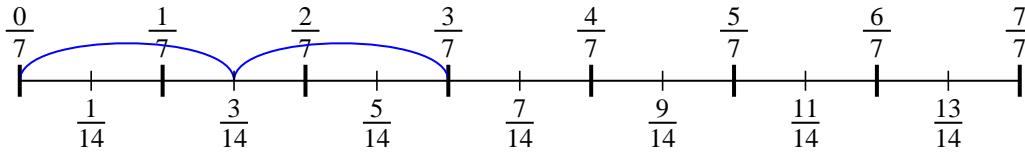
1) $\frac{5}{6} \div 2$



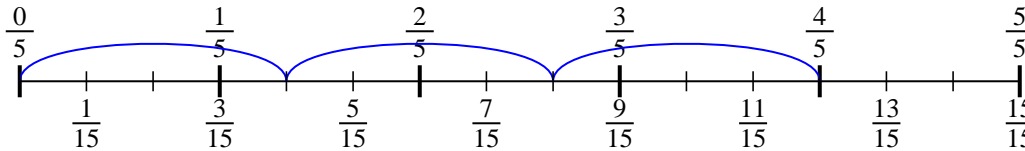
2) $\frac{5}{6} \div 3$



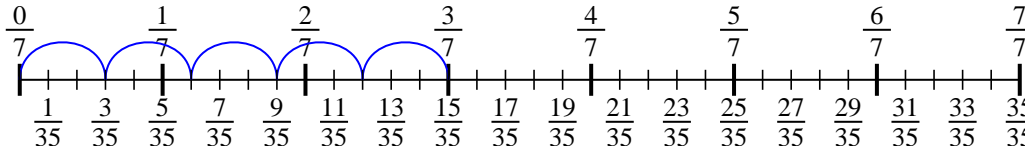
3) $\frac{3}{7} \div 2$



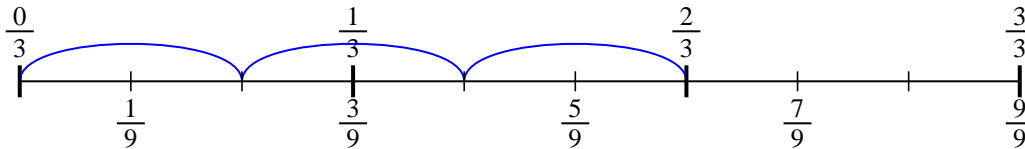
4) $\frac{4}{5} \div 3$



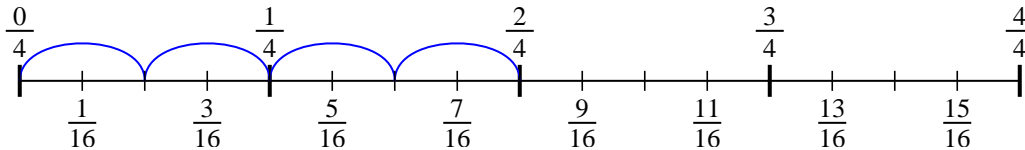
5) $\frac{3}{7} \div 5$



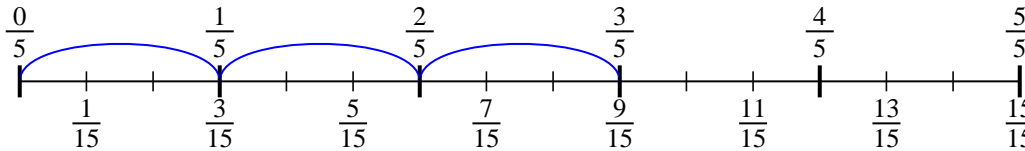
6) $\frac{2}{3} \div 3$



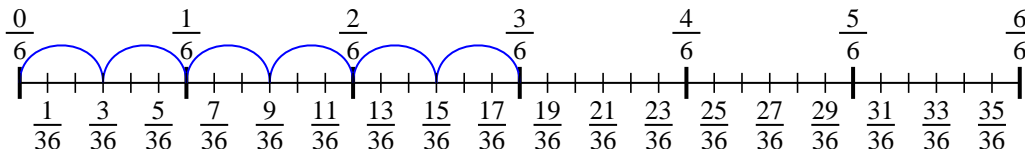
7) $\frac{2}{4} \div 4$



8) $\frac{3}{5} \div 3$



9) $\frac{3}{6} \div 6$

**Respuestas**

1. $\frac{5}{12}$

2. $\frac{5}{18}$

3. $\frac{3}{14}$

4. $\frac{4}{15}$

5. $\frac{3}{35}$

6. $\frac{2}{9}$

7. $\frac{2}{16}$

8. $\frac{3}{15}$

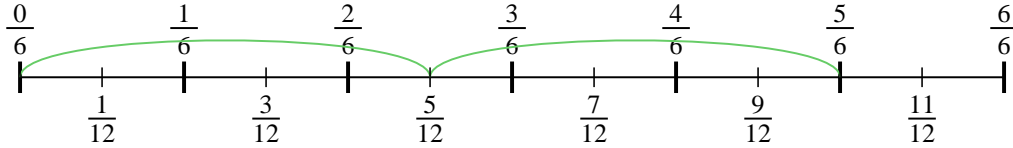
9. $\frac{3}{36}$



Usa la recta numérica para resolver cada problema. El primero ya está marcado como ejemplo.

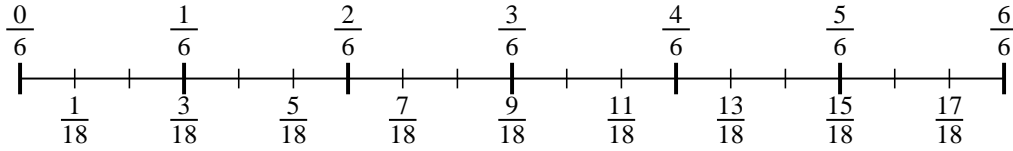
Respuestas

1) $\frac{5}{6} \div 2$



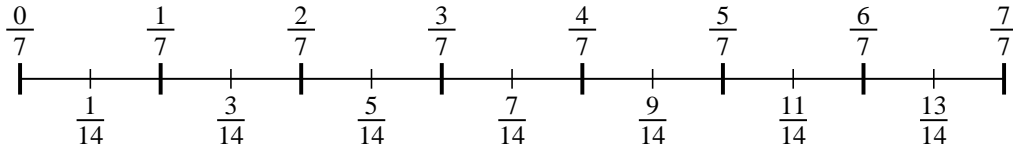
1. _____

2) $\frac{5}{6} \div 3$



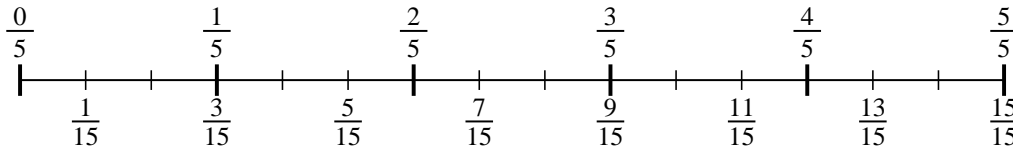
2. _____

3) $\frac{3}{7} \div 2$



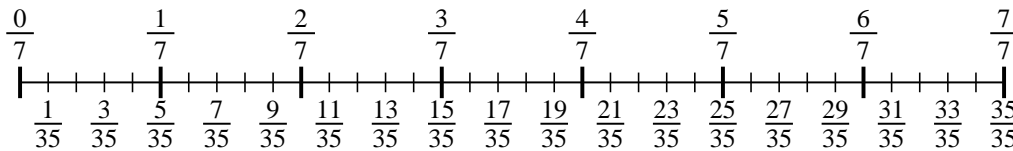
3. _____

4) $\frac{4}{5} \div 3$



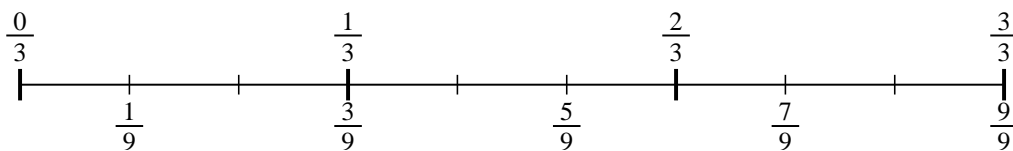
4. _____

5) $\frac{3}{7} \div 5$



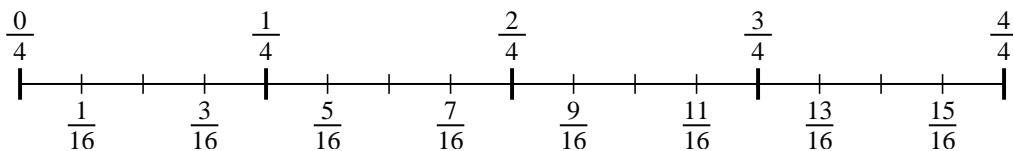
5. _____

6) $\frac{2}{3} \div 3$



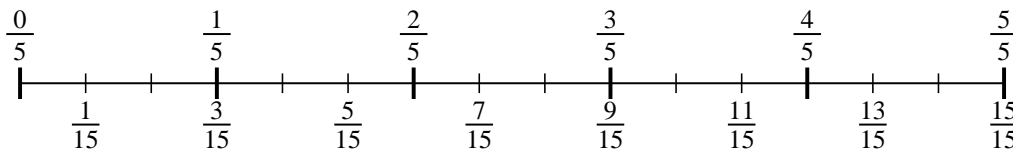
6. _____

7) $\frac{2}{4} \div 4$



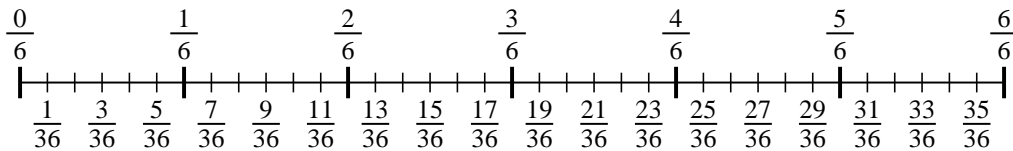
7. _____

8) $\frac{3}{5} \div 3$



8. _____

9) $\frac{3}{6} \div 6$



9. _____