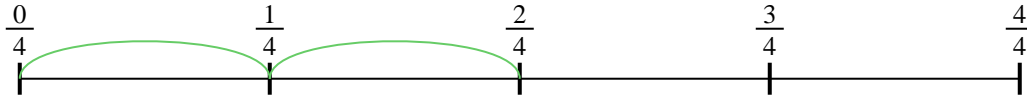




Usa la recta numérica para resolver cada problema. El primero ya está marcado como ejemplo.

**Respuestas**

1)  $\frac{2}{4} \div 2$



1. \_\_\_\_\_

2)  $\frac{2}{3} \div 3$



2. \_\_\_\_\_

3)  $\frac{2}{3} \div 4$




3. \_\_\_\_\_

4)  $\frac{6}{7} \div 2$



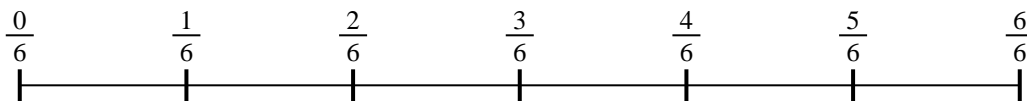
4. \_\_\_\_\_

5)  $\frac{3}{7} \div 3$



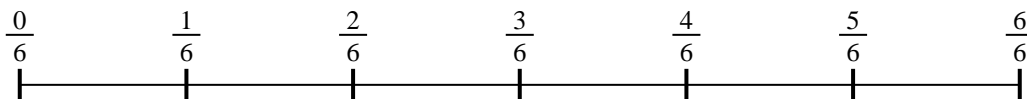
5. \_\_\_\_\_

6)  $\frac{4}{6} \div 5$



6. \_\_\_\_\_

7)  $\frac{4}{6} \div 4$




7. \_\_\_\_\_

8)  $\frac{4}{5} \div 3$



8. \_\_\_\_\_

9)  $\frac{3}{7} \div 4$

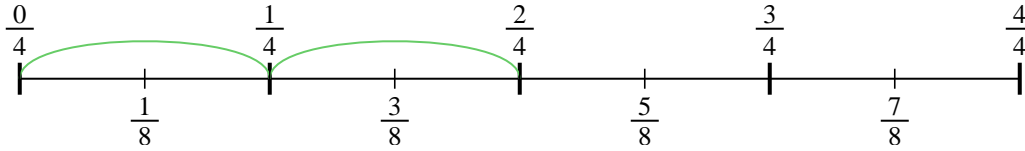


9. \_\_\_\_\_

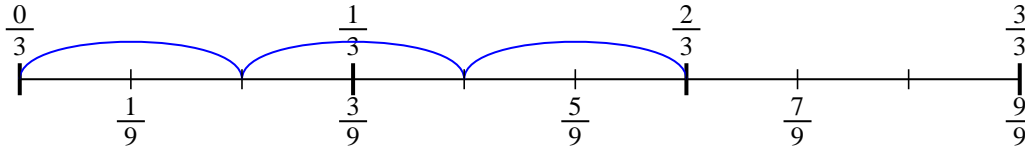


Usa la recta numérica para resolver cada problema. El primero ya está marcado como ejemplo.

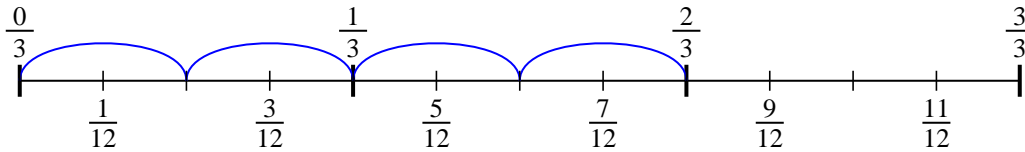
1)  $\frac{2}{4} \div 2$



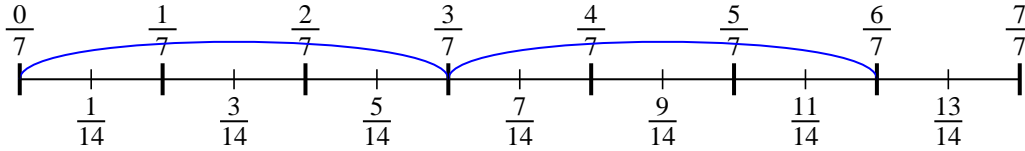
2)  $\frac{2}{3} \div 3$



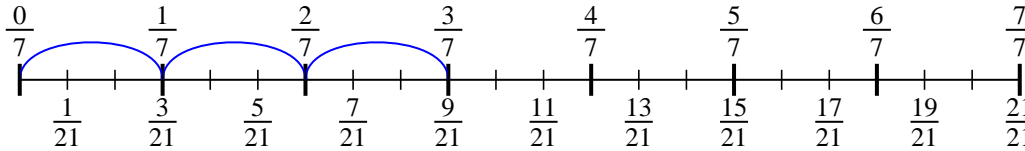
3)  $\frac{2}{3} \div 4$



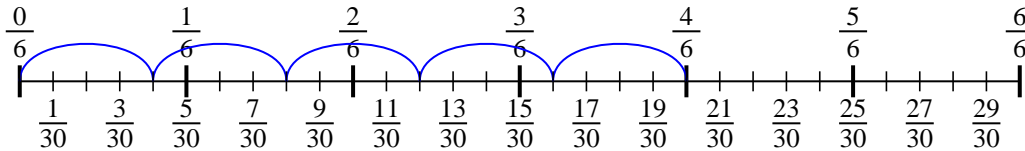
4)  $\frac{6}{7} \div 2$



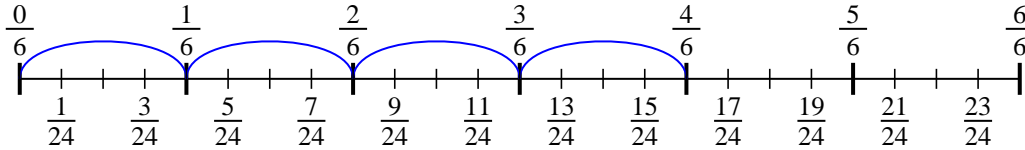
5)  $\frac{3}{7} \div 3$



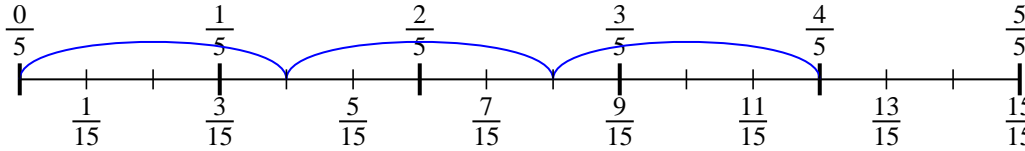
6)  $\frac{4}{6} \div 5$



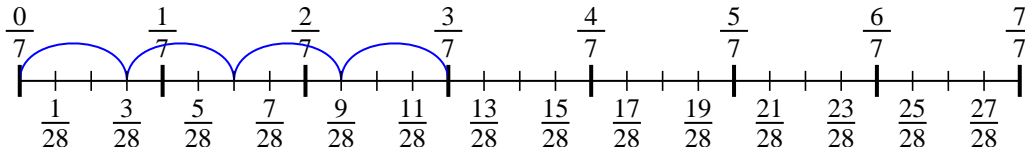
7)  $\frac{4}{6} \div 4$



8)  $\frac{4}{5} \div 3$



9)  $\frac{3}{7} \div 4$

**Respuestas**

1.  $\frac{2}{8}$

2.  $\frac{2}{9}$

3.  $\frac{2}{12}$

4.  $\frac{6}{14}$

5.  $\frac{3}{21}$

6.  $\frac{4}{30}$

7.  $\frac{4}{24}$

8.  $\frac{4}{15}$

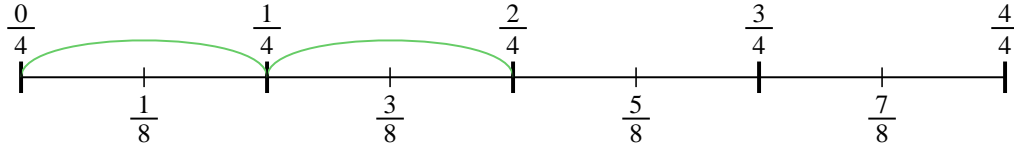
9.  $\frac{3}{28}$



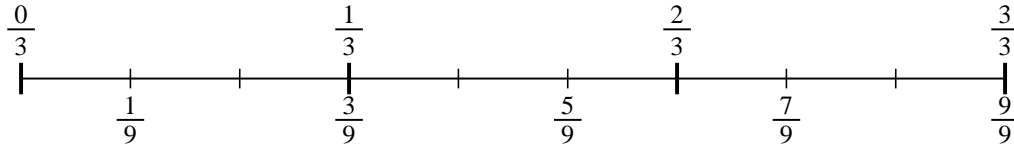
Usa la recta numérica para resolver cada problema. El primero ya está marcado como ejemplo.

**Respuestas**

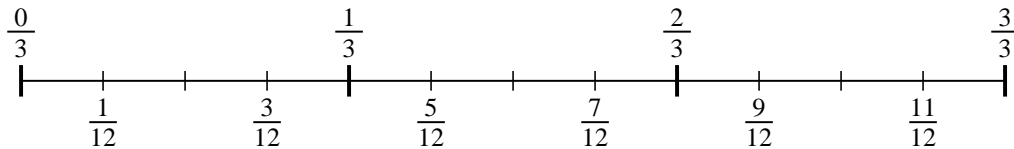
1)  $\frac{2}{4} \div 2$



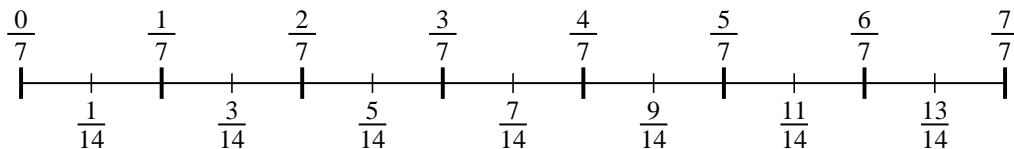
2)  $\frac{2}{3} \div 3$



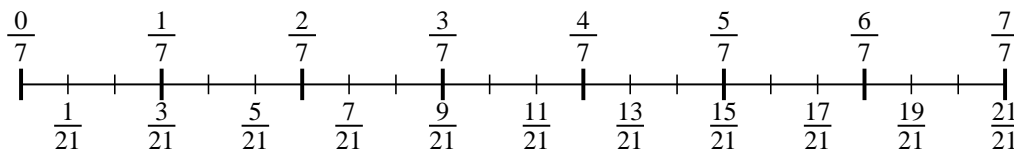
3)  $\frac{2}{3} \div 4$



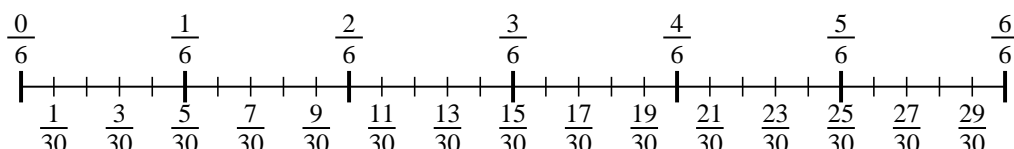
4)  $\frac{6}{7} \div 2$



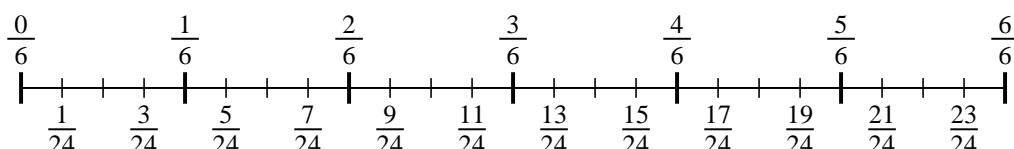
5)  $\frac{3}{7} \div 3$



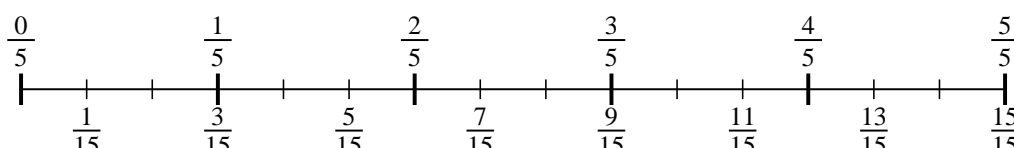
6)  $\frac{4}{6} \div 5$



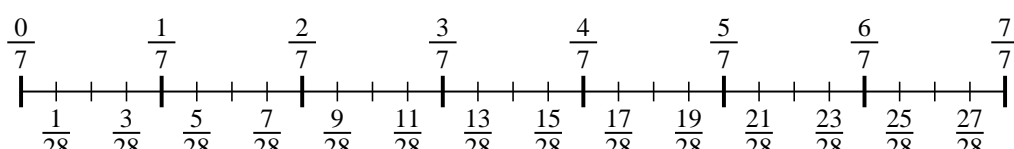
7)  $\frac{4}{6} \div 4$



8)  $\frac{4}{5} \div 3$



9)  $\frac{3}{7} \div 4$



1. \_\_\_\_\_
2. \_\_\_\_\_
3. \_\_\_\_\_
4. \_\_\_\_\_
5. \_\_\_\_\_
6. \_\_\_\_\_
7. \_\_\_\_\_
8. \_\_\_\_\_
9. \_\_\_\_\_