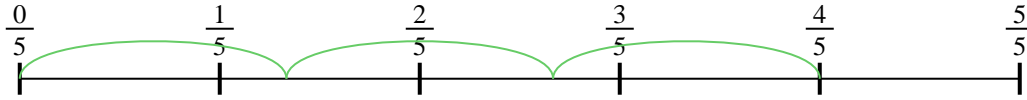




Usa la recta numérica para resolver cada problema. El primero ya está marcado como ejemplo.

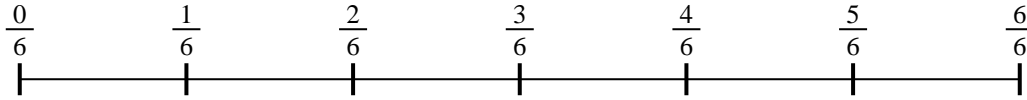
**Respuestas**

1)  $\frac{4}{5} \div 3$



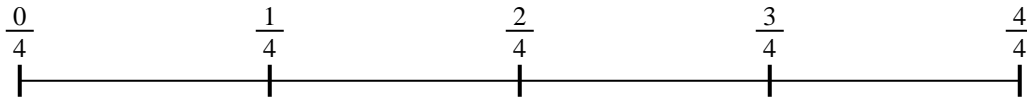
1. \_\_\_\_\_

2)  $\frac{3}{6} \div 3$



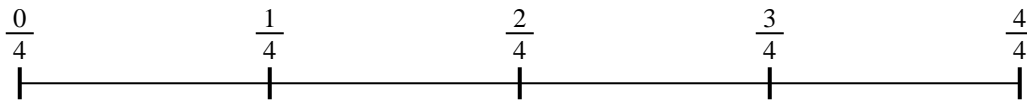
2. \_\_\_\_\_

3)  $\frac{2}{4} \div 5$




3. \_\_\_\_\_

4)  $\frac{3}{4} \div 2$



4. \_\_\_\_\_

5)  $\frac{2}{3} \div 4$




5. \_\_\_\_\_

6)  $\frac{5}{7} \div 5$



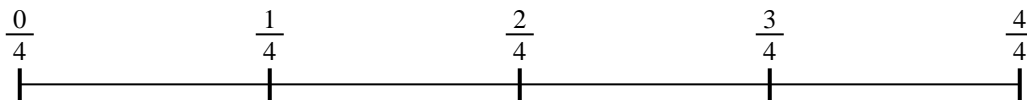
6. \_\_\_\_\_

7)  $\frac{2}{3} \div 3$



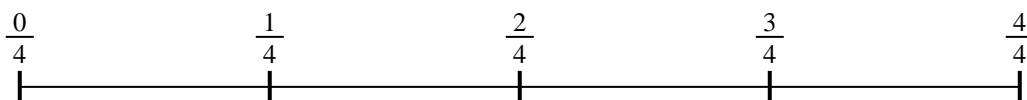
7. \_\_\_\_\_

8)  $\frac{3}{4} \div 5$



8. \_\_\_\_\_

9)  $\frac{3}{4} \div 6$

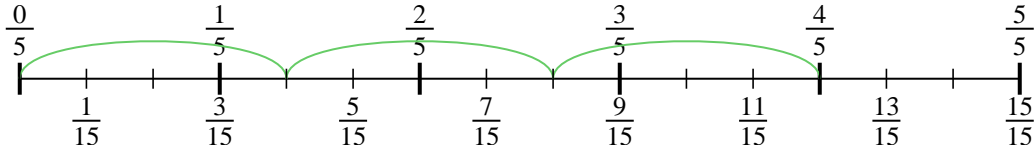


9. \_\_\_\_\_

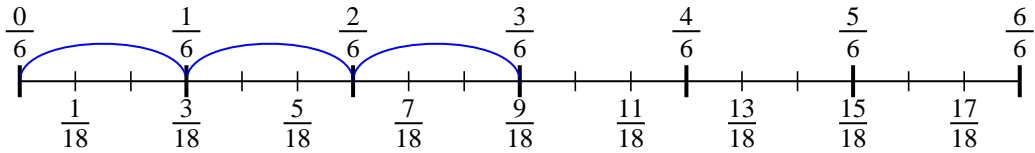


Usa la recta numérica para resolver cada problema. El primero ya está marcado como ejemplo.

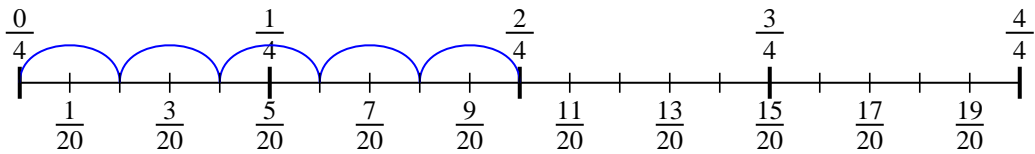
1)  $\frac{4}{5} \div 3$



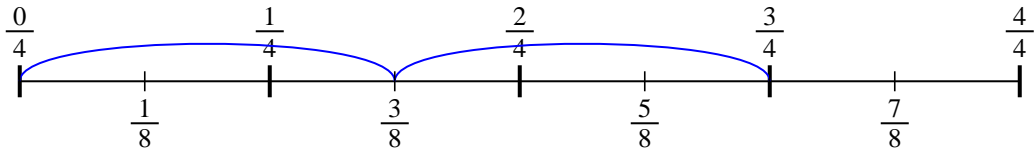
2)  $\frac{3}{6} \div 3$



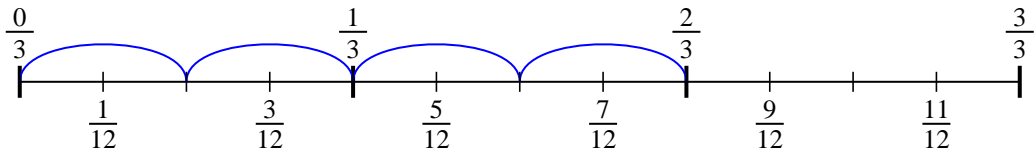
3)  $\frac{2}{4} \div 5$



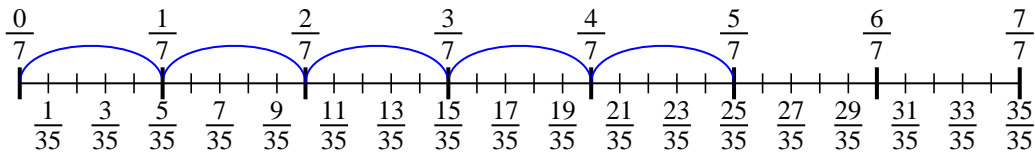
4)  $\frac{3}{4} \div 2$



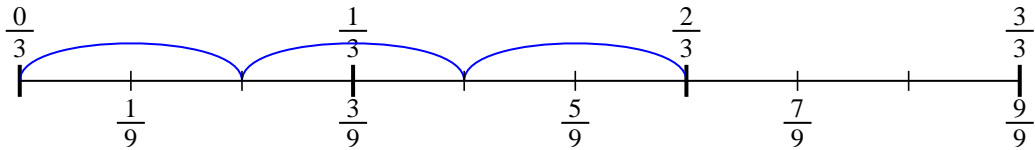
5)  $\frac{2}{3} \div 4$



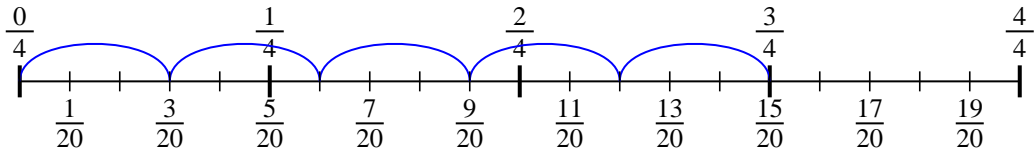
6)  $\frac{5}{7} \div 5$



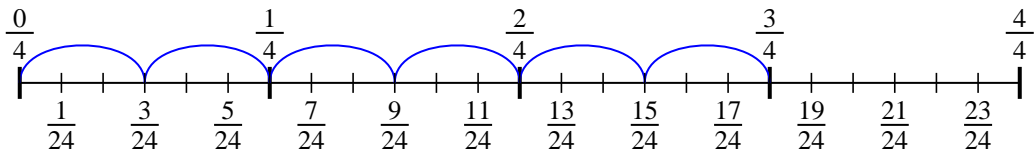
7)  $\frac{2}{3} \div 3$



8)  $\frac{3}{4} \div 5$



9)  $\frac{3}{4} \div 6$



**Respuestas**

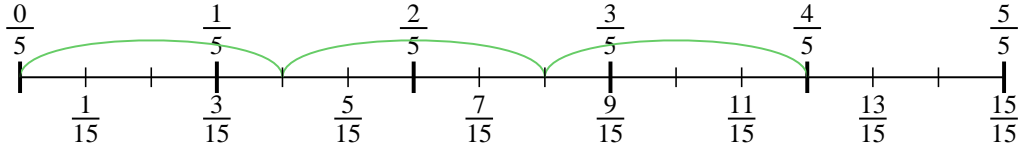
1.  $\frac{4}{15}$
2.  $\frac{3}{18}$
3.  $\frac{2}{20}$
4.  $\frac{3}{8}$
5.  $\frac{2}{12}$
6.  $\frac{5}{35}$
7.  $\frac{2}{9}$
8.  $\frac{3}{20}$
9.  $\frac{3}{24}$



Usa la recta numérica para resolver cada problema. El primero ya está marcado como ejemplo.

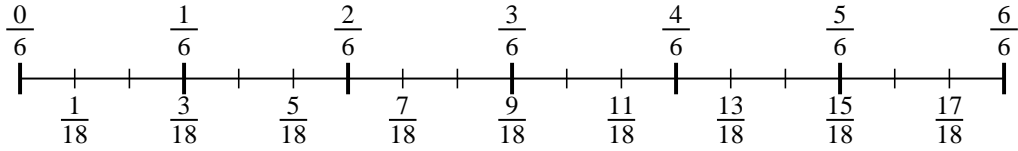
**Respuestas**

1)  $\frac{4}{5} \div 3$



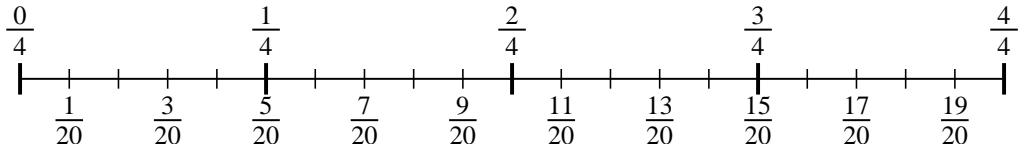
1. \_\_\_\_\_

2)  $\frac{3}{6} \div 3$



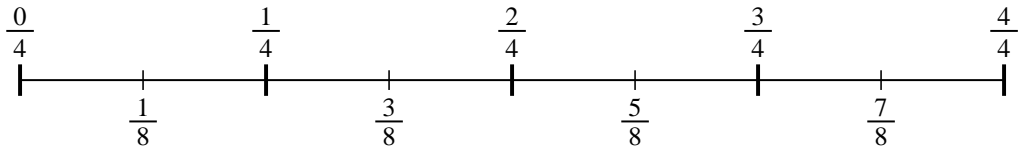
2. \_\_\_\_\_

3)  $\frac{2}{4} \div 5$



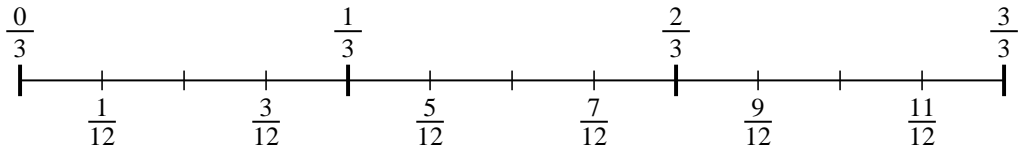
3. \_\_\_\_\_

4)  $\frac{3}{4} \div 2$



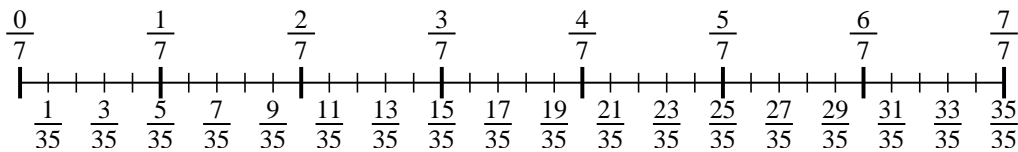
4. \_\_\_\_\_

5)  $\frac{2}{3} \div 4$



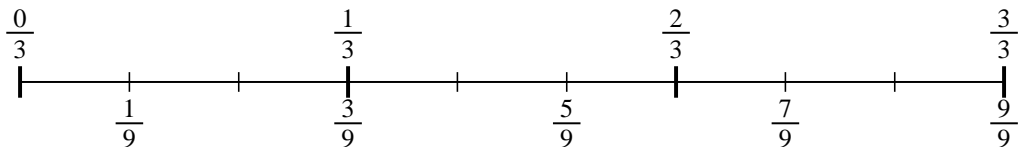
5. \_\_\_\_\_

6)  $\frac{5}{7} \div 5$



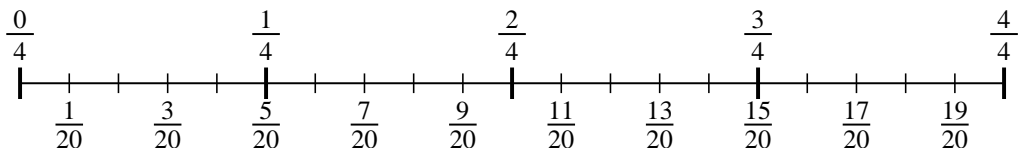
6. \_\_\_\_\_

7)  $\frac{2}{3} \div 3$



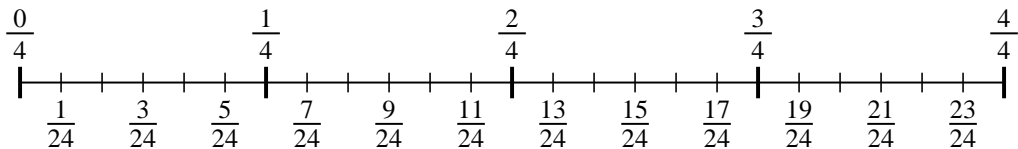
7. \_\_\_\_\_

8)  $\frac{3}{4} \div 5$



8. \_\_\_\_\_

9)  $\frac{3}{4} \div 6$



9. \_\_\_\_\_