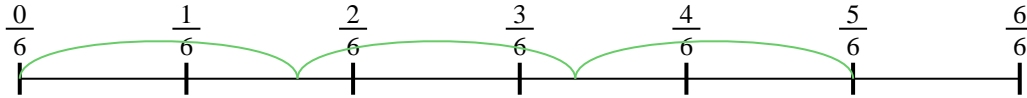




Usa la recta numérica para resolver cada problema. El primero ya está marcado como ejemplo.

**Respuestas**

1)  $\frac{5}{6} \div 3$




1. \_\_\_\_\_

2)  $\frac{2}{3} \div 3$



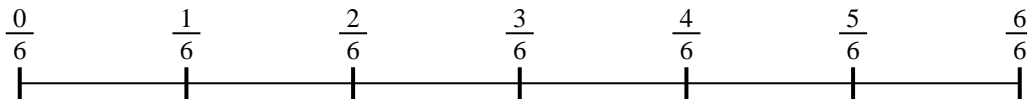
2. \_\_\_\_\_

3)  $\frac{2}{3} \div 2$




3. \_\_\_\_\_

4)  $\frac{4}{6} \div 3$



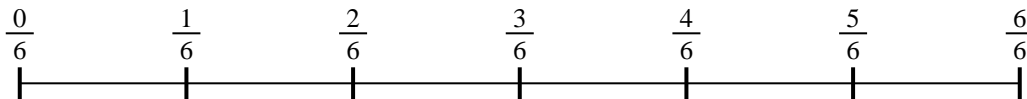
4. \_\_\_\_\_

5)  $\frac{6}{7} \div 4$




5. \_\_\_\_\_

6)  $\frac{3}{6} \div 4$



6. \_\_\_\_\_

7)  $\frac{2}{7} \div 6$




7. \_\_\_\_\_

8)  $\frac{2}{5} \div 5$



8. \_\_\_\_\_

9)  $\frac{6}{7} \div 2$

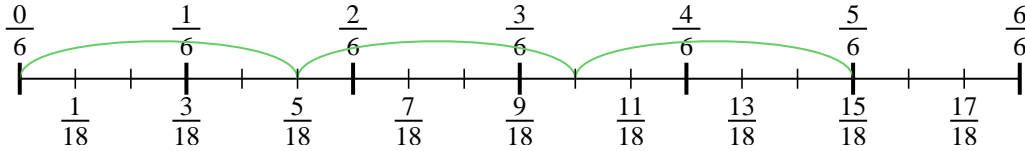


9. \_\_\_\_\_

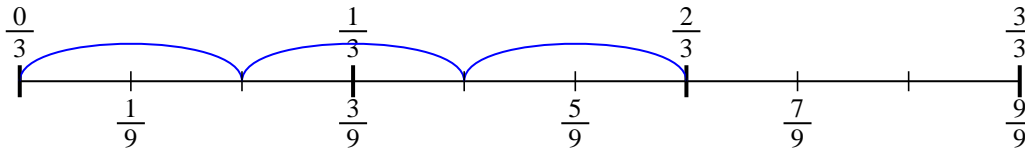


Usa la recta numérica para resolver cada problema. El primero ya está marcado como ejemplo.

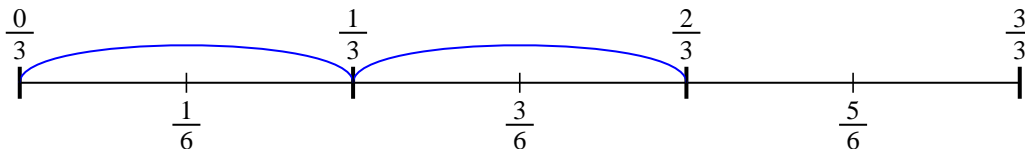
1)  $\frac{5}{6} \div 3$



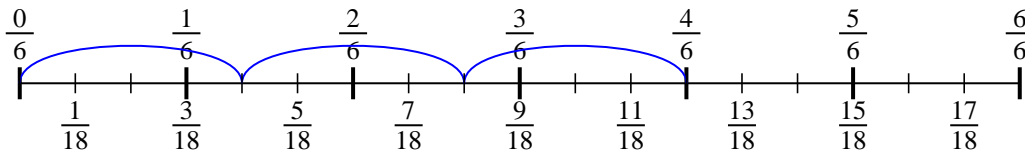
2)  $\frac{2}{3} \div 3$



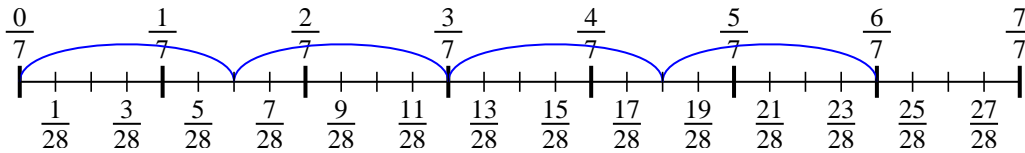
3)  $\frac{2}{3} \div 2$



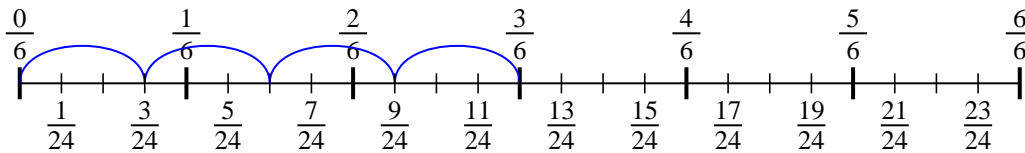
4)  $\frac{4}{6} \div 3$



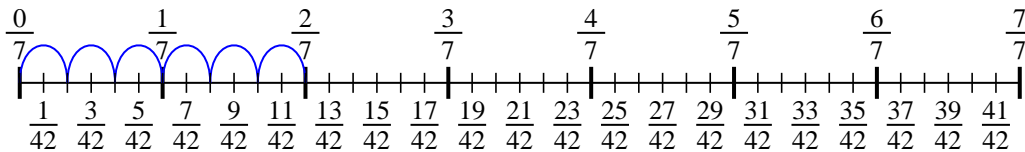
5)  $\frac{6}{7} \div 4$



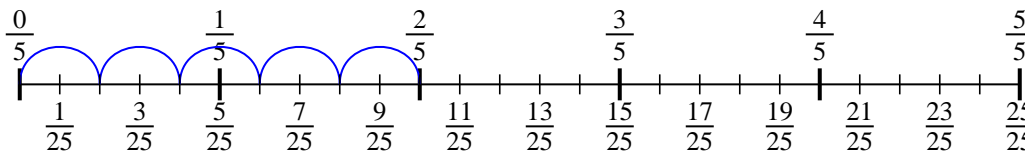
6)  $\frac{3}{6} \div 4$



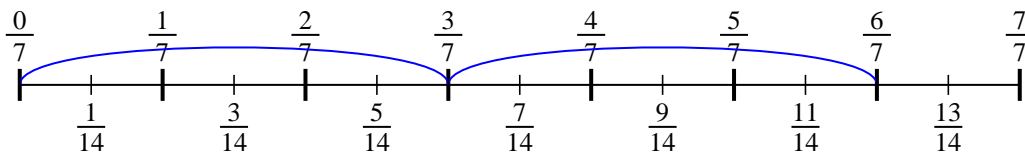
7)  $\frac{2}{7} \div 6$



8)  $\frac{2}{5} \div 5$



9)  $\frac{6}{7} \div 2$



**Respuestas**

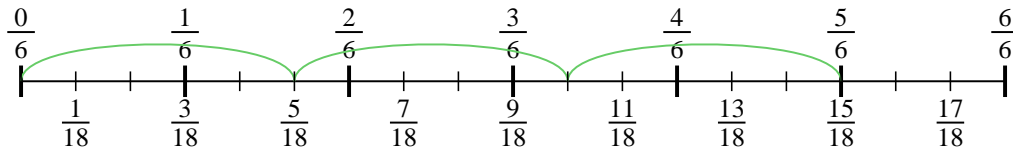
1.  $\frac{5}{18}$
2.  $\frac{2}{9}$
3.  $\frac{2}{6}$
4.  $\frac{4}{18}$
5.  $\frac{6}{28}$
6.  $\frac{3}{24}$
7.  $\frac{2}{42}$
8.  $\frac{2}{25}$
9.  $\frac{6}{14}$



Usa la recta numérica para resolver cada problema. El primero ya está marcado como ejemplo.

**Respuestas**

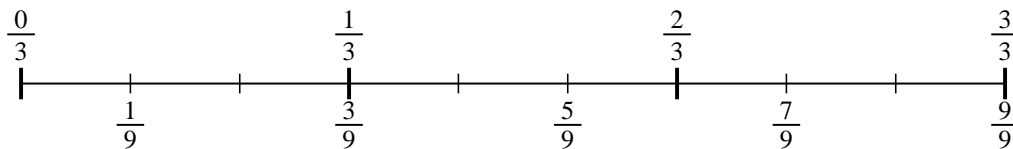
1)  $\frac{5}{6} \div 3$



1. \_\_\_\_\_

2. \_\_\_\_\_

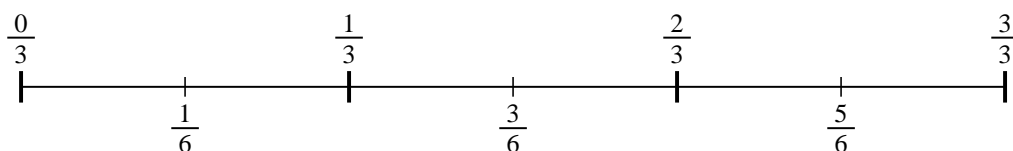
2)  $\frac{2}{3} \div 3$



3. \_\_\_\_\_

4. \_\_\_\_\_

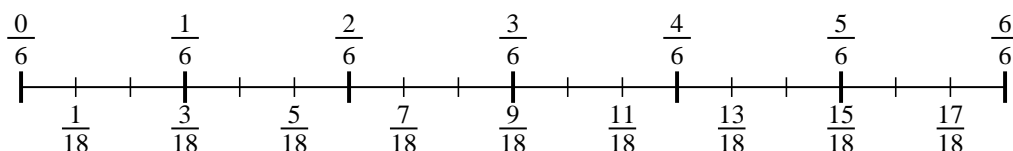
3)  $\frac{2}{3} \div 2$



5. \_\_\_\_\_

6. \_\_\_\_\_

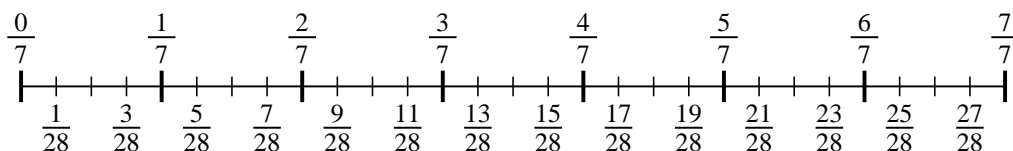
4)  $\frac{4}{6} \div 3$



7. \_\_\_\_\_

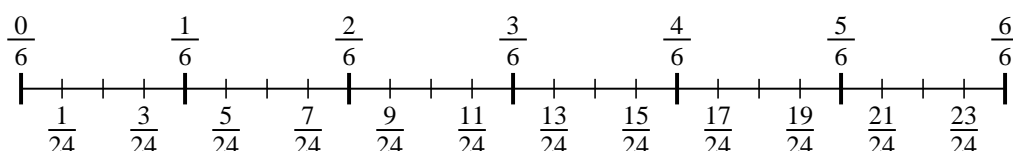
8. \_\_\_\_\_

5)  $\frac{6}{7} \div 4$

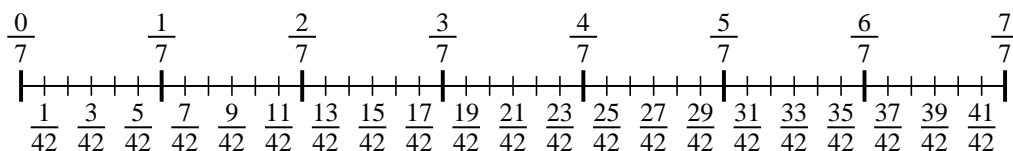


9. \_\_\_\_\_

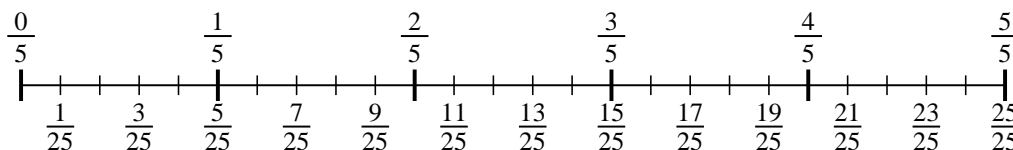
6)  $\frac{3}{6} \div 4$



7)  $\frac{2}{7} \div 6$



8)  $\frac{2}{5} \div 5$



9)  $\frac{6}{7} \div 2$

