




Usa la recta numérica para resolver cada problema. El primero ya está marcado como ejemplo.


Respuestas

1) $\frac{3}{5} \div 2$




1. _____

2) $\frac{4}{7} \div 5$



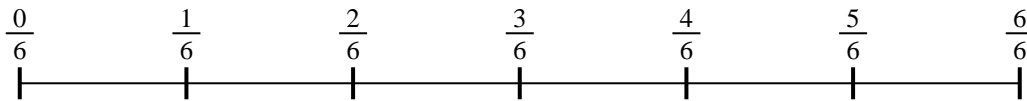
2. _____

3) $\frac{2}{5} \div 4$



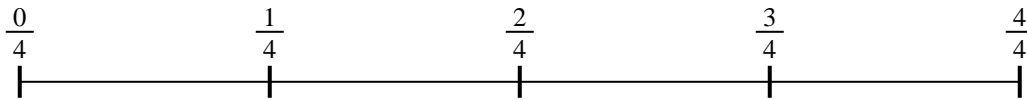
3. _____

4) $\frac{3}{6} \div 5$



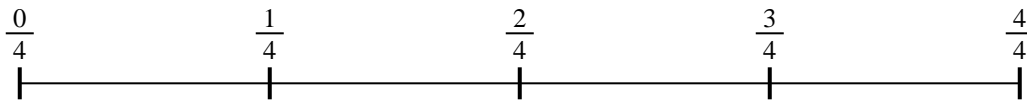
4. _____

5) $\frac{3}{4} \div 6$



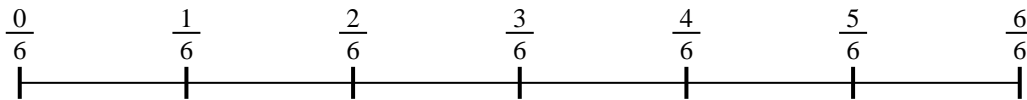
5. _____

6) $\frac{2}{4} \div 2$



6. _____

7) $\frac{4}{6} \div 6$



7. _____

8) $\frac{5}{7} \div 6$



8. _____

9) $\frac{5}{7} \div 2$

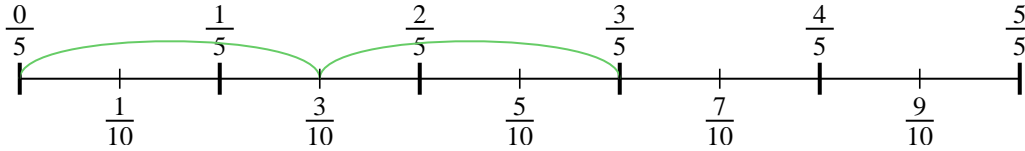


9. _____

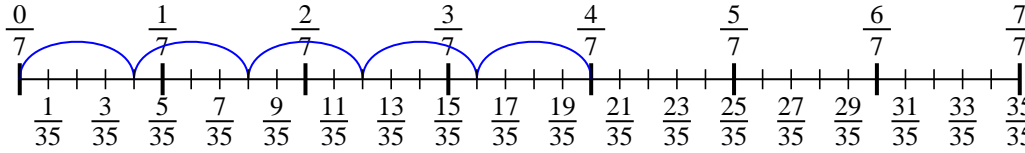


Usa la recta numérica para resolver cada problema. El primero ya está marcado como ejemplo.

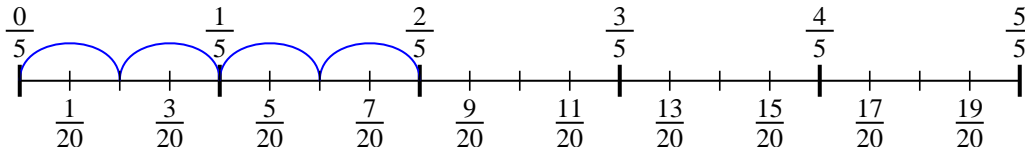
1) $\frac{3}{5} \div 2$



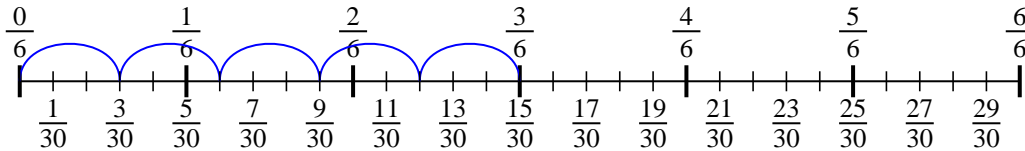
2) $\frac{4}{7} \div 5$



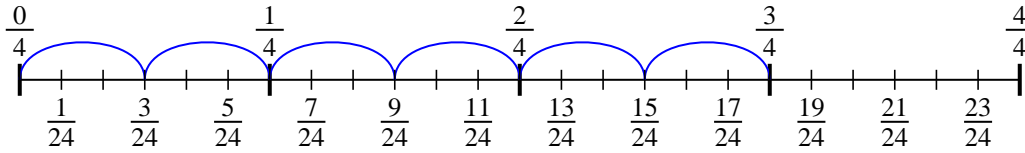
3) $\frac{2}{5} \div 4$



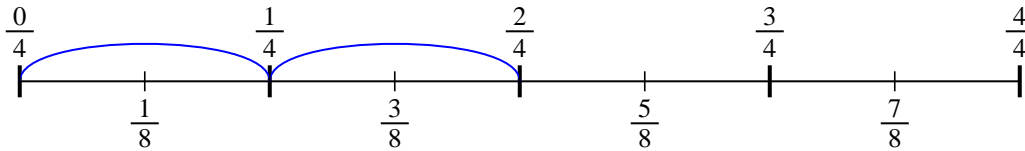
4) $\frac{3}{6} \div 5$



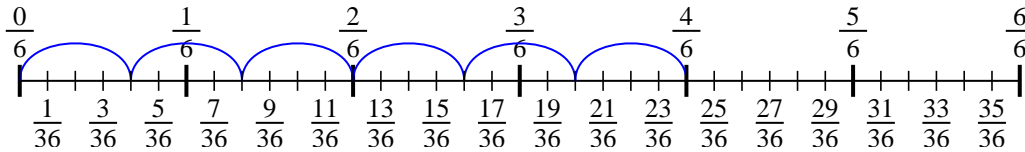
5) $\frac{3}{4} \div 6$



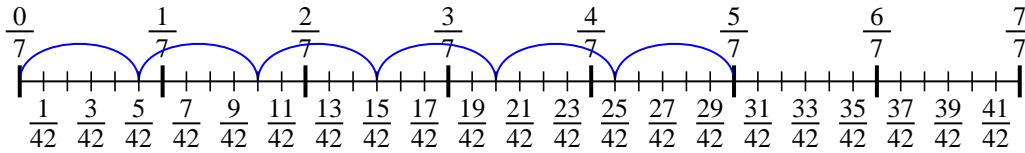
6) $\frac{2}{4} \div 2$



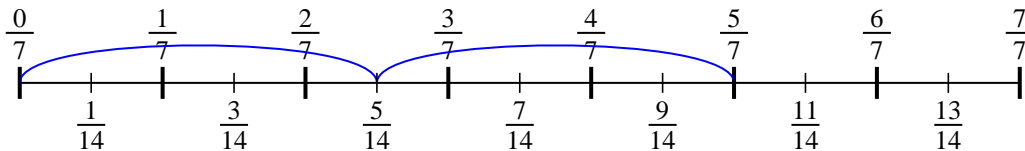
7) $\frac{4}{6} \div 6$



8) $\frac{5}{7} \div 6$



9) $\frac{5}{7} \div 2$

**Respuestas**

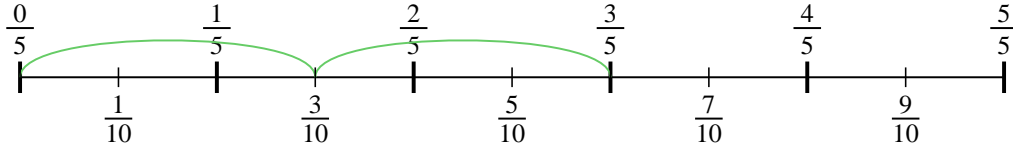
1. $\frac{3}{10}$
2. $\frac{4}{35}$
3. $\frac{2}{20}$
4. $\frac{3}{30}$
5. $\frac{3}{24}$
6. $\frac{2}{8}$
7. $\frac{4}{36}$
8. $\frac{5}{42}$
9. $\frac{5}{14}$



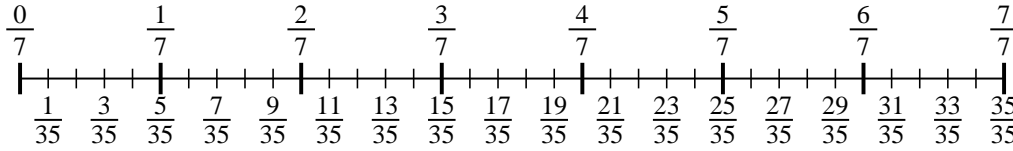
Usa la recta numérica para resolver cada problema. El primero ya está marcado como ejemplo.

Respuestas

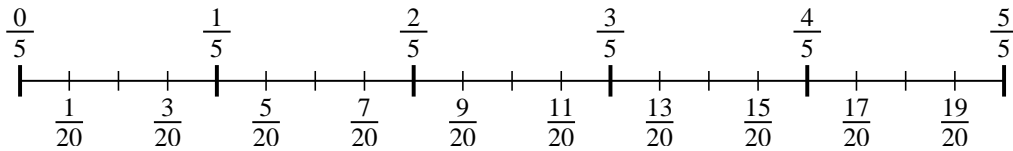
1) $\frac{3}{5} \div 2$



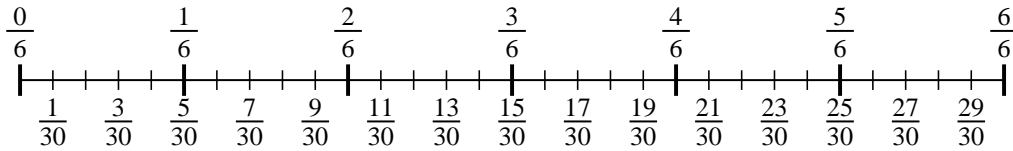
2) $\frac{4}{7} \div 5$



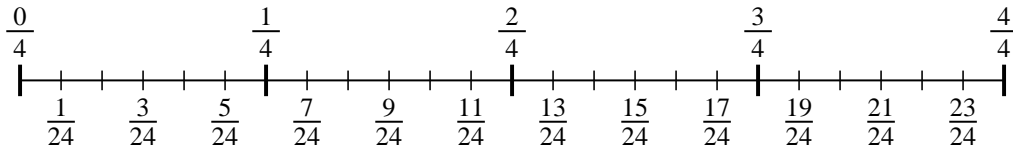
3) $\frac{2}{5} \div 4$



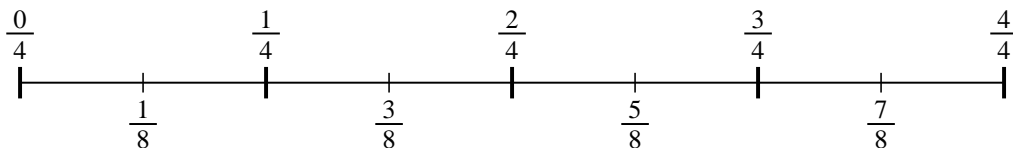
4) $\frac{3}{6} \div 5$



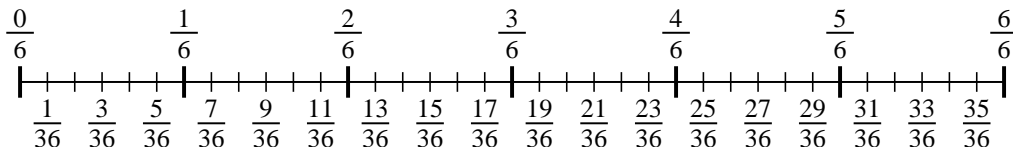
5) $\frac{3}{4} \div 6$



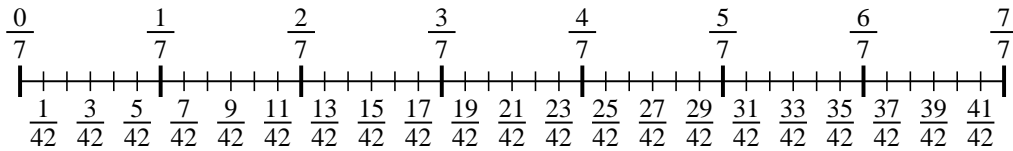
6) $\frac{2}{4} \div 2$



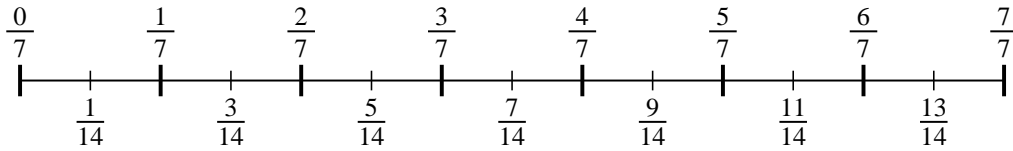
7) $\frac{4}{6} \div 6$



8) $\frac{5}{7} \div 6$



9) $\frac{5}{7} \div 2$



1. _____
2. _____
3. _____
4. _____
5. _____
6. _____
7. _____
8. _____
9. _____