


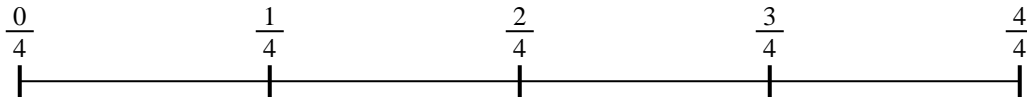


Usa la línea numérica para resolver cada problema. El primero ya está hecho como ejemplo


1) $\frac{1}{5} \div 4$



2) $\frac{1}{4} \div 2$



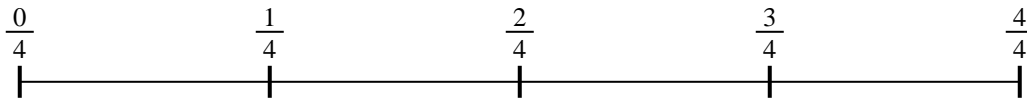
3) $\frac{1}{5} \div 2$



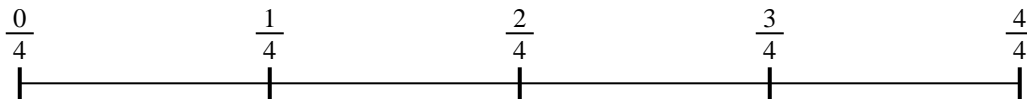
4) $\frac{1}{7} \div 6$




5) $\frac{1}{4} \div 5$



6) $\frac{1}{4} \div 5$



7) $\frac{1}{7} \div 4$



8) $\frac{1}{5} \div 6$



9) $\frac{1}{7} \div 5$

**Respuestas**

1. _____

2. _____

3. _____

4. _____

5. _____

6. _____

7. _____

8. _____

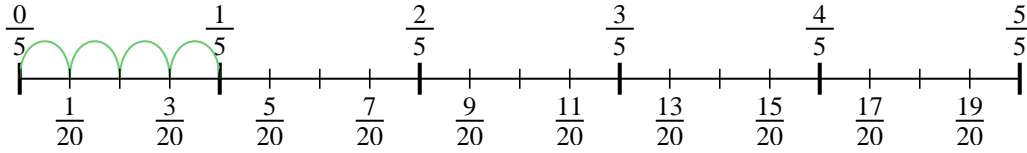
9. _____



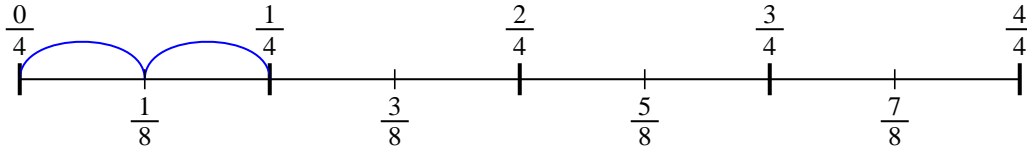
Usa la línea numérica para resolver cada problema. El primero ya está hecho como

ejemplo

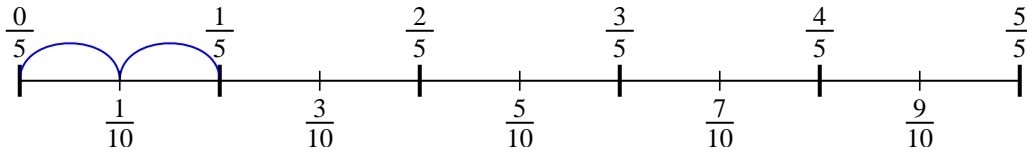
1) $\frac{1}{5} \div 4$



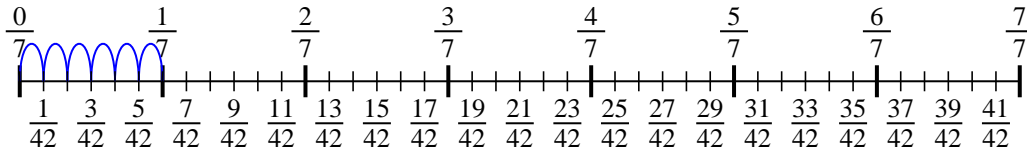
2) $\frac{1}{4} \div 2$



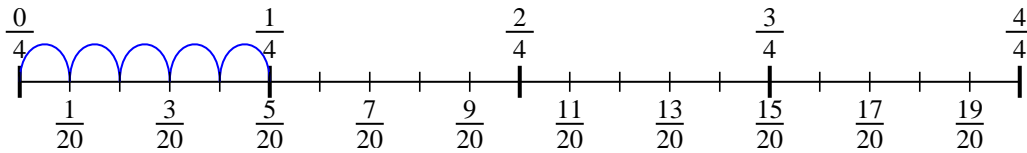
3) $\frac{1}{5} \div 2$



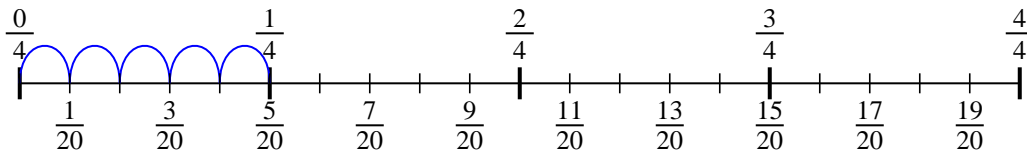
4) $\frac{1}{7} \div 6$



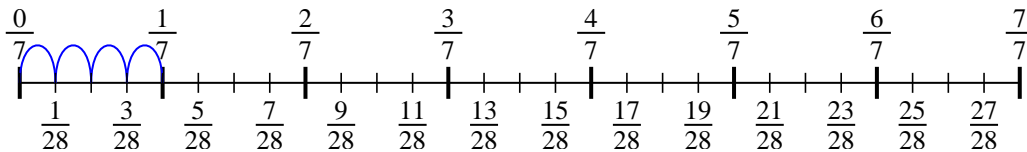
5) $\frac{1}{4} \div 5$



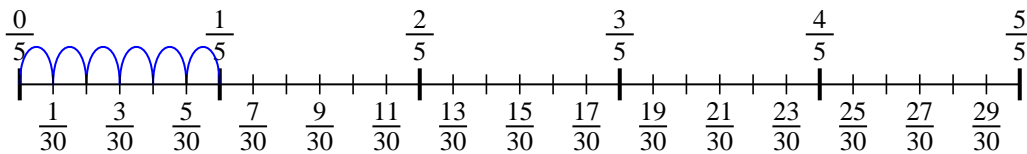
6) $\frac{1}{4} \div 5$



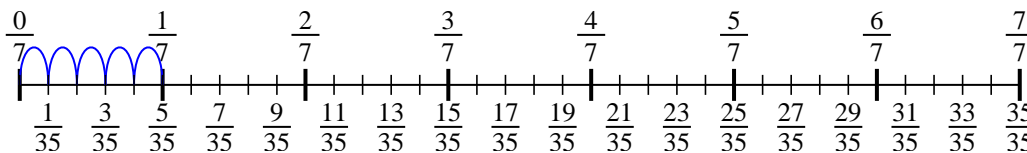
7) $\frac{1}{7} \div 4$



8) $\frac{1}{5} \div 6$



9) $\frac{1}{7} \div 5$



Respuestas

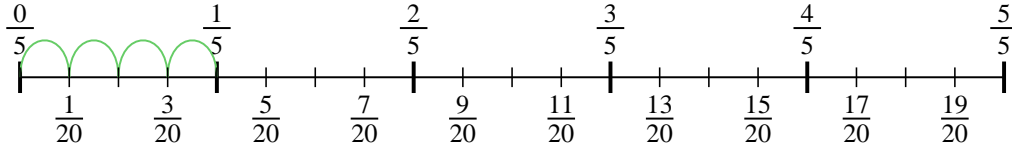
1. $\frac{1}{20}$
2. $\frac{1}{8}$
3. $\frac{1}{10}$
4. $\frac{1}{42}$
5. $\frac{1}{20}$
6. $\frac{1}{20}$
7. $\frac{1}{28}$
8. $\frac{1}{30}$
9. $\frac{1}{35}$



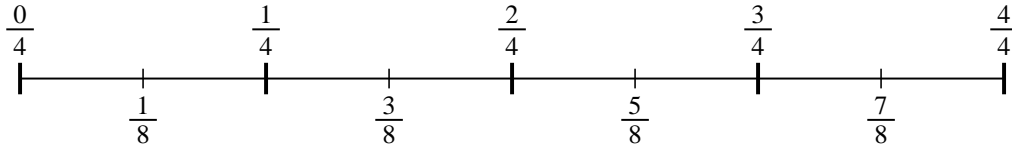
Usa la línea numérica para resolver cada problema. El primero ya está hecho como ejemplo

ejemplo

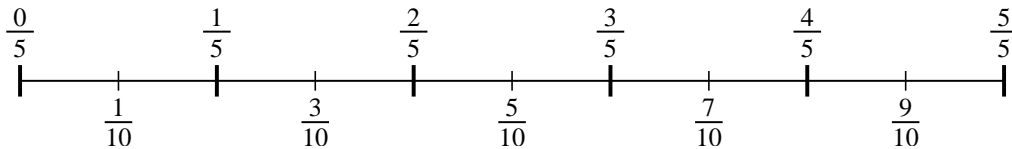
1) $\frac{1}{5} \div 4$



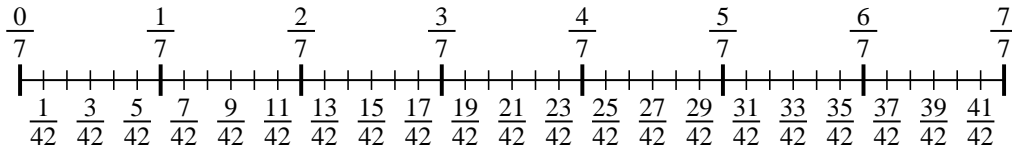
2) $\frac{1}{4} \div 2$



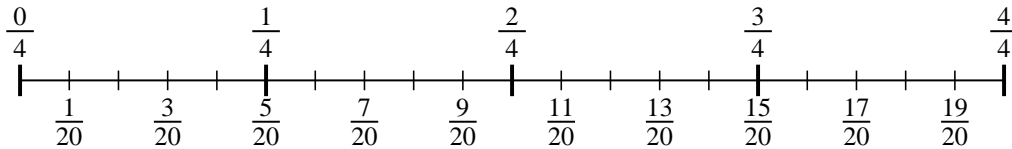
3) $\frac{1}{5} \div 2$



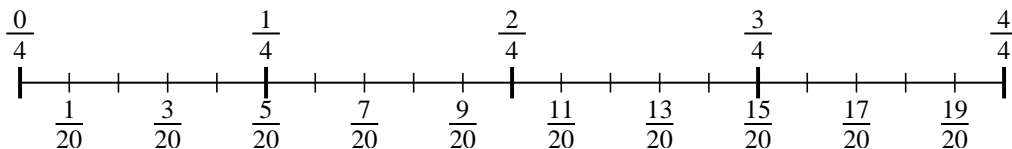
4) $\frac{1}{7} \div 6$



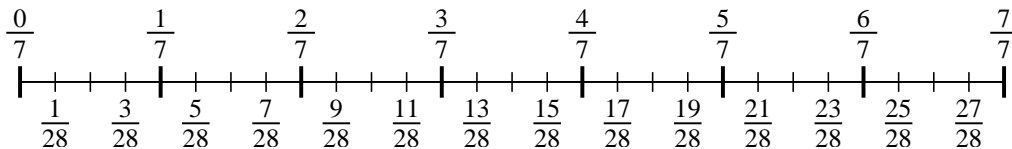
5) $\frac{1}{4} \div 5$



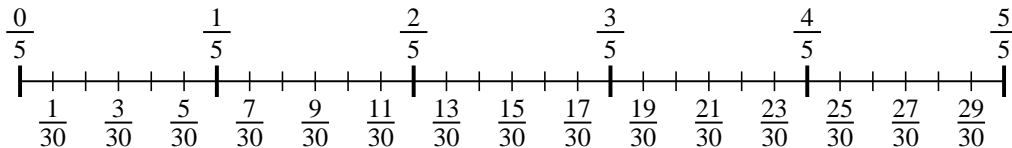
6) $\frac{1}{4} \div 5$



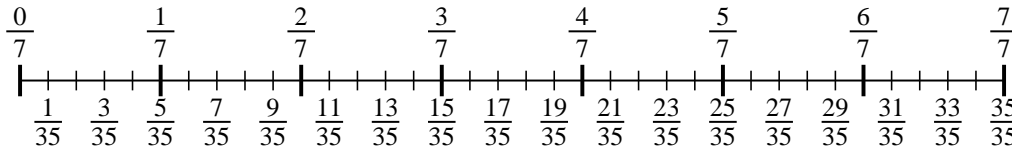
7) $\frac{1}{7} \div 4$



8) $\frac{1}{5} \div 6$



9) $\frac{1}{7} \div 5$



Respuestas

1. _____
2. _____
3. _____
4. _____
5. _____
6. _____
7. _____
8. _____
9. _____