




Usa la línea numérica para resolver cada problema. El primero ya está hecho como ejemplo

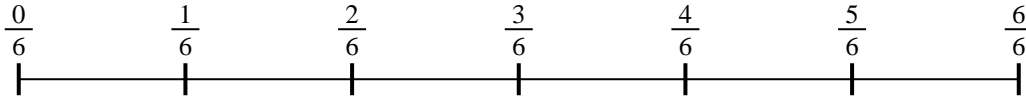
Respuestas

1) $\frac{1}{7} \div 5$




1. _____

2) $\frac{1}{6} \div 5$




2. _____

3) $\frac{1}{7} \div 6$




3. _____

4) $\frac{1}{7} \div 4$



4. _____

5) $\frac{1}{3} \div 4$




5. _____

6) $\frac{1}{3} \div 4$



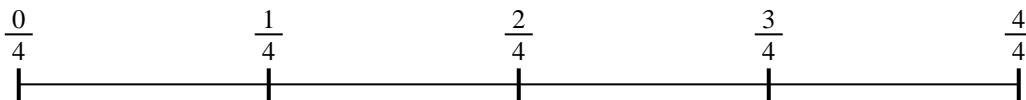
6. _____

7) $\frac{1}{5} \div 5$



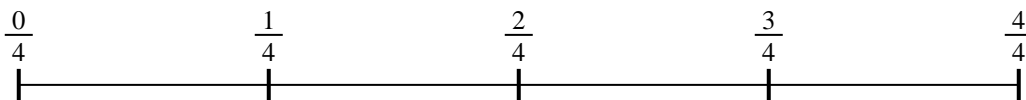
7. _____

8) $\frac{1}{4} \div 6$



8. _____

9) $\frac{1}{4} \div 4$



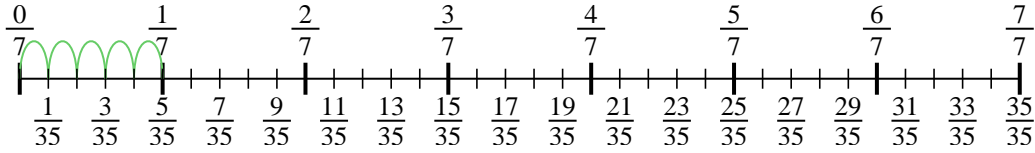
9. _____



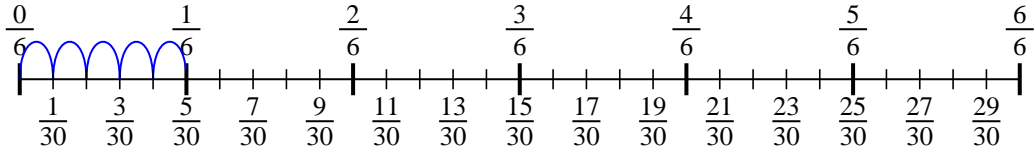
Usa la línea numérica para resolver cada problema. El primero ya está hecho como

ejemplo

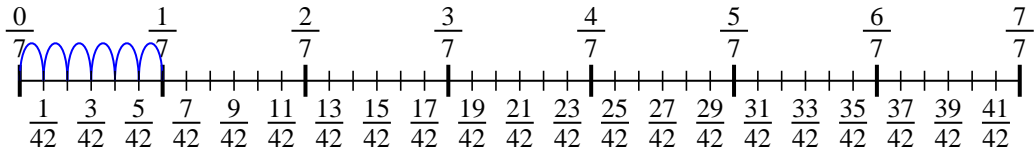
1) $\frac{1}{7} \div 5$



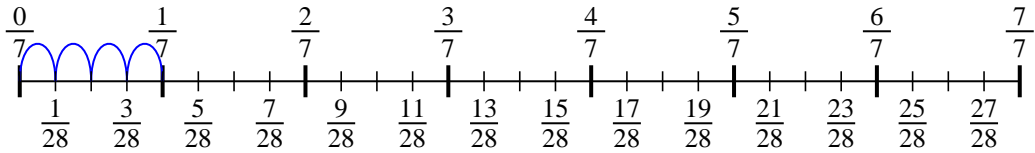
2) $\frac{1}{6} \div 5$



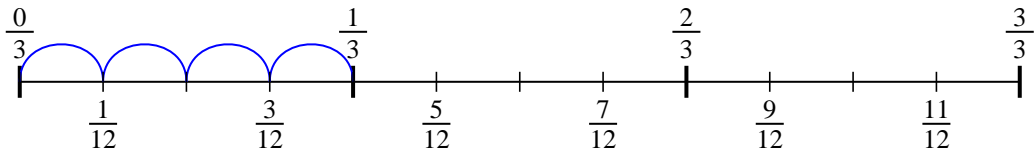
3) $\frac{1}{7} \div 6$



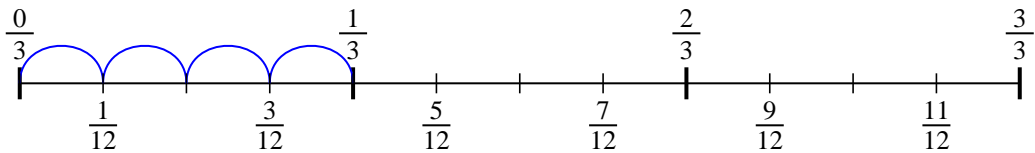
4) $\frac{1}{7} \div 4$



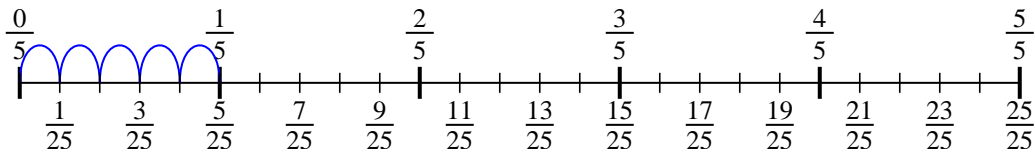
5) $\frac{1}{3} \div 4$



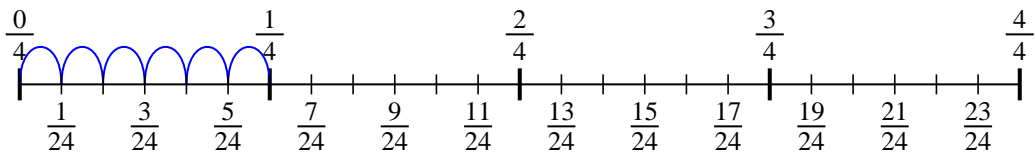
6) $\frac{1}{3} \div 4$



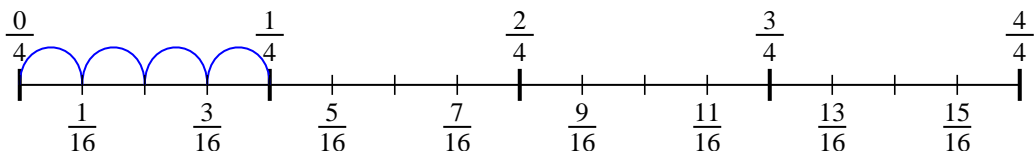
7) $\frac{1}{5} \div 5$



8) $\frac{1}{4} \div 6$



9) $\frac{1}{4} \div 4$



Respuestas

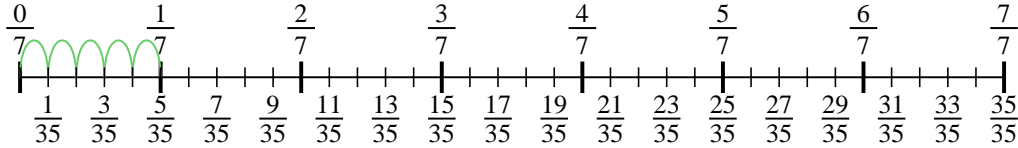
1. $\frac{1}{35}$
2. $\frac{1}{30}$
3. $\frac{1}{42}$
4. $\frac{1}{28}$
5. $\frac{1}{12}$
6. $\frac{1}{12}$
7. $\frac{1}{25}$
8. $\frac{1}{24}$
9. $\frac{1}{16}$



Usa la línea numérica para resolver cada problema. El primero ya está hecho como ejemplo

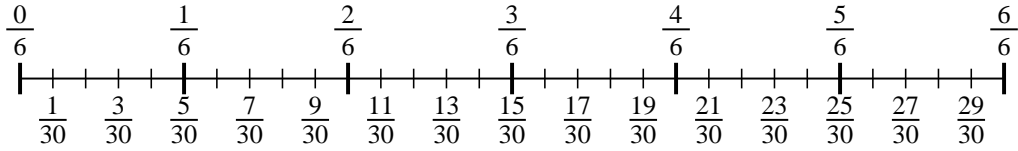
Respuestas

1) $\frac{1}{7} \div 5$



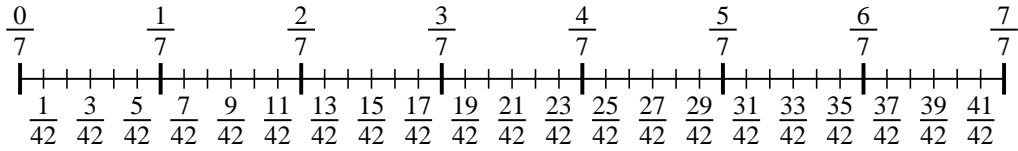
1. _____

2) $\frac{1}{6} \div 5$



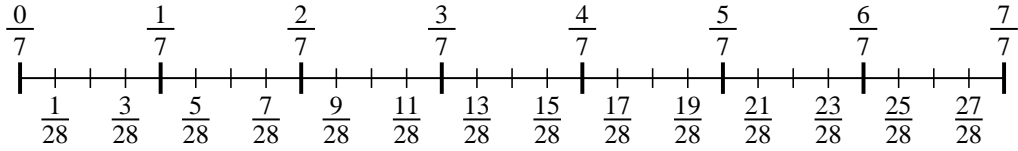
2. _____

3) $\frac{1}{7} \div 6$



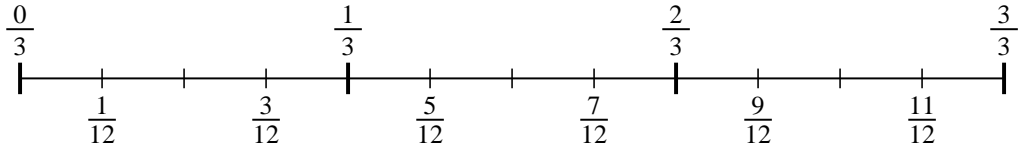
3. _____

4) $\frac{1}{7} \div 4$



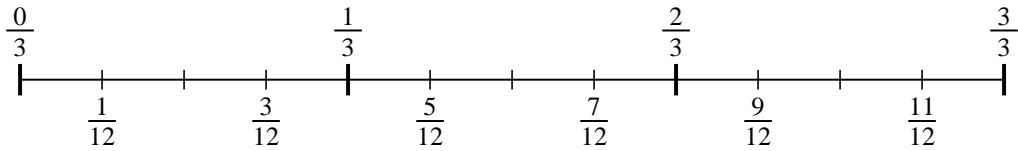
4. _____

5) $\frac{1}{3} \div 4$



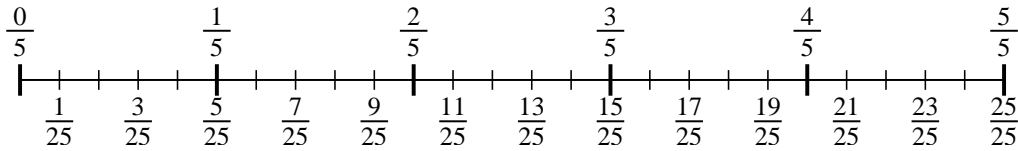
5. _____

6) $\frac{1}{3} \div 4$



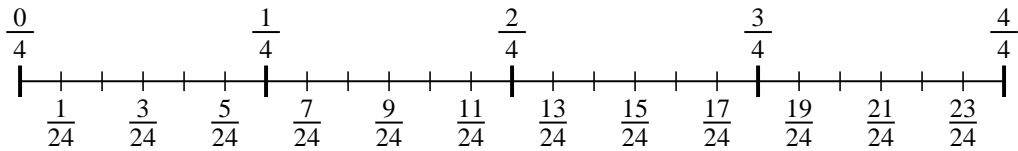
6. _____

7) $\frac{1}{5} \div 5$



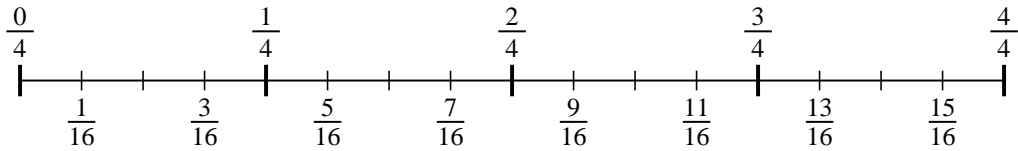
7. _____

8) $\frac{1}{4} \div 6$



8. _____

9) $\frac{1}{4} \div 4$



9. _____