




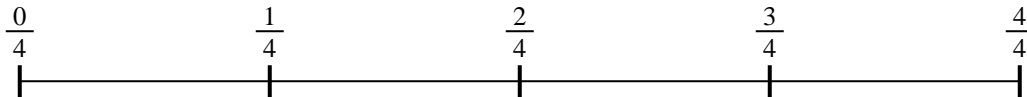
Usa la línea numérica para resolver cada problema. El primero ya está hecho como ejemplo

Respuestas


1) $\frac{1}{3} \div 4$



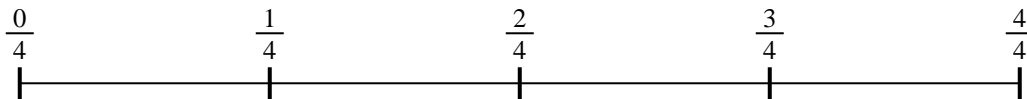
2) $\frac{1}{4} \div 4$



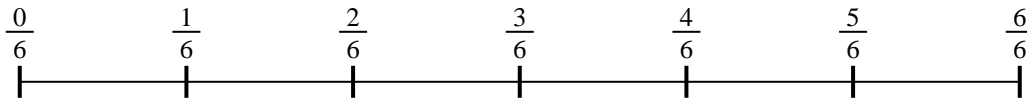
3) $\frac{1}{5} \div 3$



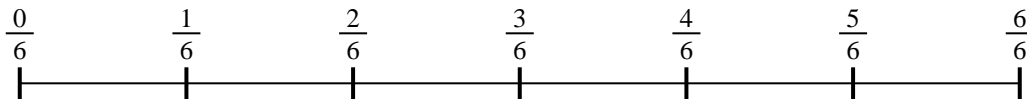
4) $\frac{1}{4} \div 3$




5) $\frac{1}{6} \div 4$



6) $\frac{1}{6} \div 6$



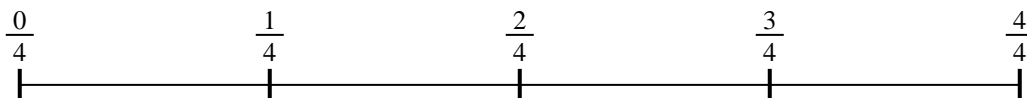
7) $\frac{1}{3} \div 4$



8) $\frac{1}{3} \div 4$



9) $\frac{1}{4} \div 2$



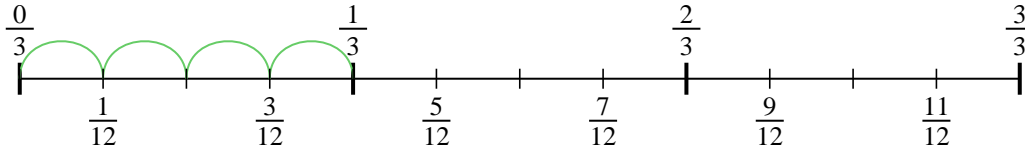
1. _____
2. _____
3. _____
4. _____
5. _____
6. _____
7. _____
8. _____
9. _____



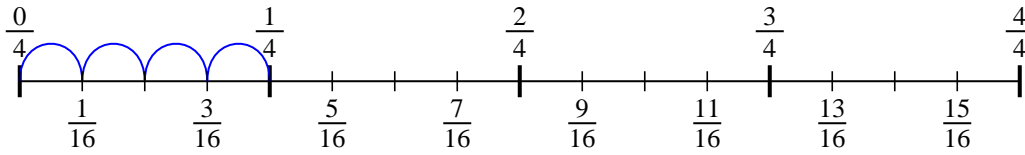
Usa la línea numérica para resolver cada problema. El primero ya está hecho como

ejemplo

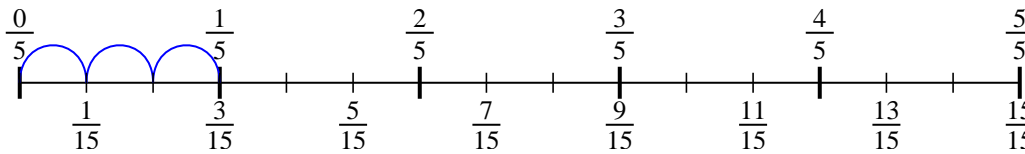
1) $\frac{1}{3} \div 4$



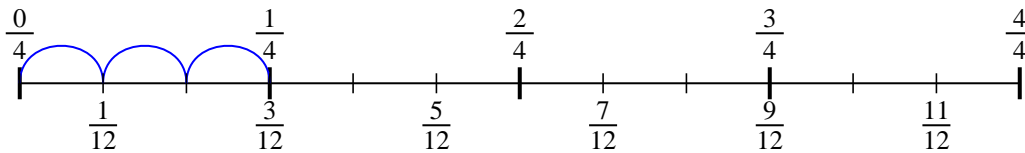
2) $\frac{1}{4} \div 4$



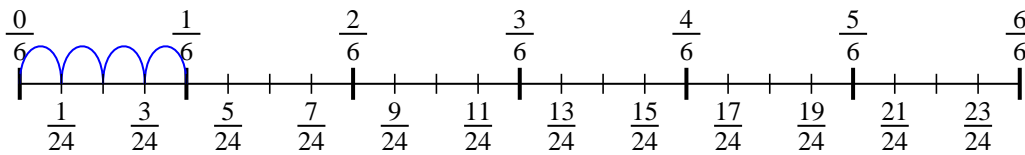
3) $\frac{1}{5} \div 3$



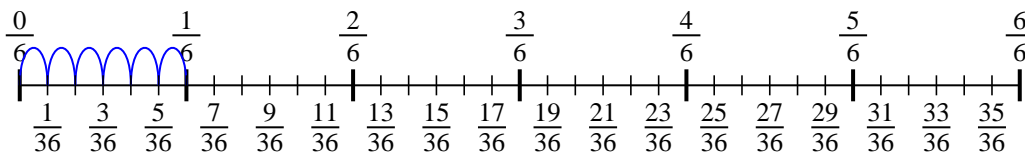
4) $\frac{1}{4} \div 3$



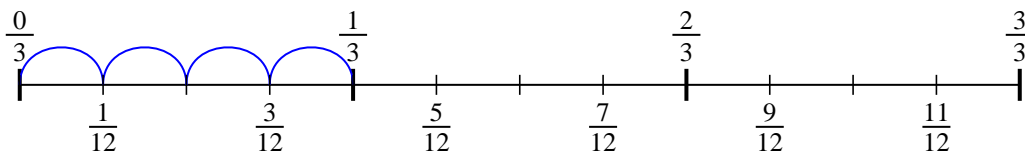
5) $\frac{1}{6} \div 4$



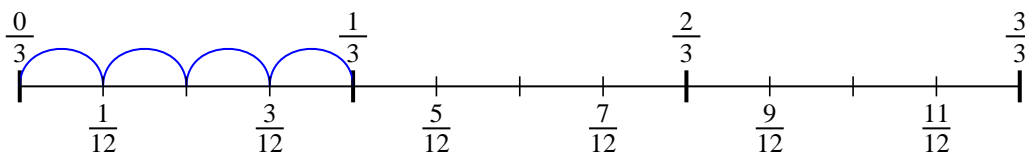
6) $\frac{1}{6} \div 6$



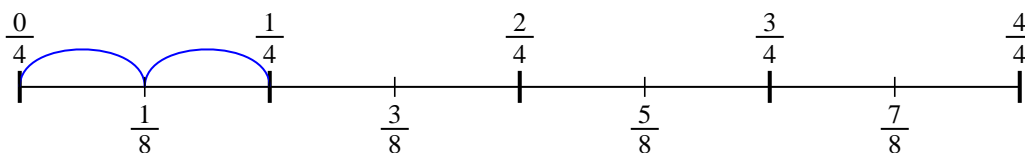
7) $\frac{1}{3} \div 4$



8) $\frac{1}{3} \div 4$



9) $\frac{1}{4} \div 2$



Respuestas

1. $\frac{1}{12}$

2. $\frac{1}{16}$

3. $\frac{1}{15}$

4. $\frac{1}{12}$

5. $\frac{1}{24}$

6. $\frac{1}{36}$

7. $\frac{1}{12}$

8. $\frac{1}{12}$

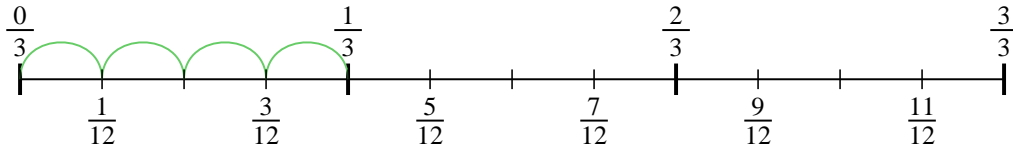
9. $\frac{1}{8}$



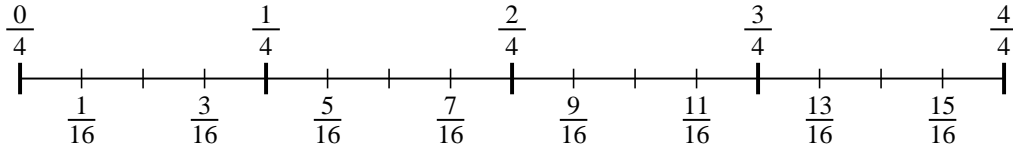
Usa la línea numérica para resolver cada problema. El primero ya está hecho como ejemplo

Respuestas

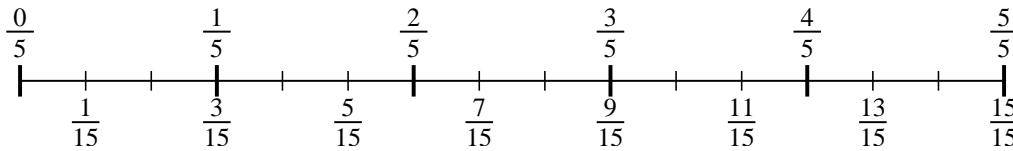
1) $\frac{1}{3} \div 4$



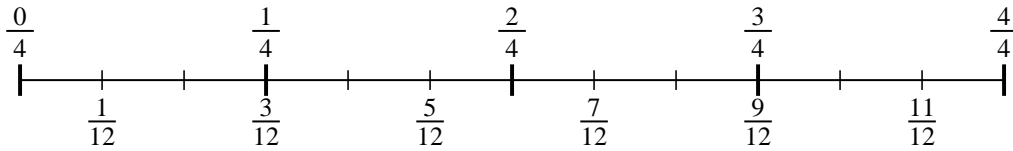
2) $\frac{1}{4} \div 4$



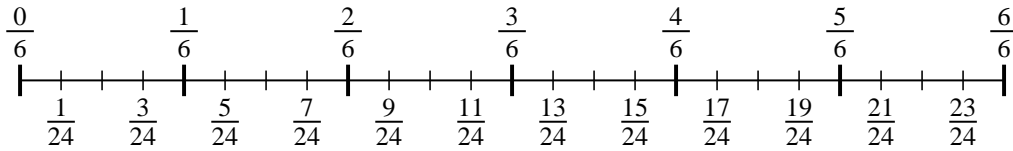
3) $\frac{1}{5} \div 3$



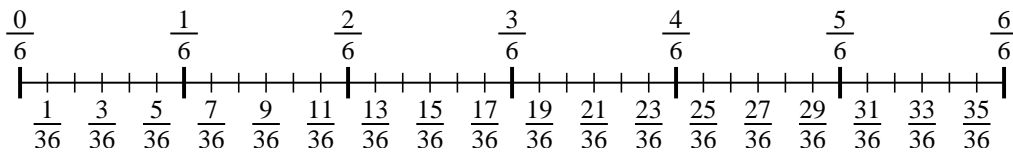
4) $\frac{1}{4} \div 3$



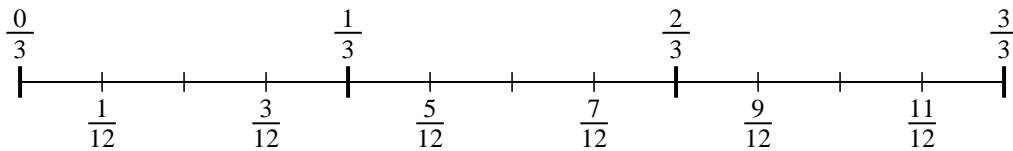
5) $\frac{1}{6} \div 4$



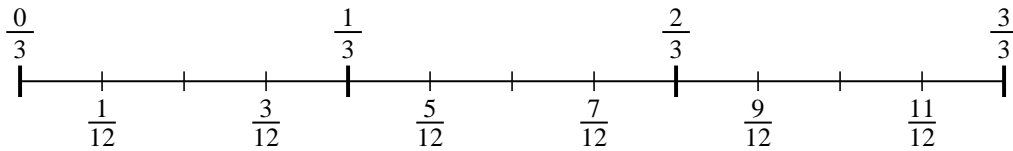
6) $\frac{1}{6} \div 6$



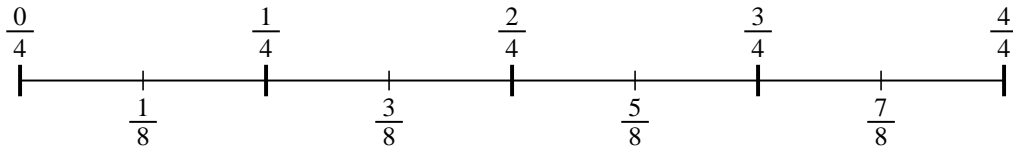
7) $\frac{1}{3} \div 4$



8) $\frac{1}{3} \div 4$



9) $\frac{1}{4} \div 2$



1. _____
2. _____
3. _____
4. _____
5. _____
6. _____
7. _____
8. _____
9. _____