




Usa la línea numérica para resolver cada problema. El primero ya está hecho como ejemplo

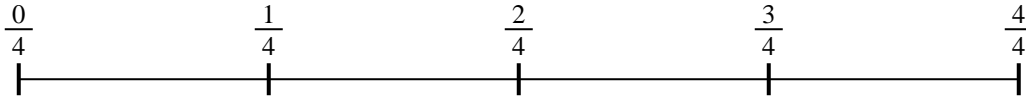
Respuestas

1) $\frac{1}{5} \div 2$




1. _____

2) $\frac{1}{4} \div 6$



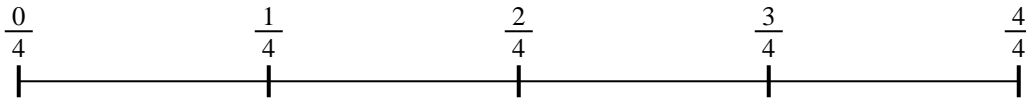
2. _____

3) $\frac{1}{5} \div 2$




3. _____

4) $\frac{1}{4} \div 6$



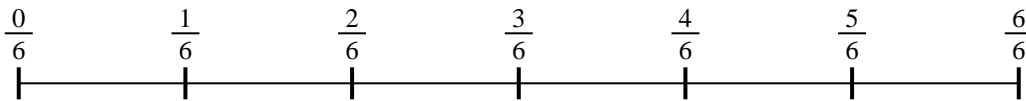
4. _____

5) $\frac{1}{3} \div 6$




5. _____

6) $\frac{1}{6} \div 4$



6. _____

7) $\frac{1}{7} \div 4$



7. _____

8) $\frac{1}{7} \div 5$



8. _____

9) $\frac{1}{3} \div 3$



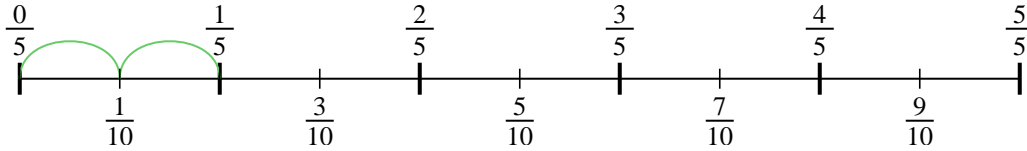
9. _____



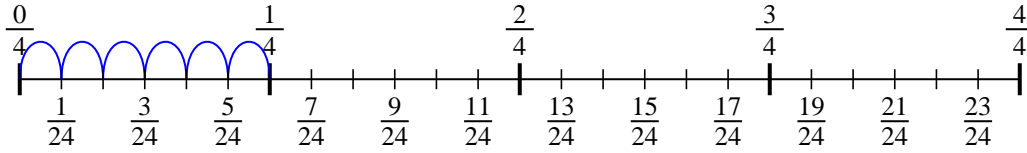
Usa la línea numérica para resolver cada problema. El primero ya está hecho como

ejemplo

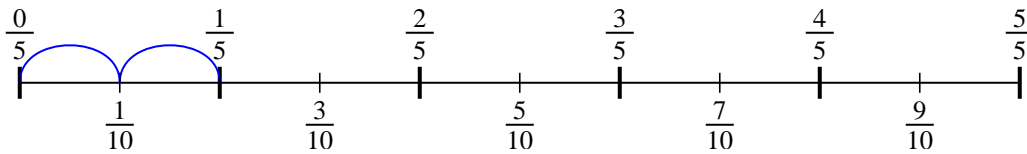
1) $\frac{1}{5} \div 2$



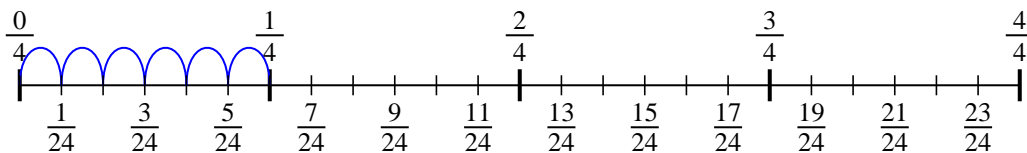
2) $\frac{1}{4} \div 6$



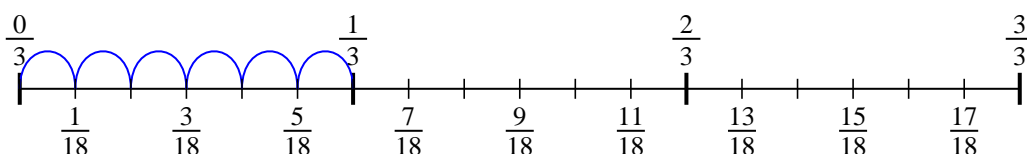
3) $\frac{1}{5} \div 2$



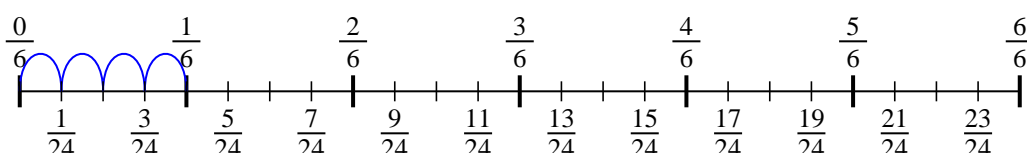
4) $\frac{1}{4} \div 6$



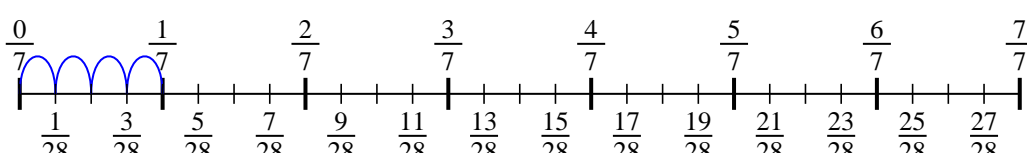
5) $\frac{1}{3} \div 6$



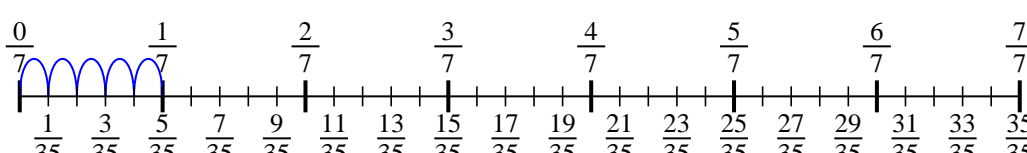
6) $\frac{1}{6} \div 4$



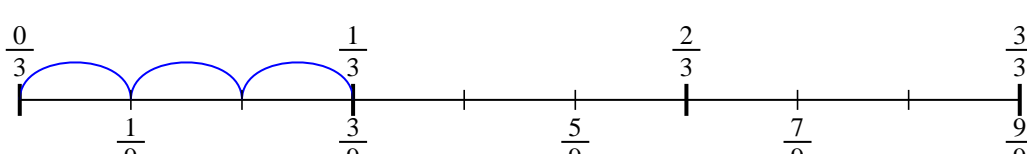
7) $\frac{1}{7} \div 4$



8) $\frac{1}{7} \div 5$



9) $\frac{1}{3} \div 3$



Respuestas

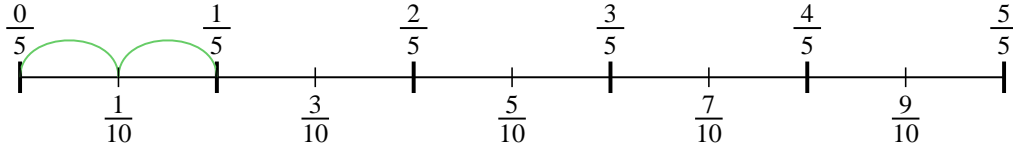
1. $\frac{1}{10}$
2. $\frac{1}{24}$
3. $\frac{1}{10}$
4. $\frac{1}{24}$
5. $\frac{1}{18}$
6. $\frac{1}{24}$
7. $\frac{1}{28}$
8. $\frac{1}{35}$
9. $\frac{1}{9}$



Usa la línea numérica para resolver cada problema. El primero ya está hecho como ejemplo

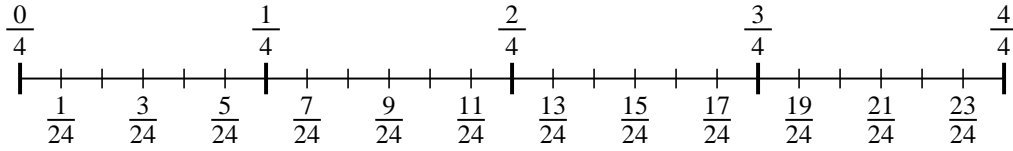
Respuestas

1) $\frac{1}{5} \div 2$



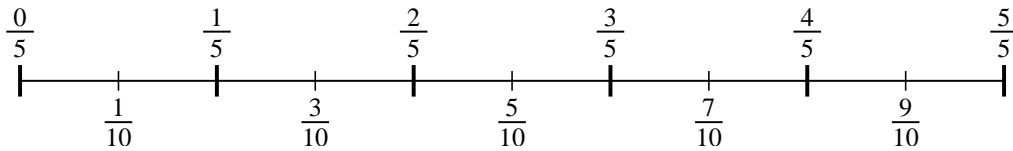
1. _____

2) $\frac{1}{4} \div 6$



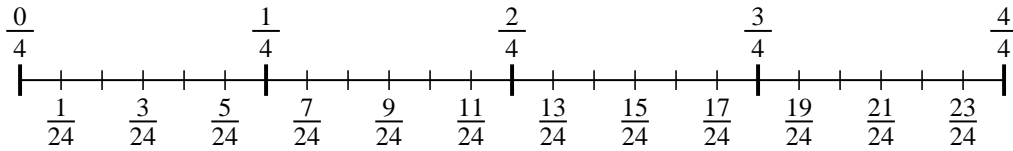
2. _____

3) $\frac{1}{5} \div 2$



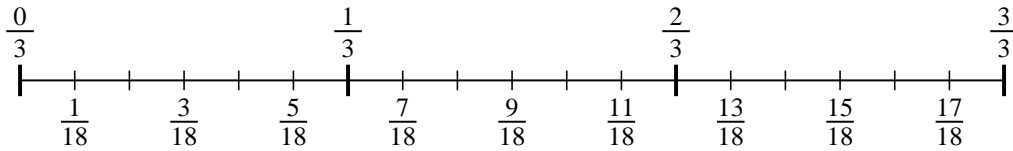
3. _____

4) $\frac{1}{4} \div 6$



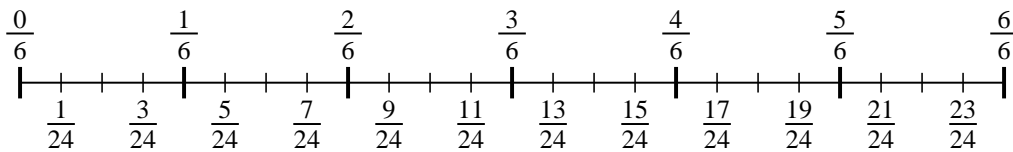
4. _____

5) $\frac{1}{3} \div 6$



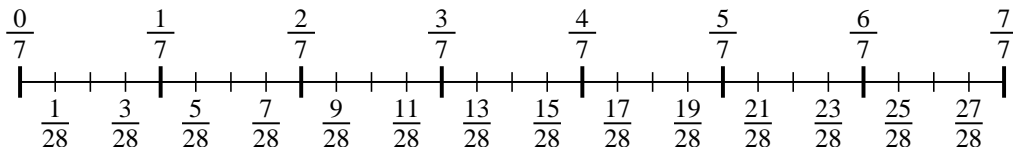
5. _____

6) $\frac{1}{6} \div 4$



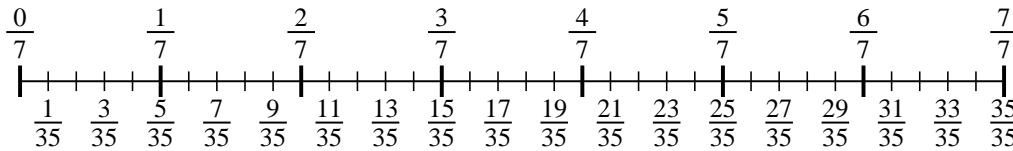
6. _____

7) $\frac{1}{7} \div 4$



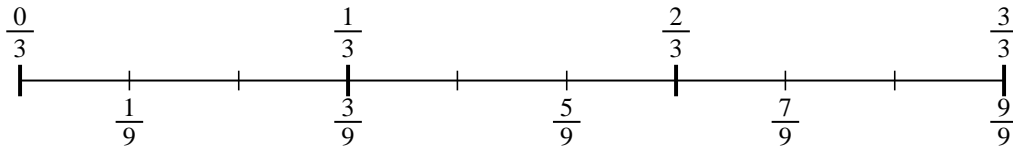
7. _____

8) $\frac{1}{7} \div 5$



8. _____

9) $\frac{1}{3} \div 3$



9. _____