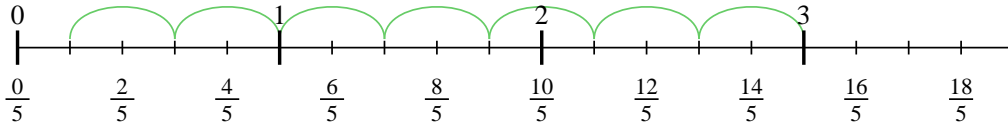


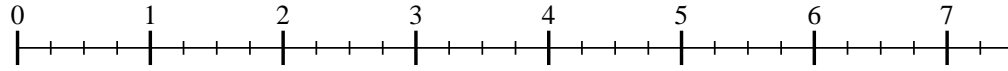


Usa la recta numérica para resolver cada problema. El primero ya está marcado como ejemplo.

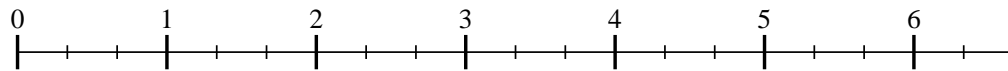
1) $3 \div \frac{2}{5}$



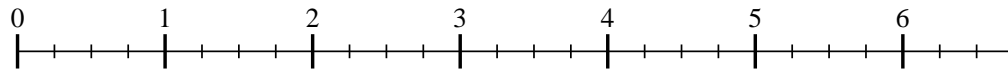
2) $7 \div \frac{2}{4}$



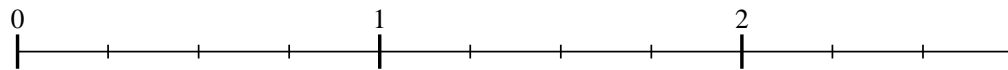
3) $6 \div \frac{2}{3}$



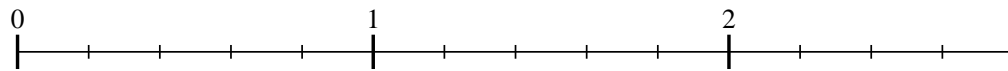
4) $6 \div \frac{3}{4}$



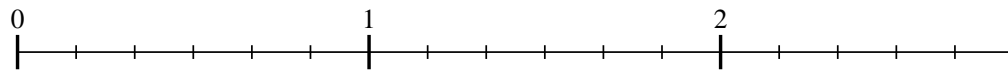
5) $2 \div \frac{3}{4}$



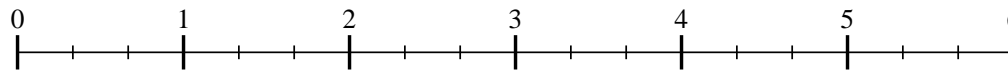
6) $2 \div \frac{4}{5}$



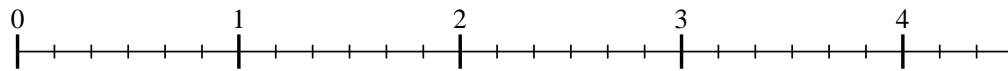
7) $2 \div \frac{5}{6}$



8) $5 \div \frac{2}{3}$



9) $4 \div \frac{4}{6}$



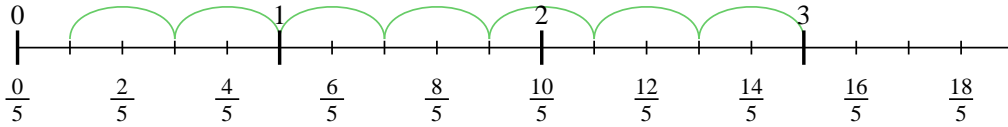
Respuestas

- 1. _____
- 2. _____
- 3. _____
- 4. _____
- 5. _____
- 6. _____
- 7. _____
- 8. _____
- 9. _____

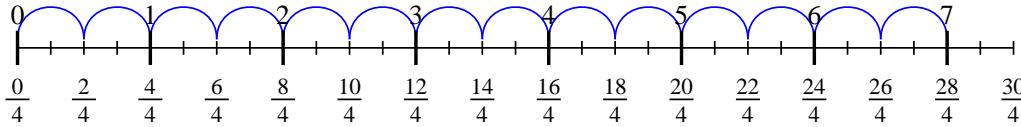


Usa la recta numérica para resolver cada problema. El primero ya está marcado como ejemplo.

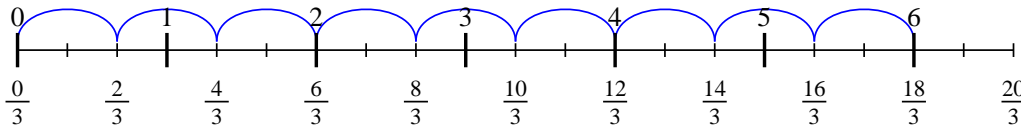
1) $3 \div \frac{2}{5}$



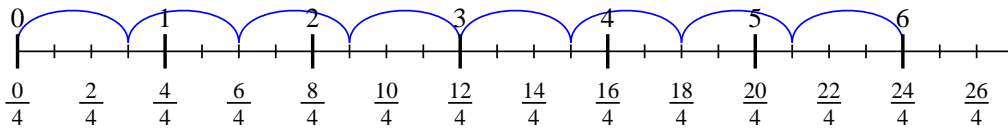
2) $7 \div \frac{2}{4}$



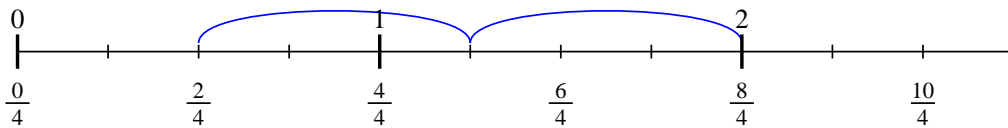
3) $6 \div \frac{2}{3}$



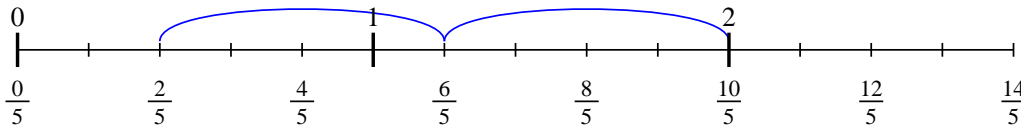
4) $6 \div \frac{3}{4}$



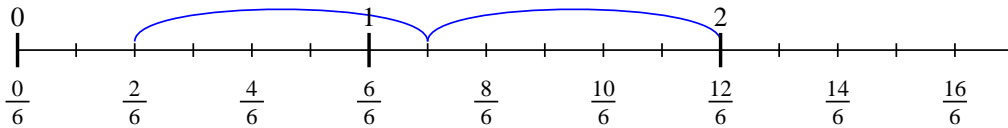
5) $2 \div \frac{3}{4}$



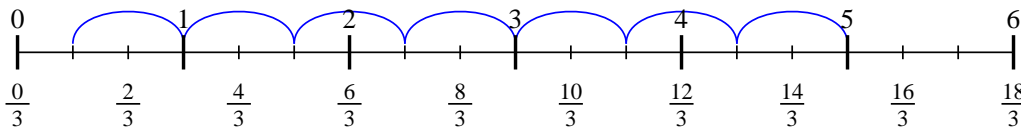
6) $2 \div \frac{4}{5}$



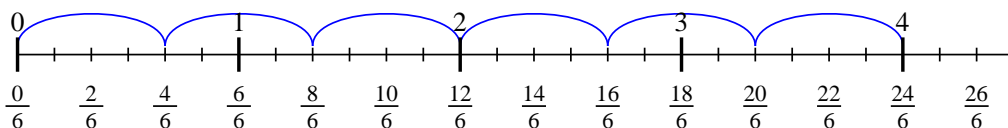
7) $2 \div \frac{5}{6}$



8) $5 \div \frac{2}{3}$



9) $4 \div \frac{4}{6}$



Respuestas

1. $7 \frac{1}{2}$
2. 14
3. 9
4. 8
5. $2 \frac{2}{3}$
6. $2 \frac{2}{4}$
7. $2 \frac{2}{5}$
8. $7 \frac{1}{2}$
9. 6