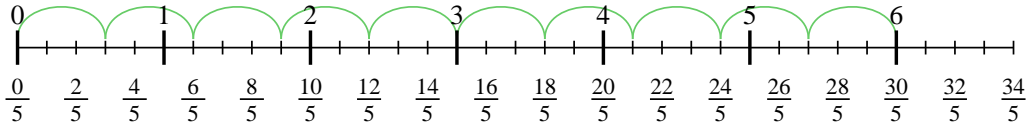


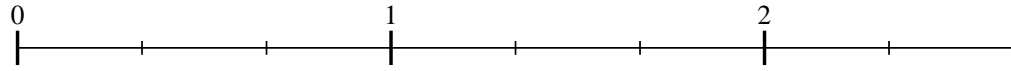


Usa la recta numérica para resolver cada problema. El primero ya está marcado como ejemplo.

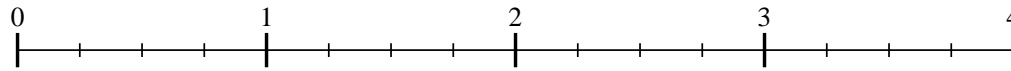
1) $6 \div \frac{3}{5}$



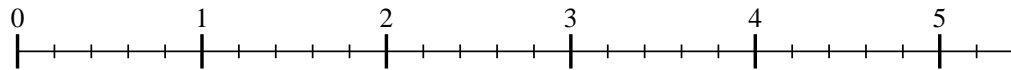
2) $2 \div \frac{2}{3}$



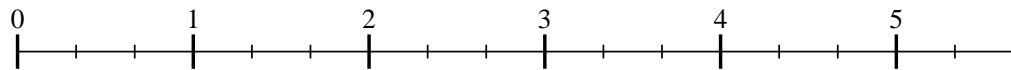
3) $3 \div \frac{3}{4}$



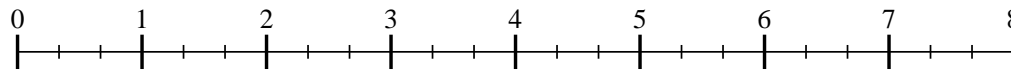
4) $5 \div \frac{2}{5}$



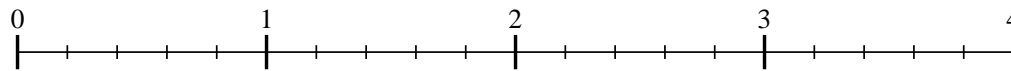
5) $5 \div \frac{2}{3}$



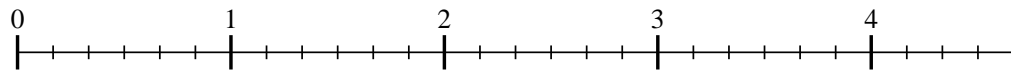
6) $7 \div \frac{2}{3}$



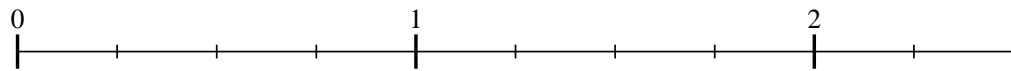
7) $3 \div \frac{4}{5}$



8) $4 \div \frac{4}{6}$



9) $2 \div \frac{2}{4}$



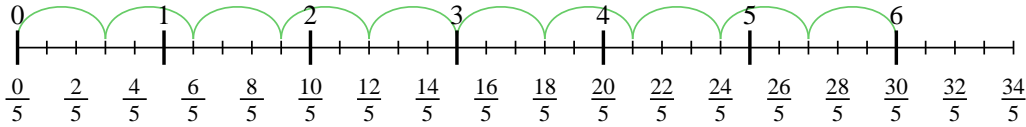
Respuestas

- 1. _____
- 2. _____
- 3. _____
- 4. _____
- 5. _____
- 6. _____
- 7. _____
- 8. _____
- 9. _____

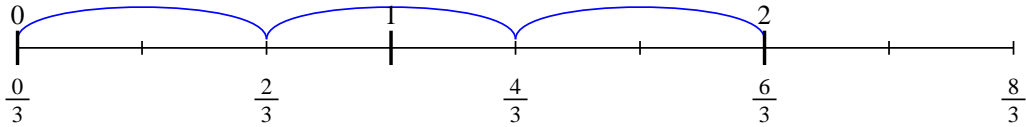


Usa la recta numérica para resolver cada problema. El primero ya está marcado como ejemplo.

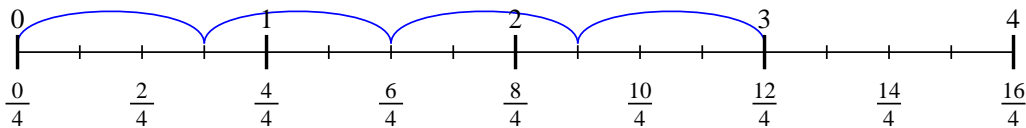
1) $6 \div \frac{3}{5}$



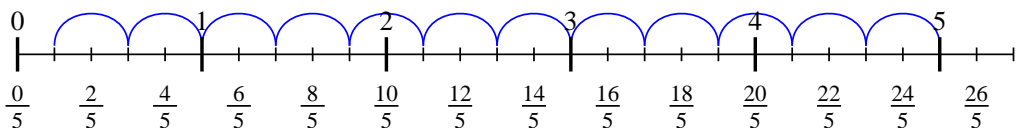
2) $2 \div \frac{2}{3}$



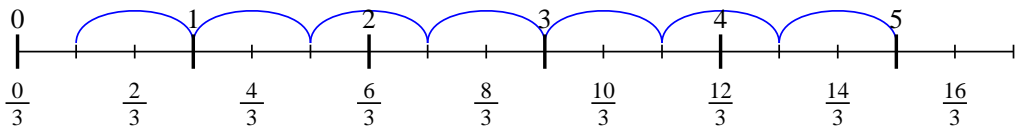
3) $3 \div \frac{3}{4}$



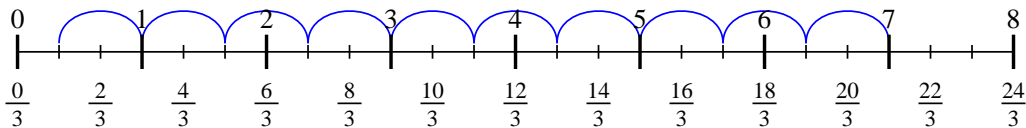
4) $5 \div \frac{2}{5}$



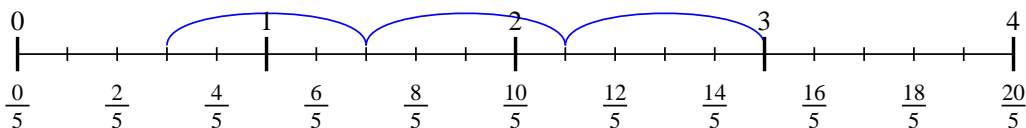
5) $5 \div \frac{2}{3}$



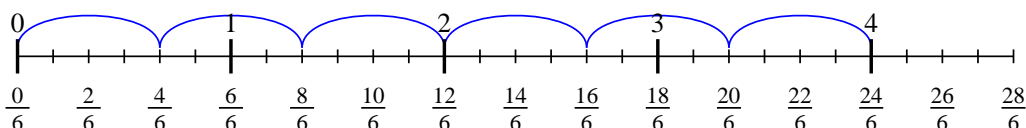
6) $7 \div \frac{2}{3}$



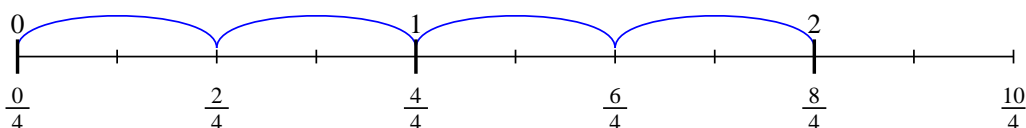
7) $3 \div \frac{4}{5}$



8) $4 \div \frac{4}{6}$



9) $2 \div \frac{2}{4}$



Respuestas

1. 10
2. 3
3. 4
4. 12 1/2
5. 7 1/2
6. 10 1/2
7. 3 3/4
8. 6
9. 4