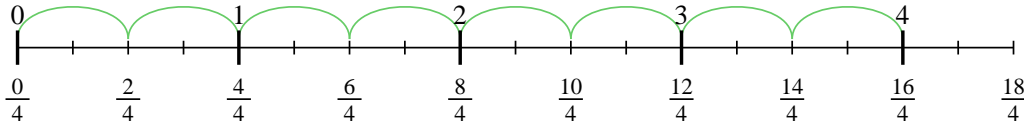


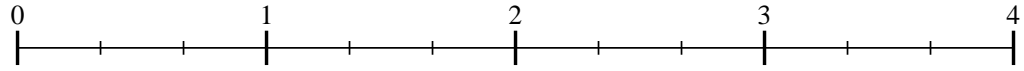


Usa la recta numérica para resolver cada problema. El primero ya está marcado como ejemplo.

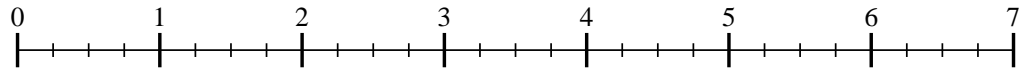
1) $4 \div \frac{2}{4}$



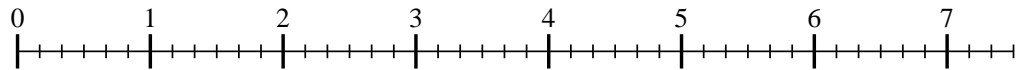
2) $3 \div \frac{2}{3}$



3) $6 \div \frac{3}{4}$



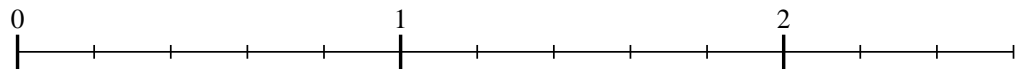
4) $7 \div \frac{3}{6}$



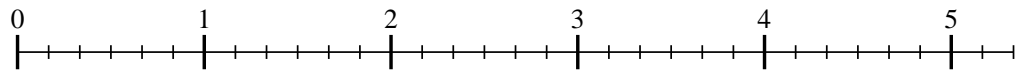
5) $7 \div \frac{2}{4}$



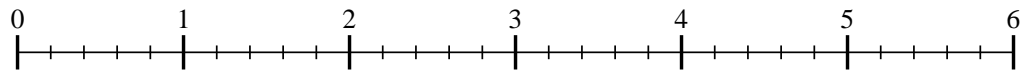
6) $2 \div \frac{4}{5}$



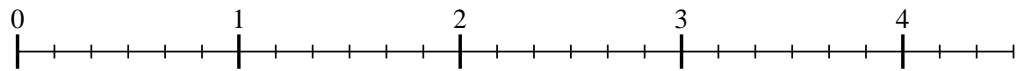
7) $5 \div \frac{4}{6}$



8) $5 \div \frac{4}{5}$



9) $4 \div \frac{2}{6}$



Respuestas

1. _____

2. _____

3. _____

4. _____

5. _____

6. _____

7. _____

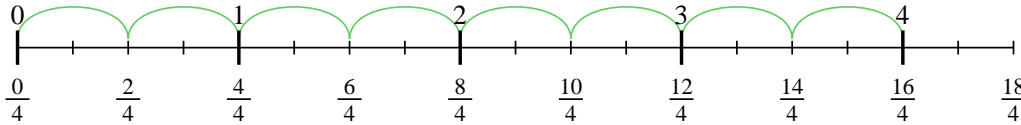
8. _____

9. _____

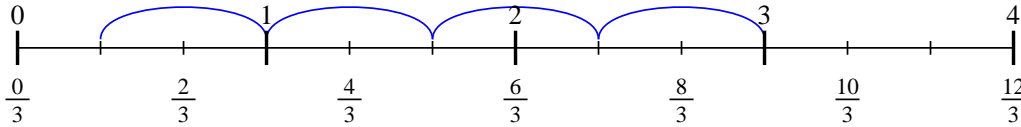


Usa la recta numérica para resolver cada problema. El primero ya está marcado como ejemplo.

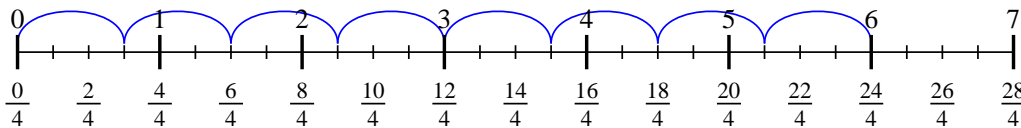
1) $4 \div \frac{2}{4}$



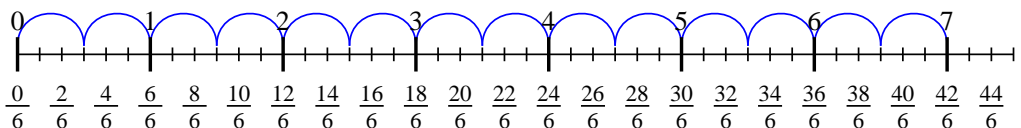
2) $3 \div \frac{2}{3}$



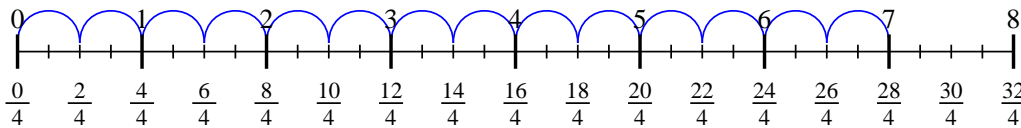
3) $6 \div \frac{3}{4}$



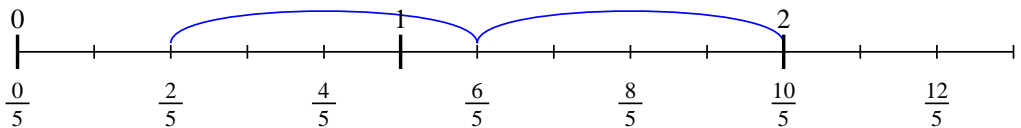
4) $7 \div \frac{3}{6}$



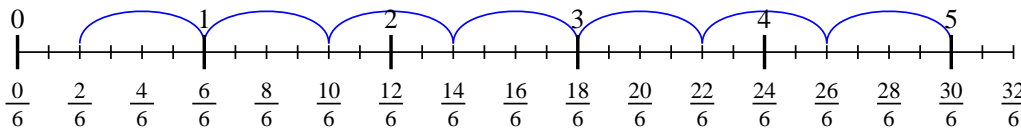
5) $7 \div \frac{2}{4}$



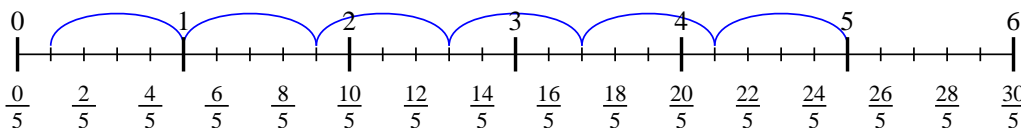
6) $2 \div \frac{4}{5}$



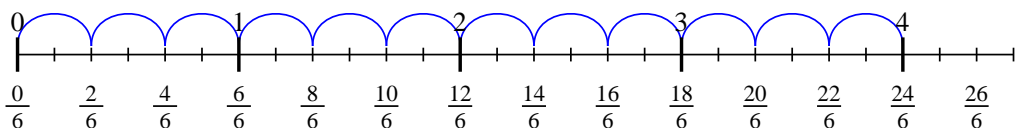
7) $5 \div \frac{4}{6}$



8) $5 \div \frac{4}{5}$



9) $4 \div \frac{2}{6}$



Respuestas

1. 8
2. $4 \frac{1}{2}$
3. 8
4. 14
5. 14
6. $2 \frac{2}{4}$
7. $7 \frac{2}{4}$
8. $6 \frac{1}{4}$
9. 12