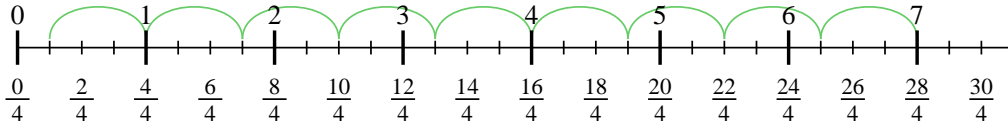


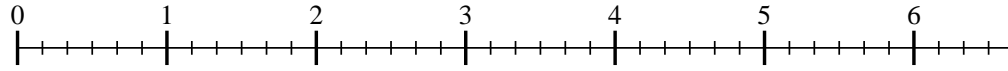


Usa la recta numérica para resolver cada problema. El primero ya está marcado como ejemplo.

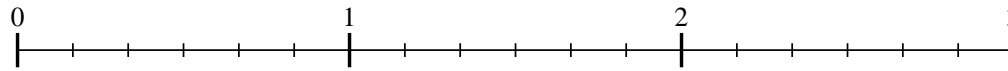
1) $7 \div \frac{3}{4}$



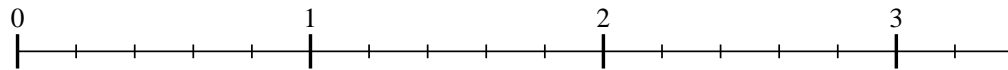
2) $6 \div \frac{5}{6}$



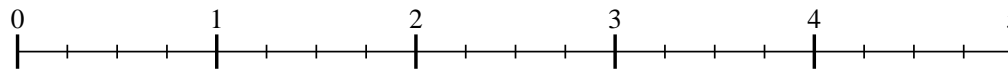
3) $2 \div \frac{4}{6}$



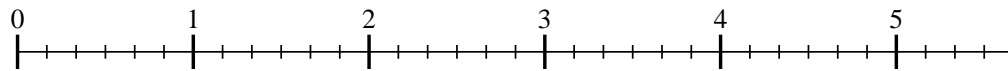
4) $3 \div \frac{4}{5}$



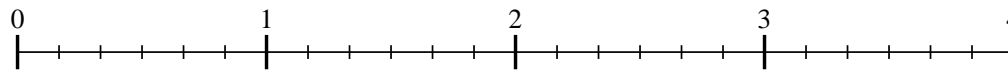
5) $4 \div \frac{3}{4}$



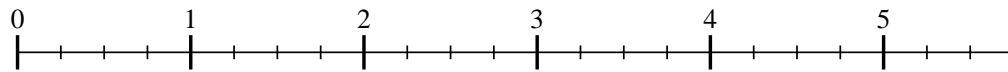
6) $5 \div \frac{4}{6}$



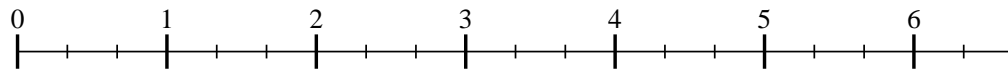
7) $3 \div \frac{3}{6}$



8) $5 \div \frac{2}{4}$



9) $6 \div \frac{2}{3}$



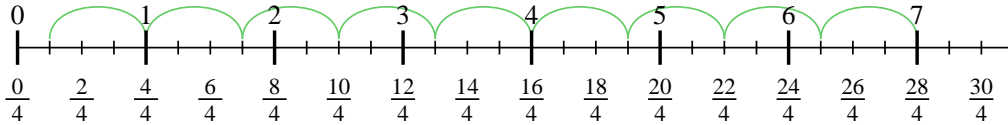
Respuestas

- 1. _____
- 2. _____
- 3. _____
- 4. _____
- 5. _____
- 6. _____
- 7. _____
- 8. _____
- 9. _____

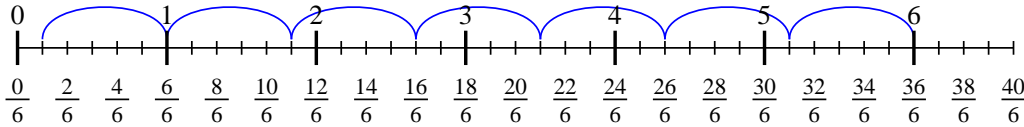


Usa la recta numérica para resolver cada problema. El primero ya está marcado como ejemplo.

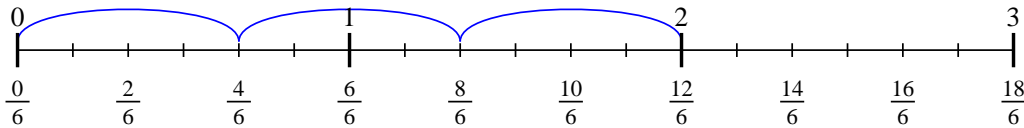
1) $7 \div \frac{3}{4}$



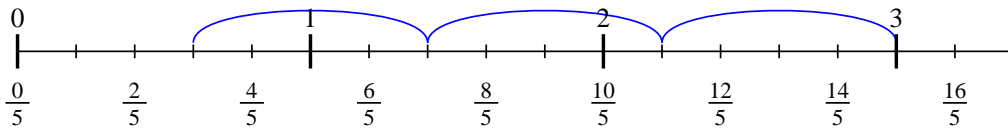
2) $6 \div \frac{5}{6}$



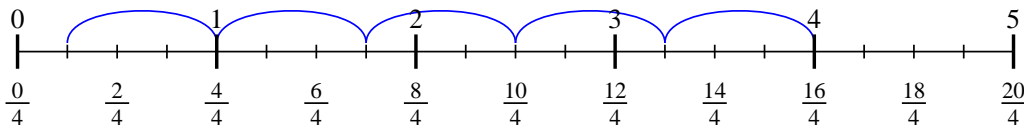
3) $2 \div \frac{4}{6}$



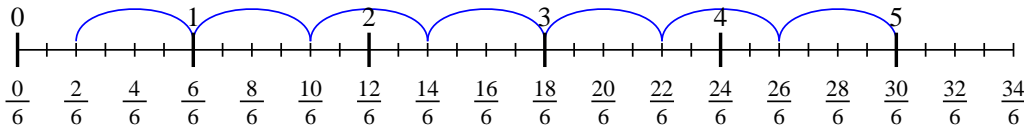
4) $3 \div \frac{4}{5}$



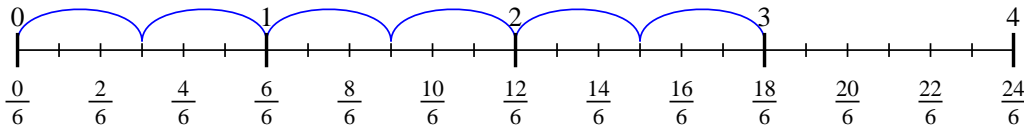
5) $4 \div \frac{3}{4}$



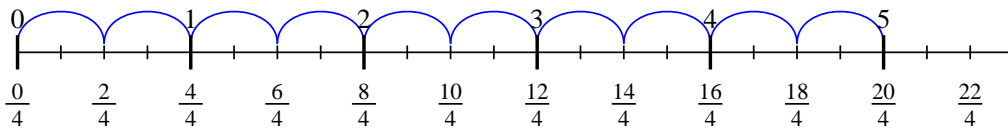
6) $5 \div \frac{4}{6}$



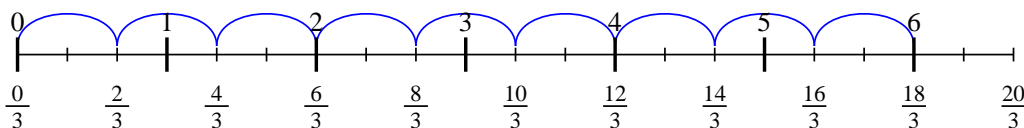
7) $3 \div \frac{3}{6}$



8) $5 \div \frac{2}{4}$



9) $6 \div \frac{2}{3}$



Respuestas

1. $9 \frac{1}{3}$
2. $7 \frac{1}{5}$
3. 3
4. $3 \frac{3}{4}$
5. $5 \frac{1}{3}$
6. $7 \frac{2}{4}$
7. 6
8. 10
9. 9