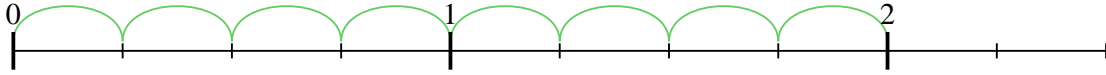




Usa la recta numérica para resolver cada problema. El primero ya está marcado como ejemplo.

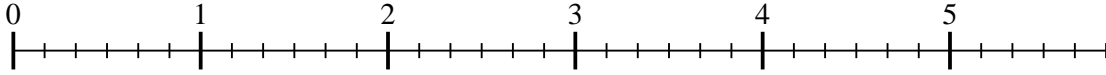
**Respuestas**

1)  $2 \div \frac{1}{4}$



1. \_\_\_\_\_

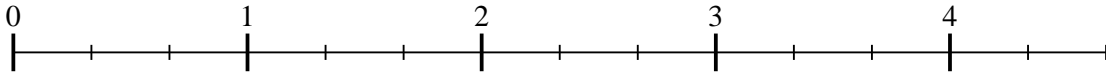
2)  $5 \div \frac{1}{6}$



2. \_\_\_\_\_

3. \_\_\_\_\_

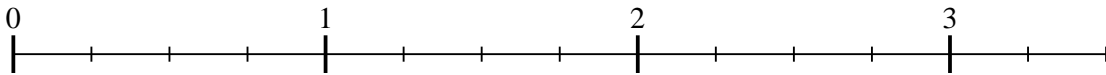
3)  $4 \div \frac{1}{3}$



4. \_\_\_\_\_

5. \_\_\_\_\_

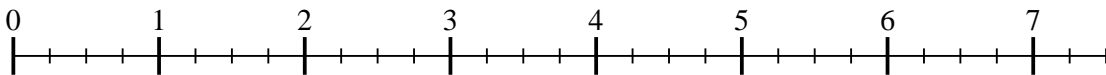
4)  $3 \div \frac{1}{4}$



6. \_\_\_\_\_

7. \_\_\_\_\_

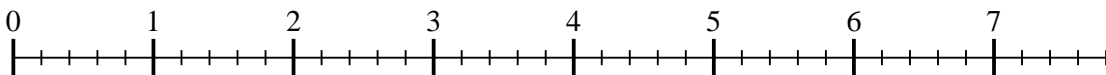
5)  $7 \div \frac{1}{4}$



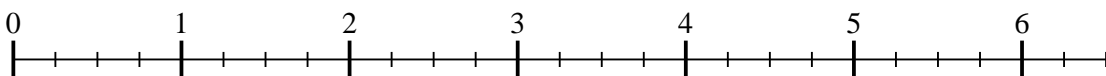
8. \_\_\_\_\_

9. \_\_\_\_\_

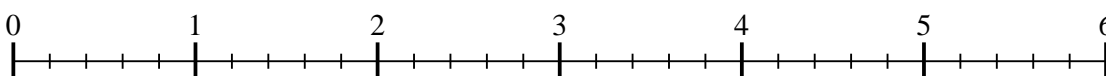
6)  $7 \div \frac{1}{5}$



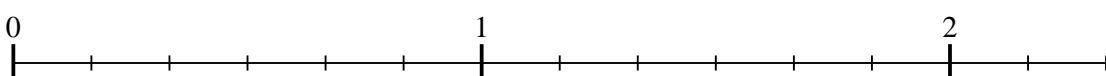
7)  $6 \div \frac{1}{4}$



8)  $5 \div \frac{1}{5}$



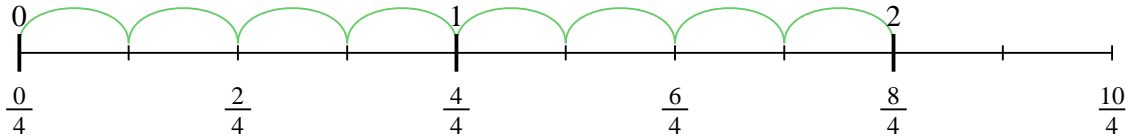
9)  $2 \div \frac{1}{6}$



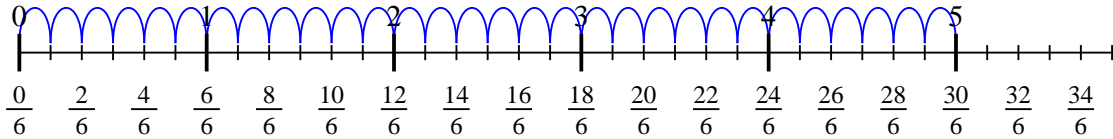


Usa la recta numérica para resolver cada problema. El primero ya está marcado como ejemplo.

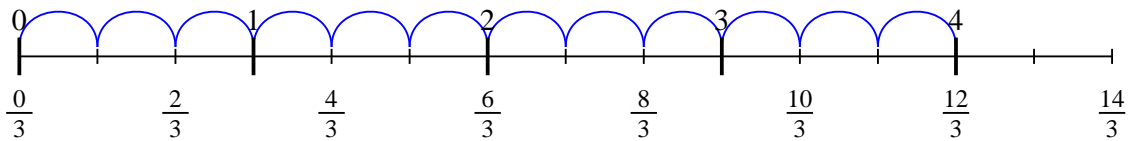
1)  $2 \div \frac{1}{4}$



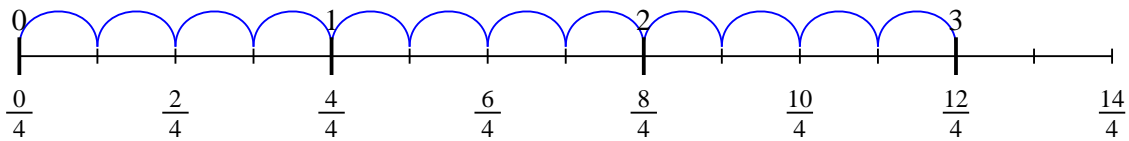
2)  $5 \div \frac{1}{6}$



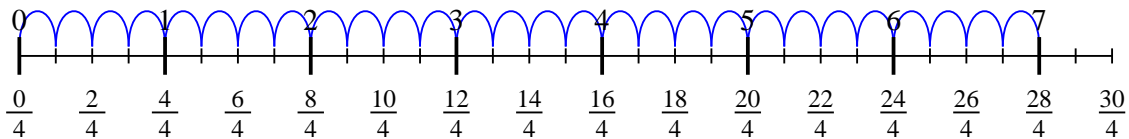
3)  $4 \div \frac{1}{3}$



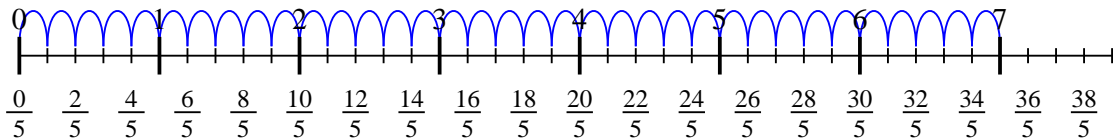
4)  $3 \div \frac{1}{4}$



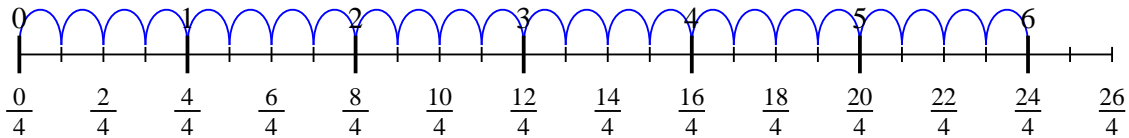
5)  $7 \div \frac{1}{4}$



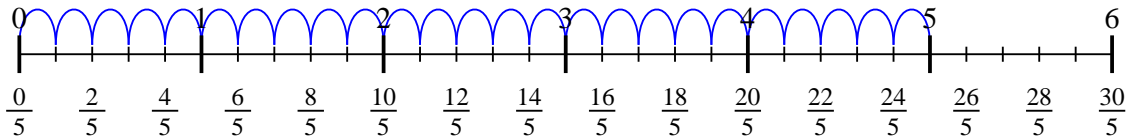
6)  $7 \div \frac{1}{5}$



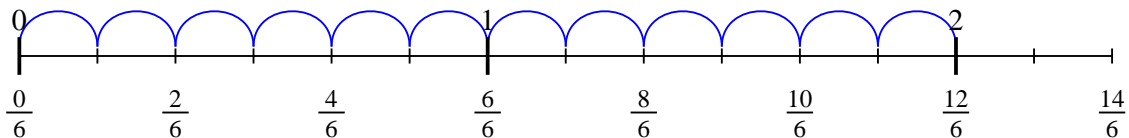
7)  $6 \div \frac{1}{4}$



8)  $5 \div \frac{1}{5}$



9)  $2 \div \frac{1}{6}$



**Respuestas**

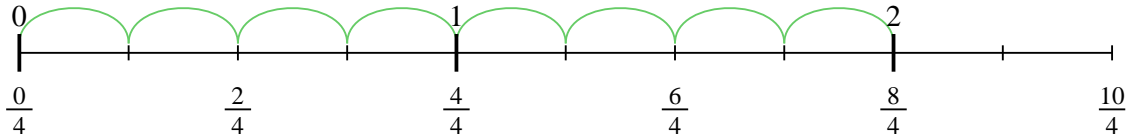
1. 8
2. 30
3. 12
4. 12
5. 28
6. 35
7. 24
8. 25
9. 12



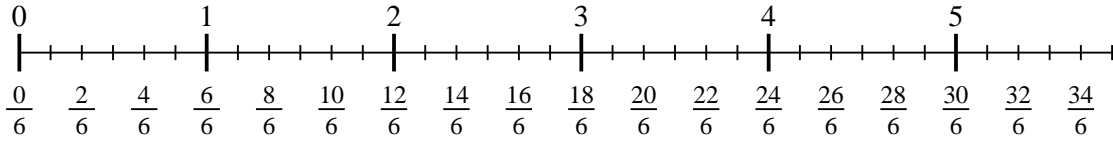
Usa la recta numérica para resolver cada problema. El primero ya está marcado como ejemplo.

**Respuestas**

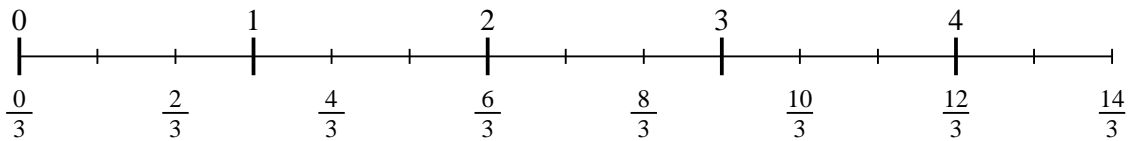
1)  $2 \div \frac{1}{4}$



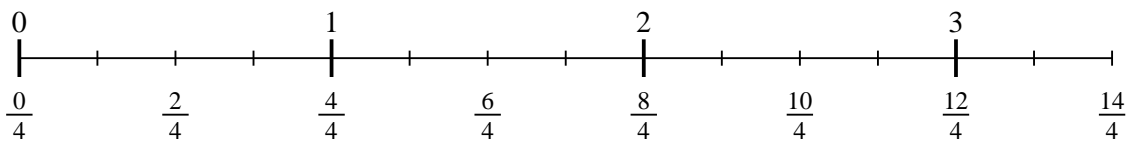
2)  $5 \div \frac{1}{6}$



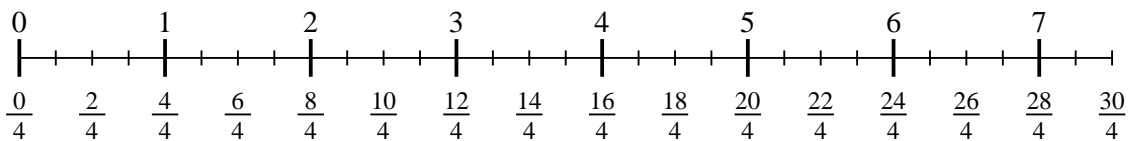
3)  $4 \div \frac{1}{3}$



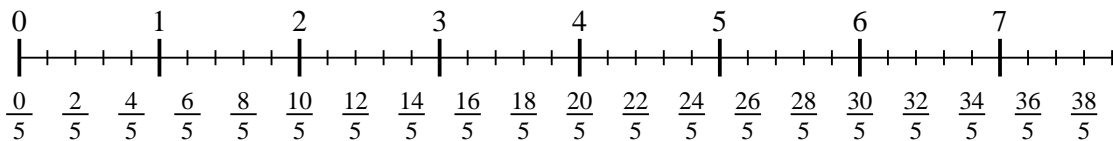
4)  $3 \div \frac{1}{4}$



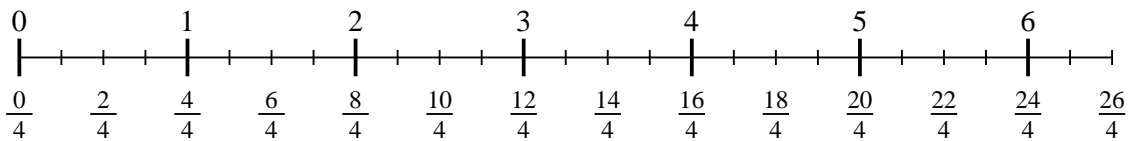
5)  $7 \div \frac{1}{4}$



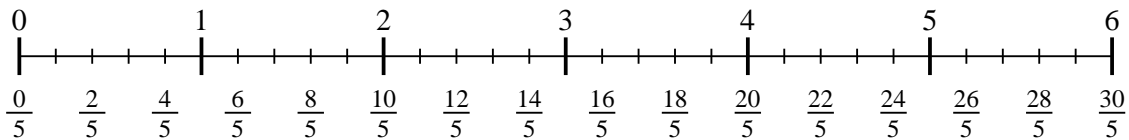
6)  $7 \div \frac{1}{5}$



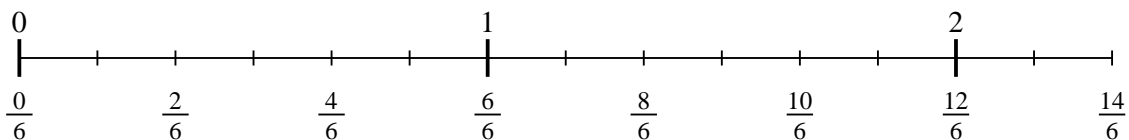
7)  $6 \div \frac{1}{4}$



8)  $5 \div \frac{1}{5}$



9)  $2 \div \frac{1}{6}$



- 1. \_\_\_\_\_
- 2. \_\_\_\_\_
- 3. \_\_\_\_\_
- 4. \_\_\_\_\_
- 5. \_\_\_\_\_
- 6. \_\_\_\_\_
- 7. \_\_\_\_\_
- 8. \_\_\_\_\_
- 9. \_\_\_\_\_