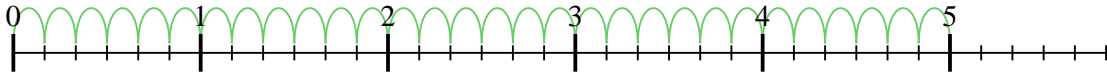




Usa la recta numérica para resolver cada problema. El primero ya está marcado como ejemplo.

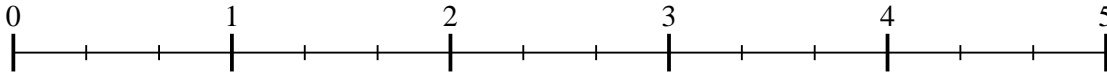
Respuestas

1) $5 \div \frac{1}{6}$



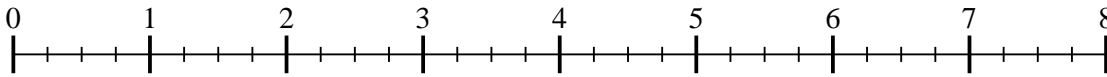
1. _____

2) $4 \div \frac{1}{3}$



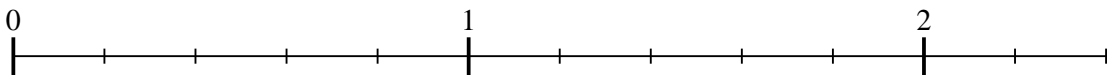
2. _____

3) $7 \div \frac{1}{4}$




3. _____

4) $2 \div \frac{1}{5}$



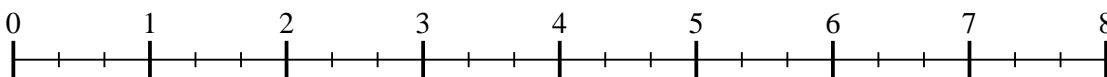
4. _____

5) $2 \div \frac{1}{3}$



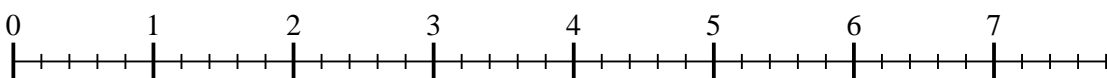
5. _____

6) $7 \div \frac{1}{3}$



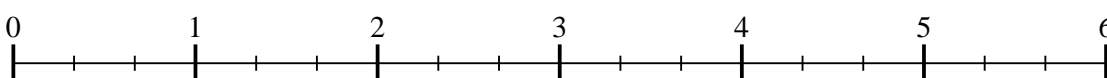
6. _____

7) $7 \div \frac{1}{5}$



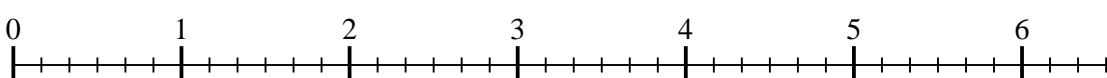
7. _____

8) $5 \div \frac{1}{3}$



8. _____

9) $6 \div \frac{1}{6}$

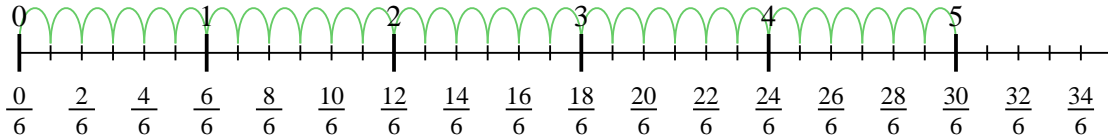


9. _____

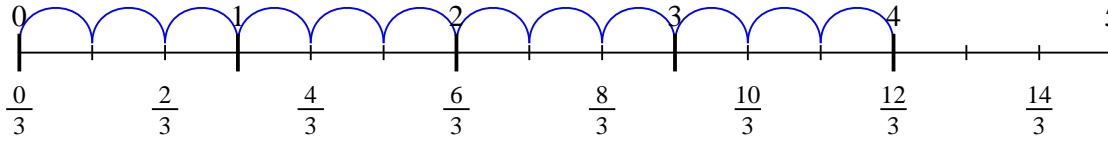


Usa la recta numérica para resolver cada problema. El primero ya está marcado como ejemplo.

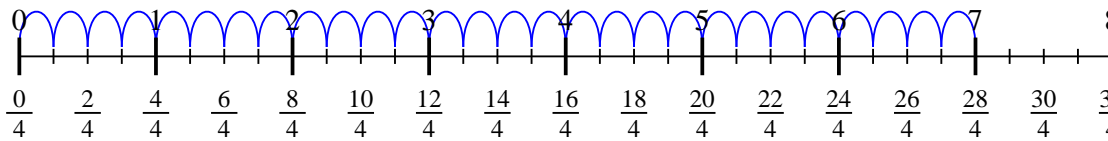
1) $5 \div \frac{1}{6}$



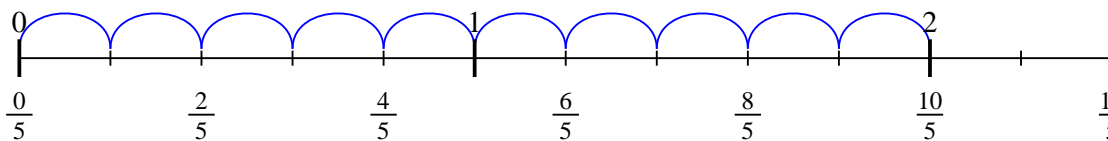
2) $4 \div \frac{1}{3}$



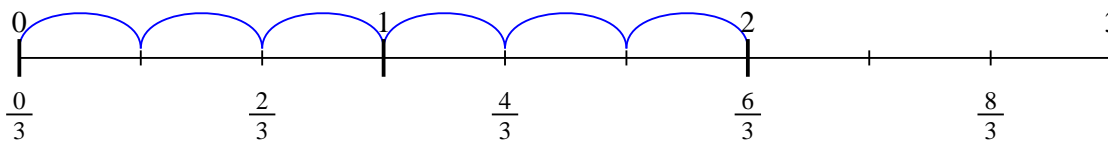
3) $7 \div \frac{1}{4}$



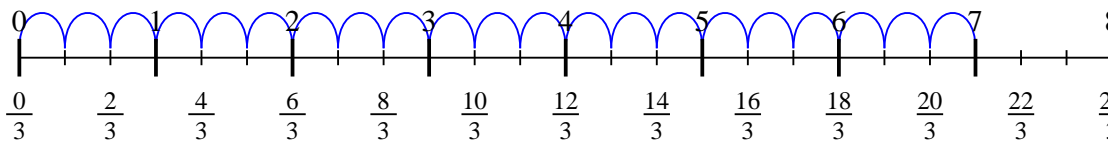
4) $2 \div \frac{1}{5}$



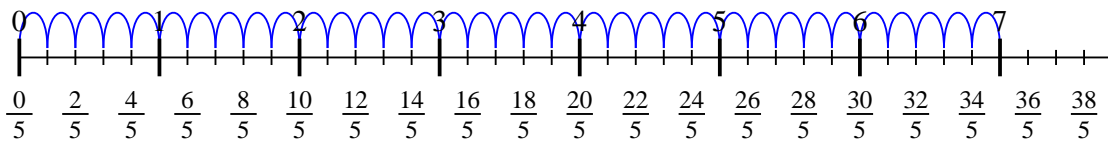
5) $2 \div \frac{1}{3}$



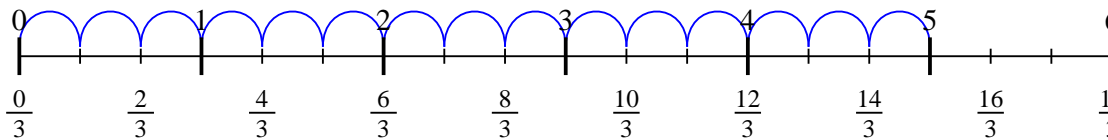
6) $7 \div \frac{1}{3}$



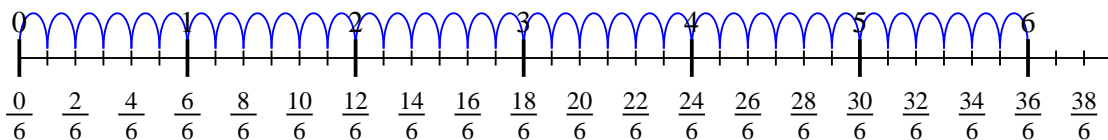
7) $7 \div \frac{1}{5}$



8) $5 \div \frac{1}{3}$



9) $6 \div \frac{1}{6}$



Respuestas

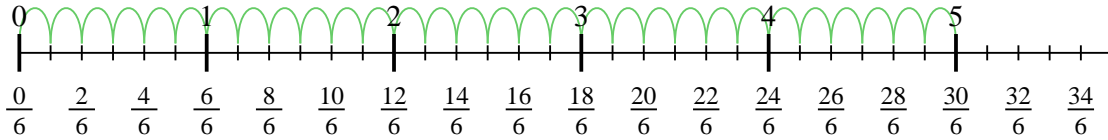
1. 30
2. 12
3. 28
4. 10
5. 6
6. 21
7. 35
8. 15
9. 36



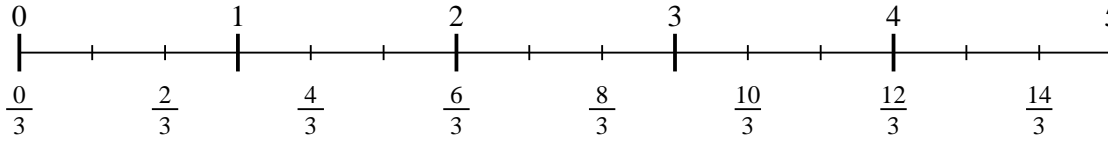
Usa la recta numérica para resolver cada problema. El primero ya está marcado como ejemplo.

Respuestas

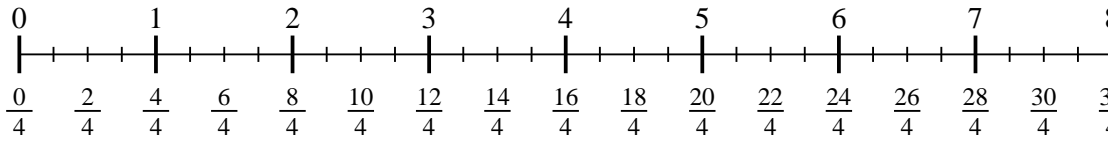
1) $5 \div \frac{1}{6}$



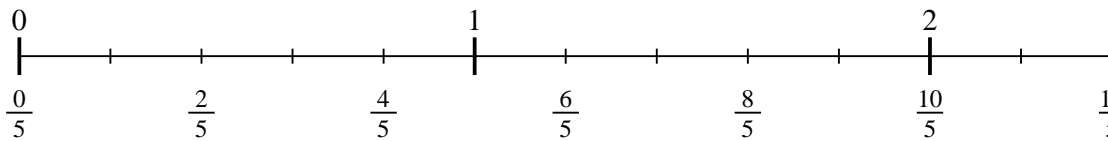
2) $4 \div \frac{1}{3}$



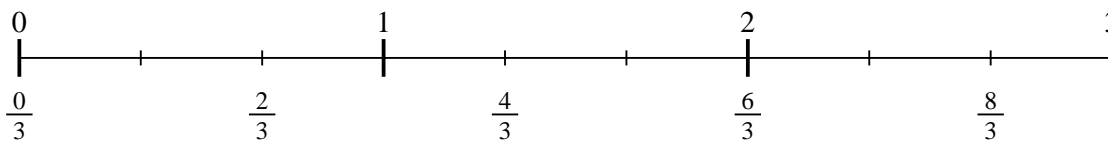
3) $7 \div \frac{1}{4}$



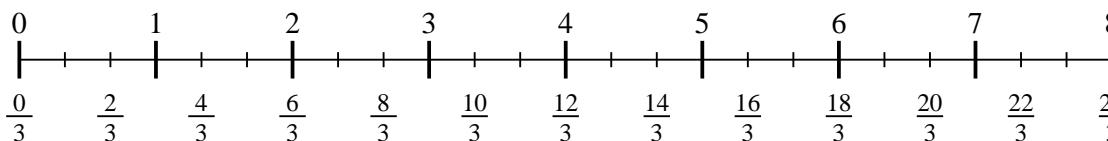
4) $2 \div \frac{1}{5}$



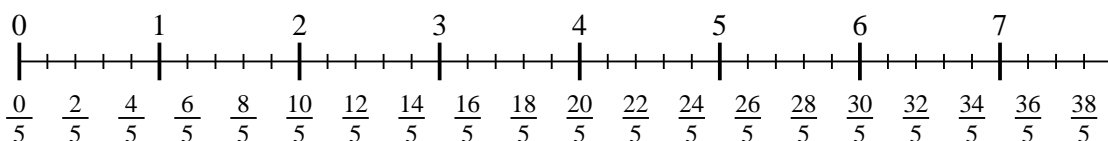
5) $2 \div \frac{1}{3}$



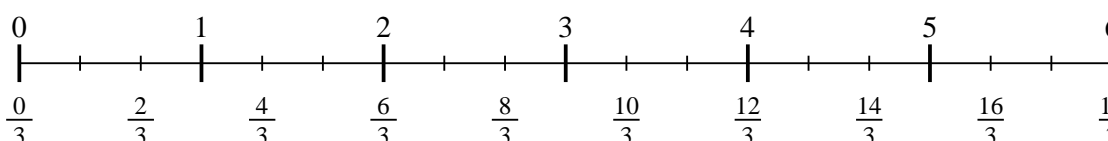
6) $7 \div \frac{1}{3}$



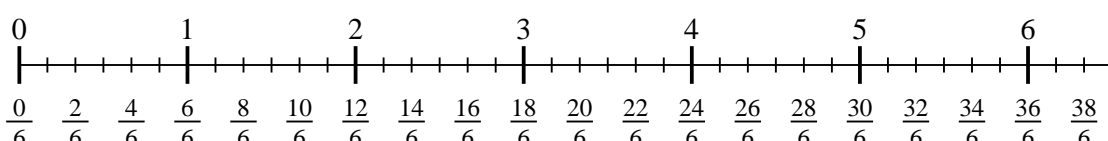
7) $7 \div \frac{1}{5}$



8) $5 \div \frac{1}{3}$



9) $6 \div \frac{1}{6}$



1. _____
2. _____
3. _____
4. _____
5. _____
6. _____
7. _____
8. _____
9. _____