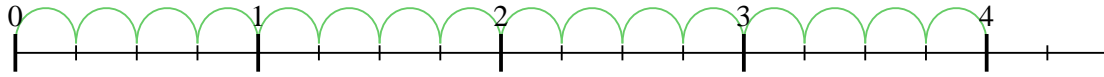


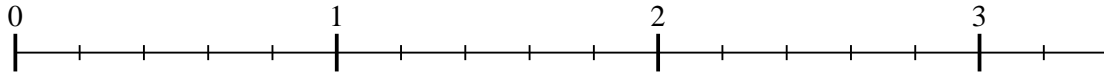


Usa la recta numérica para resolver cada problema. El primero ya está marcado como ejemplo.

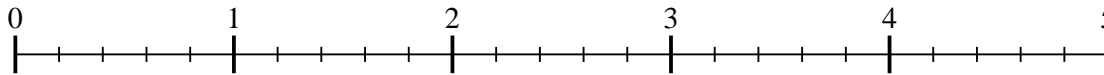
1) $4 \div \frac{1}{4}$



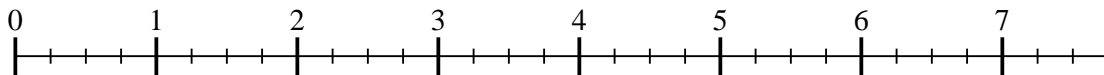
2) $3 \div \frac{1}{5}$



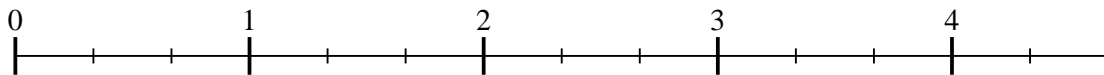
3) $4 \div \frac{1}{5}$



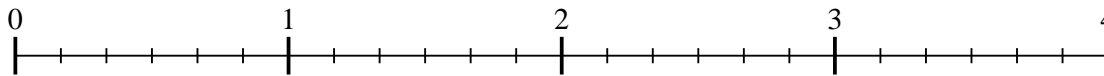
4) $7 \div \frac{1}{4}$



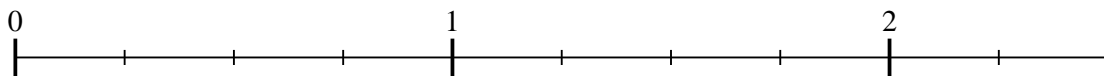
5) $4 \div \frac{1}{3}$



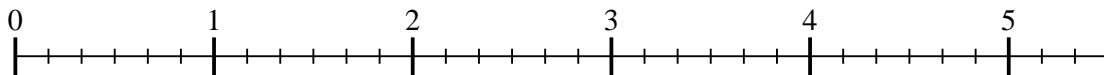
6) $3 \div \frac{1}{6}$



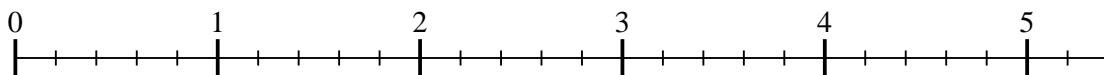
7) $2 \div \frac{1}{4}$



8) $5 \div \frac{1}{6}$



9) $5 \div \frac{1}{5}$

**Respuestas**

1. _____

2. _____

3. _____

4. _____

5. _____

6. _____

7. _____

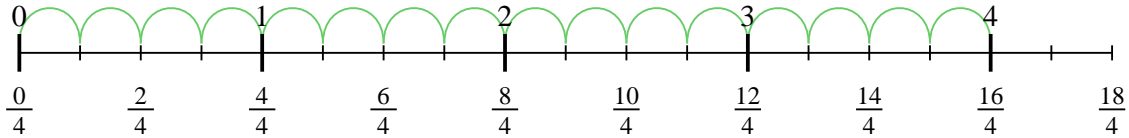
8. _____

9. _____

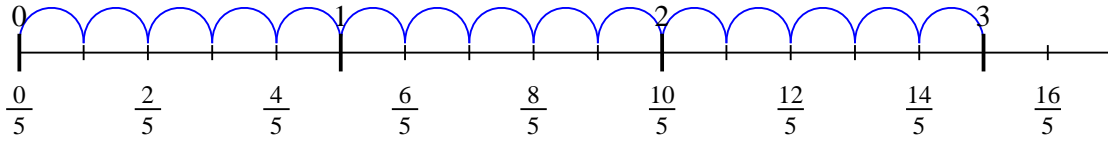


Usa la recta numérica para resolver cada problema. El primero ya está marcado como ejemplo.

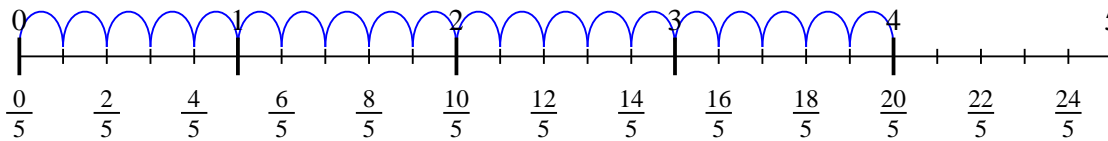
1) $4 \div \frac{1}{4}$



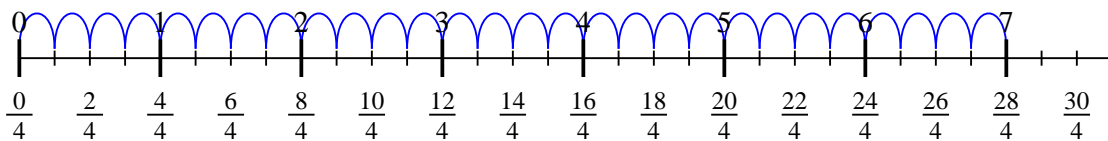
2) $3 \div \frac{1}{5}$



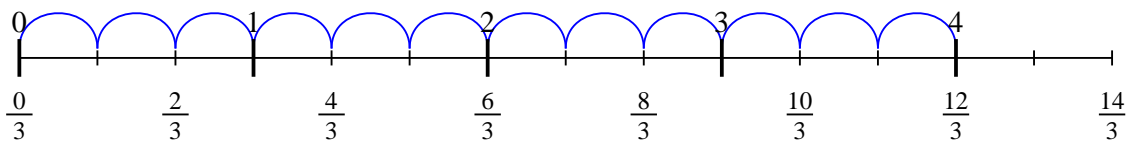
3) $4 \div \frac{1}{5}$



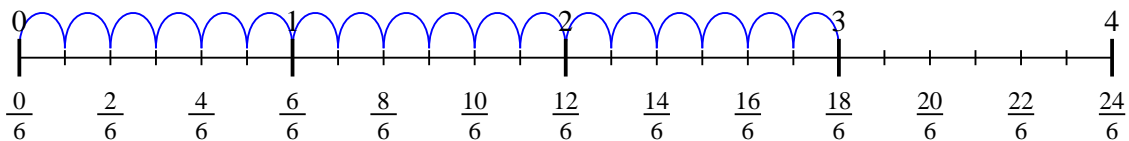
4) $7 \div \frac{1}{4}$



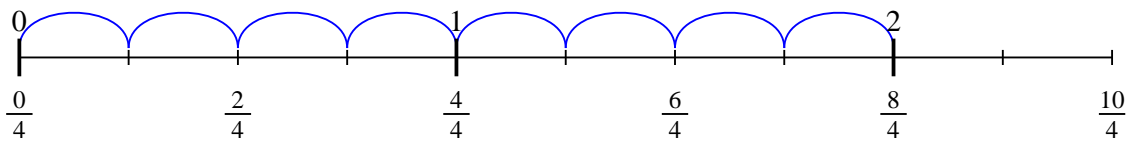
5) $4 \div \frac{1}{3}$



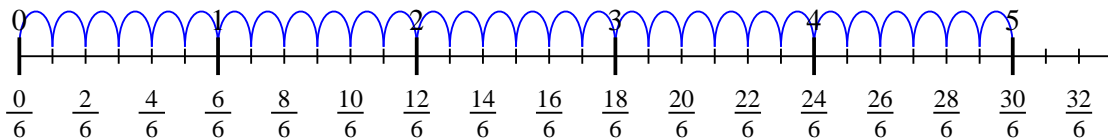
6) $3 \div \frac{1}{6}$



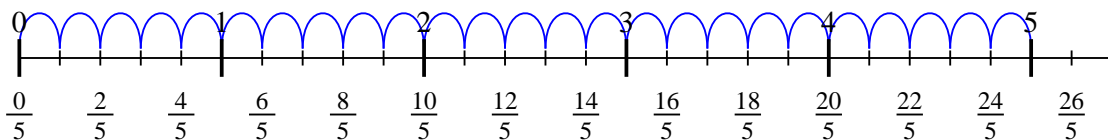
7) $2 \div \frac{1}{4}$



8) $5 \div \frac{1}{6}$



9) $5 \div \frac{1}{5}$



Respuestas

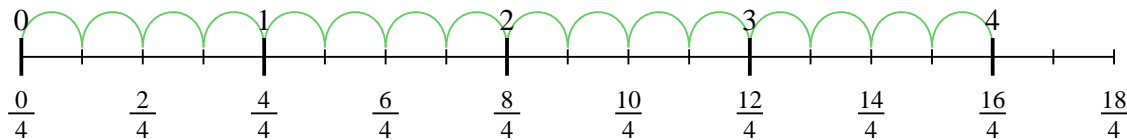
1. 16
2. 15
3. 20
4. 28
5. 12
6. 18
7. 8
8. 30
9. 25



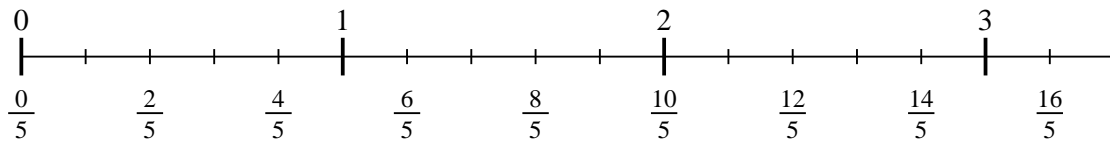
Usa la recta numérica para resolver cada problema. El primero ya está marcado como ejemplo.

Respuestas


1) $4 \div \frac{1}{4}$



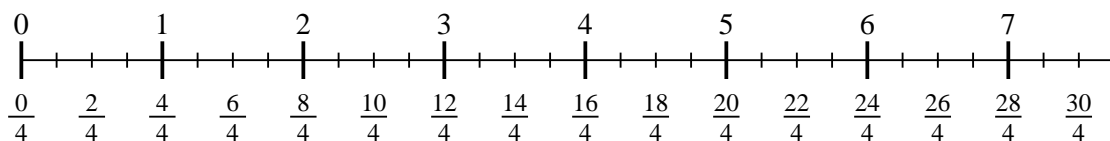
2) $3 \div \frac{1}{5}$



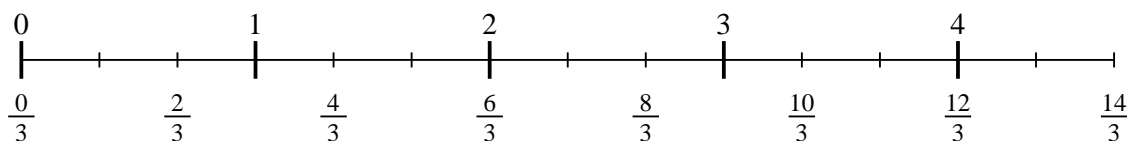
3) $4 \div \frac{1}{5}$



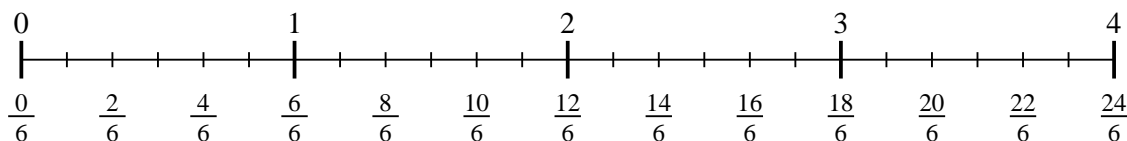
4) $7 \div \frac{1}{4}$



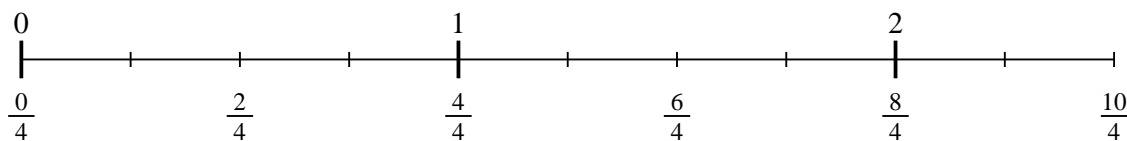
5) $4 \div \frac{1}{3}$



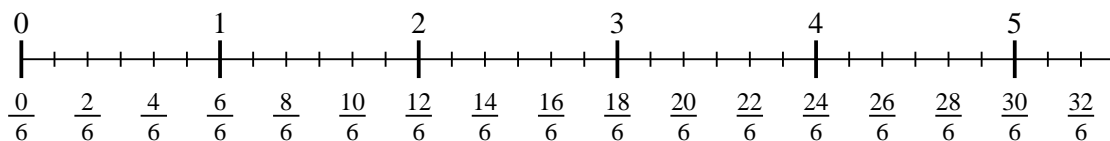
6) $3 \div \frac{1}{6}$



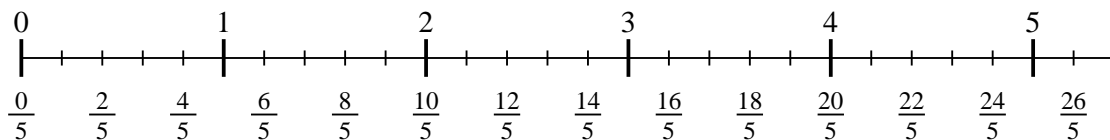
7) $2 \div \frac{1}{4}$



8) $5 \div \frac{1}{6}$



9) $5 \div \frac{1}{5}$



1. _____

2. _____

3. _____

4. _____

5. _____

6. _____

7. _____

8. _____

9. _____