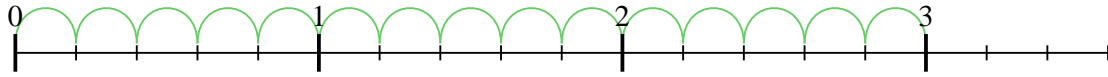




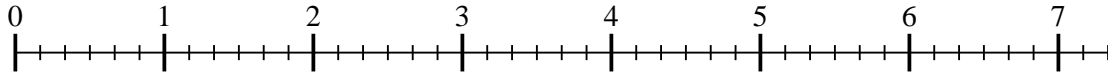
Usa la recta numérica para resolver cada problema. El primero ya está marcado como ejemplo.

Respuestas

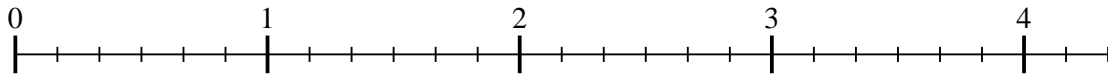
1) $3 \div \frac{1}{5}$



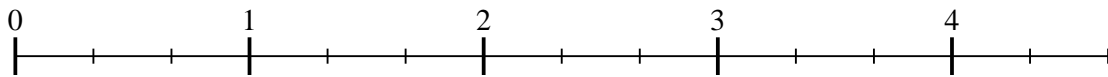
2) $7 \div \frac{1}{6}$



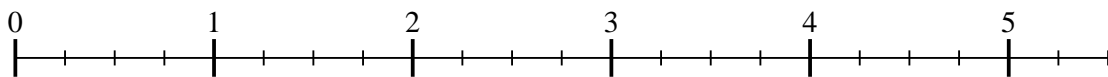
3) $4 \div \frac{1}{6}$



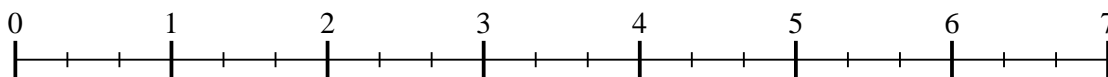
4) $4 \div \frac{1}{3}$



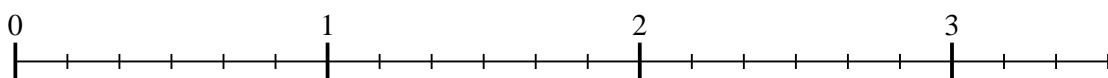
5) $5 \div \frac{1}{4}$



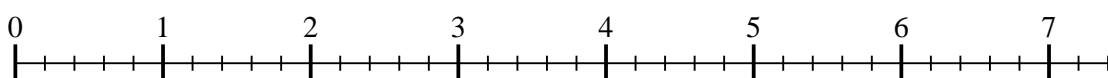
6) $6 \div \frac{1}{3}$



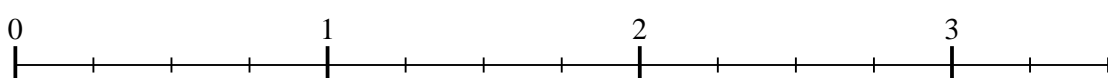
7) $3 \div \frac{1}{6}$



8) $7 \div \frac{1}{5}$



9) $3 \div \frac{1}{4}$



1. _____

2. _____

3. _____

4. _____

5. _____

6. _____

7. _____

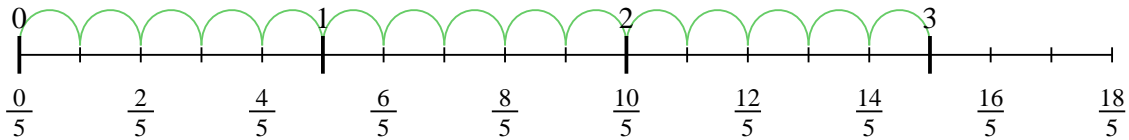
8. _____

9. _____

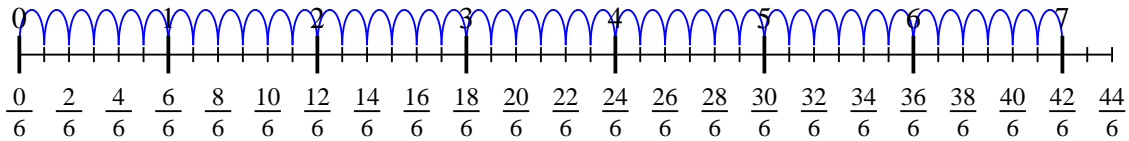


Usa la recta numérica para resolver cada problema. El primero ya está marcado como ejemplo.

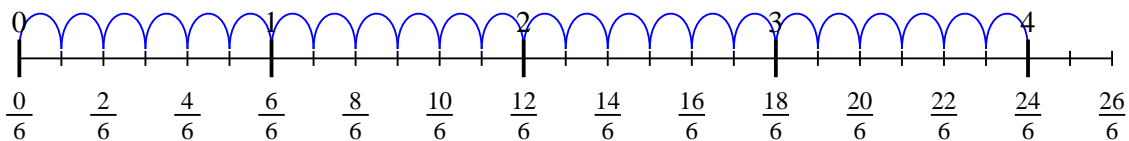
1) $3 \div \frac{1}{5}$



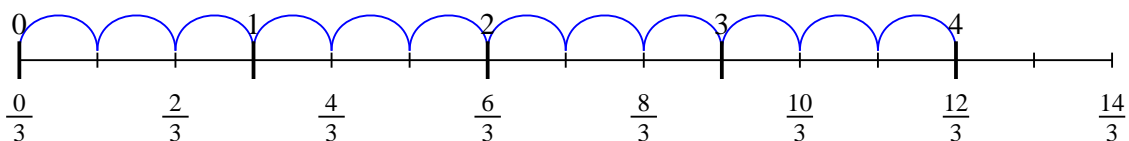
2) $7 \div \frac{1}{6}$



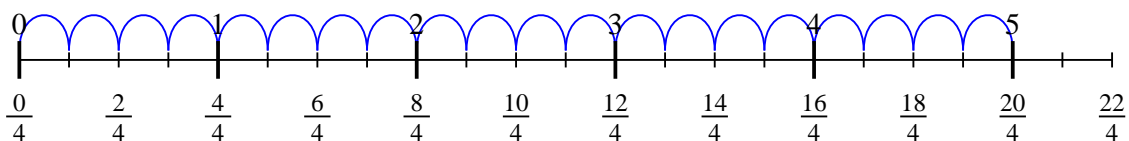
3) $4 \div \frac{1}{6}$



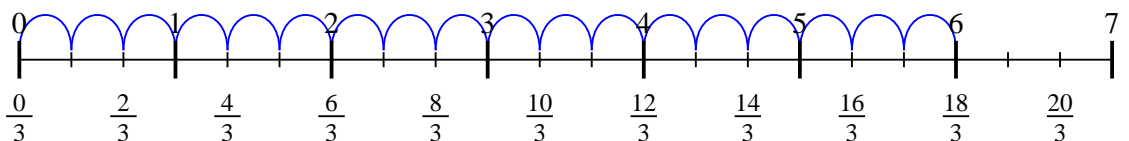
4) $4 \div \frac{1}{3}$



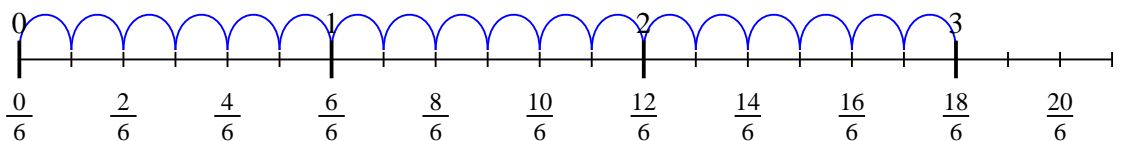
5) $5 \div \frac{1}{4}$



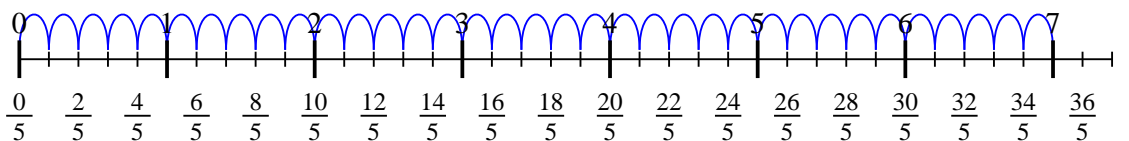
6) $6 \div \frac{1}{3}$



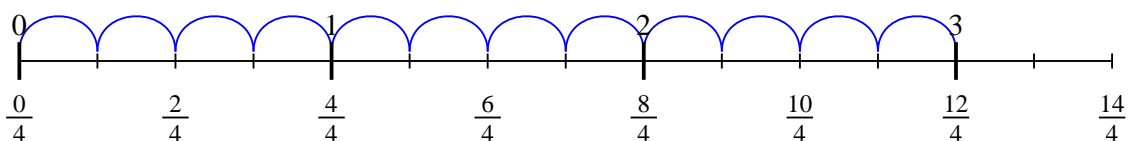
7) $3 \div \frac{1}{6}$



8) $7 \div \frac{1}{5}$



9) $3 \div \frac{1}{4}$



Respuestas

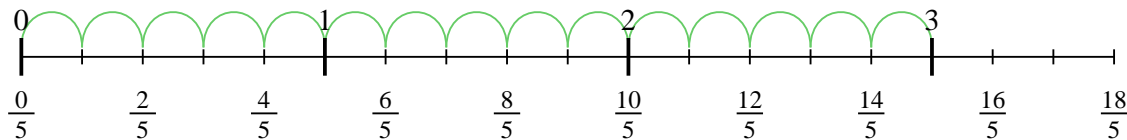
1. 15
2. 42
3. 24
4. 12
5. 20
6. 18
7. 18
8. 35
9. 12



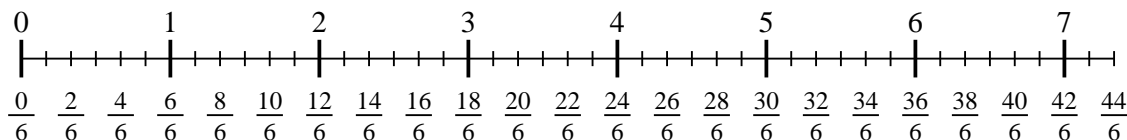
Usa la recta numérica para resolver cada problema. El primero ya está marcado como ejemplo.

Respuestas

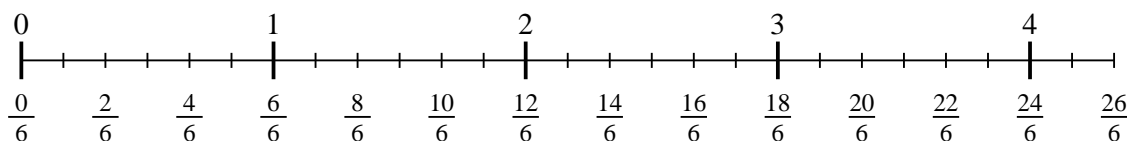
1) $3 \div \frac{1}{5}$



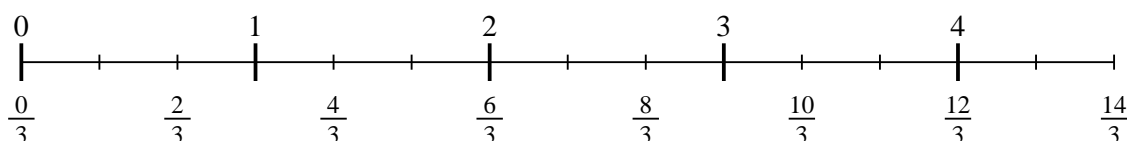
2) $7 \div \frac{1}{6}$



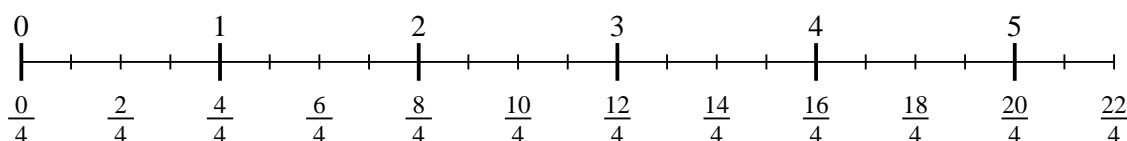
3) $4 \div \frac{1}{6}$




4) $4 \div \frac{1}{3}$



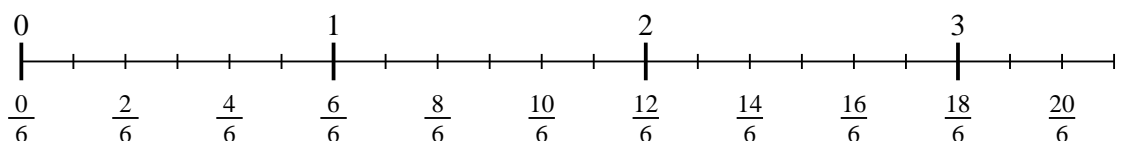
5) $5 \div \frac{1}{4}$



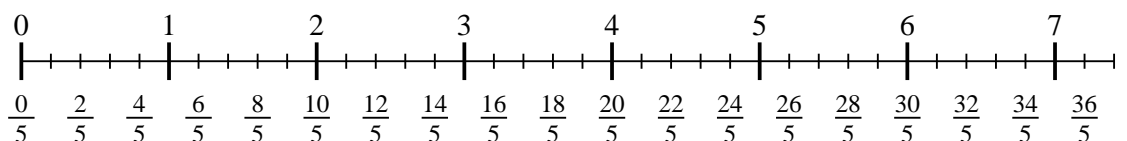
6) $6 \div \frac{1}{3}$



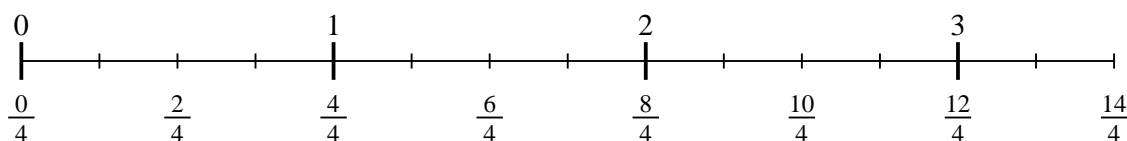
7) $3 \div \frac{1}{6}$



8) $7 \div \frac{1}{5}$



9) $3 \div \frac{1}{4}$



1. _____

2. _____

3. _____

4. _____

5. _____

6. _____

7. _____

8. _____

9. _____