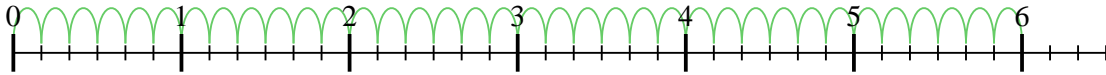




Usa la recta numérica para resolver cada problema. El primero ya está marcado como ejemplo.

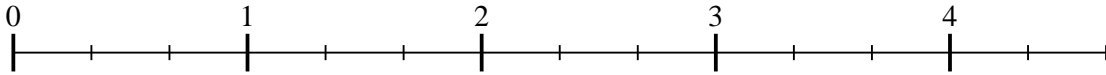
**Respuestas**

1)  $6 \div \frac{1}{6}$



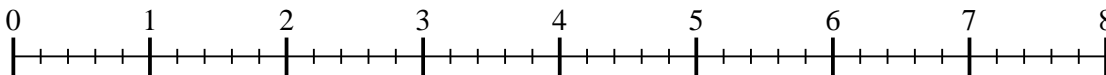
1. \_\_\_\_\_

2)  $4 \div \frac{1}{3}$



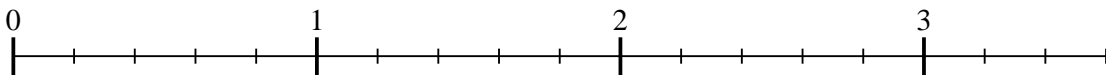
2. \_\_\_\_\_

3)  $7 \div \frac{1}{5}$



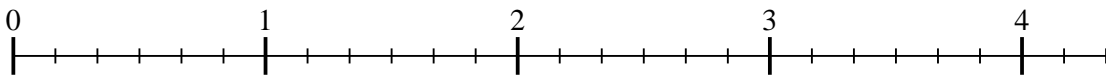
3. \_\_\_\_\_

4)  $3 \div \frac{1}{5}$



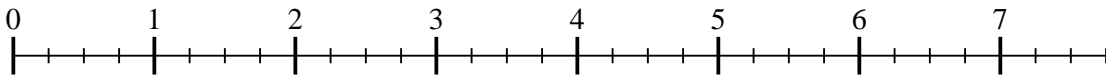
4. \_\_\_\_\_

5)  $4 \div \frac{1}{6}$



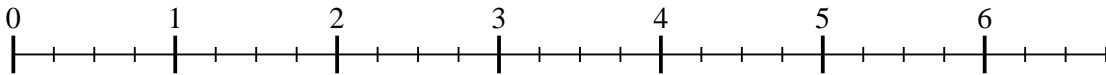
5. \_\_\_\_\_

6)  $7 \div \frac{1}{4}$



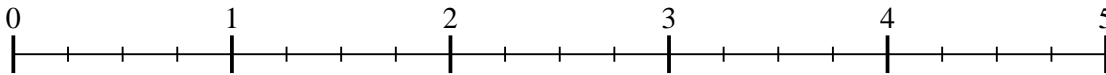
6. \_\_\_\_\_

7)  $6 \div \frac{1}{4}$



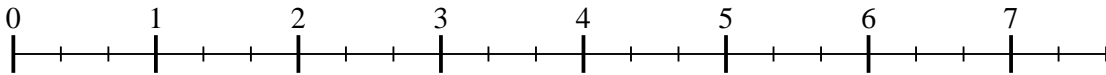
7. \_\_\_\_\_

8)  $4 \div \frac{1}{4}$



8. \_\_\_\_\_

9)  $7 \div \frac{1}{3}$

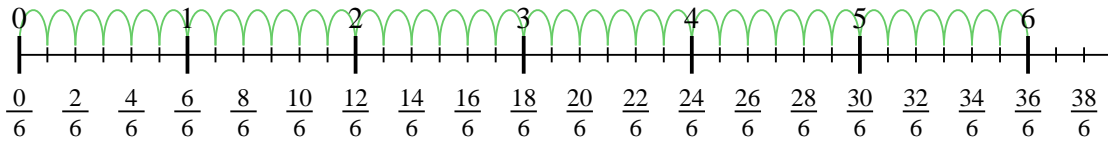


9. \_\_\_\_\_

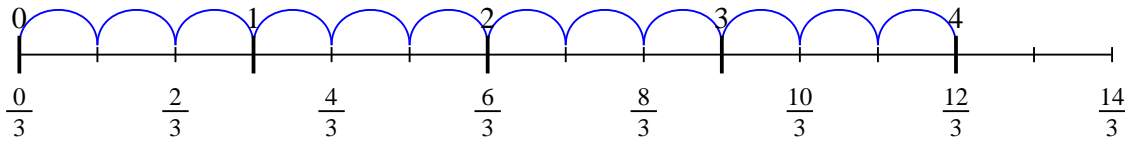


Usa la recta numérica para resolver cada problema. El primero ya está marcado como ejemplo.

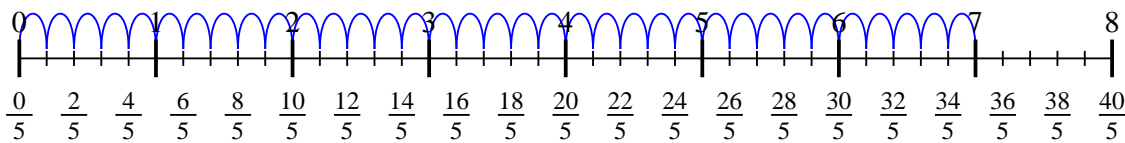
1)  $6 \div \frac{1}{6}$



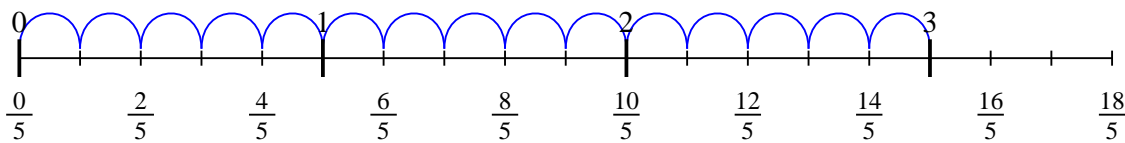
2)  $4 \div \frac{1}{3}$



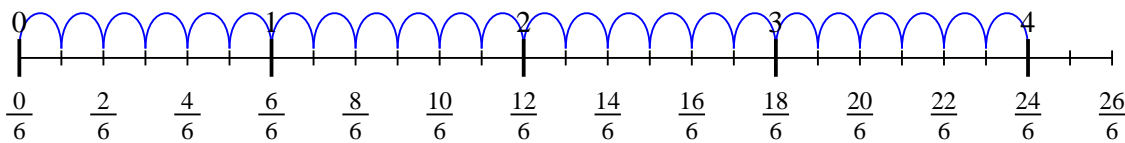
3)  $7 \div \frac{1}{5}$



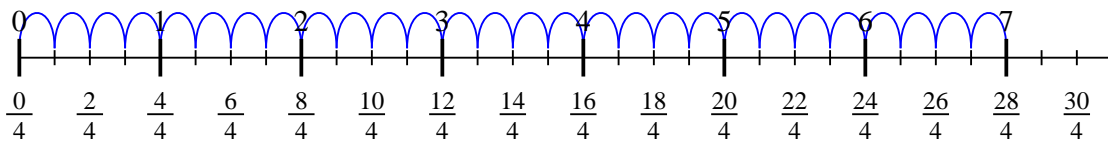
4)  $3 \div \frac{1}{5}$



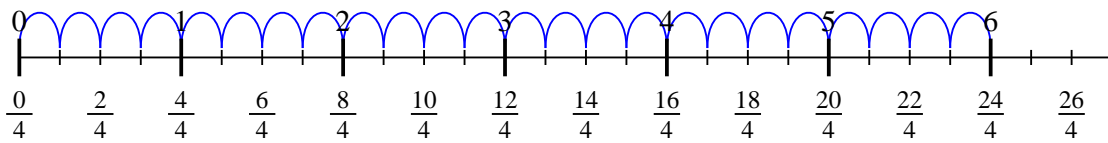
5)  $4 \div \frac{1}{6}$



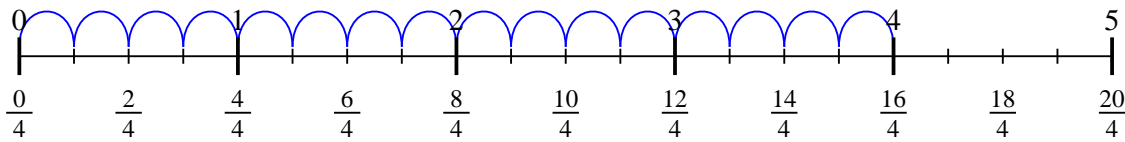
6)  $7 \div \frac{1}{4}$



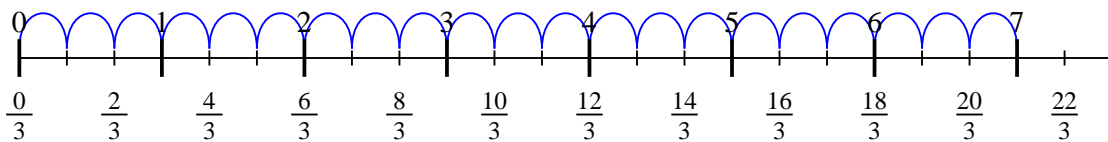
7)  $6 \div \frac{1}{4}$



8)  $4 \div \frac{1}{4}$



9)  $7 \div \frac{1}{3}$



**Respuestas**

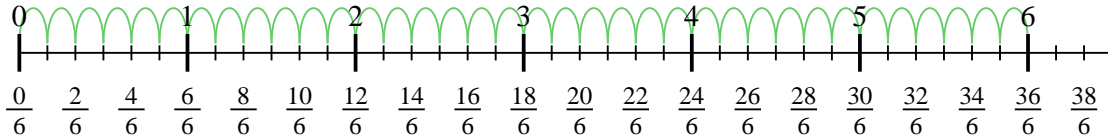
1. 36
2. 12
3. 35
4. 15
5. 24
6. 28
7. 24
8. 16
9. 21



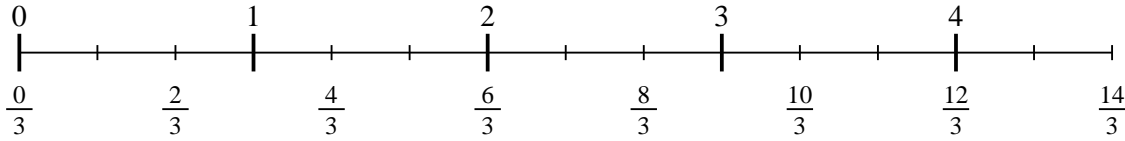
Usa la recta numérica para resolver cada problema. El primero ya está marcado como ejemplo.

**Respuestas**

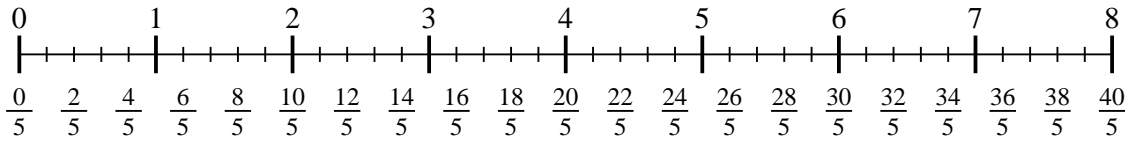
1)  $6 \div \frac{1}{6}$



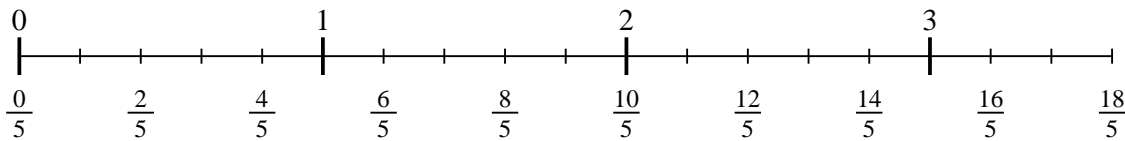
2)  $4 \div \frac{1}{3}$



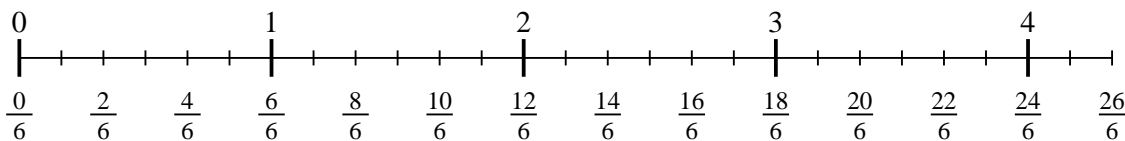
3)  $7 \div \frac{1}{5}$



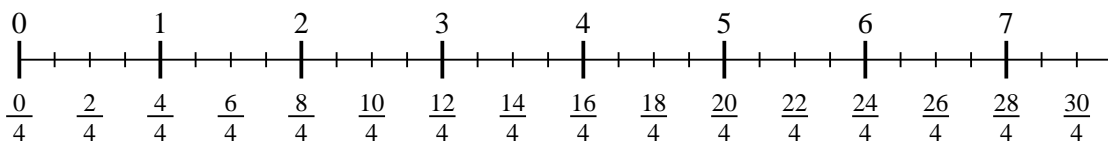
4)  $3 \div \frac{1}{5}$



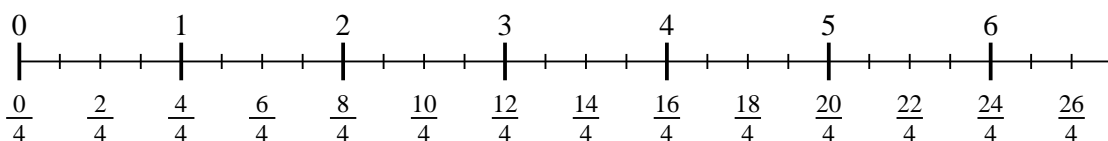
5)  $4 \div \frac{1}{6}$



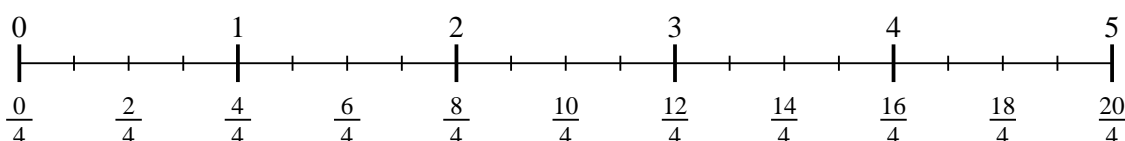
6)  $7 \div \frac{1}{4}$



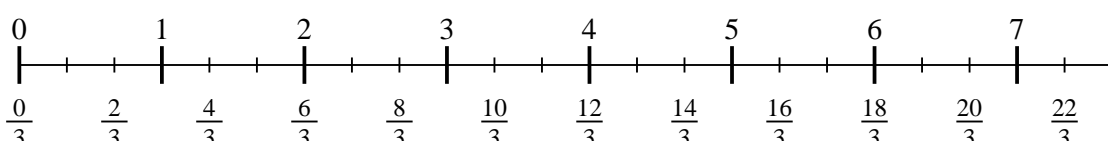
7)  $6 \div \frac{1}{4}$



8)  $4 \div \frac{1}{4}$



9)  $7 \div \frac{1}{3}$



1. \_\_\_\_\_
2. \_\_\_\_\_
3. \_\_\_\_\_
4. \_\_\_\_\_
5. \_\_\_\_\_
6. \_\_\_\_\_
7. \_\_\_\_\_
8. \_\_\_\_\_
9. \_\_\_\_\_