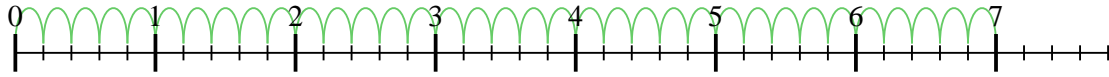




Usa la recta numérica para resolver cada problema. El primero ya está marcado como ejemplo.

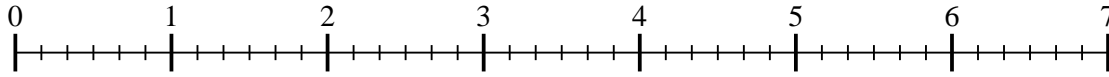
Respuestas

1) $7 \div \frac{1}{5}$



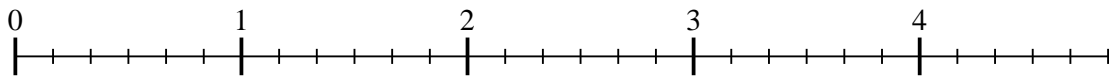
1. _____

2) $6 \div \frac{1}{6}$



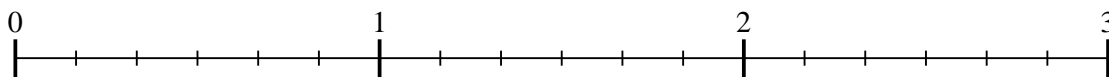
2. _____

3) $4 \div \frac{1}{6}$



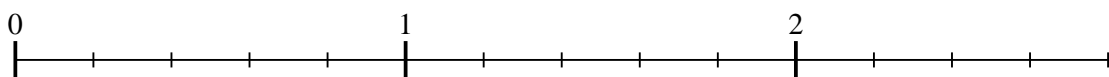
3. _____

4) $2 \div \frac{1}{6}$



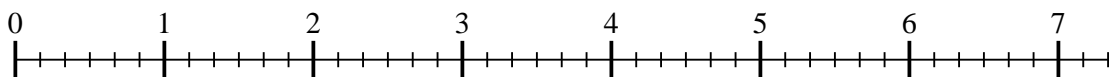
4. _____

5) $2 \div \frac{1}{5}$



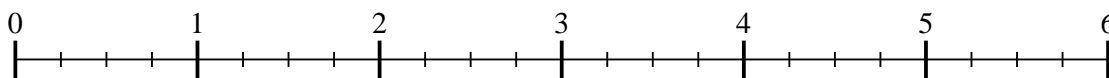
5. _____

6) $7 \div \frac{1}{6}$




6. _____

7) $5 \div \frac{1}{4}$



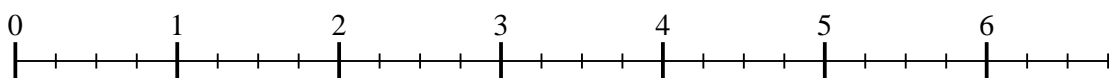
7. _____

8) $2 \div \frac{1}{3}$



8. _____

9) $6 \div \frac{1}{4}$

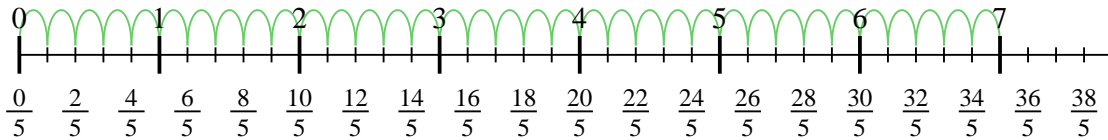


9. _____

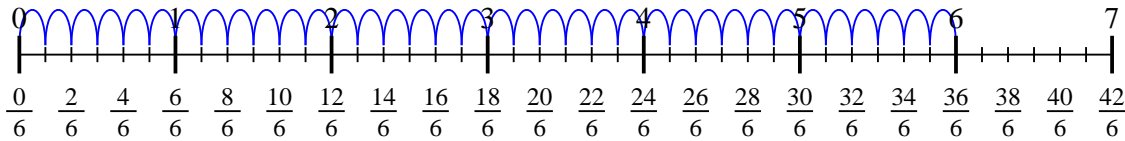


Usa la recta numérica para resolver cada problema. El primero ya está marcado como ejemplo.

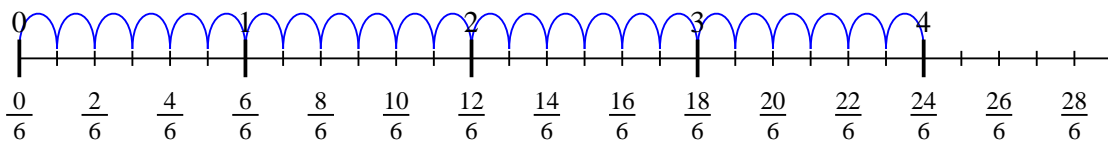
1) $7 \div \frac{1}{5}$



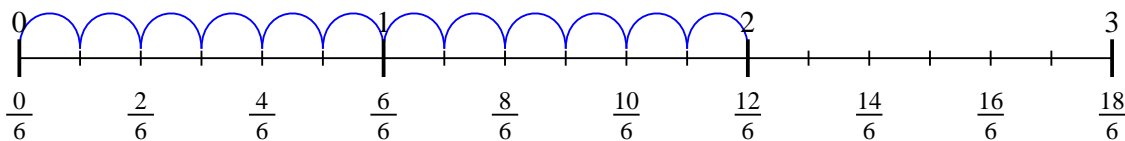
2) $6 \div \frac{1}{6}$



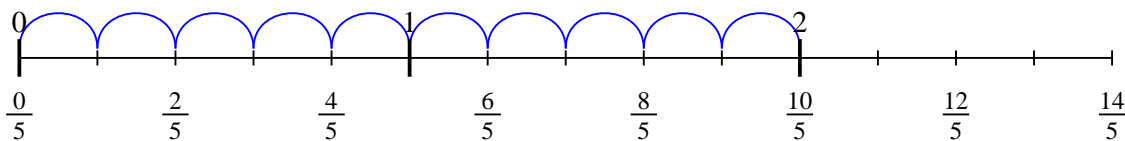
3) $4 \div \frac{1}{6}$



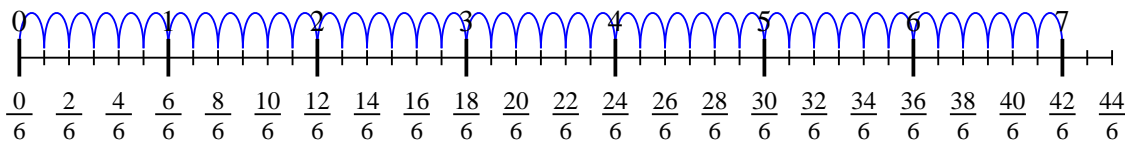
4) $2 \div \frac{1}{6}$



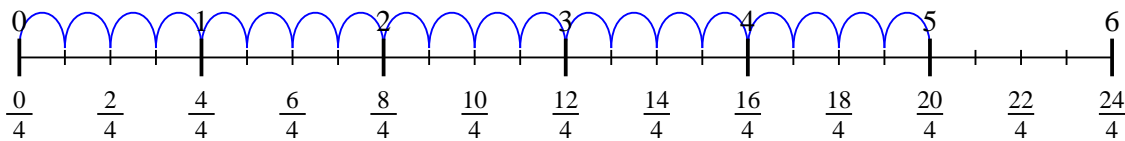
5) $2 \div \frac{1}{5}$



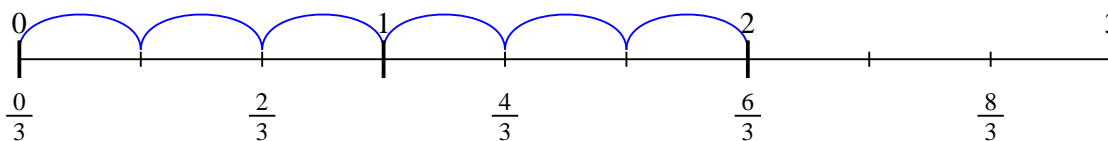
6) $7 \div \frac{1}{6}$



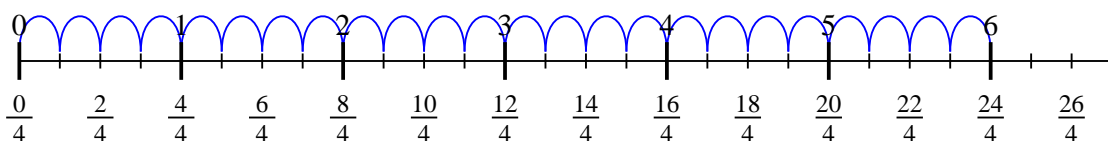
7) $5 \div \frac{1}{4}$



8) $2 \div \frac{1}{3}$



9) $6 \div \frac{1}{4}$



Respuestas

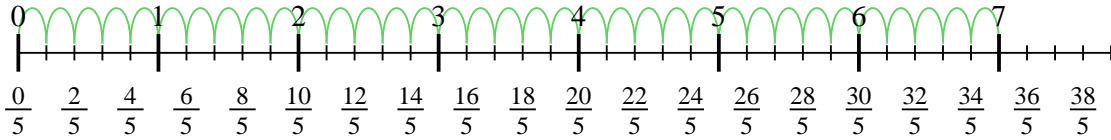
1. 35
2. 36
3. 24
4. 12
5. 10
6. 42
7. 20
8. 6
9. 24



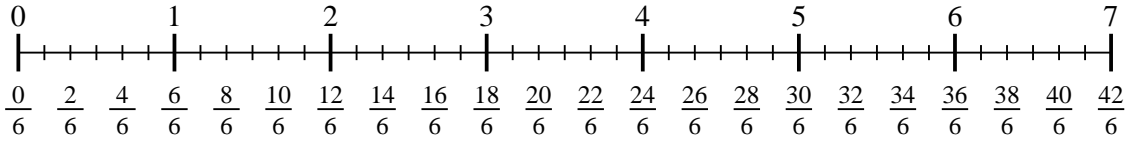
Usa la recta numérica para resolver cada problema. El primero ya está marcado como ejemplo.

Respuestas

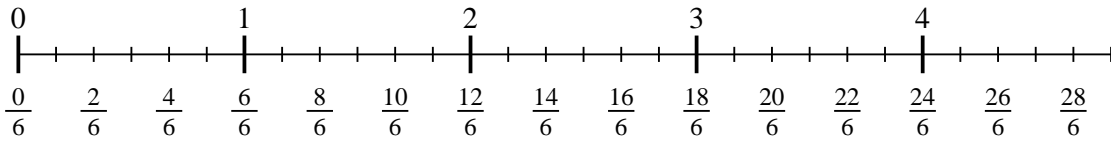
1) $7 \div \frac{1}{5}$



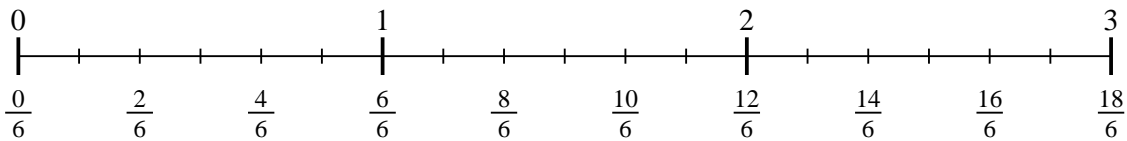
2) $6 \div \frac{1}{6}$



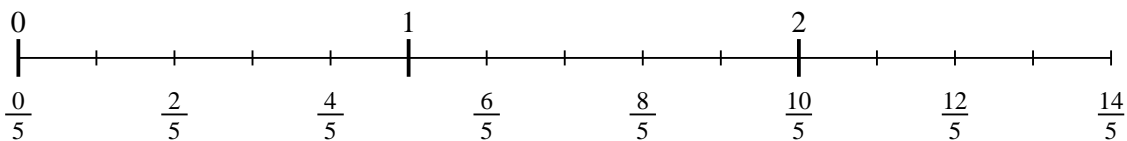
3) $4 \div \frac{1}{6}$



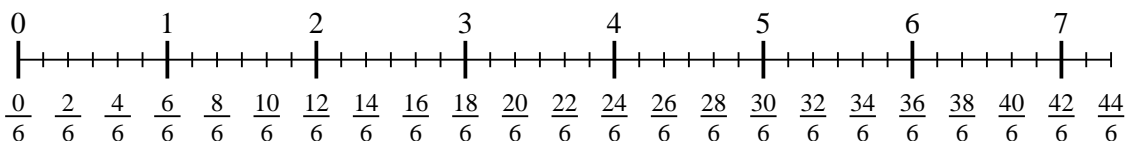
4) $2 \div \frac{1}{6}$



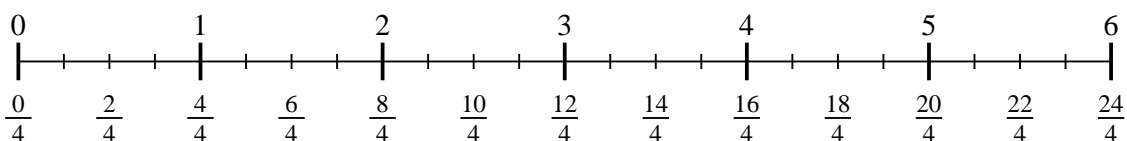
5) $2 \div \frac{1}{5}$



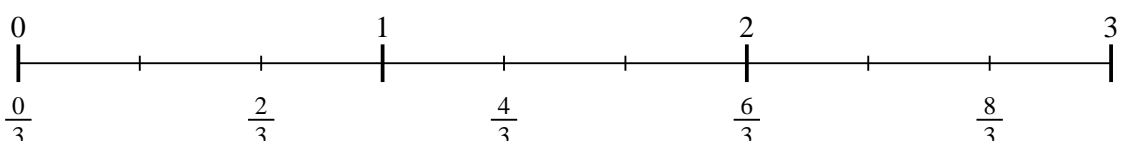
6) $7 \div \frac{1}{6}$



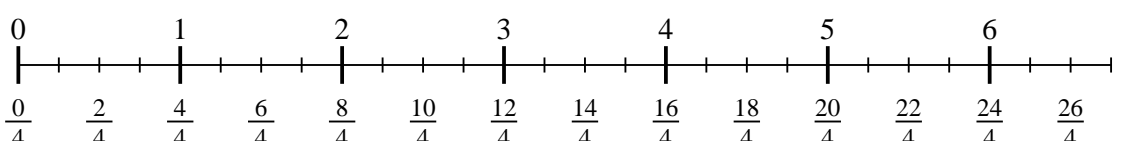
7) $5 \div \frac{1}{4}$



8) $2 \div \frac{1}{3}$



9) $6 \div \frac{1}{4}$



- 1. _____
- 2. _____
- 3. _____
- 4. _____
- 5. _____
- 6. _____
- 7. _____
- 8. _____
- 9. _____