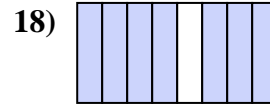
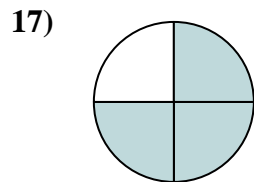
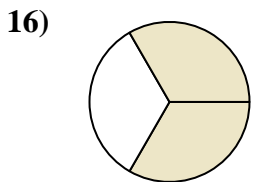
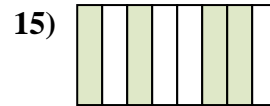
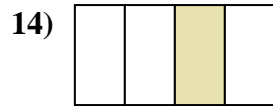
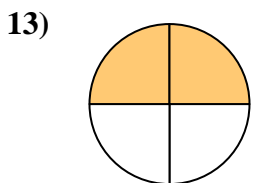
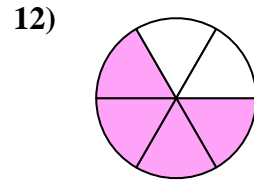
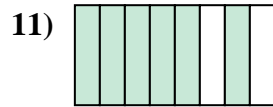
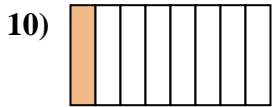
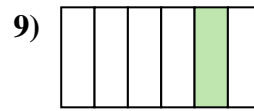
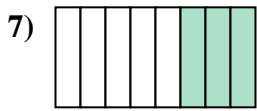
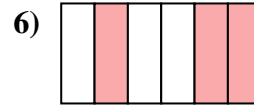
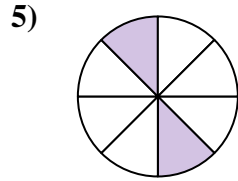
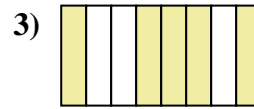
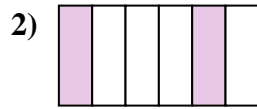
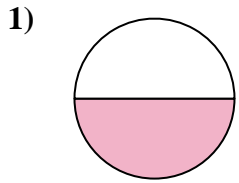




Escribe la cantidad sombreada como una fracción de la cantidad entera.

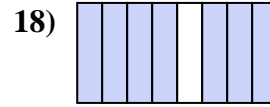
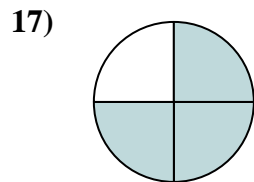
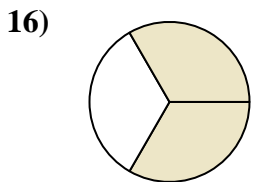
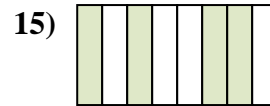
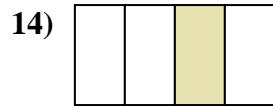
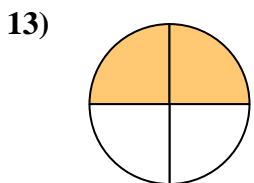
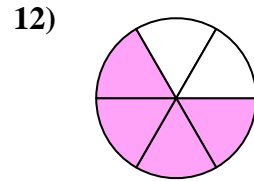
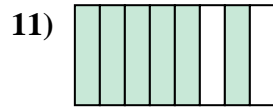
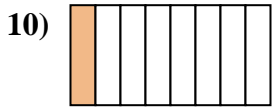
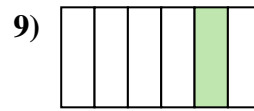
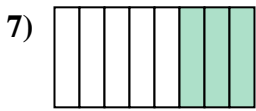
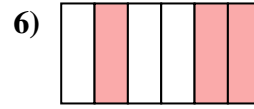
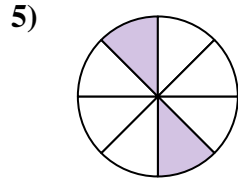
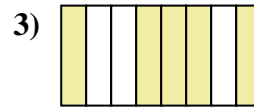
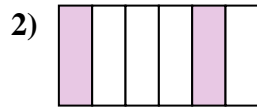
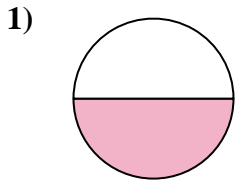


Respuestas

1. _____
2. _____
3. _____
4. _____
5. _____
6. _____
7. _____
8. _____
9. _____
10. _____
11. _____
12. _____
13. _____
14. _____
15. _____
16. _____
17. _____
18. _____



Escribe la cantidad sombreada como una fracción de la cantidad entera.



Respuestas

1. 1/2

2. 2/6

3. 5/8

4. 5/6

5. 2/8

6. 3/6

7. 3/8

8. 1/3

9. 1/6

10. 1/8

11. 6/8

12. 4/6

13. 2/4

14. 1/4

15. 4/8

16. 2/3

17. 3/4

18. 7/8