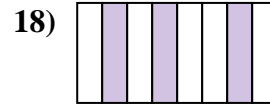
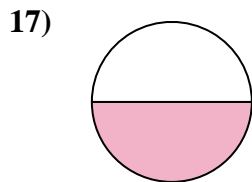
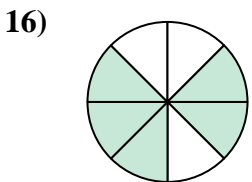

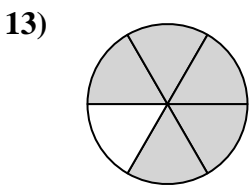
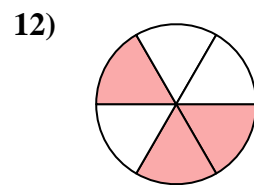

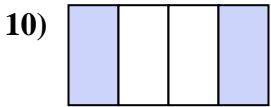
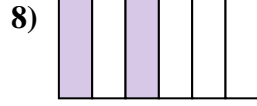
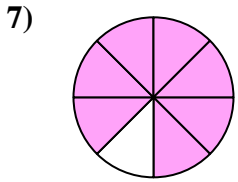
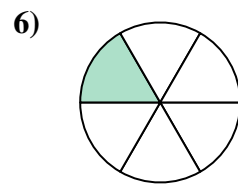
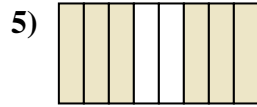

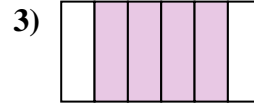
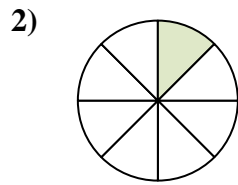
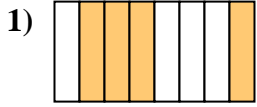




Escribe la cantidad sombreada como una fracción de la cantidad entera.

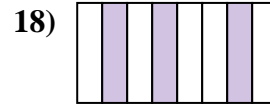
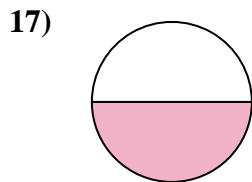
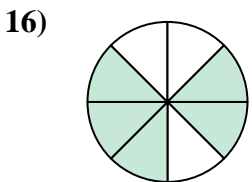
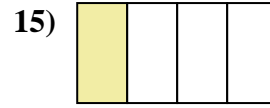
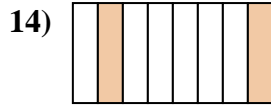
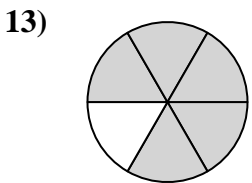
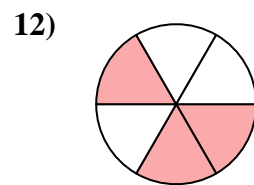

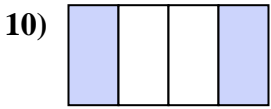
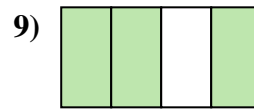
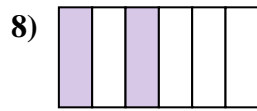
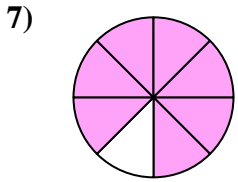
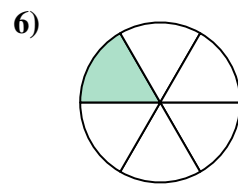
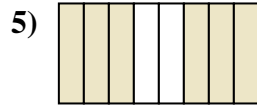
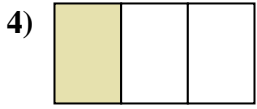
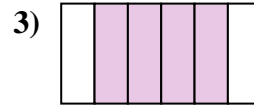
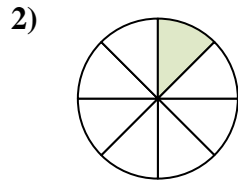
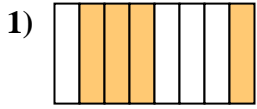


Respuestas

1. _____
2. _____
3. _____
4. _____
5. _____
6. _____
7. _____
8. _____
9. _____
10. _____
11. _____
12. _____
13. _____
14. _____
15. _____
16. _____
17. _____
18. _____



Escribe la cantidad sombreada como una fracción de la cantidad entera.



Respuestas

1. 4/8

2. 1/8

3. 4/6

4. 1/3

5. 6/8

6. 1/6

7. 7/8

8. 2/6

9. 3/4

10. 2/4

11. 2/3

12. 3/6

13. 5/6

14. 2/8

15. 1/4

16. 5/8

17. 1/2

18. 3/8